



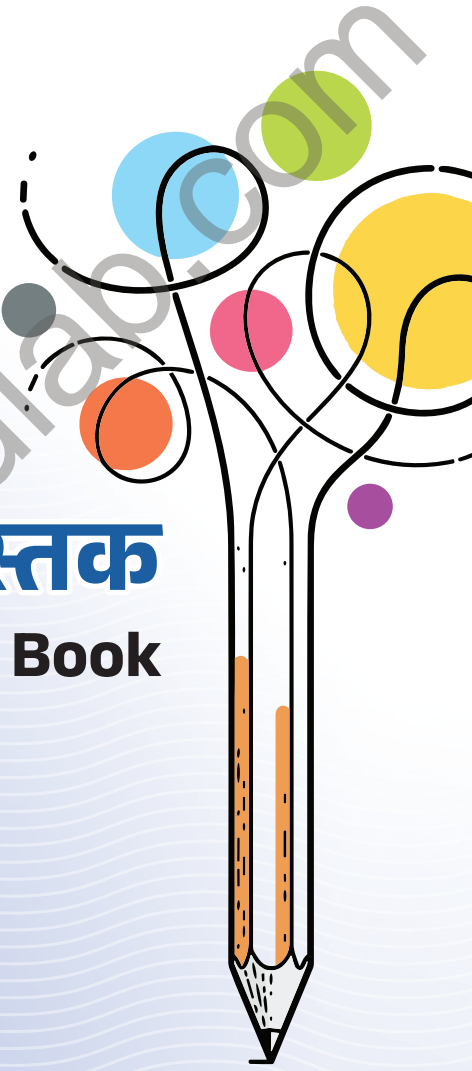

प्रश्न बैंक-सह-उत्तर पुस्तक

Question Bank-Cum-Answer Book

2023

Class-12

गणित
(MATHEMATICS)



झारखण्ड शैक्षिक अनुसंधान एवं प्रशिक्षण परिषद्, राँची
Jharkhand Council of Educational Research and Training, Ranchi

प्रश्न बैंक-सह-उत्तर पुस्तक
Question Bank-Cum-Answer Book

Class - 12

गणित
Mathematics



2023

झारखंड शैक्षिक अनुसंधान एवं प्रशिक्षण परिषद्, राँची
Jharkhand Council of Educational Research and Training, Ranchi

© झारखंड शैक्षिक अनुसंधान एवं प्रशिक्षण परिषद्, राँची, झारखंड

सर्वाधिकार सुरक्षित

- ◆ प्रकाशक की पूर्व अनुमति के बिना इस पुस्तक के किसी भाग को छापना तथा इलेक्ट्रॉनिकी, मशीनी, छायाप्रतिलिपि अथवा किसी अन्य विधि से पुनः प्रयोग द्वारा उसका संग्रहण अथवा प्रसारण वर्जित है।
- ◆ प्रकाशक की पूर्व अनुमति के बिना यह पुस्तक अपने मूल आवरण या जिल्द के साथ अथवा किसी अन्य प्रकार से व्यापार द्वारा उधारी या किराए पर न दी जाएगी, न बेची जाएगी।
- ◆ क्रय-विक्रय दण्डनीय अपराध

झारखंड शैक्षिक अनुसंधान एवं प्रशिक्षण परिषद्, राँची, झारखंड द्वारा प्रकाशित

प्राक्कथन

बच्चों के लिए निर्धारित अधिगम प्रतिफल प्राप्त करने का मार्ग सरल एवं सुगम होना आवश्यक है। इस उद्देश्य को ध्यान में रखते हुए झारखंड शैक्षिक अनुसंधान एवं प्रशिक्षण परिषद्, राँची, झारखंड के द्वारा कक्षा 12 के सभी विषयों के लिए प्रश्न बैंक-सह-उत्तर पुस्तक का निर्माण बच्चों के अधिगम कौशल को सुगमतापूर्वक विकसित करने एवं झारखंड अधिविद्य परिषद् द्वारा आयोजित वार्षिक इंटरमीडिएट परीक्षा के लिए उन्हें तैयार करने के उद्देश्य से किया गया है। इस प्रश्न बैंक-सह-उत्तर पुस्तक में सरल भाषा एवं रुचिकर ढंग से विषय-वस्तु को स्पष्ट करते हुए प्रश्नोत्तर दिए गए हैं। इस प्रश्न बैंक-सह-उत्तर पुस्तक के माध्यम से बच्चों में न केवल ज्ञानजन्य प्रतिभा का विकास होगा बल्कि आज के इस प्रतियोगिता के दौर में भी वे अनुकूल सफलता पाएंगे। हमारे प्रयत्न की सफलता इस बात पर निर्भर करती है कि विद्यालय के शिक्षकवृन्द बच्चों की कल्पनाओं के साथ कितना जुड़ पाते हैं और विभिन्न प्रकार के प्रश्नोत्तरों को सीखने-सिखाने के दौरान अपने अनुभवों के साथ-साथ बच्चों के विचारों के साथ कैसे सामंजस्य बनाते हैं।

इस प्रश्न बैंक-सह-उत्तर पुस्तक में झारखंड अधिविद्य परिषद् द्वारा आयोजित वार्षिक इंटरमीडिएट परीक्षा में पूछे जाने वाले प्रश्नों के विविध प्रकारों यथा- बहुवैकल्पिक, अतिलघु उत्तरीय, लघु उत्तरीय एवं दीर्घ उत्तरीय प्रश्न आदि के अंतर्गत पर्याप्त मात्रा में प्रश्नोत्तर समाहित किए गए हैं ताकि इसके अध्ययन से छात्रों में ना केवल विषय-वस्तु की समझ विकसित हो बल्कि उन्हें सीखने के प्रतिफल की भी प्राप्ति हो, साथ ही वार्षिक इंटरमीडिएट परीक्षा के लिए उनकी अच्छी तैयारी हो सके और वे परीक्षा में बेहतर प्रदर्शन करते हुए सफलता प्राप्त कर सकें।

अंत में मैं इन पुस्तकों के लेखकों के प्रति आभार व्यक्त करता हूँ।

शुभकामनाओं के साथ।

के० रवि कुमार भा.प्र.से.

सचिव

स्कूली शिक्षा एवं साक्षरता विभाग, झारखण्ड

भूमिका

प्रिय शिक्षक एवं विद्यार्थी,

जोहार !

हमें कक्षा 12 के विभिन्न विषयों के प्रश्न बैंक-सह-उत्तर पुस्तक से आपका परिचय कराने में प्रसन्नता हो रही है। इस प्रश्न बैंक-सह-उत्तर पुस्तक में झारखण्ड शैक्षिक अनुसन्धान एवं प्रशिक्षण परिषद्, राँची द्वारा प्रकाशित पाठ्यपुस्तकों के विषयवार एवं अध्यायवार अधिगम बिन्दुओं को समायोजित करते हुए झारखण्ड अधिविद्य परिषद् द्वारा आयोजित वार्षिक इंटरमीडिएट परीक्षा में पूछे जानेवाले प्रश्नों के विविध प्रकारों के अंतर्गत पर्याप्त मात्रा में प्रश्नों का समावेश किया गया है। इस विषय आधारित प्रश्न बैंक-सह-उत्तर पुस्तक के निर्माण का उद्देश्य शिक्षण अधिगम प्रक्रिया को और अधिक रुचिकर, सरल एवं प्रभावशाली बनाना तथा विद्यार्थियों को वार्षिक इंटरमीडिएट परीक्षा की तैयारियों में सहयोग प्रदान करना है, जिससे सकारात्मक रूप से छात्रों को सीखने के प्रतिफल प्राप्त हों और वार्षिक इंटरमीडिएट परीक्षा में वे बेहतर प्रदर्शन कर सकें। राज्य के विभिन्न जिलों से चयनित अनुभवी शिक्षकों के द्वारा इस प्रश्न बैंक-सह-उत्तर पुस्तक का निर्माण किया गया है।

इस प्रश्न बैंक-सह-उत्तर पुस्तक की प्रमुख विशेषताएँ यह हैं कि इनमें प्रश्नों के उत्तर को सरल भाषा में प्रस्तुत करते हुए वैचारिक समझ (Conceptual Understanding) विकसित करने पर जोर दिया गया है। साथ ही इन पुस्तकों में झारखण्ड अधिविद्य परिषद् द्वारा आयोजित वार्षिक इंटरमीडिएट परीक्षा – 2023 के प्रश्नोत्तर को भी समाहित किया गया है। इन पुस्तकों के माध्यम से न केवल विद्यार्थियों की प्रतिभा में निखार आएगा बल्कि वर्तमान समय के प्रतियोगिताओं के इस दौर में वे अनुकूल एवं अपेक्षित सफलता प्राप्त करने में भी सक्षम हो सकेंगे। आशा है कि यह प्रश्न बैंक-सह-उत्तर पुस्तक आपको पसंद आएगी एवं आपके लिए उपयोगी सिद्ध होगी।

शुभकामनाओं के साथ।

किरण कुमारी पासी भा.प्र.से.

निदेशक

झारखण्ड शैक्षिक अनुसंधान एवं प्रशिक्षण परिषद्
राँची, झारखण्ड

पाठकों से अनुरोध

इस प्रश्न बैंक-सह-उत्तर पुस्तक के निर्माण में काफी सावधानियाँ बरती गई हैं। इसके बावजूद यदि किसी प्रकार की अशुद्धियाँ मिलें या कोई सुझाव हो तो इस email ID :- jcertquestionbank@gmail.com पर सूचित करें, ताकि अगले मुद्रण में इसे शुद्ध रूप से प्रस्तुत किया जा सके।

प्रश्न बैंक—सह—उत्तर पुस्तक निर्माण समिति

मुख्य संरक्षक

श्री के० रवि कुमार (भा.प्र.से.)

सचिव

स्कूली शिक्षा एवं साक्षरता विभाग, झारखण्ड

संरक्षक

श्रीमती किरण कुमारी पासी (भा.प्र.से.)

निदेशक

झारखण्ड शैक्षिक अनुसन्धान एवं प्रशिक्षण परिषद्, राँची

अवधारणा एवं मार्गदर्शन

श्री मुकुंद दास उपनिदेशक (प्र.) झारखण्ड शैक्षिक अनुसन्धान एवं प्रशिक्षण परिषद्, राँची	श्री बाँके बिहारी सिंह सहायक निदेशक (अ.) झारखण्ड शैक्षिक अनुसन्धान एवं प्रशिक्षण परिषद्, राँची	श्री मसुदी टुडू सहायक निदेशक (अ.) झारखण्ड शैक्षिक अनुसन्धान एवं प्रशिक्षण परिषद्, राँची
---	--	---

समन्वय एवं निर्देशन

डॉ० नीलम रानी

संकाय सदस्य, जे.सी.ई.आर.टी., राँची

(टी.जी.टी., सामाजिक विज्ञान, राजकीयकृत उत्कर्मित उच्च विद्यालय पैतानो, जलडेगा, सिमडेगा)

सहयोग

श्री मणिलाल साव

संकाय सदस्य, जे.सी.ई.आर.टी., राँची

(पी.जी.टी. जीव विज्ञान, के. एन. +2 उच्च विद्यालय हरनाद, कसमार, बोकारो)

Question Bank Development Committee

Shiva Kant Thakur

PGT (Mathematics)

Govt. +2 High School Chotanagpur, Ratu, Ranchi

Budheshwar Mahto

PGT (Mathematics)

Jaypal Singh +2 High School, Taimara, Bundu, Ranchi

Dr. Ankesh Anupam Srivastava

PGT (Mathematics)

S.S. +2 High School, Ormanjhi, Ranchi

Pankaj Kumar

PGT (Mathematics)

B.I.T. +2 High School, Mesra, Kanke, Ranchi

Jharkhandlab.com

विषय सूची

Sl. No.	Chapters Name	Page No.
Chapter - 1	Relations and Functions सम्बन्ध एवं फलन	1–5
Chapter - 2	Inverse Trigonometric Function प्रतिलोम त्रिकोणमितीय फलन	6–13
Chapter - 3	Matrices आव्यूह	14–23
Chapter - 4	Determinants सारणिक	24–33
Chapter - 5	Continuity and Differentiability सांतत्य तथा अवकलनीयता	34–44
Chapter - 6	Application of Derivatives अवकलज के अनुप्रयोग	45–53
Chapter - 7	Integrals समाकलन	54–71
Chapter - 8	Application of Integrals समाकलनों के अनुप्रयोग	72–74
Chapter - 9	Differential Equation अवकल समीकरण	75–86
Chapter - 10	Vector Algebra सदिश बीजगणित	87–93
Chapter - 11	3D Geometry त्रि-विमिय ज्यामिति	94–103
Chapter - 12	Linear Programming Problems रैखिक प्रोग्रामन	104–107
Chapter - 13	Probability प्रायिकता	108–116
	Solved Paper of JAC Annual Intermediate Examination - 2023	177–127

Jharkhandlab.com

बहुविकल्पीय प्रश्न (MCQ)

1 Marks Question:-

1. If $A = \{1, 2, 3, 4\}$ and R be a relation defined on A as $R = \{(1, 2), (2, 1), (3, 4), (4, 3)\}$ then R is –

यदि $A = \{1, 2, 3, 4\}$ और R समुच्चय A पर $R = \{(1, 2), (2, 1), (3, 4), (4, 3)\}$ परिभाषित एक संबंध है तो R है—

- (a) Reflexive / स्वतुल्य
(b) Symmetric / सममित
(c) Transitive / संक्रामक
(d) None of them / इनमें से कोई नहीं।

2. A relation R in a set A is said to be an equivalence relation if and only if—

एक संबंध R किसी समुच्चय A पर तुल्यता संबंध कहलाता है, यदि और केवल यदि—

- (a) Only Reflexive / केवल स्वतुल्य
(b) Only Symmetric / केवल सममित
(c) Only Transitive / केवल संक्रामक
(d) All of them ie, Reflexive, Symmetric and Transitive उपरोक्त सभी। अर्थात् स्वतुल्य, सममित एवं संक्रामक

3. A relation R in a set A is a subset of—

किसी समुच्चय A पर एक संबंध R उपसमुच्चय है—

- (a) Set A / समुच्चय A का।
(b) Cartesian product of A ie, $A \times A$ / कार्तीय गुणन $A \times A$ का
(c) ϕ / ϕ
(d) None of them / इनमें से कोई नहीं।

4. If $A = \{1, 2, 3, 4\}$ and R be a relation defined on A as $R = \{(2, 2), (3, 3), (1, 2), (2, 1)\}$ then R is—

यदि $A = \{1, 2, 3, 4\}$ तथा R समुच्चय A पर परिभाषित एक संबंध $R = \{(2, 2), (3, 3), (1, 2), (2, 1)\}$ है तो R है—

- (a) Reflexive / स्वतुल्य
(b) Symmetric / सममित
(c) Transitive / संक्रामक
(d) None of them / इनमें से कोई नहीं।

5. If $A = \{x \in \mathbb{Z} : 0 \leq x \leq 6\}$ then A is—

यदि $A = \{x \in \mathbb{Z} : 0 \leq x \leq 6\}$ तो A है—

- (a) $\{1, 2, 3\}$
(b) $\{0, 2, 4, 6\}$
(c) $\{0, 1, 2, 3, 4, 5, 6\}$
(d) None of them / इनमें से कोई नहीं।

6. If $A = \{x \in \mathbb{Z} : 2 \leq x \leq 6\}$ then A is—

यदि $A = \{x \in \mathbb{Z} : 2 \leq x \leq 6\}$ तो A है—

- (a) $\{2, 4, 6\}$
(b) $\{2, 3, 4, 5, 6\}$
(c) ϕ
(d) $\{3, 5\}$

7. If $f : \mathbb{R} \rightarrow \mathbb{R}$, given by $f(x) = 4x + 3$ then f^{-1} (inverse) is—

यदि $f : \mathbb{R} \rightarrow \mathbb{R}$, में परिभाषित फलन $f(x) = 4x + 3$ है तो f^{-1} है—

- (a) $f^{-1}(x) = \frac{x-3}{4}$
(b) $f^{-1}(x)$ does not exist / $f^{-1}(x)$ प्राप्त नहीं हैं।
(c) $f^{-1}(x) = \frac{x-4}{3}$
(d) None of them / इनमें से कोई नहीं।

8. If $f : \mathbb{R} \rightarrow \mathbb{R}$ be a function such that $f(x) = 2x + 1$, then inverse of f ie, f^{-1} is—

यदि $f : \mathbb{R} \rightarrow \mathbb{R}$ में परिभाषित एक फलन $f(x) = 2x + 1$ है, तो f^{-1} है। —

- (a) $f^{-1}(x) = \frac{x-1}{2}$
(b) $f^{-1}(x) = \frac{x-2}{3}$
(c) $f^{-1}(x)$ does not exist / $f^{-1}(x)$ प्राप्त नहीं होता है।
(d) None of them / इनमें से कोई नहीं।

9. If $f(x) = \sin^2 x$ and $g(x) = x$ then $(f \circ g)(x)$ is—

यदि $f(x) = \sin^2 x$ और $g(x) = x$ हैं तो $(f \circ g)(x)$ है—

- (a) $\sin x$
(b) $\sin^2 x$
(c) $\sin x^2$
(d) None of them / इनमें से कोई नहीं।

10. If $f(x) = \sin x$ and $g(x) = x^2$ then $(f \circ g)$ is—

यदि $f(x) = \sin x$ और $g(x) = x^2$ है तो $(f \circ g)$ है।—

- (a) $\sin x$
(b) $\sin x^2$
(c) $\sin^2 x$
(d) None of them / इनमें से कोई नहीं।

11. If $f(x) = e^x$ and $g(x) = \log x$ then (gof) is –
 यदि $f(x) = e^x$ और $g(x) = \log x$ है तो (gof) हैं। –
 (a) $e^{\log x}$
 (b) $\log e^x$
 (c) $\log x \cdot e^x$
 (d) None of them / इनमें से कोई नहीं।
12. If $f(x) = \log x$ and $g(x) = \sin x$ then (gof) is –
 यदि $f(x) = \log x$ और $g(x) = \sin x$ है तो (gof) हैं। –
 (a) $\sin(\log x)$
 (b) $\log(\sin x)$
 (c) $\log x \cdot \sin x$
 (d) None of them / इनमें से कोई नहीं।
13. If binary operation '*' is defined as $a*b = ab+1$ then $2*4$ is equal to –
 यदि एक द्विआधारी संक्रिया *, $a*b = ab+1$ द्वारा परिभाषित है तो $2*4$ का मान है। –
 (a) 9
 (b) 7
 (c) 6
 (d) 1
14. A Binary operation 'o' is defined as $aob = \frac{(ab)^2}{2}$ then $1o4$ is equal to –
 एक द्विआधारी संक्रिया 'o', $aob = \frac{(ab)^2}{2}$ द्वारा परिभाषित है तो $1o4$ का मान है। –
 (a) 8
 (b) 4
 (c) 2
 (d) 16
15. If $f : \mathbb{R} \rightarrow \mathbb{R}$ be a function defined by $f(x) = 2x - 3, \forall x \in \mathbb{R}$ then f^{-1} is –
 यदि $f : \mathbb{R} \rightarrow \mathbb{R}$ एक फलन $f(x) = 2x - 3, \forall x \in \mathbb{R}$ द्वारा परिभाषित है तो f^{-1} है। –
 (a) $f^{-1}(x) = \frac{x+3}{2}$
 (b) $f^{-1}(x) = \frac{x+2}{3}$
 (c) $f^{-1}(x) = 3x - 2$
 (d) f^{-1} does not exist / f^{-1} प्राप्त नहीं होता है।
16. If $f : \mathbb{R} \rightarrow \mathbb{R}$, is defined by $f(x) = x^2+2$ then (fof) is –
 यदि $f : \mathbb{R} \rightarrow \mathbb{R}$, $f(x) = x^2+2$ द्वारा परिभाषित है तो (fof) है। –
 (a) $x^4 + 4x^2 + 6$
 (b) $4x^2 + 6$
 (c) $x^4 + 6$
 (d) $x^4 + 6x^2 + 4$
17. If $f : \mathbb{R} \rightarrow \mathbb{R}$ is defined by $f(x) = (x+2)$ then (fof) is –
 यदि $f : \mathbb{R} \rightarrow \mathbb{R}$, $f(x) = (x+2)$ द्वारा परिभाषित है तो (fof) है। –
 (a) $x + 4$
 (b) $x + 6$
 (c) $x + 8$
 (d) $x + 10$
18. If R be the relation in the set N given by $R = \{(a,b) : a = b - 2, b > 6\}$, then –
 यदि समुच्चय N पर R एक संबंध है जो $R = \{(a,b) : a = b - 2, b > 6\}$ द्वारा परिभाषित है तो –
 (a) $(2,4) \in R$
 (b) $(3,8) \in R$
 (c) $(6,8) \in R$
 (d) $(8,7) \in R$
19. If R be the relation in the set N given by $R = \{(a,b) : b = 2a, a > 4\}$, then –
 यदि समुच्चय N पर R एक संबंध है जो $R = \{(a,b) : b = 2a, a > 4\}$, द्वारा परिभाषित है तो –
 (a) $(5,10) \in R$
 (b) $(10,5) \in R$
 (c) $(4,8) \in R$
 (d) $(4,10) \in R$
20. If R be the set of all real numbers, then the function $f : \mathbb{R} \rightarrow \mathbb{R}$ defined by $f(x) = |x|$ is –
 यदि R वास्तविक संख्याओं का समुच्चय है तथा एक फलन $f : \mathbb{R} \rightarrow \mathbb{R}$, $f(x) = |x|$ द्वारा परिभाषित है तो f है –
 (a) one-one only / केवल एकैक
 (b) onto only / केवल आच्छादक
 (c) neither one-one nor onto / न एकैक न आच्छादक
 (d) both one-one and onto / एकैक एवं आच्छादक दोनों
21. A binary operation $*$: $A \times A \rightarrow A$ is said to be associative if –
 एक द्विआधारी संक्रिया $*$: $A \times A \rightarrow A$ को साहचर्य कहा जाता है यदि –
 (a) $(a * b) * c = a * (b * c)$
 (b) $(a * b) * c = (a * c) * b$
 (c) $(a * b) * c = b * (a * c)$
 (d) None of them / इनमें से कोई नहीं।

22. A binary operation * on the set X is called commutative if – (for every a,b ∈ X)

एक द्विआधारी संक्रिया * किसी समुच्चय X पर क्रम विनिमय कहलाता है यदि –

- (a) $a*b = b*a$
 (b) $a*b = a*b$
 (c) $b*a = b*a$
 (d) None of them / इनमें से कोई नहीं।

अति लघु उत्तरीय प्रश्न (Very Short Question)

2 Marks Question:-

1. Is the function $f:N \rightarrow N$, surjective (onto) where $f(x)=2x+3$.

क्या $f:N \rightarrow N$, आच्छादक फलन है? जबकि $f(x)=2x+3$.

2. If a function $f:R \rightarrow R$ defined by $f(x) = |x|$, $x \in R$ then examine whether the function is one-one or many one.

फलन $f: R \rightarrow R$ को एकैक या बहुएक के लिए जाँचें; जबकि $f(x) = |x|$, $x \in R$

3. Examine whether the function $f:R \rightarrow R$, defined by $f(x) = x^3$, $x \in R$ is one-one?

क्या फलन $f: R \rightarrow R$ एकैक फलन है, जहाँ $f(x) = x^3$, $x \in R$?

4. Examine whether the function $f:N \rightarrow N$, where $f(x)=3x$, $x \in N$ is onto?

क्या फलन $f:N \rightarrow N$, आच्छादक है, जहाँ $f(x)=3x$, $x \in N$?

लघु उत्तरीय प्रश्न (Short Question)

3 Marks Question:-

1. If $f:R \rightarrow R$, $g:R \rightarrow R$ are two functions such that $f(x) = x^2$ and $g(x) = x^3$ then find the functions $(fog)(x)$ and $(gof)(x)$. Are (fog) and (gof) equal functions?

यदि $f:R \rightarrow R$, $g:R \rightarrow R$ दो फलन हैं, जहाँ $f(x) = x^2$ और $g(x) = x^3$ तो फलन (fog) तथा (gof) ज्ञात करें। क्या (fog) और (gof) बराबर फलन हैं?

2. If $f:R \rightarrow R$, be a function defined by $f(x)=2x+7$, $x \in R$, define $f^{-1}:R \rightarrow R$ Also find the value of $f^{-1}(3)$.

यदि $f:R \rightarrow R$ एक फलन है जहाँ $f(x)=2x+7$, $x \in R$, तो $f^{-1}:R \rightarrow R$ परिभाषित करें, एवं $f^{-1}(3)$ का मान

ज्ञात करें।

3. Prove that the function $f:R \rightarrow R$ is an one-one onto function, where $f(x)=2x$, $x \in R$.

सिद्ध करें कि फलन $f:R \rightarrow R$, जहाँ $f(x)=2x$, $x \in R$ एक one-one onto फलन है।

4. If $f:R \rightarrow R$ is defined by $f(x) = x^2-3x+2$ then find the value of $f(f(x)) = ?$

यदि $f:R \rightarrow R$ एक फलन है, जहाँ $f(x) = x^2-3x+2$, $x \in R$ तो $f(f(x))$ का मान निकालें ?

दीर्घ उत्तरीय प्रश्न (Long Question)

5 Marks Question:-

1. Let us suppose set $A=\{1,2,3\}$, $B=\{4,5,6,7\}$ and $f=\{(1,4), (2,5), (3,6)\}$. Prove that f is a function from A to B, which is one-one but not onto?

माना कि $A=\{1,2,3\}$, $B=\{4,5,6,7\}$ और $f=\{(1,4), (2,5), (3,6)\}$, तो सिद्ध करें कि f, A से B में एक फलन है जो one-one तो है परन्तु onto नहीं ?

2. Suppose the function $f:N \rightarrow N$ be defined as follows–

$$f(n) = \begin{cases} \frac{n+1}{2} & ; \text{when } n \text{ is odd} \\ \frac{n}{2} & ; \text{when } n \text{ is even} \end{cases}$$

then verify whether f is bijective or not?

यदि फलन $f:N \rightarrow N$ निम्नलिखित रूप से परिभाषित है।

$$f(n) = \begin{cases} \frac{n+1}{2} & ; \text{जब } n \text{ विषम संख्या है।} \\ \frac{n}{2} & ; \text{जब } n \text{ सम संख्या है।} \end{cases}$$

तो जाँच कर बताएँ कि f, bijective है कि नहीं?

3. Prove that the function $f:R \rightarrow R$, defined by

$$f(x) = \begin{cases} 1 & ; x > 0 \\ 0 & ; x = 0 \\ -1 & ; x < 0 \end{cases}$$

is neither one-one nor onto function?

सिद्ध कीजिए कि $f:R \rightarrow R$,

$$f(x) = \begin{cases} 1 & ; \text{यदि } x > 0 \\ 0 & ; \text{यदि } x = 0 \\ -1 & ; \text{यदि } x < 0 \end{cases}$$

द्वारा प्रदत्त चिह्न फलन न तो एकैकी है और न ही आच्छादक है।

Answer: "Relations and Functions"

MCQ Solutions:

- | | | |
|--------|---------|---------|
| 1. (b) | 9. (b) | 17. (a) |
| 2. (d) | 10. (b) | 18. (c) |
| 3. (b) | 11. (b) | 19. (a) |
| 4. (b) | 12. (a) | 20. (c) |
| 5. (c) | 13. (a) | 21. (a) |
| 6. (b) | 14. (a) | 22. (a) |
| 7. (a) | 15. (a) | |
| 8. (a) | 16. (a) | |

Very Short Question (2 Marks Solution)

1. $f: \mathbb{N} \rightarrow \mathbb{N}$ such that $f(x) = 2x + 3, x \in \mathbb{N}$
Let $y = 2x + 3$
 $\Rightarrow 2x = y - 3$
 $\Rightarrow x = \frac{y-3}{2}$
if we put $y=4$ then $x = \frac{4-3}{2} = \frac{1}{2} \notin \mathbb{N}$
Thus, $4 \in \mathbb{N}$ has no pre-image in \mathbb{N} .
 $\Rightarrow f$ is not onto.
2. $f: \mathbb{R} \rightarrow \mathbb{R}$ s.t; $f(x) = |x|, x \in \mathbb{R}$
clearly $f(-1) = |-1|$
 $= 1$
and $f(1) = |1| = 1$
i.e. $f(-1) = 1 = f(1)$
but $-1 \neq 1$
Thus two different elements in \mathbb{R} have the same image.
 $\Rightarrow f$ is not one-one.
i.e. f is many one.
3. $f: \mathbb{R} \rightarrow \mathbb{R}$, such that $f(x) = x^3; x \in \mathbb{R}$
Let $f(x_1) = f(x_2)$
 $\Rightarrow x_1^3 = x_2^3$
 $\Rightarrow (x_1^3 - x_2^3) = 0$
 $\Rightarrow (x_1 - x_2)(x_1^2 + x_1x_2 + x_2^2) = 0$
 $\Rightarrow (x_1 - x_2)\left[\left(x_1 + \frac{x_2}{2}\right)^2 + \frac{3}{4}x_2^2\right] = 0$
 \therefore either
 $x_1 - x_2 = 0$ or $\left(x_1 + \frac{x_2}{2}\right)^2 + \frac{3}{4}x_2^2 = 0$
but $\left(x_1 + \frac{x_2}{2}\right)^2 + \frac{3}{4}x_2^2 \neq 0$
 $\Rightarrow x_1 = x_2$
 $\Rightarrow f$ is a one-one

4.

$$f: \mathbb{N} \rightarrow \mathbb{N}; f(x) = 3x, x \in \mathbb{N}$$

$$\text{Let } y = 3x$$

$$\Rightarrow x = \frac{y}{3}$$

$$\text{if we put } y = 1 \text{ then } x = \frac{1}{3} \notin \mathbb{N}$$

Thus $1 \in \mathbb{N}$ has no pre-image in \mathbb{N}

$\Rightarrow f$ is not onto

Short Question (3 Marks Solution)

1.

$$f: \mathbb{R} \rightarrow \mathbb{R}, \text{ s.t., } f(x) = x^2 \text{ and}$$

$$g: \mathbb{R} \rightarrow \mathbb{R}, \text{ s.t., } g(x) = x^3$$

$$\therefore (f \circ g)(x) = f[g(x)]$$

$$= f[x^3]$$

$$= (x^3)^2$$

$$\Rightarrow (f \circ g)(x) = x^6 \text{ ---- (1)}$$

$$\text{Again, } (g \circ f)(x) = g[f(x)]$$

$$= g[x^2]$$

$$= [x^2]^3$$

$$\Rightarrow (g \circ f)(x) = x^6 \text{ ---- (2)}$$

from eq^{ns} 1 and 2 we get

$$f \circ g = g \circ f.$$

$$f: \mathbb{R} \rightarrow \mathbb{R} \text{ such that } f(x) = 2x + 7, x \in \mathbb{R}$$

then $f^{-1}: \mathbb{R} \rightarrow \mathbb{R}$ will exist

as f is an one - one onto function

Let $y \in \mathbb{R}$ be an image of $x \in \mathbb{R}$

$$\therefore f(x) = y$$

$$\Rightarrow 2x + 7 = y$$

$$\Rightarrow 2x = y - 7$$

$$\Rightarrow x = \frac{y-7}{2}$$

2.

$$\text{as } f(x) = 2x + 7$$

$$\Rightarrow f^{-1}(2x + 7) = x$$

$$\Rightarrow f^{-1}(y) = \frac{y-7}{2}$$

$$\text{or } f^{-1}(x) = \frac{x-7}{2}$$

$$\text{Thus } f^{-1}: \mathbb{R} \rightarrow \mathbb{R} \text{ such that } f^{-1}(x) = \frac{x-7}{2}; x \in \mathbb{R}$$

$$\text{hence, } f^{-1}(3) = \frac{3-7}{2} = -2$$

3. $f: \mathbb{R} \rightarrow \mathbb{R}$ such that $f(x) = 2x, x \in \mathbb{R}$
 Let $f(x_1) = f(x_2)$; where $x_1, x_2 \in \mathbb{R}$
 $\Rightarrow 2x_1 = 2x_2$
 $\Rightarrow x_1 = x_2$

Thus f is a one-one function over \mathbb{R}

Again,

$$\text{Let } y = 2x$$

$$\Rightarrow x = \frac{y}{2}$$

if we put $y = 1$ then $x = \frac{1}{2} \in \mathbb{R}$

Thus, $y = 1 \in \mathbb{R}$ has a pre-image in \mathbb{R}

$\Rightarrow f$ is an onto function

hence, we say that f is a one-one onto function.

4. $f: \mathbb{R} \rightarrow \mathbb{R}$ such that

$$f(x) = x^2 - 3x + 2; x \in \mathbb{R}$$

$$\therefore f[f(x)] = f[f(x)]$$

$$= f[x^2 - 3x + 2]$$

$$= (x^2 - 3x + 2)^2 - 3(x^2 - 3x + 2) + 2$$

$$= (x^4 + 9x^2 + 4 - 6x^3 - 12x + 4x^2) - (3x^2 - 9x + 6) + 2$$

$$\Rightarrow f[f(x)] = x^4 + 9x^2 + 4 - 6x^3$$

$$- 12x + 4x^2 - 3x^2 + 9x - 6 + 2$$

$$= x^4 - 6x^3 + (9 + 4 - 3)x^2 + (-12 + 9)x$$

$$+ (4 - 6 + 2)$$

$$= x^4 - 6x^3 + 10x^2 - 3x$$

$$\Rightarrow f[f(x)] = x^4 - 6x^3 + 10x^2 - 3x.$$

Long Question (5 Marks Solution)

1.
 $f: A \rightarrow B$; where $A = \{1, 2, 3\}, B = \{4, 5, 6, 7\}$
 such that $f = \{(1, 4), (2, 5), (3, 6)\}$
 clearly, $f(1) = 4$
 $f(2) = 5$
 and $f(3) = 6$
 \therefore each $x \in A$ has unique image in B
 under the function f
 $\therefore f$ is a one - one function
 Again,
 there exist $7 \in \text{codomain 'B'}$ such that
 there does not exist any $a \in A$
 ie, $7 \in B$ is such an element which has no pre - image in set A
 $\Rightarrow f$ is not onto
 hence, $f: A \rightarrow B$ is a function which is one - one but not onto

2. $f: \mathbb{N} \rightarrow \mathbb{N}$ such that,

$$f(n) = \begin{cases} \frac{n+1}{2} & ; n = \text{odd} \\ \frac{n}{2} & ; n = \text{even} \end{cases}$$

\therefore We have

$$f(1) = \frac{1+1}{2}, \text{ as } n = 1 = \text{odd}$$

$$= \frac{2}{2} = 1$$

$$\text{and } f(2) = \frac{2}{2}, \text{ as } n = 2 = \text{even}$$

$$= 1$$

$$\Rightarrow f(1) = 1 = f(2)$$

$$\text{but } 1 \neq 2$$

ie, we get same image for two different elements.

Thus, f is not one-one

ie, f is many-one function

Again,

Let $n \in \mathbb{N}$ is an arbitrary element.

if $n = \text{odd} \Rightarrow (2n-1)$ is odd

$$\therefore f(2n-1) = \frac{(2n-1)+1}{2}$$

$$= \frac{2n}{2}$$

$$\Rightarrow f(2n-1) = n$$

if $n = \text{even} \Rightarrow 2n$ is even

$$\therefore f(2n) = \frac{2n}{2}$$

$$\Rightarrow f(2n) = n$$

Thus, for each $n \in \mathbb{N}$ there exist its pre-image in \mathbb{N}

$\Rightarrow f$ is onto

hence, f is not one-one but onto function

ie, f is not bijective

3. $f: \mathbb{R} \rightarrow \mathbb{R}$; such that

$$f(x) = \begin{cases} 1 & ; x > 0 \\ 0 & ; x = 0 \\ -1 & ; x < 0 \end{cases}$$

$$\therefore f(2) = 1 \text{ and } f(3) = 1$$

$$\Rightarrow f(2) = 1 = f(3)$$

$$\text{but } 2 \neq 3$$

we get same image for different elements

$\Rightarrow f$ is many one

ie, f is not one-one

Again,

$2 \in \text{codomain}$ such that there exist no element in the domain ' \mathbb{R} ' for which 2 will become image

$$\Rightarrow f \text{ is not onto}$$

also $\text{Range}(f) = \{1, 0, -1\} \subset \mathbb{R}$

$$\Rightarrow f \text{ is not onto}$$

hence, f is neither one-one nor onto function.

MCQ:- (बहुविकल्पीय प्रश्न) -

Q 1 $\sin^{-1}x + \cos^{-1}x =$; $x \in [-1, 1]$ -

- (a) $\frac{\pi}{4}$ (b) $\frac{\pi}{2}$
(c) π (d) $\frac{3\pi}{2}$

Q 2 $\tan^{-1}x + \cot^{-1}x =$; $x \in \mathbf{R}$

- (a) $\frac{3\pi}{2}$ (b) $\frac{\pi}{4}$
(c) $\frac{\pi}{2}$ (d) π

Q 3 $\operatorname{cosec}^{-1}x + \sec^{-1}x =$; $|x| \geq 1$

- (a) $\frac{\pi}{2}$ (b) $\frac{\pi}{4}$
(c) π (d) $\frac{3\pi}{2}$

Q 4 $\tan^{-1}x + \tan^{-1}y =$; $xy < 1$

- (a) $\tan^{-1}\frac{x+y}{1-xy}$ (b) $\tan^{-1}\frac{x-y}{1+xy}$
(c) $\tan^{-1}\frac{x+y}{1+xy}$ (d) *None* / कोई नहीं

Q 5 $2\tan^{-1}x =$; $-1 < x < 1$

- (a) $\tan^{-1}\frac{2x}{1-x^2}$ (b) $\tan^{-1}\frac{2x}{1+x^2}$
(c) $\tan^{-1}\frac{x}{1-x^2}$ (d) *None* / कोई नहीं

Q 6 $\cos(\sec^{-1}x + \operatorname{cosec}^{-1}x) =$; $|x| \geq 1$

- (a) $\frac{\pi}{2}$ (b) 0
(c) π (d) *None* / कोई नहीं

Q 7 $\cot(\tan^{-1}x + \cot^{-1}x) =$?

- (a) 1 (b) $\frac{1}{2}$
(c) 0 (d) ∞

Q 8 $\tan^{-1}(1) + \tan^{-1}\left(\frac{1}{3}\right) =$?

- (a) $\tan^{-1}\left(\frac{4}{3}\right)$ (b) $\tan^{-1}\left(\frac{2}{3}\right)$
(c) $\tan^{-1}(2)$ (d) $\tan^{-1}(3)$

Q 9 $\tan^{-1}\left(\frac{1}{2}\right) + \tan^{-1}\left(\frac{1}{3}\right) =$?

- (a) $\frac{\pi}{3}$ (b) $\frac{\pi}{4}$
(c) $\frac{\pi}{2}$ (d) $\frac{2\pi}{3}$

Q 10 $\sin\left(\cos^{-1}\frac{3}{5}\right) =$?

- (a) $\frac{3}{4}$ (b) $\frac{4}{5}$
(c) $\frac{3}{5}$ (d) *Not possible* / संभव नहीं हैं।

Q 11 $\cos^{-1}\left(\cos\frac{2\pi}{3}\right) + \sin^{-1}\left(\sin\frac{2\pi}{3}\right) =$?

- (a) $\frac{8\pi}{3}$ (b) $\frac{\pi}{2}$
(c) $\frac{3\pi}{4}$ (d) π

Q 12 If $\cot^{-1}\left(-\frac{1}{5}\right) = x$ then $\sin x =$?

यदि $\cot^{-1}\left(-\frac{1}{5}\right) = x$, तो $\sin x$ का मान क्या होगा -

- (a) $\frac{1}{\sqrt{26}}$ (b) $\frac{5}{\sqrt{26}}$
(c) $\frac{1}{\sqrt{24}}$ (d) *Not possible* / संभव नहीं हैं।

Q 13 If $\cot^{-1}(-\sqrt{3}) = x$, where $x \in [0, \pi]$ then value of x is -

यदि $\cot^{-1}(-\sqrt{3}) = x$ जहाँ $x \in [0, \pi]$ तो x का मान क्या होगा -

- (a) $\frac{5\pi}{6}$ (b) $\frac{2\pi}{3}$
 (c) $\frac{\pi}{2}$ (d) $\frac{\pi}{6}$

Q 14 If $\cot^{-1}(-1) = x$, where $x \in [0, \pi]$ then value of x is -

यदि $\cot^{-1}(-1) = x$ जहाँ $x \in [0, \pi]$ तो x का मान क्या होगा -

- (a) $\frac{\pi}{2}$ (b) $\frac{3\pi}{4}$
 (c) π (d) $\frac{3\pi}{2}$

Q 15 $\sin(\tan^{-1}x + \cot^{-1}x) =$; ($x \in \mathbb{R}$)

- (a) 1 (b) 2
 (c) 3 (d) 4

Very Short Question :- (अति लघु उत्तरीय प्रश्न)

2 Marks Question:-

Q 1 Write $\cot^{-1}\left(\frac{1}{\sqrt{x^2-1}}\right)$, $x > 1$ in the simplest form .

$\cot^{-1}\left(\frac{1}{\sqrt{x^2-1}}\right)$, $x > 1$ को सरलतम रूप में व्यक्त करें ।

Q 2 Prove that, $\tan^{-1}\frac{2}{11} + \tan^{-1}\frac{7}{24} = \tan^{-1}\frac{1}{2}$

सिद्ध करें कि $\tan^{-1}\frac{2}{11} + \tan^{-1}\frac{7}{24} = \tan^{-1}\frac{1}{2}$

Q 3 Prove that ,

$$3\sin^{-1}x = \sin^{-1}(3x - 4x^3); x \in \left[-\frac{1}{2}, \frac{1}{2}\right]$$

सिद्ध करें कि,

$$3\sin^{-1}x = \sin^{-1}(3x - 4x^3); x \in \left[-\frac{1}{2}, \frac{1}{2}\right]$$

Q 4 Write in simplest form ,

$$\tan^{-1}\left(\sqrt{\frac{1-\cos x}{1+\cos x}}\right); 0 < x < \pi$$

सरलतम रूप में व्यक्त करें

$$\tan^{-1}\left(\sqrt{\frac{1-\cos x}{1+\cos x}}\right); 0 < x < \pi$$

Q 5 Find the principal value of $\sin^{-1}\left(-\frac{1}{2}\right)$.

$\sin^{-1}\left(-\frac{1}{2}\right)$ का मुख्य मान ज्ञात करें ?

Q 6 Find the principal value of $\cos^{-1}\left(-\frac{1}{\sqrt{2}}\right)$.

$\cos^{-1}\left(-\frac{1}{\sqrt{2}}\right)$ का मुख्य मान ज्ञात करें ?

Q 7 If $\sin\left(\sin^{-1}\frac{1}{5} + \cos^{-1}x\right) = 1$, then find the value of x .

यदि $\sin\left(\sin^{-1}\frac{1}{5} + \cos^{-1}x\right) = 1$ तो x का मान ज्ञात करें ।

Q 8 Find the value of, $\tan\left[2\tan^{-1}\frac{1}{5} - \frac{\pi}{4}\right]$

$\tan\left[2\tan^{-1}\frac{1}{5} - \frac{\pi}{4}\right]$ का मान निकाले ।

Q 9 If $\tan^{-1}x + \tan^{-1}3 = \tan^{-1}8$, then find the value of x .

यदि $\tan^{-1}x + \tan^{-1}3 = \tan^{-1}8$ तो x का मान ज्ञात करें ।

Short Question :- (लघु उत्तरीय प्रश्न)

3 Marks Question:-

Q 1 Show that, $2\tan^{-1}\frac{1}{2} + \tan^{-1}\frac{1}{7} = \tan^{-1}\frac{31}{17}$

दिखाएँ कि $2\tan^{-1}\frac{1}{2} + \tan^{-1}\frac{1}{7} = \tan^{-1}\frac{31}{17}$

Q 2 Find the principal value of $\sin^{-1}\left(\frac{1}{\sqrt{2}}\right)$

$\sin^{-1}\left(\frac{1}{\sqrt{2}}\right)$ का मुख्य मान निकाले ।

Q 3 Find the value of $\tan^{-1}(\sqrt{3}) - \sec^{-1}(-2)$

$\tan^{-1}(\sqrt{3}) - \sec^{-1}(-2)$ का मान ज्ञात करें ।

Q 4 Evaluate, $\sin\left[\frac{\pi}{3} - \sin^{-1}\left(-\frac{1}{2}\right)\right]$

हल करें, $\sin\left[\frac{\pi}{3} - \sin^{-1}\left(-\frac{1}{2}\right)\right]$

Q 5. Evaluate, $\sin\left[2\cos^{-1}\left(-\frac{3}{5}\right)\right]$

हल करें, $\sin\left[2\cos^{-1}\left(-\frac{3}{5}\right)\right]$

Q 6. If $\tan^{-1}\frac{4}{3} = \theta$, then find the value of $\cos \theta$.

यदि $\tan^{-1}\frac{4}{3} = \theta$ तो $\cos \theta$ का मान ज्ञात करें ?

Q 7 Prove that, $\tan^{-1}\left(\frac{3a^2x - x^3}{a^3 - 3ax^2}\right) = 3\tan^{-1}\frac{x}{a}$

सिद्ध करें $\tan^{-1}\left(\frac{3a^2x - x^3}{a^3 - 3ax^2}\right) = 3\tan^{-1}\frac{x}{a}$

Long Question ; - (दीर्घ उत्तरीय प्रश्न)

5 Marks Question:-

Q 1 Express $\tan^{-1}\frac{\cos x}{1 - \sin x}$; $-\frac{3\pi}{2} < x < \frac{\pi}{2}$ in the simplest form .

सरल रूप में व्यक्त करें,

$\tan^{-1}\frac{\cos x}{1 - \sin x}$; $-\frac{3\pi}{2} < x < \frac{\pi}{2}$

Q 2 Solve $\tan^{-1}2x + \tan^{-1}3x = \frac{\pi}{4}$

हल करें, $\tan^{-1}2x + \tan^{-1}3x = \frac{\pi}{4}$

Q 3 Show that, $\sin^{-1}\frac{3}{5} - \sin^{-1}\frac{8}{17} = \cos^{-1}\frac{84}{85}$.

दिखाएं कि, $\sin^{-1}\frac{3}{5} - \sin^{-1}\frac{8}{17} = \cos^{-1}\frac{84}{85}$.

Q 4 Evaluate ,

$\cos\left[\cos^{-1}\left(-\frac{\sqrt{3}}{2}\right) + \frac{\pi}{6}\right]$

हल करें, $\cos\left[\cos^{-1}\left(-\frac{\sqrt{3}}{2}\right) + \frac{\pi}{6}\right]$

Q 5 Evaluate ,

$\sin\left[\frac{\pi}{2} - \sin^{-1}\left(-\frac{\sqrt{3}}{2}\right)\right]$

हल करें, $\sin\left[\frac{\pi}{2} - \sin^{-1}\left(-\frac{\sqrt{3}}{2}\right)\right]$

Q 6 Find the value of ,

$\tan^{-1}(1) + \cos^{-1}\left(-\frac{1}{2}\right) + \sin^{-1}\left(-\frac{1}{2}\right)$

$\tan^{-1}(1) + \cos^{-1}\left(-\frac{1}{2}\right) + \sin^{-1}\left(-\frac{1}{2}\right)$ का मान निकालें ।

Q 7 Prove that,

$\tan^{-1}\left(\frac{\cos x - \sin x}{\cos x + \sin x}\right) = \left(\frac{\pi}{4} - x\right)$; $x < \pi$

सिद्ध करें, $\tan^{-1}\left(\frac{\cos x - \sin x}{\cos x + \sin x}\right) = \left(\frac{\pi}{4} - x\right)$; $x < \pi$

Q 8 Prove that, $\tan^{-1}\left(\frac{\cos x}{1 + \sin x}\right) = \left(\frac{\pi}{4} - \frac{x}{2}\right)$

सिद्ध करें, $\tan^{-1}\left(\frac{\cos x}{1 + \sin x}\right) = \left(\frac{\pi}{4} - \frac{x}{2}\right)$

Q 9 prove that

$\tan^{-1}\left(\frac{\sqrt{1+x} - \sqrt{1-x}}{\sqrt{1+x} + \sqrt{1-x}}\right) = \frac{\pi}{4} - \frac{1}{2}\cos^{-1}x$

[Hint : Let $x = \cos\theta$]

सिद्ध करें, $\tan^{-1}\left(\frac{\sqrt{1+x} - \sqrt{1-x}}{\sqrt{1+x} + \sqrt{1-x}}\right) = \frac{\pi}{4} - \frac{1}{2}\cos^{-1}x$

Answer : "Inverse Trigonometric Function Solution"

MCQ 1 - Marks Solution

- 1 - (b) 2 - (c) 3 - (a) 4 - (a) 5 - (a) 6 - (b) 7 - (c) 8 - (c)
9 - (b) 10 - (b) 11 - (d) 12 - (b) 13 - (a) 14 - (b) 15 - (a)

2- Marks Solution

1 Ans :-

$\therefore \cot^{-1}\left(\frac{1}{\sqrt{x^2-1}}\right) : x > 1$

let us suppose,

$x = \sec\theta \Rightarrow \theta = \sec^{-1}x$

$\therefore \cot^{-1}\left(\frac{1}{\sqrt{x^2-1}}\right) = \cot^{-1}\left(\frac{1}{\sqrt{\sec^2\theta-1}}\right)$

$\Rightarrow \cot^{-1}\left(\frac{1}{\sqrt{x^2-1}}\right) = \cot^{-1}\left(\frac{1}{\tan\theta}\right)$
 $= \cot^{-1}(\cot\theta)$

$= \theta$

$\Rightarrow \cot^{-1}\left(\frac{1}{\sqrt{x^2-1}}\right) = \theta = \sec^{-1}x , x > 1$

2 Ans : **L.H.S** = $\tan^{-1}\frac{2}{11} + \tan^{-1}\frac{7}{24}$

$= \tan^{-1}\left(\frac{\frac{2}{11} + \frac{7}{24}}{1 - \frac{2}{11} \times \frac{7}{24}}\right)$

$= \tan^{-1}\left(\frac{48 + 77}{11 \times 24 - 14}\right)$

$= \tan^{-1}\left(\frac{125}{250}\right)$

L.H.S = $\tan^{-1}\left(\frac{1}{2}\right)$ = **R.H.S**

3 Ans :-

Let us suppose

$$x = \sin\theta \Rightarrow \theta = \sin^{-1}x \dots(1)$$

$$\therefore \text{L.H.S} = 3\sin^{-1}x$$

$$= 3\theta \dots\dots\dots(2)$$

and ,

$$\begin{aligned} \text{R.H.S} &= \sin^{-1}(3x - 4x^3) \\ &= \sin^{-1}(3\sin\theta - 4\sin^3\theta) \\ &= \sin^{-1}(\sin 3\theta) \end{aligned}$$

$$\text{R.H.S} = 3\theta \dots\dots\dots(3)$$

From equation (2) and (3) we get,

$$3\sin^{-1}x = \sin^{-1}(3x - 4x^3)$$

4 Ans :-

$$\tan^{-1}\left(\sqrt{\frac{1-\cos x}{1+\cos x}}\right) ; 0 < x < \pi$$

$$= \tan^{-1}\left(\sqrt{\frac{2\sin^2 \frac{x}{2}}{2\cos^2 \frac{x}{2}}}\right)$$

$$= \tan^{-1}\left(\sqrt{\tan^2 \frac{x}{2}}\right)$$

$$= \tan^{-1}\left(\tan \frac{x}{2}\right)$$

$$= \frac{x}{2}$$

5 Ans :-

$$\begin{aligned} \sin^{-1}\left(-\frac{1}{2}\right) &= \sin^{-1}\left(-\sin \frac{\pi}{6}\right) \\ &= \sin^{-1}\left(\sin\left(-\frac{\pi}{6}\right)\right) \\ &= -\frac{\pi}{6} \end{aligned}$$

$-\frac{\pi}{6}$ be the required principal value as $-\frac{\pi}{6} \in \left[-\frac{\pi}{2}, \frac{\pi}{2}\right]$

6 Ans :-

$$\begin{aligned} \cos^{-1}\left(-\frac{1}{\sqrt{2}}\right) &= \cos^{-1}\left[-\cos\left(\frac{\pi}{4}\right)\right] \\ &= \cos^{-1}\left[\cos\left(\pi - \frac{\pi}{4}\right)\right] \\ &= \pi - \frac{\pi}{4} \\ &= \frac{3\pi}{4} \in [0, \pi] \end{aligned}$$

$\Rightarrow \frac{3\pi}{4}$ be the required principal value .

7 Ans :-

$$\begin{aligned} \therefore \sin\left(\sin^{-1}\frac{1}{5} + \cos^{-1}x\right) &= 1 \\ \Rightarrow \sin^{-1}\frac{1}{5} + \cos^{-1}x &= \sin^{-1}1 \\ \Rightarrow \cos^{-1}x &= \sin^{-1}(1) - \sin^{-1}\left(\frac{1}{5}\right) \\ &= \sin^{-1}\left(\sin \frac{\pi}{2}\right) - \sin^{-1}\frac{1}{5} \\ \Rightarrow \cos^{-1}x &= \frac{\pi}{2} - \sin^{-1}\frac{1}{5} \\ \Rightarrow \cos^{-1}x &= \cos^{-1}\frac{1}{5} \\ \Rightarrow x &= \frac{1}{5} \end{aligned}$$

8 Ans :-

$$\tan\left(2\tan^{-1}\frac{1}{5} - \frac{\pi}{4}\right)$$

$$\text{Let } 2\tan^{-1}\frac{1}{5} = \theta \dots\dots\dots(1)$$

$$\Rightarrow \frac{1}{5} = \tan \frac{\theta}{2}$$

$$\Rightarrow \sin \frac{\theta}{2} = \frac{1}{\sqrt{26}} \text{ \& } \cos \frac{\theta}{2} = \frac{5}{\sqrt{26}}$$

$$\therefore \tan\left(2\tan^{-1}\frac{1}{5} - \frac{\pi}{4}\right)$$

$$= \tan\left(\theta - \frac{\pi}{4}\right)$$

$$= \frac{\tan\theta - \tan \frac{\pi}{4}}{1 + \tan\theta \times \tan \frac{\pi}{4}}$$

$$= \frac{\tan\theta - 1}{1 + \tan\theta} = \frac{\sin\theta - \cos\theta}{\cos\theta + \sin\theta}$$

$$\Rightarrow \tan\left(2\tan^{-1}\frac{1}{5} - \frac{\pi}{4}\right)$$

$$= \frac{2 \sin \frac{\theta}{2} \cos \frac{\theta}{2} - \left(\cos^2 \frac{\theta}{2} - \sin^2 \frac{\theta}{2}\right)}{2 \sin \frac{\theta}{2} \cos \frac{\theta}{2} + \left(\cos^2 \frac{\theta}{2} - \sin^2 \frac{\theta}{2}\right)}$$

$$= \frac{2 \times \frac{1}{\sqrt{26}} \times \frac{5}{\sqrt{26}} - \left(\frac{25}{26} - \frac{1}{26}\right)}{2 \times \frac{1}{\sqrt{26}} \times \frac{5}{\sqrt{26}} + \left(\frac{25}{26} - \frac{1}{26}\right)}$$

$$= \frac{\frac{5}{13} - \frac{12}{13}}{\frac{12}{13} + \frac{5}{13}} = \frac{-7}{17}$$

$$\Rightarrow \tan\left(2\tan^{-1}\frac{1}{5} - \frac{\pi}{4}\right) = -\frac{7}{17}$$

9 Ans :-

$$\begin{aligned} \therefore \tan^{-1} x + \tan^{-1} 3 &= \tan^{-1} 8 \\ \Rightarrow \tan^{-1} x &= \tan^{-1} 8 - \tan^{-1} 3 \\ &= \tan^{-1} \left(\frac{8-3}{1+8 \times 3} \right) \\ &= \tan^{-1} \left(\frac{5}{1+24} \right) = \tan^{-1} \left(\frac{5}{25} \right) \\ \Rightarrow \tan^{-1} x &= \tan^{-1} \frac{1}{5} \\ \therefore x &= \frac{1}{5} \end{aligned}$$

3 Marks Solution

1 Ans :-

$$\begin{aligned} \text{L.H.S} &= 2 \tan^{-1} \frac{1}{2} + \tan^{-1} \frac{1}{7} \\ &= \tan^{-1} \frac{1}{2} + \tan^{-1} \frac{1}{2} + \tan^{-1} \frac{1}{7} \\ &= \tan^{-1} \frac{1}{2} + \tan^{-1} \left(\frac{\frac{1}{2} + \frac{1}{7}}{1 - \frac{1}{2} \times \frac{1}{7}} \right) \\ &= \tan^{-1} \frac{1}{2} + \tan^{-1} \left(\frac{\frac{9}{14}}{\frac{13}{14}} \right) \\ &= \tan^{-1} \frac{1}{2} + \tan^{-1} \frac{9}{13} \\ &= \tan^{-1} \left(\frac{\frac{1}{2} + \frac{9}{13}}{1 - \frac{1}{2} \times \frac{9}{13}} \right) \\ &= \tan^{-1} \left(\frac{\frac{31}{26}}{\frac{17}{26}} \right) \\ \Rightarrow \text{L.H.S} &= \tan^{-1} \left(\frac{31}{17} \right) = \text{R.H.S} \end{aligned}$$

2 Ans :-

$$\begin{aligned} \sin^{-1} \left(\frac{1}{\sqrt{2}} \right) &= \sin^{-1} \left(\sin \frac{\pi}{4} \right) \\ &= \frac{\pi}{4} \\ \therefore \text{Principal interval of } \sin &\text{ is } \left[-\frac{\pi}{2}, \frac{\pi}{2} \right] \\ \text{and } \frac{\pi}{4} &\in \left[-\frac{\pi}{2}, \frac{\pi}{2} \right] \\ \Rightarrow \frac{\pi}{4} &\text{ is the principal value of } \sin^{-1} \left(\frac{1}{\sqrt{2}} \right) \end{aligned}$$

3 Ans :-

$$\begin{aligned} \tan^{-1}(\sqrt{3}) - \sec^{-1}(-2) &= \tan^{-1} \left(\tan \frac{\pi}{3} \right) - \sec^{-1} \left(-\sec \frac{\pi}{3} \right) \\ &= \tan^{-1} \left(\tan \frac{\pi}{3} \right) - \sec^{-1} \left(\sec \left(\pi - \frac{\pi}{3} \right) \right) \\ &= \frac{\pi}{3} - \left(\pi - \frac{\pi}{3} \right) \\ &= \frac{\pi}{3} - \pi + \frac{\pi}{3} \\ &= \frac{2\pi}{3} - \pi = \frac{2\pi - 3\pi}{3} = -\frac{\pi}{3} \\ \Rightarrow \tan^{-1}(\sqrt{3}) - \sec^{-1}(-2) &= -\frac{\pi}{3} \end{aligned}$$

4 Ans :-

$$\begin{aligned} \sin \left(\frac{\pi}{3} - \sin^{-1} \left(-\frac{1}{2} \right) \right) &= \sin \left(\frac{\pi}{3} - \sin^{-1} \left(-\sin \frac{\pi}{6} \right) \right) \\ &= \sin \left[\frac{\pi}{3} - \sin^{-1} \left\{ \sin \left(-\frac{\pi}{6} \right) \right\} \right] \\ \Rightarrow \sin \left(\frac{\pi}{3} - \sin^{-1} \left(-\frac{1}{2} \right) \right) &= \sin \left(\frac{\pi}{3} - \left(-\frac{\pi}{6} \right) \right) \\ &= \sin \left(\frac{\pi}{3} + \frac{\pi}{6} \right) \\ &= \sin \left(\frac{\pi}{2} \right) \\ \Rightarrow \sin \left(\frac{\pi}{3} - \sin^{-1} \left(-\frac{1}{2} \right) \right) &= 1 \end{aligned}$$

5 Ans :-

$$\begin{aligned} \text{Let } \cos^{-1} \left(-\frac{3}{5} \right) &= \theta \dots\dots\dots (1) \\ \Rightarrow \cos \theta &= -\frac{3}{5} \\ \therefore \sin \theta &= \sqrt{1 - \frac{9}{25}} = \sqrt{\frac{16}{25}} \\ \Rightarrow \sin \theta &= \frac{4}{5} \\ \therefore \sin \left[2 \cos^{-1} \left(-\frac{3}{5} \right) \right] &= \sin(2\theta) \quad [\text{from (1)}] \\ &= 2 \sin \theta \cdot \cos \theta \\ &= 2 \times \left(\frac{4}{5} \right) \times \left(-\frac{3}{5} \right) \\ &= -\frac{24}{25} \\ \Rightarrow \sin \left[2 \cos^{-1} \left(-\frac{3}{5} \right) \right] &= -\frac{24}{25} \end{aligned}$$

6 Ans :-

$$\begin{aligned} \therefore \tan^{-1} \frac{4}{3} &= \theta \\ \Rightarrow \tan \theta &= \frac{4}{3} \dots\dots\dots (1) \\ \text{as } 1 + \tan^2 \theta &= \sec^2 \theta \\ \Rightarrow 1 + \left(\frac{4}{3}\right)^2 &= \sec^2 \theta \\ \Rightarrow 1 + \frac{16}{9} &= \sec^2 \theta \\ \Rightarrow \frac{25}{9} &= \sec^2 \theta \\ \therefore \sec \theta &= \pm \frac{5}{3} \\ \Rightarrow \cos \theta &= \frac{1}{\sec \theta} = \frac{1}{\pm \left(\frac{5}{3}\right)} \\ \Rightarrow \cos \theta &= \pm \frac{3}{5} \end{aligned}$$

7 Ans :-

Let $x = a \tan \theta$ (1)

$$\begin{aligned} \therefore \text{L.H.S} &= \tan^{-1} \left(\frac{3a^2 x - x^3}{a^3 - 3ax^2} \right) \\ &= \tan^{-1} \left[\frac{3a^3 \tan \theta - a^3 \tan^3 \theta}{a^3 - 3a^3 \tan^2 \theta} \right] \\ &= \tan^{-1} \left[\frac{a^3 (3 \tan \theta - \tan^3 \theta)}{a^3 (1 - 3 \tan^2 \theta)} \right] \\ &= \tan^{-1} \left[\frac{3 \tan \theta - \tan^3 \theta}{1 - 3 \tan^2 \theta} \right] \\ &= \tan^{-1} [\tan 3\theta] \\ &= 3\theta \\ \text{L.H.S} &= 3\theta = 3 \cdot \tan^{-1} \frac{x}{a} = \text{R.H.S} \end{aligned}$$

5 Marks Solutions

1 Ans :

$$\begin{aligned} \tan^{-1} \left(\frac{\cos x}{1 - \sin x} \right) ; -\frac{3\pi}{2} < x < \frac{\pi}{2} \\ = \tan^{-1} \left(\frac{\cos^2 \frac{x}{2} - \sin^2 \frac{x}{2}}{1 - 2 \sin \frac{x}{2} \cdot \cos \frac{x}{2}} \right) \end{aligned}$$

$$\begin{aligned} &= \tan^{-1} \left[\frac{\left(\cos \frac{x}{2} + \sin \frac{x}{2}\right) \left(\cos \frac{x}{2} - \sin \frac{x}{2}\right)}{\cos^2 \frac{x}{2} + \sin^2 \frac{x}{2} - 2 \sin \frac{x}{2} \cdot \cos \frac{x}{2}} \right] \\ &= \tan^{-1} \left[\frac{\left(\cos \frac{x}{2} + \sin \frac{x}{2}\right) \left(\cos \frac{x}{2} - \sin \frac{x}{2}\right)}{\left(\cos \frac{x}{2} - \sin \frac{x}{2}\right)^2} \right] \\ &= \tan^{-1} \left[\frac{\cos \frac{x}{2} + \sin \frac{x}{2}}{\cos \frac{x}{2} - \sin \frac{x}{2}} \right] \\ &= \tan^{-1} \left[\frac{1 + \tan \frac{x}{2}}{1 - \tan \frac{x}{2}} \right] \\ &= \tan^{-1} \left[\frac{\tan \frac{\pi}{4} + \tan \frac{x}{2}}{1 - \tan \frac{\pi}{4} \cdot \tan \frac{x}{2}} \right] \\ &= \tan^{-1} \left[\tan \left(\frac{\pi}{4} + \frac{x}{2} \right) \right] \\ \Rightarrow \tan^{-1} \left(\frac{\cos x}{1 - \sin x} \right) &= \frac{\pi}{4} + \frac{x}{2} ; -\frac{3\pi}{2} < x < \frac{\pi}{2} \end{aligned}$$

2 Ans :-

$$\begin{aligned} \therefore \tan^{-1} 2x + \tan^{-1} 3x &= \frac{\pi}{4} \\ \Rightarrow \tan^{-1} \left(\frac{2x + 3x}{1 - 2x \cdot 3x} \right) &= \frac{\pi}{4} \\ \Rightarrow \tan^{-1} \left(\frac{5x}{1 - 6x^2} \right) &= \frac{\pi}{4} \\ \Rightarrow \frac{5x}{1 - 6x^2} &= \tan \frac{\pi}{4} \\ \Rightarrow \frac{5x}{1 - 6x^2} &= 1 \\ \Rightarrow 1 - 6x^2 &= 5x \\ \Rightarrow 6x^2 + 5x - 1 &= 0 \\ \Rightarrow 6x^2 + 6x - x - 1 &= 0 \\ \Rightarrow 6x(x + 1) - (x + 1) &= 0 \\ \Rightarrow (x + 1)(6x - 1) &= 0 \\ \therefore \text{either } x + 1 = 0 &\text{ or } 6x - 1 = 0 \\ \Rightarrow x = -1 &\text{ or } x = \frac{1}{6} \end{aligned}$$

3 Ans :-

$$\begin{aligned} \text{let } \sin^{-1} \frac{3}{5} &= x \dots\dots\dots (1) \\ \Rightarrow \sin x &= \frac{3}{5} \\ \therefore \cos x &= \sqrt{1 - \sin^2 x} \end{aligned}$$

$$= \sqrt{1 - \frac{9}{25}}$$

$$= \sqrt{\frac{16}{25}}$$

$$\Rightarrow \cos x = \frac{4}{5}$$

and $\sin^{-1} \frac{8}{17} = y$ (2)

$$\Rightarrow \sin y = \frac{8}{17}$$

$$\therefore \cos y = \sqrt{1 - \left(\frac{8}{17}\right)^2}$$

$$= \sqrt{\frac{289 - 64}{289}}$$

$$= \sqrt{\frac{225}{289}}$$

$$\Rightarrow \cos y = \frac{15}{17}$$

as , $\cos(x - y) = \cos x \cos y + \sin x \sin y$

$$= \frac{4}{5} \times \frac{15}{17} + \frac{3}{5} \times \frac{8}{17}$$

$$= \frac{60}{85} + \frac{24}{85}$$

$$= \frac{60 + 24}{85}$$

$$\Rightarrow \cos(x - y) = \frac{84}{85}$$

$$\Rightarrow x - y = \cos^{-1} \frac{84}{85}$$

[by using equation (1) and (2)]

$$\Rightarrow \sin^{-1} \frac{3}{5} - \sin^{-1} \frac{8}{17} = \cos^{-1} \frac{84}{85}$$

4 Ans :

$$\cos \left[\cos^{-1} \left(-\frac{\sqrt{3}}{2} \right) + \frac{\pi}{6} \right]$$

we know that principal interval of cos is $[0, \pi]$

$$\therefore \cos \left[\cos^{-1} \left(-\frac{\sqrt{3}}{2} \right) + \frac{\pi}{6} \right]$$

$$= \cos \left[\cos^{-1} \left(-\cos \frac{\pi}{6} \right) + \frac{\pi}{6} \right]$$

$$= \cos \left[\cos^{-1} \left(\cos \left(\pi - \frac{\pi}{6} \right) \right) + \frac{\pi}{6} \right]$$

$$= \cos \left[\cos^{-1} \left(\cos \frac{5\pi}{6} \right) + \frac{\pi}{6} \right]$$

$$= \cos \left[\frac{5\pi}{6} + \frac{\pi}{6} \right] ; \text{ as } \frac{5\pi}{6} \in [0, \pi]$$

$$\Rightarrow \therefore \cos \left[\cos^{-1} \left(-\frac{\sqrt{3}}{2} \right) + \frac{\pi}{6} \right]$$

$$= \cos \left[\frac{5\pi + \pi}{6} \right]$$

$$= \cos \left(\frac{6\pi}{6} \right)$$

$$= \cos(\pi)$$

$$= -1$$

$$\therefore \cos \left[\cos^{-1} \left(-\frac{\sqrt{3}}{2} \right) + \frac{\pi}{6} \right] = -1$$

5 Ans ; -

$$\sin \left[\frac{\pi}{2} - \sin^{-1} \left(-\frac{\sqrt{3}}{2} \right) \right]$$

we know that principal interval of sin is $\left[-\frac{\pi}{2}, \frac{\pi}{2} \right]$

$$\therefore \sin \left[\frac{\pi}{2} - \sin^{-1} \left(-\frac{\sqrt{3}}{2} \right) \right]$$

$$= \sin \left[\frac{\pi}{2} - \sin^{-1} \left(-\sin \frac{\pi}{3} \right) \right]$$

$$= \sin \left\{ \frac{\pi}{2} - \sin^{-1} \left[\sin \left(-\frac{\pi}{3} \right) \right] \right\}$$

$$= \sin \left[\frac{\pi}{2} - \left(-\frac{\pi}{3} \right) \right]$$

$$= \sin \left[\frac{\pi}{2} + \frac{\pi}{3} \right]$$

$$= \sin \left[\frac{3\pi + 2\pi}{6} \right]$$

$$= \sin \left[\frac{5\pi}{6} \right]$$

$$= \cos \frac{\pi}{3}$$

$$= \frac{1}{2}$$

$$\therefore \sin \left[\frac{\pi}{2} - \sin^{-1} \left(-\frac{\sqrt{3}}{2} \right) \right] = \frac{1}{2}$$

6 Ans : -

$$\tan^{-1}(1) + \cos^{-1} \left(-\frac{1}{2} \right) + \sin^{-1} \left(-\frac{1}{2} \right) \dots\dots\dots(1)$$

we know that principal interval of sin is

$\left[-\frac{\pi}{2}, \frac{\pi}{2} \right]$, cos is $[0, \pi]$ and tan is

$\left(-\frac{\pi}{2}, \frac{\pi}{2} \right) - \left\{ \frac{\pi}{2} \right\}$

$$\therefore \tan^{-1}(1) = \tan^{-1} \left(\tan \frac{\pi}{4} \right)$$

$$\Rightarrow \tan^{-1} 1 = \frac{\pi}{4} \in \left(-\frac{\pi}{2}, \frac{\pi}{2} \right) \dots\dots\dots(2)$$

$$\cos^{-1} \left(-\frac{1}{2} \right) = \cos^{-1} \left[-\cos \frac{\pi}{3} \right]$$

$$= \cos^{-1} \left[\cos \left(\pi - \frac{\pi}{3} \right) \right]$$

$$= \pi - \frac{\pi}{3}$$

$$= \frac{2\pi}{3} \in [0, \pi] \dots\dots\dots(3)$$

And $\sin^{-1}\left(-\frac{1}{2}\right) = \sin^{-1}\left(-\sin\frac{\pi}{6}\right)$

$$= \sin^{-1}\left[\sin\left(-\frac{\pi}{6}\right)\right]$$

$$= -\frac{\pi}{6} \dots\dots\dots(4)$$

by using eq^{ns} (2), (3) and (4)

$$\text{eq}^{\square}(1) \Rightarrow \tan^{-1}(1) + \cos^{-1}\left(-\frac{1}{2}\right) + \sin^{-1}\left(-\frac{1}{2}\right)$$

$$= \frac{\pi}{4} + \frac{2\pi}{3} - \frac{\pi}{6}$$

$$\Rightarrow \tan^{-1}(1) + \cos^{-1}\left(-\frac{1}{2}\right) + \sin^{-1}\left(-\frac{1}{2}\right)$$

$$= \frac{3\pi + 8\pi - 2\pi}{12}$$

$$= \frac{9\pi}{12}$$

$$= \frac{3\pi}{4}$$

7 Ans :-

$$\text{L.H.S} = \tan^{-1}\left(\frac{\cos x - \sin x}{\cos x + \sin x}\right)$$

$$= \tan^{-1}\left[\frac{\cos x(1 - \tan x)}{\cos x(1 + \tan x)}\right]$$

$$= \tan^{-1}\left[\frac{1 - \tan x}{1 + \tan x}\right]$$

$$= \tan^{-1}\left[\frac{\tan\frac{\pi}{4} - \tan x}{1 + \tan\frac{\pi}{4} \times \tan x}\right]$$

$$= \tan^{-1}\left[\tan\left(\frac{\pi}{4} - x\right)\right]$$

$$= \left(\frac{\pi}{4} - x\right) = \text{R.H.S}$$

hence ,

$$\therefore \tan^{-1}\left(\frac{\cos x - \sin x}{\cos x + \sin x}\right) = \left(\frac{\pi}{4} - x\right)$$

8 Ans: -

$$\text{L.H.S} = \tan^{-1}\left(\frac{\cos x}{1 + \sin x}\right)$$

$$= \tan^{-1}\left[\frac{\cos 2\frac{x}{2}}{1 + \sin 2\frac{x}{2}}\right]$$

$$= \tan^{-1}\left[\frac{\cos^2\frac{x}{2} - \sin^2\frac{x}{2}}{1 + 2\sin\frac{x}{2}\cos\frac{x}{2}}\right]$$

$$= \tan^{-1}\left[\frac{\left(\cos\frac{x}{2} + \sin\frac{x}{2}\right)\left(\cos\frac{x}{2} - \sin\frac{x}{2}\right)}{\left(\cos\frac{x}{2} + \sin\frac{x}{2}\right)^2}\right]$$

$$= \tan^{-1}\left[\frac{\cos\frac{x}{2} - \sin\frac{x}{2}}{\cos\frac{x}{2} + \sin\frac{x}{2}}\right]$$

$$= \tan^{-1}\left[\frac{1 - \tan\frac{x}{2}}{1 + \tan\frac{x}{2}}\right]$$

$$= \tan^{-1}\left[\frac{\tan\frac{\pi}{4} - \tan\frac{x}{2}}{1 + \tan\frac{\pi}{4} \times \tan\frac{x}{2}}\right]$$

$$= \tan^{-1}\left[\tan\left(\frac{\pi}{4} - \frac{x}{2}\right)\right]$$

$$\Rightarrow \text{L.H.S} = \left(\frac{\pi}{4} - \frac{x}{2}\right) = \text{R.H.S}$$

9 Ans :

$$\text{L.H.S} = \tan^{-1}\left\{\frac{\sqrt{1+x} - \sqrt{1-x}}{\sqrt{1+x} + \sqrt{1-x}}\right\}$$

Let $x = \cos\theta \dots\dots\dots(1)$

$$= \tan^{-1}\left\{\frac{\sqrt{1+\cos\theta} - \sqrt{1-\cos\theta}}{\sqrt{1+\cos\theta} + \sqrt{1-\cos\theta}}\right\}$$

$$= \tan^{-1}\left\{\frac{\sqrt{2\cos^2\frac{\theta}{2}} - \sqrt{2\sin^2\frac{\theta}{2}}}{\sqrt{2\cos^2\frac{\theta}{2}} + \sqrt{2\sin^2\frac{\theta}{2}}}\right\}$$

$$= \tan^{-1}\left\{\frac{\sqrt{2}\left(\cos\frac{\theta}{2} - \sin\frac{\theta}{2}\right)}{\sqrt{2}\left(\cos\frac{\theta}{2} + \sin\frac{\theta}{2}\right)}\right\}$$

$$= \tan^{-1}\left\{\frac{1 - \tan\frac{\theta}{2}}{1 + \tan\frac{\theta}{2}}\right\}$$

$$= \tan^{-1}\left\{\frac{\tan\frac{\pi}{4} - \tan\frac{\theta}{2}}{1 + \tan\frac{\pi}{4} \times \tan\frac{\theta}{2}}\right\}$$

$$= \tan^{-1}\left\{\tan\left(\frac{\pi}{4} - \frac{\theta}{2}\right)\right\}$$

$$= \frac{\pi}{4} - \frac{\theta}{2}$$

$$= \frac{\pi}{4} - \frac{1}{2} \times \cos^{-1}x \text{ [by using eqn(1)]}$$

$$= \text{R.H.S}$$

hence ,

$$\tan^{-1}\left\{\frac{\sqrt{1+x} - \sqrt{1-x}}{\sqrt{1+x} + \sqrt{1-x}}\right\} = \frac{\pi}{4} - \frac{1}{2} \cos^{-1}x$$

बहुविकल्पीय प्रश्न (MCQ)

1. यदि $\begin{bmatrix} 1 & 2 \\ x & 3 \end{bmatrix} = \begin{bmatrix} y & z \\ 5 & 3 \end{bmatrix}$ हो तो x, y तथा z मान होगा—

- (a) $x=5, y=1, z=2$
 (b) $x=2, y=1, z=5$
 (c) $x=5, y=2, z=1$
 (d) $x=1, y=5, z=2$

If $\begin{bmatrix} 1 & 2 \\ x & 3 \end{bmatrix} = \begin{bmatrix} y & z \\ 5 & 3 \end{bmatrix}$ then the value of x, y and z will be—

- (a) $x=5, y=1, z=2$
 (b) $x=2, y=1, z=5$
 (c) $x=5, y=2, z=1$
 (d) $x=1, y=5, z=2$

2. **A and B are two matrices then $(A+B)^2$ is equal to -**

- (a) $A^2 + 2AB + B^2$
 (b) $A^2 + AB + BA + B^2$
 (c) $A^2 + 2AB + 2BA + B^2$
 (d) Not possible.

यदि **A** और **B** दो आव्यूह हो तो $(A+B)^2$ का मान होगा—

- (a) $A^2 + 2AB + B^2$
 (b) $A^2 + AB + BA + B^2$
 (c) $A^2 + 2AB + 2BA + B^2$
 (d) संभव नहीं हैं।

3. **If A and B are two matrices then $(AB)'$ is equal to -**

- (a) $A'B'$
 (b) $B'A'$
 (c) $(BA)'$
 (d) Not defined.

यदि **A** और **B** दो आव्यूह हो तो $(AB)'$ का मान होगा—

- (a) $A'B'$
 (b) $B'A'$
 (c) $(BA)'$
 (d) परिभाषित नहीं ।

4. If $A = \begin{bmatrix} 1 & 2 & 3 \\ 4 & 5 & 6 \end{bmatrix}$ then which of the following is A' -

- (a) $\begin{bmatrix} 2 & 2 & 3 \\ 5 & 2 & 6 \end{bmatrix}$ (b) $\begin{bmatrix} 4 & 5 & 6 \\ 1 & 2 & 3 \end{bmatrix}$
 (c) $\begin{bmatrix} 1 & 4 \\ 2 & 5 \\ 3 & 6 \end{bmatrix}$ (d) $\begin{bmatrix} 3 & 6 \\ 2 & 5 \\ 1 & 4 \end{bmatrix}$

यदि $A = \begin{bmatrix} 1 & 2 & 3 \\ 4 & 5 & 6 \end{bmatrix}$ हो तो निम्नांकित में कौन A' के समान है—

- (a) $\begin{bmatrix} 2 & 2 & 3 \\ 5 & 2 & 6 \end{bmatrix}$ (b) $\begin{bmatrix} 4 & 5 & 6 \\ 1 & 2 & 3 \end{bmatrix}$
 (c) $\begin{bmatrix} 1 & 4 \\ 2 & 5 \\ 3 & 6 \end{bmatrix}$ (d) $\begin{bmatrix} 3 & 6 \\ 2 & 5 \\ 1 & 4 \end{bmatrix}$

5. **If A and B are two matrices then $(A+B)'$ is equal to -**

यदि **A** एवं **B** दो आव्यूह हो तो $(A+B)'$ के बराबर होगा—

- (a) $A'+B'$
 (b) $B'+A'$
 (c) $(AB)'$
 (d) Option (a) and (b) / विकल्प (a) और (b)

6. **A square matrix B is said to be a symmetric Matrix if -**

एक वर्ग आव्यूह **B** सममित आव्यूह होगा यदि -

- (a) $B=B'$
 (b) $B=-B'$
 (c) $B=-B$
 (d) None of these / कोई नहीं

7. **A square matrix B is said to be a skew-symmetric matrix if -**

एक वर्ग आव्यूह **B** विषम सममित आव्यूह होगा यदि—

- (a) $B=B'$
 (b) $B=-B'$
 (c) $B=-B$
 (d) None of these / कोई नहीं

8. A square matrix B is said to be a singular matrix if-

एक वर्ग आव्यूह B अव्युत्क्रमणीय आव्यूह होगा यदि-

- (a) $|B|=0$ (b) $|B|=1$
(c) $|B|=2$ (d) $|B|=3$

9. A square matrix B is said to be a non singular matrix if-

एक वर्ग आव्यूह B व्युत्क्रमणीय आव्यूह होगा यदि-

- (a) $|B|=0$ (b) $|B| \neq 0$
(c) $|B|=1$ (d) $|B|=2$

10. If A be a matrix then AA^{-1} is equal to-

यदि A एक आव्यूह हो तो AA^{-1} का मान होगा-

- (a) I / unit matrix / एकांक आव्यूह
(b) $A^{-1}A$
(c) $\frac{1}{2}$
(d) Not defined / परिभाषित नहीं।

11. If A and B are two matrices then $(AB)^{-1}$ is-

यदि A और B दो आव्यूह हो तो $(AB)^{-1}$ होगा-

- (a) $B^{-1}A^{-1}$
(b) $A^{-1}B^{-1}$
(c) $(BA)^{-1}$
(d) Undefined / अपरिभाषित

12. If A be a square matrix then A^{-1} will exist if-

यदि A एक वर्ग आव्यूह हो तो A^{-1} संभव होगा यदि-

- (a) A is a singular / अव्युत्क्रमणीय
(b) A is non-singular / व्युत्क्रमणीय
(c) Row-matrix / पंक्ति आव्यूह
(d) Column matrix / स्तम्भ आव्यूह

13. Which of the following is a non-singular matrix?

निम्नलिखित में कौन व्युत्क्रमणीय आव्यूह हैं ?

- (a) $\begin{bmatrix} 4 & 6 \\ 2 & 3 \end{bmatrix}$ (b) $\begin{bmatrix} 4 & -6 \\ 6 & 9 \end{bmatrix}$

- (c) $\begin{bmatrix} 4 & -6 \\ -6 & 9 \end{bmatrix}$ (d) $\begin{bmatrix} 3 & 4 \\ 3 & 4 \end{bmatrix}$

14. Which of the following is a singular matrix ?

निम्नलिखित में कौन अव्युत्क्रमणीय आव्यूह हैं ?

- (a) $\begin{bmatrix} 4 & 6 \\ 2 & 3 \end{bmatrix}$ (b) $\begin{bmatrix} 4 & -6 \\ 6 & 9 \end{bmatrix}$

(c) $\begin{bmatrix} 1 & 2 \\ 3 & 4 \end{bmatrix}$

(d) $\begin{bmatrix} 2 & 1 \\ 4 & 3 \end{bmatrix}$

15. For which of the following the inverse matrix can be obtained ?

निम्नलिखित में किसका व्युत्क्रम ज्ञात किया जा सकता है?

(a) $\begin{bmatrix} 1 & 1 \\ 1 & 1 \\ 1 & 1 \end{bmatrix}$

(b) $\begin{bmatrix} 1 & 0 & 0 \\ 0 & 2 & 0 \\ 0 & 0 & 0 \end{bmatrix}$

(c) $\begin{bmatrix} 1 & 0 & 0 \\ 0 & 2 & 0 \\ 0 & 0 & 3 \end{bmatrix}$

(d) $\begin{bmatrix} 1 & 2 & 3 \\ 1 & 1 & 1 \end{bmatrix}$

16. A matrix $A = [a_{ij}]_{n \times n}$ is said to be symmetric if -

एक आव्यूह $A = [a_{ij}]_{n \times n}$ सममित आव्यूह होगा यदि-

- (a) $a_{ij} = 0$
(b) $a_{ij} = -a_{ji}$
(c) $a_{ij} = a_{ji}$
(d) $a_{ij} = 1$

17. A matrix $A = [a_{ij}]_{n \times n}$ is said to be a skew-symmetric if -

एक आव्यूह $A = [a_{ij}]_{n \times n}$ विषम सममित आव्यूह होगा यदि -

- (a) $a_{ij} = 0$
(b) $a_{ij} = -a_{ji}$ and $a_{ii} = 0$
(c) $a_{ij} = a_{ji}$
(d) $a_{ij} = 1$

MATRICES (2 MARKS QUESTION)

1. For which values of x and y the given matrices are equal-

$$\begin{bmatrix} 0 & x-2 \\ 8 & 4 \end{bmatrix} \text{ and } \begin{bmatrix} 3y+7 & 5 \\ x+1 & 2-3y \end{bmatrix}$$

x और y के कौन से मान के लिए दिया गया आव्यूह समान होंगे-

$$\begin{bmatrix} 0 & x-2 \\ 8 & 4 \end{bmatrix} \text{ और } \begin{bmatrix} 3y+7 & 5 \\ x+1 & 2-3y \end{bmatrix}$$

2. Find the value of x from the following -

निम्न से x का मान ज्ञात कीजिए -

$$\begin{bmatrix} 2x-y & 5 \\ 3 & y \end{bmatrix} = \begin{bmatrix} 6 & 5 \\ 3 & -2 \end{bmatrix}$$

3. If $A = \begin{bmatrix} 2 & 3 & 1 \\ 0 & -1 & 5 \end{bmatrix}$ and $B = \begin{bmatrix} 1 & 2 & -1 \\ 0 & -1 & 3 \end{bmatrix}$ then

find the matrix $(2A - 3B)$

यदि $A = \begin{bmatrix} 2 & 3 & 1 \\ 0 & -1 & 5 \end{bmatrix}$ और $B = \begin{bmatrix} 1 & 2 & -1 \\ 0 & -1 & 3 \end{bmatrix}$

तो $(2A - 3B)$ को ज्ञात करें -

4. Evaluate / मान ज्ञात करें -

$$3 \begin{bmatrix} 1 & 3 & 4 \\ 2 & 5 & 6 \end{bmatrix} - 2 \begin{bmatrix} 2 & 5 & 7 \\ 3 & 4 & 8 \end{bmatrix} + 4 \begin{bmatrix} 1 & 0 & 2 \\ 2 & 1 & -3 \end{bmatrix}$$

5. Construct a 2×2 matrix whose elements are given by $a_{ij} = (2i - j)$

एक 2×2 आव्यूह की रचना करें जहाँ $a_{ij} = (2i - j)$ हैं।

6. Construct a 3×3 matrix where $a_{ij} = i/j$

एक 3×3 आव्यूह की रचना करें जहाँ $a_{ij} = i/j$ हो।

7. Give an example of 3×3 matrix which is a zero matrix ?

एक 3×3 शून्य आव्यूह का उदाहरण दें ?

8. If $A = \begin{bmatrix} 2 & 3 & 5 \\ -1 & 0 & 4 \end{bmatrix}$ and $B = \begin{bmatrix} 4 & -2 & 3 \\ 2 & 6 & -1 \end{bmatrix}$ then verify that $A+B=B+A$?

यदि $A = \begin{bmatrix} 2 & 3 & 5 \\ -1 & 0 & 4 \end{bmatrix}$ और $B = \begin{bmatrix} 4 & -2 & 3 \\ 2 & 6 & -1 \end{bmatrix}$ तो सिद्ध करें कि $A+B=B+A$?

9. Find a matrix X such that $2A+B+X=0$, where

$$A = \begin{bmatrix} -1 & 2 \\ 3 & 4 \end{bmatrix} \text{ and } B = \begin{bmatrix} 3 & -2 \\ 1 & 5 \end{bmatrix} ?$$

आव्यूह X का मान ज्ञात करें यदि $2A+B+X=0$ जहाँ

$$A = \begin{bmatrix} -1 & 2 \\ 3 & 4 \end{bmatrix} \text{ और } B = \begin{bmatrix} 3 & -2 \\ 1 & 5 \end{bmatrix} ?$$

MATRICES (3 Marks Question)

1. If $\begin{vmatrix} 6i - 3i & 1 \\ 4 & 3i - 1 \\ 30 & 3 & i \end{vmatrix} = x + iy$ then find the value

of x and y ?

यदि $\begin{vmatrix} 6i - 3i & 1 \\ 4 & 3i - 1 \\ 30 & 3 & i \end{vmatrix} = x + iy$ हो तो x और y

का मान ज्ञात करें ?

2. By using elementary row operation find the inverse of the matrix-

प्रारंभिक पंक्ति संक्रियाओं का प्रयोग करते हुए आव्यूह का व्युत्क्रम ज्ञात करें-

$$A = \begin{bmatrix} 3 & -1 \\ -4 & 2 \end{bmatrix}$$

3. If $A = \begin{bmatrix} 1 & 0 & 0 \\ 0 & 2 & 0 \\ 0 & 0 & 3 \end{bmatrix}$ and $B = \begin{bmatrix} 1 & 2 & 3 \\ 3 & 2 & 1 \\ 1 & 3 & 2 \end{bmatrix}$ then $(AB) =$

यदि $A = \begin{bmatrix} 1 & 0 & 0 \\ 0 & 2 & 0 \\ 0 & 0 & 3 \end{bmatrix}$ और $B = \begin{bmatrix} 1 & 2 & 3 \\ 3 & 2 & 1 \\ 1 & 3 & 2 \end{bmatrix}$ तो $(AB) =$

4. If $A = \begin{bmatrix} 1 & -1 \\ -1 & 1 \end{bmatrix}$ then show that $A^3 = 4A$?

यदि $A = \begin{bmatrix} 1 & -1 \\ -1 & 1 \end{bmatrix}$ हो तो दिखाएँ कि $A^3 = 4A$?

5. Find the value of / मान निकालें -

$$\cos \theta \begin{bmatrix} \cos \theta & \sin \theta \\ -\sin \theta & \cos \theta \end{bmatrix} + \sin \theta \begin{bmatrix} \sin \theta & -\cos \theta \\ \cos \theta & \sin \theta \end{bmatrix} =$$

MATRICES (5 Markes question)

1. If $A = \begin{bmatrix} 1 & 0 \\ -1 & 7 \end{bmatrix}$ then find the value of k such

that $A^2 = 8A + kI$

यदि $A = \begin{bmatrix} 1 & 0 \\ -1 & 7 \end{bmatrix}$ तो k का वह मान निकालें जिसके

लिए $A^2 = 8A + kI$ हो।

2. If $A = \begin{bmatrix} 3 & -5 \\ -4 & 2 \end{bmatrix}$ then show that

$$A^2 - 5A - 14I = 0 ?$$

यदि $A = \begin{bmatrix} 3 & -5 \\ -4 & 2 \end{bmatrix}$ हो तो दर्शाएँ कि

$$A^2 - 5A - 14I = 0 ?$$

3. If $A = \begin{bmatrix} \cos \theta & \sin \theta \\ -\sin \theta & \cos \theta \end{bmatrix}$ then prove that -

$$A^n = \begin{bmatrix} \cos n\theta & \sin n\theta \\ -\sin n\theta & \cos n\theta \end{bmatrix}; n \in \mathbb{N} .$$

यदि $A = \begin{bmatrix} \cos \theta & \sin \theta \\ -\sin \theta & \cos \theta \end{bmatrix}$ तो सिद्ध करें कि

$$A^n = \begin{bmatrix} \cos n\theta & \sin n\theta \\ -\sin n\theta & \cos n\theta \end{bmatrix}; n \in \mathbb{N}.$$

4. If $[1 \ x \ 1] \begin{bmatrix} 1 & 2 & 3 \\ 4 & 5 & 6 \\ 3 & 2 & 5 \end{bmatrix} \begin{bmatrix} 1 \\ -2 \\ 3 \end{bmatrix} = 0$ then find the value of x ?

यदि $[1 \ x \ 1] \begin{bmatrix} 1 & 2 & 3 \\ 4 & 5 & 6 \\ 3 & 2 & 5 \end{bmatrix} \begin{bmatrix} 1 \\ -2 \\ 3 \end{bmatrix} = 0$, हो तो x का

मान ज्ञात करें ?

5. If $A = \begin{bmatrix} -3 \\ 5 \\ 2 \end{bmatrix}$ and $B = [1 \ 6 \ -4]$ then

verify that $(AB)' = B'A'$?

यदि $A = \begin{bmatrix} -3 \\ 5 \\ 2 \end{bmatrix}$ और $B = [1 \ 6 \ -4]$ हो तो

दर्शाएँ कि $(AB)' = B'A'$?

6. If matrix $A = \begin{bmatrix} 1 & 3 & 5 \\ -6 & 8 & 3 \\ -4 & 6 & 5 \end{bmatrix}$ then find the

corresponding symmetric part and skew-symmetric part of the matrix?

यदि $A = \begin{bmatrix} 1 & 3 & 5 \\ -6 & 8 & 3 \\ -4 & 6 & 5 \end{bmatrix}$ हो तो A के संगत सममित

आव्यूह तथा विसम सममित आव्यूह को लिखें?

7. By using elementary row operation find the inverse of the matrix

$$A = \begin{bmatrix} 2 & -3 & 3 \\ 2 & 2 & 3 \\ 3 & -2 & 2 \end{bmatrix}$$

प्रारंभिक पंक्ति संक्रियाओं का प्रयोग करते हुए आव्यूह का व्युत्क्रम ज्ञात करें -

$$A = \begin{bmatrix} 2 & -3 & 3 \\ 2 & 2 & 3 \\ 3 & -2 & 2 \end{bmatrix}$$

8. If $A = \begin{bmatrix} 1 & -1 & 2 \\ 0 & 2 & -3 \\ 3 & -2 & 4 \end{bmatrix}$ then prove that

$$|\text{adj } A| = |A|^2$$

यदि $A = \begin{bmatrix} 1 & -1 & 2 \\ 0 & 2 & -3 \\ 3 & -2 & 4 \end{bmatrix}$ तो सिद्ध करें कि

$$|\text{adj } A| = |A|^2$$

9. If $A = \begin{bmatrix} 0 & 1 & -1 \\ -1 & 0 & 1 \\ 1 & -1 & 0 \end{bmatrix}$ then find the matrices

$(A + A')$ and $(A - A')$. Also prove that $(A + A')$ is a symmetric matrix while $(A - A')$ is a skew-symmetric matrix ?

यदि $A = \begin{bmatrix} 0 & 1 & -1 \\ -1 & 0 & 1 \\ 1 & -1 & 0 \end{bmatrix}$ तो आव्यूह $(A + A')$ और

$(A - A')$ ज्ञात करें ।

पुनः सिद्ध करें कि $(A + A')$ सममित आव्यूह है किन्तु $(A - A')$ एक विषम सममित आव्यूह है ।

10. If $f(x) = \begin{bmatrix} \cos x & -\sin x & 0 \\ \sin x & \cos x & 0 \\ 0 & 0 & 1 \end{bmatrix}$ then prove that

$$f(x+y) = f(x).f(y).$$

यदि $f(x) = \begin{bmatrix} \cos x & -\sin x & 0 \\ \sin x & \cos x & 0 \\ 0 & 0 & 1 \end{bmatrix}$ तो सिद्ध करें कि

$$f(x+y) = f(x).f(y).$$

MATRICES (SOLUTION)

MCQ:-

- | | |
|---------|---------|
| 1) (a) | 11) (a) |
| 2) (b) | 12) (b) |
| 3) (b) | 13) (b) |
| 4) (c) | 14) (a) |
| 5) (d) | 15) (c) |
| 6) (a) | 16) (c) |
| 7) (b) | 17) (b) |
| 8) (a) | |
| 9) (b) | |
| 10) (a) | |

2 Marks Solution

$$1) \begin{bmatrix} 0 & x-2 \\ 8 & 4 \end{bmatrix} = \begin{bmatrix} 3y+7 & 5 \\ x+1 & 2-3y \end{bmatrix}$$

∴ two matrices are equal if corresponding position elements are same.

$$\therefore 3y+7=0 \text{ -----(1)}$$

$$x-2=5 \text{ -----(2)}$$

$$x+1=8 \text{ -----(3)}$$

$$\text{and } 2-3y=4 \text{ ---(4)}$$

$$\text{eq}^n\text{-(1)} \Rightarrow y = \frac{-7}{3}$$

$$\text{eq}^n\text{-(2)} \Rightarrow x=7$$

$$\text{eq}^n\text{-(3)} \Rightarrow x=7$$

$$\text{eq}^n\text{-(4)} \Rightarrow y = \frac{-2}{3}$$

$$\therefore y = \frac{-7}{3} \neq \frac{-2}{3}$$

hence for no value of x and y given matrices are equal

$$(2). \begin{bmatrix} 2x-y & 5 \\ 3 & y \end{bmatrix} = \begin{bmatrix} 6 & 5 \\ 3 & -2 \end{bmatrix}$$

$$\therefore 2x-y = 6 \text{ -----(1)}$$

$$\text{and } y = -2 \text{ -----(2)}$$

$$\therefore (1) \Rightarrow x = 2 \text{ and } y = -2$$

$$(3) \mathbf{A} = \begin{bmatrix} 2 & 3 & 1 \\ 0 & -1 & 5 \end{bmatrix} \text{ and } \mathbf{B} = \begin{bmatrix} 1 & 2 & -1 \\ 0 & -1 & 3 \end{bmatrix}$$

$$\begin{aligned} \therefore (2\mathbf{A}-3\mathbf{B}) &= 2 \begin{bmatrix} 2 & 3 & 1 \\ 0 & -1 & 5 \end{bmatrix} - 3 \begin{bmatrix} 1 & 2 & -1 \\ 0 & -1 & 3 \end{bmatrix} \\ &= \begin{bmatrix} 4 & 6 & 2 \\ 0 & -2 & 10 \end{bmatrix} - \begin{bmatrix} 3 & 6 & -3 \\ 0 & -3 & 9 \end{bmatrix} \\ &= \begin{bmatrix} 4-3 & 6-6 & 2+3 \\ 0-0 & -2+3 & 10-9 \end{bmatrix} \\ &= \begin{bmatrix} 1 & 0 & 5 \\ 0 & 1 & 1 \end{bmatrix} \end{aligned}$$

$$(4) \begin{aligned} &3 \begin{bmatrix} 1 & 3 & 4 \\ 2 & 5 & 6 \end{bmatrix} - 2 \begin{bmatrix} 2 & 5 & 7 \\ 3 & 4 & 8 \end{bmatrix} + 4 \begin{bmatrix} 1 & 0 & 2 \\ 2 & 1 & -3 \end{bmatrix} \\ &= \begin{bmatrix} 3 & 9 & 12 \\ 6 & 15 & 18 \end{bmatrix} - \begin{bmatrix} 4 & 10 & 14 \\ 6 & 8 & 16 \end{bmatrix} + \begin{bmatrix} 4 & 0 & 8 \\ 8 & 4 & -12 \end{bmatrix} \end{aligned}$$

$$\begin{aligned} &= \begin{bmatrix} 3-4+4 & 9-10+0 & 12-14+8 \\ 6-6+8 & 15-8+4 & 18-16-12 \end{bmatrix} \\ &= \begin{bmatrix} 3 & -1 & 6 \\ 8 & 11 & -10 \end{bmatrix} \end{aligned}$$

(5)

$$\begin{aligned} \therefore a_{ij} &= (2i-j) \\ \therefore \begin{bmatrix} a_{11} & a_{12} \\ a_{21} & a_{22} \end{bmatrix}_{2 \times 2} &= \begin{bmatrix} 2 \times 1 - 1 & 2 \times 1 - 2 \\ 2 \times 2 - 1 & 2 \times 2 - 2 \end{bmatrix}_{2 \times 2} \\ &= \begin{bmatrix} 1 & 0 \\ 3 & 2 \end{bmatrix}_{2 \times 2} \end{aligned}$$

(6)

$$\begin{aligned} \therefore a_{ij} &= \frac{i}{j} \\ \therefore \begin{bmatrix} a_{11} & a_{12} & a_{13} \\ a_{21} & a_{22} & a_{23} \\ a_{31} & a_{32} & a_{33} \end{bmatrix} &= \begin{bmatrix} \frac{1}{1} & \frac{1}{2} & \frac{1}{3} \\ \frac{2}{1} & \frac{2}{2} & \frac{2}{3} \\ \frac{3}{1} & \frac{3}{2} & \frac{3}{3} \end{bmatrix}_{3 \times 3} \\ &= \begin{bmatrix} 1 & \frac{1}{2} & \frac{1}{3} \\ 2 & 1 & \frac{2}{3} \\ 3 & \frac{3}{2} & 1 \end{bmatrix}_{3 \times 3} \end{aligned}$$

(7)

$$0_{3 \times 3} = \begin{bmatrix} 0 & 0 & 0 \\ 0 & 0 & 0 \\ 0 & 0 & 0 \end{bmatrix}_{3 \times 3}$$

(8)

$$\mathbf{A} = \begin{bmatrix} 2 & 3 & 5 \\ -1 & 0 & 4 \end{bmatrix} \text{ and } \mathbf{B} = \begin{bmatrix} 4 & -2 & 3 \\ 2 & 6 & -1 \end{bmatrix}$$

$$\begin{aligned} \therefore \mathbf{A} + \mathbf{B} &= \begin{bmatrix} 2 & 3 & 5 \\ -1 & 0 & 4 \end{bmatrix} + \begin{bmatrix} 4 & -2 & 3 \\ 2 & 6 & -1 \end{bmatrix} \\ &= \begin{bmatrix} 2+4 & 3-2 & 5+3 \\ -1+2 & 0+6 & 4-1 \end{bmatrix} \\ &= \begin{bmatrix} 6 & 1 & 8 \\ 1 & 6 & 3 \end{bmatrix} \text{ ----- (1)} \end{aligned}$$

$$\begin{aligned} \text{and } \mathbf{B} + \mathbf{A} &= \begin{bmatrix} 4 & -2 & 3 \\ 2 & 6 & -1 \end{bmatrix} + \begin{bmatrix} 2 & 3 & 5 \\ -1 & 0 & 4 \end{bmatrix} \\ &= \begin{bmatrix} 4+2 & -2+3 & 3+5 \\ 2-1 & 6+0 & -1+4 \end{bmatrix} \\ &= \begin{bmatrix} 6 & 1 & 8 \\ 1 & 6 & 3 \end{bmatrix} \text{ ----- (2)} \end{aligned}$$

from eqn (1) and (2)
A+B=B+A

$$A = \begin{bmatrix} -1 & 2 \\ 3 & 4 \end{bmatrix} \text{ and } B = \begin{bmatrix} 3 & -2 \\ 1 & 5 \end{bmatrix}$$

$$\therefore 2A + B + X = 0$$

$$\therefore X = -(2A + B)$$

$$= -\left\{ 2 \begin{bmatrix} -1 & 2 \\ 3 & 4 \end{bmatrix} + \begin{bmatrix} 3 & -2 \\ 1 & 5 \end{bmatrix} \right\}$$

$$= -\left\{ \begin{bmatrix} -2 & 4 \\ 6 & 8 \end{bmatrix} + \begin{bmatrix} 3 & -2 \\ 1 & 5 \end{bmatrix} \right\}$$

$$= -\begin{bmatrix} -2+3 & 4-2 \\ 6+1 & 8+5 \end{bmatrix}$$

$$= -\begin{bmatrix} 1 & 2 \\ 7 & 13 \end{bmatrix}$$

$$= \begin{bmatrix} -1 & -2 \\ -7 & -13 \end{bmatrix}$$

(9)

3 Marks solution :-

(1)

$$\begin{vmatrix} 6i & -3i & 1 \\ 4 & 3i & -1 \\ 30 & 3 & i \end{vmatrix} = x + iy$$

$$\Rightarrow 6i(-3+3) + 3i(4i+30) + (12-90i) = x + iy$$

$$\Rightarrow 0 - 12 + 90i + 12 - 90i = x + iy$$

$$\Rightarrow 0 = x + iy$$

$$\Rightarrow x = 0 \text{ and } y = 0$$

(2)

$$A = \begin{bmatrix} 3 & -1 \\ -4 & 2 \end{bmatrix}$$

$$\text{as, } A = IA$$

$$\Rightarrow \begin{bmatrix} 3 & -1 \\ -4 & 2 \end{bmatrix} = \begin{bmatrix} 1 & 0 \\ 0 & 1 \end{bmatrix} \cdot A$$

$$R1 \rightarrow \frac{R1}{3}$$

$$\Rightarrow \begin{bmatrix} 1 & -\frac{1}{3} \\ -4 & 2 \end{bmatrix} = \begin{bmatrix} \frac{1}{3} & 0 \\ 0 & 1 \end{bmatrix} \cdot A$$

$$R2 \rightarrow R2 + 4R1$$

$$\Rightarrow \begin{bmatrix} 1 & -\frac{1}{3} \\ 0 & 2 - \frac{4}{3} \end{bmatrix} = \begin{bmatrix} \frac{1}{3} & 0 \\ \frac{4}{3} & 1 \end{bmatrix} \cdot A$$

$$\begin{bmatrix} 1 & -\frac{1}{3} \\ 0 & \frac{2}{3} \end{bmatrix} = \begin{bmatrix} \frac{1}{3} & 0 \\ \frac{4}{3} & 1 \end{bmatrix} \cdot A$$

$$R2 \rightarrow \frac{3}{2}R2$$

$$\Rightarrow \begin{bmatrix} 1 & -\frac{1}{3} \\ 0 & 1 \end{bmatrix} = \begin{bmatrix} \frac{1}{3} & 0 \\ 2 & \frac{3}{2} \end{bmatrix} \cdot A$$

$$R1 \rightarrow R1 + \frac{1}{3}R2$$

$$\Rightarrow \begin{bmatrix} 1 & 0 \\ 0 & 1 \end{bmatrix} = \begin{bmatrix} \frac{1}{3} + \frac{2}{3} & \frac{1}{2} \\ 2 & \frac{3}{2} \end{bmatrix} \cdot A$$

$$\text{i.e } I_2 = A^{-1} \cdot A$$

$$\Rightarrow A^{-1} = \begin{bmatrix} 1 & \frac{1}{2} \\ 2 & \frac{3}{2} \end{bmatrix}_{2 \times 2}$$

(3)

$$\therefore A = \begin{bmatrix} 1 & 0 & 0 \\ 0 & 2 & 0 \\ 0 & 0 & 3 \end{bmatrix} \text{ and } B = \begin{bmatrix} 1 & 2 & 3 \\ 3 & 2 & 1 \\ 1 & 3 & 2 \end{bmatrix}$$

$$\therefore AB = \begin{bmatrix} 1 & 0 & 0 \\ 0 & 2 & 0 \\ 0 & 0 & 3 \end{bmatrix} \begin{bmatrix} 1 & 2 & 3 \\ 3 & 2 & 1 \\ 1 & 3 & 2 \end{bmatrix}$$

$$= \begin{bmatrix} 1+0+0 & 2+0+0 & 3+0+0 \\ 0+6+0 & 0+4+0 & 0+2+0 \\ 0+0+3 & 0+0+9 & 0+0+6 \end{bmatrix}$$

$$= \begin{bmatrix} 1 & 2 & 3 \\ 6 & 4 & 2 \\ 3 & 9 & 6 \end{bmatrix}$$

(4)

$$\therefore A = \begin{bmatrix} 1 & -1 \\ -1 & 1 \end{bmatrix}$$

$$A^2 = \begin{bmatrix} 1 & -1 \\ -1 & 1 \end{bmatrix} \cdot \begin{bmatrix} 1 & -1 \\ -1 & 1 \end{bmatrix}$$

$$A^2 = \begin{bmatrix} 1+1 & -1-1 \\ -1-1 & 1+1 \end{bmatrix}$$

$$= \begin{bmatrix} 2 & -2 \\ -2 & 2 \end{bmatrix}$$

$$A^3 = A^2 \cdot A$$

$$= \begin{bmatrix} 2 & -2 \\ -2 & 2 \end{bmatrix} \cdot \begin{bmatrix} 1 & -1 \\ -1 & 1 \end{bmatrix}$$

$$= \begin{bmatrix} 2+2 & -2-2 \\ -2-2 & 2+2 \end{bmatrix}$$

$$= \begin{bmatrix} 4 & -4 \\ -4 & 4 \end{bmatrix}$$

$$= 4 \begin{bmatrix} 1 & -1 \\ -1 & 1 \end{bmatrix}$$

$$\Rightarrow A^3 = 4A$$

(5)

$$\cos \theta \begin{bmatrix} \cos \theta & \sin \theta \\ -\sin \theta & \cos \theta \end{bmatrix} + \sin \theta \begin{bmatrix} \sin \theta & -\cos \theta \\ \cos \theta & \sin \theta \end{bmatrix}$$

$$= \begin{bmatrix} \cos^2 \theta & \sin \theta \cos \theta \\ -\sin \theta \cos \theta & \cos^2 \theta \end{bmatrix} + \begin{bmatrix} \sin^2 \theta & -\sin \theta \cos \theta \\ \sin \theta \cos \theta & \sin^2 \theta \end{bmatrix}$$

$$= \begin{bmatrix} \cos^2 \theta + \sin^2 \theta & \sin \theta \cos \theta - \sin \theta \cos \theta \\ -\sin \theta \cos \theta + \sin \theta \cos \theta & \cos^2 \theta + \sin^2 \theta \end{bmatrix}$$

$$= \begin{bmatrix} 1 & 0 \\ 0 & 1 \end{bmatrix} = I_2$$

(1)

$$\therefore A = \begin{bmatrix} 1 & 0 \\ -1 & 7 \end{bmatrix}$$

$$A^2 = A.A$$

$$= \begin{bmatrix} 1 & 0 \\ -1 & 7 \end{bmatrix} \cdot \begin{bmatrix} 1 & 0 \\ -1 & 7 \end{bmatrix}$$

$$= \begin{bmatrix} 1+0 & 0+0 \\ -1-7 & 0+49 \end{bmatrix}$$

$$A^2 = \begin{bmatrix} 1 & 0 \\ -8 & 49 \end{bmatrix}$$

$$\text{as, } A^2 = 8A + kI$$

$$\Rightarrow \begin{bmatrix} 1 & 0 \\ -8 & 49 \end{bmatrix} = 8 \begin{bmatrix} 1 & 0 \\ -1 & 7 \end{bmatrix} + k \begin{bmatrix} 1 & 0 \\ 0 & 1 \end{bmatrix}$$

$$= \begin{bmatrix} 8 & 0 \\ -8 & 56 \end{bmatrix} + k \begin{bmatrix} 1 & 0 \\ 0 & 1 \end{bmatrix}$$

$$\begin{bmatrix} 1 & 0 \\ -8 & 49 \end{bmatrix} - \begin{bmatrix} 8 & 0 \\ -8 & 56 \end{bmatrix} = k \begin{bmatrix} 1 & 0 \\ 0 & 1 \end{bmatrix}$$

$$\begin{bmatrix} 1-8 & 0-0 \\ -8+8 & 49-56 \end{bmatrix} = k \begin{bmatrix} 1 & 0 \\ 0 & 1 \end{bmatrix}$$

$$\begin{bmatrix} -7 & 0 \\ 0 & -7 \end{bmatrix} = k \begin{bmatrix} 1 & 0 \\ 0 & 1 \end{bmatrix}$$

$$(-7) \begin{bmatrix} 1 & 0 \\ 0 & 1 \end{bmatrix} = k \begin{bmatrix} 1 & 0 \\ 0 & 1 \end{bmatrix}$$

$$\text{hence } , k = -7$$

(2)

$$A = \begin{bmatrix} 3 & -5 \\ -4 & 2 \end{bmatrix}$$

$$\therefore A^2 = A.A = \begin{bmatrix} 3 & -5 \\ -4 & 2 \end{bmatrix} \cdot \begin{bmatrix} 3 & -5 \\ -4 & 2 \end{bmatrix}$$

$$= \begin{bmatrix} 9+20 & -15-10 \\ -12-8 & 20+4 \end{bmatrix}$$

$$A^2 = \begin{bmatrix} 29 & -25 \\ -20 & 24 \end{bmatrix}$$

$$\text{Now, L.H.S} = A^2 - 5A - 14I$$

$$= \begin{bmatrix} 29 & -25 \\ -20 & 24 \end{bmatrix} - 5 \begin{bmatrix} 3 & -5 \\ -4 & 2 \end{bmatrix} - 14 \begin{bmatrix} 1 & 0 \\ 0 & 1 \end{bmatrix}$$

$$= \begin{bmatrix} 29 & -25 \\ -20 & 24 \end{bmatrix} - \begin{bmatrix} 15 & -25 \\ -20 & 10 \end{bmatrix} - \begin{bmatrix} 14 & 0 \\ 0 & 14 \end{bmatrix}$$

$$= \begin{bmatrix} 29-15-14 & -25+25-0 \\ -20+20-0 & 24-10-14 \end{bmatrix}$$

$$\Rightarrow \text{L.H.S} = \begin{bmatrix} 0 & 0 \\ 0 & 0 \end{bmatrix} = \text{R.H.S Ans..}$$

(3)

$$\therefore A = \begin{bmatrix} \cos\theta & \sin\theta \\ -\sin\theta & \cos\theta \end{bmatrix}$$

$$\Rightarrow A^2 = A.A$$

$$= \begin{bmatrix} \cos\theta & \sin\theta \\ -\sin\theta & \cos\theta \end{bmatrix} \cdot \begin{bmatrix} \cos\theta & \sin\theta \\ -\sin\theta & \cos\theta \end{bmatrix}$$

$$= \begin{bmatrix} \cos^2\theta - \sin^2\theta & \sin\theta\cos\theta + \sin\theta\cos\theta \\ -\sin\theta\cos\theta - \sin\theta\cos\theta & -\sin^2\theta + \cos^2\theta \end{bmatrix}$$

$$= \begin{bmatrix} \cos 2\theta & 2\sin\theta\cos\theta \\ -2\sin\theta\cos\theta & \cos 2\theta \end{bmatrix}$$

$$A^2 = \begin{bmatrix} \cos 2\theta & \sin 2\theta \\ -\sin 2\theta & \cos 2\theta \end{bmatrix}$$

$$\therefore \text{Again,}$$

$$A^3 = A^2 \cdot A$$

$$= \begin{bmatrix} \cos 2\theta & \sin 2\theta \\ -\sin 2\theta & \cos 2\theta \end{bmatrix} \cdot \begin{bmatrix} \cos\theta & \sin\theta \\ -\sin\theta & \cos\theta \end{bmatrix}$$

$$= \begin{bmatrix} \cos\theta\cos 2\theta - \sin\theta\sin 2\theta & \sin\theta\cos 2\theta + \cos\theta\sin 2\theta \\ -\cos\theta\sin 2\theta - \sin\theta\cos 2\theta & -\sin\theta\sin 2\theta + \cos\theta\cos 2\theta \end{bmatrix}$$

$$= \begin{bmatrix} \cos(\theta + 2\theta) & \sin(\theta + 2\theta) \\ -\sin(\theta + 2\theta) & \cos(\theta + 2\theta) \end{bmatrix}$$

$$\Rightarrow A^3 = \begin{bmatrix} \cos 3\theta & \sin 3\theta \\ -\sin 3\theta & \cos 3\theta \end{bmatrix}$$

$$\text{similarly,}$$

$$A^n = \begin{bmatrix} \cos n\theta & \sin n\theta \\ -\sin n\theta & \cos n\theta \end{bmatrix}; n \in \mathbb{N}$$

(4)

$$[1 \ x \ 1]_{1 \times 3} \begin{bmatrix} 1 & 2 & 3 \\ 4 & 5 & 6 \\ 3 & 2 & 5 \end{bmatrix}_{3 \times 3} \begin{bmatrix} 1 \\ -2 \\ 3 \end{bmatrix}_{3 \times 1} = 0$$

$$\Rightarrow [1 + 4x + 3 \ 2 + 5x + 2 \ 3 + 6x + 5]_{1 \times 3} \begin{bmatrix} 1 \\ -2 \\ 3 \end{bmatrix}_{3 \times 1} = 0$$

$$\Rightarrow [(1 + 4x + 3) - 2(2 + 5x + 2) + 3(3 + 6x + 5)] = 0$$

$$\Rightarrow (4x + 4) - 2(5x + 4) + 3(6x + 8) = 0$$

$$\Rightarrow 4x + 4 - 10x - 8 + 18x + 24 = 0$$

$$\Rightarrow (4x - 10x + 18x) + (4 - 8 + 24) = 0$$

$$\Rightarrow 12x + 20 = 0$$

$$\Rightarrow \therefore x = -\frac{20}{12} = -\frac{5}{3}$$

$$(5) \quad \therefore A = \begin{bmatrix} -3 \\ 5 \\ 2 \end{bmatrix} \text{ and } B = [1 \ 6 \ -4]$$

$$\therefore A \cdot B = \begin{bmatrix} -3 \\ 5 \\ 2 \end{bmatrix}_{3 \times 1} \cdot [1 \ 6 \ -4]_{1 \times 3}$$

$$\Rightarrow A \cdot B = \begin{bmatrix} -3 & -18 & 12 \\ 5 & 30 & -20 \\ 2 & 12 & -8 \end{bmatrix}_{3 \times 3}$$

$$\therefore (AB)' = \begin{bmatrix} -3 & 5 & 2 \\ -18 & 30 & 12 \\ 12 & -20 & -8 \end{bmatrix} \text{--- (i)}$$

Now,

$$B'A' = \begin{bmatrix} 1 \\ 6 \\ -4 \end{bmatrix}_{3 \times 1} [-3 \ 5 \ 2]_{1 \times 3}$$

$$= \begin{bmatrix} -3 & 5 & 2 \\ -18 & 30 & 12 \\ 12 & -20 & -8 \end{bmatrix}_{3 \times 3} \text{--- (ii)}$$

from equation (i) and (ii)

$$(AB)' = B'A'$$

$$(6) \quad \therefore A = \begin{bmatrix} 1 & 3 & 5 \\ -6 & 8 & 3 \\ -4 & 6 & 5 \end{bmatrix}_{3 \times 3}$$

$$A' = \begin{bmatrix} 1 & -6 & -4 \\ 3 & 8 & 6 \\ 5 & 3 & 5 \end{bmatrix}_{3 \times 3}$$

Hence corresponding symmetric part

$$= \frac{1}{2}(A + A')$$

$$= \frac{1}{2} \left\{ \begin{bmatrix} 1 & 3 & 5 \\ -6 & 8 & 3 \\ -4 & 6 & 5 \end{bmatrix} + \begin{bmatrix} 1 & -6 & -4 \\ 3 & 8 & 6 \\ 5 & 3 & 5 \end{bmatrix} \right\}$$

$$= \frac{1}{2} \left\{ \begin{bmatrix} 1+1 & 3-6 & 5-4 \\ -6+3 & 8+8 & 3+6 \\ -4+5 & 6+3 & 5+4 \end{bmatrix} \right\}$$

$$= \frac{1}{2} \begin{bmatrix} 2 & -3 & 1 \\ -3 & 16 & 9 \\ 1 & 9 & 9 \end{bmatrix}$$

Again

$$\text{Skew - symmetric part} = \frac{1}{2}(A - A')$$

$$= \frac{1}{2} \left\{ \begin{bmatrix} 1 & 3 & 5 \\ -6 & 8 & 3 \\ -4 & 6 & 5 \end{bmatrix} - \begin{bmatrix} 1 & -6 & -4 \\ 3 & 8 & 6 \\ 5 & 3 & 5 \end{bmatrix} \right\}$$

$$= \frac{1}{2} \begin{bmatrix} 1-1 & 3+6 & 5+4 \\ -6-3 & 8-8 & 3-6 \\ -4-5 & 6-3 & 5-5 \end{bmatrix}$$

$$= \frac{1}{2} \begin{bmatrix} 0 & 9 & 9 \\ -9 & 0 & -3 \\ -9 & 3 & 0 \end{bmatrix}$$

(7)

$$\therefore A = \begin{bmatrix} 2 & -3 & 3 \\ 2 & 2 & 3 \\ 3 & -2 & 2 \end{bmatrix}$$

as $A = IA$

$$\Rightarrow \begin{bmatrix} 2 & -3 & 3 \\ 2 & 2 & 3 \\ 3 & -2 & 2 \end{bmatrix} = \begin{bmatrix} 1 & 0 & 0 \\ 0 & 1 & 0 \\ 0 & 0 & 1 \end{bmatrix} \cdot A$$

$R_1 \leftrightarrow R_3$

$$\Rightarrow \begin{bmatrix} 3 & -2 & 2 \\ 2 & 2 & 3 \\ 2 & -3 & 3 \end{bmatrix} = \begin{bmatrix} 0 & 0 & 1 \\ 0 & 1 & 0 \\ 1 & 0 & 0 \end{bmatrix} \cdot A$$

$R_1 \rightarrow R_1 - R_3, R_2 \rightarrow R_2 - R_3$

$$\Rightarrow \begin{bmatrix} 1 & 1 & -1 \\ 0 & 5 & 0 \\ 2 & -3 & 3 \end{bmatrix} = \begin{bmatrix} -1 & 0 & 1 \\ -1 & 1 & 0 \\ 1 & 0 & 0 \end{bmatrix} \cdot A$$

$R_3 \rightarrow R_3 - 2R_1$

$$\Rightarrow \begin{bmatrix} 1 & 1 & -1 \\ 0 & 5 & 0 \\ 0 & -5 & 5 \end{bmatrix} = \begin{bmatrix} -1 & 0 & 1 \\ -1 & 1 & 0 \\ 3 & 0 & -2 \end{bmatrix} \cdot A$$

$R_2 \rightarrow \frac{R_2}{5}$

$$\Rightarrow \begin{bmatrix} 1 & 1 & -1 \\ 0 & 1 & 0 \\ 0 & -5 & 5 \end{bmatrix} = \begin{bmatrix} -1 & 0 & 1 \\ -1/5 & 1/5 & 0 \\ 3 & 0 & -2 \end{bmatrix} \cdot A$$

$R_1 \rightarrow R_1 - R_2, R_3 \rightarrow R_3 + 5R_2$

$$\Rightarrow \begin{bmatrix} 1 & 0 & -1 \\ 0 & 1 & 0 \\ 0 & 0 & 5 \end{bmatrix} = \begin{bmatrix} -4/5 & -1/5 & 1 \\ -1/5 & 1/5 & 0 \\ 2 & 1 & -2 \end{bmatrix} \cdot A$$

$R_3 \rightarrow \frac{R_3}{5}$

$$\Rightarrow \begin{bmatrix} 1 & 0 & -1 \\ 0 & 1 & 0 \\ 0 & 0 & 1 \end{bmatrix} = \begin{bmatrix} -4/5 & -1/5 & 1 \\ -1/5 & 1/5 & 0 \\ 2/5 & 1/5 & -2/5 \end{bmatrix} \cdot A$$

$R_1 \rightarrow R_1 + R_3$

$$\Rightarrow \begin{bmatrix} 1 & 0 & 0 \\ 0 & 1 & 0 \\ 0 & 0 & 1 \end{bmatrix} = \begin{bmatrix} -2/5 & 0 & 3/5 \\ -1/5 & 1/5 & 0 \\ 2/5 & 1/5 & -2/5 \end{bmatrix} \cdot A$$

$$\text{Hence, } A^{-1} = \begin{bmatrix} -2/5 & 0 & 3/5 \\ -1/5 & 1/5 & 0 \\ 2/5 & 1/5 & -2/5 \end{bmatrix}$$

(8)

$$\therefore A = \begin{bmatrix} 1 & -1 & 2 \\ 0 & 2 & -3 \\ 3 & -2 & 4 \end{bmatrix}$$

$$\therefore |A| = \begin{vmatrix} 1 & -1 & 2 \\ 0 & 2 & -3 \\ 3 & -2 & 4 \end{vmatrix}$$

$$= 1(8-6) + (0+9) + 2(0-6)$$

$$= 2 + 9 - 12$$

$$|A| = -1 \quad \text{---- (i)}$$

Corresponding ,minors of matrix 'A' is -

$$a_{11} = \begin{vmatrix} 2 & -3 \\ -2 & 4 \end{vmatrix} = 8 - 6 = 2$$

$$a_{12} = \begin{vmatrix} 0 & -3 \\ 3 & 4 \end{vmatrix} = 0 + 9 = 9$$

$$a_{13} = \begin{vmatrix} 0 & 2 \\ 3 & -2 \end{vmatrix} = 0 - 6 = -6$$

$$a_{21} = \begin{vmatrix} -1 & 2 \\ -2 & 4 \end{vmatrix} = -4 + 4 = 0$$

$$a_{22} = \begin{vmatrix} 1 & 2 \\ 3 & 4 \end{vmatrix} = 4 - 6 = -2$$

$$a_{23} = \begin{vmatrix} 1 & -1 \\ 3 & -2 \end{vmatrix} = -2 + 3 = 1$$

$$a_{31} = \begin{vmatrix} -1 & 2 \\ 2 & -3 \end{vmatrix} = 3 - 4 = -1$$

$$a_{32} = \begin{vmatrix} 1 & 2 \\ 0 & -3 \end{vmatrix} = -3 - 0 = -3$$

$$a_{33} = \begin{vmatrix} 1 & -1 \\ 0 & 2 \end{vmatrix} = 2 - 0 = 2$$

$$\therefore \text{cofactor matrix} = \begin{bmatrix} 2 & -9 & -6 \\ 0 & -2 & -1 \\ -1 & 3 & 2 \end{bmatrix}$$

$$\therefore \text{adj}(A) = [\text{cofactor matrix}]' = \begin{bmatrix} 2 & 0 & -1 \\ -9 & -2 & 3 \\ -6 & -1 & 2 \end{bmatrix}$$

$$\Rightarrow |\text{adj}(A)| = 2(-4+3) - 0 - (9-12)$$

$$= 2 \times (-1) - (-3)$$

$$= -2 + 3 = 1$$

$$= (-1)^2$$

$$\Rightarrow |\text{adj}(A)| = |A|^2 \quad [\text{by using eqn (i)}]$$

(9)

$$\therefore A = \begin{bmatrix} 0 & 1 & -1 \\ -1 & 0 & 1 \\ 1 & -1 & 0 \end{bmatrix} \Rightarrow A' = \begin{bmatrix} 0 & -1 & 1 \\ 1 & 0 & -1 \\ -1 & 1 & 0 \end{bmatrix}$$

$$\Rightarrow A + A' = \begin{bmatrix} 0 & 1 & -1 \\ -1 & 0 & 1 \\ 1 & -1 & 0 \end{bmatrix} + \begin{bmatrix} 0 & -1 & 1 \\ 1 & 0 & -1 \\ -1 & 1 & 0 \end{bmatrix}$$

$$= \begin{bmatrix} 0+0 & 1-1 & -1+1 \\ -1+1 & 0+0 & 1-1 \\ 1-1 & -1+1 & 0+0 \end{bmatrix}$$

$$\Rightarrow (A + A') = \begin{bmatrix} 0 & 0 & 0 \\ 0 & 0 & 0 \\ 0 & 0 & 0 \end{bmatrix} \quad \text{---- (i)}$$

$$\text{and } A - A' = \begin{bmatrix} 0 & 1 & -1 \\ -1 & 0 & 1 \\ 1 & -1 & 0 \end{bmatrix} - \begin{bmatrix} 0 & -1 & 1 \\ 1 & 0 & -1 \\ -1 & 1 & 0 \end{bmatrix}$$

$$= \begin{bmatrix} 0-0 & 1+1 & -1-1 \\ -1-1 & 0-0 & 1+1 \\ 1+1 & -1-1 & 0-0 \end{bmatrix}$$

$$\Rightarrow (A - A') = \begin{bmatrix} 0 & 2 & -2 \\ -2 & 0 & 2 \\ 2 & -2 & 0 \end{bmatrix} \quad \text{---- (ii)}$$

Again,

$$\therefore (A + A')' = \begin{bmatrix} 0 & 0 & 0 \\ 0 & 0 & 0 \\ 0 & 0 & 0 \end{bmatrix}' = \begin{bmatrix} 0 & 0 & 0 \\ 0 & 0 & 0 \\ 0 & 0 & 0 \end{bmatrix}$$

$$\Rightarrow (A + A')' = (A + A')$$

$\Rightarrow (A + A')$ is a symmetric matrix

Also,

$$(A - A')' = \begin{bmatrix} 0 & 2 & -2 \\ -2 & 0 & 2 \\ 2 & -2 & 0 \end{bmatrix}' = \begin{bmatrix} 0 & -2 & 2 \\ 2 & 0 & -2 \\ -2 & 2 & 0 \end{bmatrix}$$

$$= - \begin{bmatrix} 0 & 2 & -2 \\ -2 & 0 & 2 \\ 2 & -2 & 0 \end{bmatrix}$$

$$\Rightarrow (A - A')' = -(A - A')$$

$\Rightarrow (A - A')$ is a skew - symmetric matrix.

10).

$$\therefore F(x) = \begin{bmatrix} \cos x & -\sin x & 0 \\ \sin x & \cos x & 0 \\ 0 & 0 & 1 \end{bmatrix}$$

$$f(x+y) = \begin{bmatrix} \cos(x+y) & -\sin(x+y) & 0 \\ \sin(x+y) & \cos(x+y) & 0 \\ 0 & 0 & 1 \end{bmatrix} \text{---- (i)}$$

$$f(x+y) = \begin{bmatrix} \cos x \cos y - \sin x \sin y & -\sin x \cos y - \cos x \sin y & 0 \\ \sin x \cos y + \cos x \sin y & \cos x \cos y - \sin x \sin y & 0 \\ 0 & 0 & 1 \end{bmatrix}$$

Again,

$$f(x).f(y) = \begin{bmatrix} \cos x & -\sin x & 0 \\ \sin x & \cos x & 0 \\ 0 & 0 & 1 \end{bmatrix} \cdot \begin{bmatrix} \cos y & -\sin y & 0 \\ \sin y & \cos y & 0 \\ 0 & 0 & 1 \end{bmatrix}$$

$$= \begin{bmatrix} \cos x \cos y - \sin x \sin y & -\sin y \cos x - \sin x \cos y & 0 \\ \sin x \cos y + \cos x \sin y & -\sin x \sin y + \cos x \cos y & 0 \\ 0 & 0 & 1 \end{bmatrix}$$

$$f(x).f(y) = \begin{bmatrix} \cos(x+y) & -\sin(x+y) & 0 \\ \sin(x+y) & \cos(x+y) & 0 \\ 0 & 0 & 1 \end{bmatrix} \text{---- (ii)}$$

from eqn (i) and (ii) we get ,

$$f(x+y) = f(x).f(y)$$

Multiple choice Questions

बहुविकल्पीय प्रश्न

Q.1. If $A = \begin{bmatrix} 2 & 4 \\ -5 & -1 \end{bmatrix}$ then $|A|$?

यदि $\begin{bmatrix} 2 & 4 \\ -5 & -1 \end{bmatrix}$ तो $|A| = ?$

- (a) -18 (b) 18
-
- (c) 0 (d) 12

Q.2. If $\begin{vmatrix} x & 2 \\ 18 & x \end{vmatrix}$ then x is equal to

यदि $\begin{vmatrix} x & 2 \\ 18 & x \end{vmatrix}$ तो x का मान है -

- (a) 6 (b)
- ± 6
-
- (c) -6 (d) zero

Q.3. $\begin{vmatrix} \sin 10^\circ & -\cos 10^\circ \\ \sin 80^\circ & \cos 80^\circ \end{vmatrix} =$

- (a) 1 (b) -1
-
- (c)
- ± 1
- (d) 0

Q.4. If A is a square Matrix then $|A'| = ?$

यदि A एक वर्ग आव्यूह है तो $|A'| = ?$

- (a) A (b)
- $-|A|$
-
- (c)
- $|A|$
- (d)
- A'

Q.5. Let A be a square Matrix of order 3×3 and $|A| = 2$ then $|2A|$ is equal to

माना A एक वर्ग आव्यूह है 3×3 कोटि का और $|A| = 2$ तो $|2A|$ का मान होगा ?

- (a) 16 (b) -16
-
- (c) 8 (d) -8

Q.6. If I is an Identity Matrix then $|I| = ?$

यदि I एक तत्समक आव्यूह है तो $|I| = ?$

- (a) -1 (b) -2
-
- (c) 1 (d) 2

Q.7. If $\begin{vmatrix} x & 2 \\ 2 & 1 \end{vmatrix} = 0$ then value of x is

यदि $\begin{vmatrix} x & 2 \\ 2 & 1 \end{vmatrix} = 0$ तो x का मान है

- (a) 2 (b) -4
-
- (c) 5 (d) 1

Q.8. $\begin{vmatrix} 2 & 3 & 4 \\ 0 & 5 & 6 \\ 0 & 0 & 2 \end{vmatrix} = ?$

- (a) 20 (b) 30
-
- (c) 40 (d) -20

Q.9. Determinant of null square matrix will be

शून्य वर्ग आव्यूह का सारणिक मान होगा?

- (a) 0 (b) 1
-
- (c) 6 (d) None

Q.10. Area of triangle is always

त्रिभुज का क्षेत्रफल हमेशा होता है -

- (a) Negative (b) Positive
-
- ऋणात्मक धनात्मक
-
- (c) Zero (d) None of these
-
- शून्य इनमें से कोई नहीं

Q.11. A square Matrix A is invertible if

एक वर्ग आव्यूह व्युत्क्रमणीय है, यदि -

- (a)
- $|A| = 0$
- (b)
- $|A| = 1$
-
- (c)
- $|A| \neq 0$
- (d) None of these

Q.12. If A is invertible matrix then A^{-1} will be

यदि A व्युत्क्रमणीय आव्यूह है तो A^{-1} का मान होगा

- (a)
- $\text{adj } A$
- (b)
- $\frac{1}{|A|} \text{adj } A$
-
- (c)
- $\frac{-1}{|A|} \text{adj } A$
- (d) None of these

Q.13. $\begin{vmatrix} 2 & 0 & 0 \\ 0 & 3 & 0 \\ 0 & 0 & 8 \end{vmatrix} = ?$

- (a) 8 (b) 40
-
- (c) 48 (d) 50

Q.14. $\begin{vmatrix} 2 & 4 \\ 0 & -2 \end{vmatrix} = ?$

- (a) -4 (b) 2
(c) 6 (d) 0

Q.15. $\begin{vmatrix} 0 & 0 \\ 5 & 8 \end{vmatrix} = ?$

- (a) 5 (b) 40
(c) 8 (d) 0

Q.16. Which of the following is correct?

निम्नलिखित में से कौन सही है?

- (a) $|A| = |A'|$ (b) $|A| = -|A'|$
(c) $|A| \neq |A'|$ (d) None

Q.17. Value of the determinant of a matrix exist, if matrix is -

किसी आव्यूह के सारणिक मान संभव है यदि आव्यूह है :-

- (a) square matrix (वर्ग आव्यूह)
(b) Rectangle Matrix (आयत आव्यूह)
(c) Any Matrix कोई भी आव्यूह
(d) None of these इनमें से कोई नहीं

Q.18. If $\begin{vmatrix} x & 2 \\ 3 & 1 \end{vmatrix} = 8$ then value of x will be

यदि $\begin{vmatrix} x & 2 \\ 3 & 1 \end{vmatrix} = 8$ तो x का मान होगा

- (a) 8 (b) 6
(c) 14 (d) 0

Q.19. $\begin{vmatrix} 0 & 2 & 4 \\ 0 & 0 & -7 \\ 0 & 0 & 0 \end{vmatrix} = ?$

- (a) 0 (b) 8
(c) -14 (d) -56

Q.20. $\begin{vmatrix} 2 & 3 & 1 \\ 5 & 6 & 8 \\ 2 & 3 & 1 \end{vmatrix} = ?$

- (a) 5 (b) -1
(c) 0 (d) None of these

Q.21. $\begin{vmatrix} 7 & 8 & -1 \\ 5 & 4 & 3 \\ 5 & 4 & 3 \end{vmatrix} = ?$

- (a) 3 (b) 1

- (c) 0 (d) 2

Q.22. $\begin{vmatrix} 2 & 3 \\ 2 & 3 \end{vmatrix} = ?$

- (a) 0 (b) 1
(c) 2 (d) 3

Q.23. $\begin{vmatrix} 5 & 4 \\ 2 & 8 \end{vmatrix} = ?$

- (a) 40 (b) 48
(c) 42 (d) 32

Q.24. $\begin{vmatrix} 1 & 1 \\ 1 & 1 \end{vmatrix} = ?$

- (a) 2 (b) 1
(c) 4 (d) 0

Q.25. If $\Delta = \begin{vmatrix} 1 & -3 & 2 \\ 4 & -1 & 2 \\ 3 & 5 & 2 \end{vmatrix}$ then co-factor of 5 is

यदि $\Delta = \begin{vmatrix} 1 & -3 & 2 \\ 4 & -1 & 2 \\ 3 & 5 & 2 \end{vmatrix}$ तो 5 का सहखण्ड है

- (a) 6 (b) -6
(c) 2 (d) 4

Q.26. Minor of a_{21} in $\begin{vmatrix} 5 & 6 \\ 2 & 3 \end{vmatrix}$ is

$\begin{vmatrix} 5 & 6 \\ 2 & 3 \end{vmatrix}$ में a_{21} का Minor है

- (a) 5 (b) 2
(c) 6 (d) 0

Q.27. If $\begin{vmatrix} 3 & 4 & 7 \\ 2 & 0 & 1 \\ 2 & 1 & 1 \end{vmatrix}$ then $M_{11} = ?$

- (a) 3 (b) 1
(c) 2 (d) -1

Q.28. If $A = \begin{bmatrix} 2 & 3 \\ -5 & 4 \end{bmatrix}$ then $\text{adj } A = ?$

- (a) $\begin{bmatrix} 2 & 3 \\ -5 & 4 \end{bmatrix}$ (b) $\begin{bmatrix} 3 & 2 \\ 4 & -5 \end{bmatrix}$

(c) $\begin{bmatrix} -5 & 4 \\ 2 & 3 \end{bmatrix}$ (d) $\begin{bmatrix} 4 & -3 \\ 5 & 2 \end{bmatrix}$

Q 29. If $A_{n \times n}$ Matrix then $|kA| = ?$, k is constant-

यदि $A_{n \times n}$ एक आव्यूह है तो $|kA| = ?$, k नियत है।

- (a) $k|A|$ (b) $k^n|A|$
 (c) $k \cdot |A|^n$ (d) $k^n|A|^n$

Q 30. Determinant of diagonal Matrix $\text{diag. } [5, 6, 7]$ is-

विकर्ण आव्यूह $\text{diag } [5, 6, 7]$ का सारणिक मान है:

- (a) 30 (b) 42
 (c) 35 (d) 210

MCQ Ans:-
1-b, 2-b, 3-a, 4-c, 5-a, 6-c, 7-b, 8-a, 9-a, 10-b, 11-c, 12-b, 13-c, 14-a, 15-d, 16-a, 17-a, 18-c, 19-a, 20-c, 21-c, 22-a, 23-d, 24-d, 25-a, 26-c, 27-d, 28-d, 29-b, 30-d

Very Short Questions (2 Marks) अतिलघुत्तरीय प्रश्न

Q.1. Evaluate

मान ज्ञात करें।

- (a) $\begin{vmatrix} 5 & 4 \\ 2 & 6 \end{vmatrix}$ (b) $\begin{vmatrix} 2 & 3 & 4 \\ 1 & 0 & 2 \\ 5 & 0 & 3 \end{vmatrix}$
 (c) $\begin{vmatrix} 1 & 4 & 0 \\ 2 & 5 & 0 \\ 3 & 6 & 3 \end{vmatrix}$ (d) $\begin{vmatrix} 2 & 4 & 6 \\ 1 & 2 & 3 \\ 3 & 1 & 0 \end{vmatrix}$
 (e) $\begin{vmatrix} 1 & 1 & 1 \\ 2 & 2 & 2 \\ 3 & 3 & 3 \end{vmatrix}$

Q.2. If $\begin{vmatrix} 3x & 7 \\ -2 & 4 \end{vmatrix} = \begin{vmatrix} 8 & 7 \\ 6 & 4 \end{vmatrix}$, then find the value of x .

यदि $\begin{vmatrix} 3x & 7 \\ -2 & 4 \end{vmatrix} = \begin{vmatrix} 8 & 7 \\ 6 & 4 \end{vmatrix}$ तो x का मान ज्ञात करें।

Q.3. Write the co-factor of all elements of $\begin{vmatrix} 3 & -2 \\ 4 & 6 \end{vmatrix}$

सारणिक $\begin{vmatrix} 3 & -2 \\ 4 & 6 \end{vmatrix}$ के सभी अवयवों के सहखण्ड लिखें।

Q.4. Prove that $\begin{vmatrix} 1 & w & w^2 \\ w & w^2 & 1 \\ w^2 & 1 & w \end{vmatrix} = 0$

Where, $1 + w + w^2 = 0$

सिद्ध करें $\begin{vmatrix} 1 & w & w^2 \\ w & w^2 & 1 \\ w^2 & 1 & w \end{vmatrix} = 0$

जहाँ, $1 + w + w^2 = 0$

Q.5. If $\begin{vmatrix} x-9 & 1 \\ 7 & 1 \end{vmatrix} = 0$, then find the value of x .

यदि $\begin{vmatrix} x-9 & 1 \\ 7 & 1 \end{vmatrix} = 0$ तो x का मान ज्ञात करें।

Q.6. Write the Matrix form of the equations

$$2x - y = -2, 3x + 4y = 3.$$

समीकरण $2x - y = -2, 3x + 4y = 3$ को आव्यूह रूप में लिखें।

Q.7. Evaluate $\begin{vmatrix} 5 & 60 & 7 \\ 3 & 36 & 2 \\ 2 & 24 & 4 \end{vmatrix}$

Solutions of Very Short Questions (2 Marks)

1. (a) $\begin{vmatrix} 5 & 4 \\ 2 & 6 \end{vmatrix} = 5 \times 6 - 2 \times 4 = 30 - 8 = 22 \text{ Ans}$

(b) $\begin{vmatrix} 2 & 3 & 4 \\ 1 & 0 & 2 \\ 5 & 0 & 3 \end{vmatrix}$

Expand along C_2

C_2 के अनुदिश विस्तार

$$= -3 \begin{vmatrix} 1 & 2 \\ 5 & 3 \end{vmatrix} + 0 \begin{vmatrix} 2 & 4 \\ 5 & 3 \end{vmatrix} - 0 \begin{vmatrix} 2 & 4 \\ 1 & 2 \end{vmatrix}$$

$$= -3(3 - 10) + 0 - 0$$

$$= -3 \times (-7) = +21 \text{ Ans}$$

(c) $\Delta = \begin{vmatrix} 1 & 4 & 0 \\ 2 & 5 & 0 \\ 3 & 6 & 3 \end{vmatrix}$

Expand along C_3

C_3 के अनुदिश विस्तार

$$\Delta = +3 \begin{vmatrix} 1 & 4 \\ 2 & 5 \end{vmatrix} = 3 \times (5 - 8) \\ = 3 \times (-3) \\ = -9 \text{ Ans}$$

$$(d) \begin{vmatrix} 2 & 4 & 6 \\ 1 & 2 & 3 \\ 3 & 1 & 0 \end{vmatrix} \\ R_2 \rightarrow 2R_2 \\ = \frac{1}{2} \begin{vmatrix} 2 & 4 & 6 \\ 2 & 4 & 6 \\ 3 & 1 & 0 \end{vmatrix} \\ = \frac{1}{2} \times 0 = 0 \quad \{ \because R_1 = R_2 \}$$

$$(e) \begin{vmatrix} 1 & 1 & 1 \\ 2 & 2 & 2 \\ 3 & 3 & 3 \end{vmatrix} \\ \because R_1 = R_2 = R_3 \text{ या } C_1 = C_2 = C_3 \\ = 0 \text{ Ans}$$

$$2. \begin{vmatrix} 3x & 7 \\ -2 & 4 \end{vmatrix} = \begin{vmatrix} 8 & 7 \\ 6 & 4 \end{vmatrix} \\ \Rightarrow 12x - (-14) = 32 - 42 \\ \Rightarrow 12x + 14 = -10 \\ \Rightarrow 12x = -10 - 14 \\ \Rightarrow 12x = -24 \\ \Rightarrow x = -2 \text{ Ans}$$

$$3. \Delta = \begin{vmatrix} 3 & -2 \\ 4 & 4 \end{vmatrix}$$

The Co-factors of the elements of Δ are-

Δ के अवयवों के सहखण्ड हैं -

$$A_{11} = +(4) = 4 \quad A_{21} = -(-2) = 2$$

$$A_{12} = -4 \quad A_{22} = +(3) = 3$$

$$4. \Delta = \begin{vmatrix} 1 & w & w^2 \\ w & w^2 & 1 \\ w^2 & 1 & w \end{vmatrix}$$

$$R_1 \rightarrow R_1 + R_2 + R_3$$

$$\Delta = \begin{vmatrix} 1+w+w^2 & 1+w+w^2 & 1+w+w^2 \\ w & w^2 & 1 \\ w^2 & 1 & w \end{vmatrix}$$

$$= \begin{vmatrix} 0 & 0 & 0 \\ w & w^2 & 1 \\ w^2 & 1 & w \end{vmatrix} = 0 \text{ Ans}$$

$$5. \begin{vmatrix} x-9 & 1 \\ 7 & 1 \end{vmatrix} = 0 \\ \Rightarrow (x-9) \times 1 - 7 \times 1 = 0 \\ \Rightarrow x - 9 - 7 = 0 \\ \Rightarrow x - 16 = 0 \\ \Rightarrow x = 16 \text{ Ans}$$

6. Given equations are :-

दिये गये समीकरण हैं -

$$2x - y = 2$$

$$3x + 4y = 3$$

Matrix form (आव्यूह रूप) $Ax = B$

$$\begin{bmatrix} 2 & -1 \\ 3 & 4 \end{bmatrix} \cdot \begin{bmatrix} x \\ y \end{bmatrix} = \begin{bmatrix} 2 \\ 3 \end{bmatrix} \text{ Ans}$$

$$7. \begin{vmatrix} 5 & 60 & 7 \\ 3 & 36 & 2 \\ 2 & 24 & 4 \end{vmatrix} \quad \text{or} \quad \begin{vmatrix} 5 & 60 & 7 \\ 3 & 36 & 2 \\ 2 & 24 & 4 \end{vmatrix} \\ C_1 \rightarrow 12C_1 \quad C_2 \rightarrow C_2 - 12C_1 \\ = \begin{vmatrix} 60 & 60 & 7 \\ 36 & 36 & 2 \\ 24 & 24 & 4 \end{vmatrix} \quad = \begin{vmatrix} 5 & 0 & 7 \\ 3 & 0 & 2 \\ 2 & 0 & 4 \end{vmatrix} \\ \because C_1 = C_2 \\ = 0$$

Short Questions (3 Marks)

लघुउत्तरीय प्रश्न

$$\text{Q.1. Prove that (सिद्ध करें) } \Delta = \begin{vmatrix} 1 & a & a^2 \\ 1 & b & b^2 \\ 1 & c & c^2 \end{vmatrix} \\ = (a-b)(b-c)(c-a)$$

$$\text{Q.2. Prove that (सिद्ध करें) } \begin{vmatrix} a-b & b-c & c-a \\ b-c & c-a & a-b \\ c-a & a-b & b-c \end{vmatrix} = 0$$

$$\text{Q.3. Prove that } \begin{vmatrix} 1 & 1 & 1 \\ a & b & c \\ bc & ca & ab \end{vmatrix} = (a-b)(b-c)(c-a)$$

Q.4. Solve for x when, (x के लिए हल करें जब)

$$\begin{vmatrix} 3+x & 5 & 2 \\ 1 & 7+x & 6 \\ 2 & 5 & 3+x \end{vmatrix} = 0$$

Q.5. Find the area of triangle whose vertices are

(1, 2), (2, 3), (3, 2)

शीर्षों (1, 2), (2, 3), (3, 2) वाले त्रिभुज का क्षेत्रफल ज्ञात करें।

Q.6. If $A = \begin{bmatrix} 1 & -2 & 4 \\ 0 & 2 & 1 \\ -4 & 5 & 3 \end{bmatrix}$, find adj A

Q.7. If $A = \begin{bmatrix} 2 & 3 \\ 4 & 8 \end{bmatrix}$, verify that $A \cdot (\text{adj } A) = (\text{adj } A) A$

$$= |A| \cdot I$$

Q.8. Find the inverse of the Matrix $A = \begin{bmatrix} 1 & -1 & 2 \\ 3 & 0 & -2 \\ 1 & 0 & 3 \end{bmatrix}$
आव्यूह A का व्युत्क्रम ज्ञात करें।

Q.9. Prove that the Matrix $A = \begin{bmatrix} -8 & 5 \\ 2 & 4 \end{bmatrix}$ satisfies the equation $x^2 + 4x - 42 = 0$ and hence find A^{-1} .

सिद्ध करें कि आव्यूह $A = \begin{bmatrix} -8 & 5 \\ 2 & 4 \end{bmatrix}$ समीकरण $x^2 +$

$4x - 42 = 0$ संतुष्ट करता है और A^{-1} ज्ञात करें।

Q.10. If $A = \begin{bmatrix} -1 & -2 & -2 \\ 2 & 1 & -2 \\ 2 & -2 & 1 \end{bmatrix}$, Show that $\text{adj } A = 3A'$

यदि $A = \begin{bmatrix} -1 & -2 & -2 \\ 2 & 1 & -2 \\ 2 & -2 & 1 \end{bmatrix}$, तो सिद्ध करें $\text{adj } A = 3A'$

Solutions of short questions (3 Marks)

1. $\Delta = \begin{vmatrix} 1 & a & a^2 \\ 1 & b & b^2 \\ 1 & c & c^2 \end{vmatrix}$, $R_1 \rightarrow R_1 - R_2, R_2 \rightarrow R_2 - R_3$

$$= \begin{vmatrix} 0 & a-b & a^2-b^2 \\ 0 & b-c & b^2-c^2 \\ 1 & c & c^2 \end{vmatrix}$$

$$R_1 \rightarrow \frac{R_1}{(a-b)}, R_2 \rightarrow \frac{R_2}{(b-c)}$$

$$= (a-b)(b-c) \begin{vmatrix} 0 & 1 & a+b \\ 0 & 1 & b+c \\ 1 & c & c^2 \end{vmatrix}$$

Expand along C_1

(C_1 के अनुदिश विस्तार)

$$= (a-b)(b-c) \left\{ +1 \begin{vmatrix} 1 & a+b \\ 1 & b+c \end{vmatrix} \right\}$$

$$= (a-b)(b-c) \{ b+c-a-a \}$$

$$= (a-b)(b-c)(c-a) \text{ Proved}$$

L.H.S. = $\begin{vmatrix} a-b & b-c & c-a \\ b-c & c-a & a-b \\ c-a & a-b & b-c \end{vmatrix}$

$$R_1 \rightarrow R_1 + R_2 + R_3$$

$$= \begin{vmatrix} 0 & 0 & 0 \\ b-c & c-a & a-b \\ c-a & a-b & b-c \end{vmatrix}$$

$$= 0$$

$$= \text{R.H.S. Proved}$$

3. L.H.S. = $\begin{vmatrix} 1 & 1 & 1 \\ a & b & c \\ bc & ca & ab \end{vmatrix}$

$$C_1 \rightarrow C_1 - C_2, C_2 \rightarrow C_2 - C_3$$

$$= \begin{vmatrix} 0 & 0 & 1 \\ a-b & b-c & c \\ bc-ca & ca-ab & ab \end{vmatrix}$$

$$C_1 \rightarrow \frac{C_1}{(a-b)}, C_2 \rightarrow \frac{C_2}{(b-c)}$$

$$= (a-b)(b-c) \begin{vmatrix} 0 & 0 & 1 \\ 1 & 1 & c \\ -c & -a & ab \end{vmatrix}$$

$$= (a-b)(b-c) \left\{ +1 \begin{vmatrix} 1 & 1 \\ -c & -a \end{vmatrix} \right\}$$

$$= (a-b)(b-c)(c-a)$$

$$= \text{R.H.S. Proved}$$

4. $\begin{vmatrix} 3+x & 5 & 2 \\ 1 & 7+x & 6 \\ 2 & 5 & 3+x \end{vmatrix} = 0$

$$R_1 \rightarrow R_1 - R_3$$

$$\Rightarrow \begin{vmatrix} 1+x & 0 & -1-x \\ 1 & 7+x & 6 \\ 2 & 5 & 3+x \end{vmatrix}$$

$$C_3 \rightarrow C_3 + C_1$$

$$\Rightarrow \begin{vmatrix} 1+x & 0 & 0 \\ 1 & 7+x & 7 \\ 2 & 5 & 5+x \end{vmatrix} = 0$$

$$\Rightarrow (1+x) \begin{vmatrix} 7+x & 7 \\ 5 & 5+x \end{vmatrix} = 0$$

$$\Rightarrow (1+x)\{(7+x)(5+x) - 35\} = 0$$

$$\Rightarrow (1+x)(35 + 12x + x^2 - 35) = 0$$

$$\Rightarrow (1+x)(x^2 + 12x) = 0$$

$$\Rightarrow x(x+1)(x+12) = 0$$

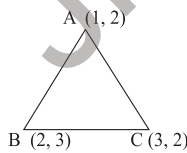
$$x = 0, -1, -12 \text{ Ans}$$

5. Given Vertices are (दिए गए शीर्ष हैं)

$$A = (1, 2) \quad x_1 = 1 \quad y_1 = 2$$

$$B = (2, 3) \quad x_2 = 2 \quad y_2 = 3$$

$$C = (3, 2) \quad x_3 = 3 \quad y_3 = 2$$



$$\text{ar}(\Delta ABC) = \frac{1}{2} \begin{vmatrix} 1 & 1 & 1 \\ x_1 & x_2 & x_3 \\ y_1 & y_2 & y_3 \end{vmatrix}$$

$$= \frac{1}{2} \begin{vmatrix} 1 & 1 & 1 \\ 1 & 2 & 3 \\ 2 & 3 & 2 \end{vmatrix}$$

$$= \frac{1}{2} |1(4-9) - 1(2-6) + 1(3-4)|$$

$$= \frac{1}{2} |-5 + 4 - 1|$$

$$= \frac{1}{2} |-2|$$

$$= \frac{1}{2} \times 2 = 1 \text{ units}^2 \text{ Ans}$$

$$6. \quad A = \begin{bmatrix} 1 & -2 & 4 \\ 0 & 2 & 1 \\ -4 & 5 & 3 \end{bmatrix}$$

Determinant (सारणिक) Of A

$$|A| = \begin{vmatrix} 1 & -2 & 4 \\ 0 & 2 & 1 \\ -4 & 5 & 3 \end{vmatrix}$$

The Co-factors of the elements of $|A|$ are

$|A|$ के अवयवों का सहखण्ड है :-

$$A_{11} = \begin{vmatrix} 2 & 1 \\ 5 & 3 \end{vmatrix} = 6 - 5 = 1, A_{12} = - \begin{vmatrix} 0 & 1 \\ -4 & 3 \end{vmatrix} = -(0 + 4) = -4$$

$$A_{13} = \begin{vmatrix} 0 & 2 \\ -4 & 5 \end{vmatrix} = 0 + 8 = 8$$

$$A_{21} = - \begin{vmatrix} -2 & 4 \\ 5 & 3 \end{vmatrix} = -(-6 - 20) = -(-26) = 26$$

$$A_{22} = + \begin{vmatrix} 1 & 4 \\ -4 & 3 \end{vmatrix} = (3 + 16) = 19$$

$$A_{23} = - \begin{vmatrix} 1 & -2 \\ -4 & 5 \end{vmatrix} = -(5 - 8) = 3$$

$$A_{31} = \begin{vmatrix} -2 & 4 \\ 2 & 1 \end{vmatrix} = (-2 - 8) = -10$$

$$A_{32} = - \begin{vmatrix} 1 & 4 \\ 0 & 1 \end{vmatrix} = -(1 - 0) = -1$$

$$A_{33} = \begin{vmatrix} 1 & -2 \\ 0 & 2 \end{vmatrix} = (2 - 0) = 2$$

$$\therefore \text{adj } A = \begin{bmatrix} A_{11} & A_{12} & A_{13} \\ A_{21} & A_{22} & A_{23} \\ A_{31} & A_{32} & A_{33} \end{bmatrix} = \begin{bmatrix} 1 & -4 & 8 \\ 26 & 19 & 3 \\ -10 & -1 & 2 \end{bmatrix}$$

$$= \begin{bmatrix} 1 & 26 & -10 \\ -4 & 19 & -1 \\ 8 & 3 & 2 \end{bmatrix} \text{ Ans}$$

$$7. \quad A = \begin{bmatrix} 2 & 3 \\ 4 & 8 \end{bmatrix}, |A| = \begin{vmatrix} 2 & 3 \\ 4 & 8 \end{vmatrix} = 16 - 12 = 4$$

$$\text{adj } A = \begin{bmatrix} 8 & -3 \\ -4 & 2 \end{bmatrix}$$

Now (अब)

$$A \cdot (\text{adj } A) = \begin{bmatrix} 2 & 3 \\ 4 & 8 \end{bmatrix} \cdot \begin{bmatrix} 8 & -3 \\ -4 & 2 \end{bmatrix}$$

$$\begin{aligned}
&= \begin{bmatrix} 16-12 & -6+6 \\ 32-32 & -12+16 \end{bmatrix} \\
&= \begin{bmatrix} 4 & 0 \\ 0 & 4 \end{bmatrix} \\
&= 4 \begin{bmatrix} 1 & 0 \\ 0 & 1 \end{bmatrix} \\
&= 4.I \\
&= |A|.I \\
(\text{adj } A).A &= \begin{bmatrix} 8 & -3 \\ -4 & 2 \end{bmatrix} \cdot \begin{bmatrix} 2 & 3 \\ 4 & 8 \end{bmatrix} \\
&= \begin{bmatrix} 16-12 & 24-24 \\ -8+8 & -12+16 \end{bmatrix} \\
&= \begin{bmatrix} 4 & 0 \\ 0 & 4 \end{bmatrix} \\
&= 4 \begin{bmatrix} 1 & 0 \\ 0 & 1 \end{bmatrix} \\
&= 4.I \\
&= |A|.I
\end{aligned}$$

Clearly $A.(\text{adj } A) = (\text{adj } A).A = |A|.I$ Proved

$$8. \quad A = \begin{bmatrix} 1 & -1 & 2 \\ 3 & 0 & -2 \\ 1 & 0 & 3 \end{bmatrix}$$

$$|A| = \begin{vmatrix} 1 & -1 & 2 \\ 3 & 0 & -2 \\ 1 & 0 & 3 \end{vmatrix} = -(-1) \begin{vmatrix} 3 & -2 \\ 1 & 3 \end{vmatrix} = 9 + 2 = 11$$

The Co-factors of the elements of $|A|$ are

$$A_{11} = 0, \quad A_{12} = -11, \quad A_{13} = 0$$

$$A_{21} = 3, \quad A_{22} = 1, \quad A_{23} = -1$$

$$A_{31} = 2, \quad A_{32} = 8, \quad A_{33} = 3$$

$$\text{adj } A = \begin{bmatrix} 0 & 3 & 2 \\ -11 & 1 & 8 \\ 0 & -1 & 3 \end{bmatrix}$$

Now, Inverse of A

$$A^{-1} = \frac{1}{|A|} \cdot \text{adj } A$$

$$= \frac{1}{11} \begin{bmatrix} 0 & 3 & 2 \\ -11 & 1 & 8 \\ 0 & -1 & 3 \end{bmatrix} \text{Ans.}$$

$$9. \quad A = \begin{bmatrix} -8 & 5 \\ 2 & 4 \end{bmatrix}$$

Given equation (दिया गया समीकरण)

$$x^2 + 4x - 4 = 0$$

Put $x = A$

$$A.A + 4A - 42.I = 0$$

$$\begin{bmatrix} -8 & 5 \\ 2 & 4 \end{bmatrix} \cdot \begin{bmatrix} -8 & 5 \\ 2 & 4 \end{bmatrix} + 4 \cdot \begin{bmatrix} -8 & 5 \\ 2 & 4 \end{bmatrix} - 42 \begin{bmatrix} 1 & 0 \\ 0 & 1 \end{bmatrix} = 0$$

$$\Rightarrow \begin{bmatrix} 74 & -20 \\ -8 & 26 \end{bmatrix} + \begin{bmatrix} -32 & 20 \\ 8 & 16 \end{bmatrix} + \begin{bmatrix} -42 & 0 \\ 0 & -42 \end{bmatrix} = 0$$

$$\Rightarrow \begin{bmatrix} 74 & -20 \\ -8 & 26 \end{bmatrix} + \begin{bmatrix} -74 & 20 \\ 8 & -26 \end{bmatrix} = 0$$

$$\Rightarrow \begin{bmatrix} 0 & 0 \\ 0 & 0 \end{bmatrix} = 0$$

$\Rightarrow 0 = 0$ (True) (सत्य) Proved

Now From equation (1)

$$A^2 + 4A - 42.I = 0$$

$$A^{-1} \cdot (A^2 + 4A - 42.I) = A^{-1} \cdot 0$$

$$\Rightarrow A + 4.I - 42A^{-1} = 0$$

$$\Rightarrow 42A^{-1} = A + 4.I$$

$$\Rightarrow 42A^{-1} = \begin{bmatrix} -8 & 5 \\ 2 & 4 \end{bmatrix} + \begin{bmatrix} 4 & 0 \\ 0 & 4 \end{bmatrix}$$

$$\Rightarrow 42A^{-1} = \begin{bmatrix} -4 & 5 \\ 2 & 8 \end{bmatrix} \therefore A^{-1} = \frac{1}{42} \begin{bmatrix} -4 & 5 \\ 2 & 8 \end{bmatrix} \text{Ans}$$

$$10. \quad A = \begin{bmatrix} -1 & -2 & -2 \\ 2 & 1 & -2 \\ 2 & -2 & 1 \end{bmatrix}$$

The Co-factors of the elements of $|A|$ are

$$A_{11} = -3, \quad A_{12} = -6, \quad A_{13} = -6$$

$$A_{21} = 6, \quad A_{22} = 3, \quad A_{23} = -6$$

$$A_{31} = 6, \quad A_{32} = -6, \quad A_{33} = 3$$

$$\text{adj } A = \begin{bmatrix} -3 & 6 & 6 \\ -6 & 3 & -6 \\ -6 & -6 & 3 \end{bmatrix}$$

$$\text{and } A' = \begin{bmatrix} -1 & 2 & 2 \\ -2 & 1 & -2 \\ -2 & -2 & 1 \end{bmatrix}$$

$$3A' = \begin{bmatrix} -3 & 6 & 6 \\ -6 & 3 & -6 \\ -6 & -6 & 3 \end{bmatrix}$$

Clearly $\text{adj } A = 3A'$ Proved

Long Questions (5 Marks)

दीर्घउत्तरीय प्रश्न

1. If $A = \begin{bmatrix} 1 & 2 & -3 \\ 2 & 3 & 2 \\ 3 & -3 & -4 \end{bmatrix}$, Find A^{-1} and hence solve the

system of linear equations.

$$x + 2y - 3z = -4, 2x + 3y + 2z = 2, 3x - 3y - 4z = 11$$

यदि $A = \begin{bmatrix} 1 & 2 & -3 \\ 2 & 3 & 2 \\ 3 & -3 & -4 \end{bmatrix}$ तो A^{-1} ज्ञात करें और

निम्नलिखित रेखिक समीकरण निकाय का हल करें।

$$x + 2y - 3z = -4, 2x + 3y + 2z = 2, 3x - 3y - 4z = 11$$

2. By using elementary row transformation, find the

inverse of the matrix $A = \begin{bmatrix} 2 & 0 & -1 \\ 5 & 1 & 0 \\ 0 & 1 & 3 \end{bmatrix}$

प्रारंभिक पंक्ति संक्रिया से वर्ग आव्यूह $A = \begin{bmatrix} 2 & 0 & -1 \\ 5 & 1 & 0 \\ 0 & 1 & 3 \end{bmatrix}$

का व्युत्क्रम ज्ञात करें।

3. Prove that $A = \begin{bmatrix} 3 & 3 & -1 \\ -2 & -2 & 1 \\ -4 & -5 & 2 \end{bmatrix}$ is neither a

symmetric matrix nor a skew-symmetric matrix.

Also express A as the sum of a symmetric Matrix and a skew-symmetric Matrix.

सिद्ध करें कि $A = \begin{bmatrix} 3 & 3 & -1 \\ -2 & -2 & 1 \\ -4 & -5 & 2 \end{bmatrix}$ न तो सममित है

और न ही विषम सममित है। फिर A को एक सममित

आव्यूह और विषम सममित आव्यूह के योगफल के रूप में व्यक्त करें।

4. The sum of three numbers is 6. Twice the third number when added to the first number gives 7. On adding the sum of the second and third numbers to the thrice the first number we get 12. Find the numbers, using Matrix Method.

तीन संख्याओं का योग 6 है। जब पहले संख्या में तीसरे संख्या का दो गुना जोड़ने पर 7 प्राप्त होता है। दूसरे तथा तीसरे संख्याओं में पहले संख्या का तीन गुणा जोड़ने पर 12 प्राप्त होता है। तीनों संख्याओं को

आव्यूह विधि के द्वारा ज्ञात करें।

5. Prove that (सिद्ध करें)

$$\begin{vmatrix} a^2 & bc & c^2+ac \\ a^2+ab & b^2 & ac \\ ab & b^2+bc & c^2 \end{vmatrix} = 4a^2b^2c^2$$

Solutions of long questions

1. Given system of equations are -

$$x + 2y - 3z = -4 \quad \text{-----(i)}$$

$$2x + 3y + 2z = 2 \quad \text{-----(ii)}$$

$$3x - 3y - 4z = 11 \quad \text{-----(iii)}$$

the given system of equations in matrix form is $AX = B$

$$A = \begin{bmatrix} 1 & 2 & -3 \\ 2 & 3 & 2 \\ 3 & -3 & -4 \end{bmatrix}, x = \begin{bmatrix} x \\ y \\ z \end{bmatrix} \text{ and } B = \begin{bmatrix} -4 \\ 2 \\ 11 \end{bmatrix}$$

$$|A| = \begin{vmatrix} 1 & 2 & -3 \\ 2 & 3 & 2 \\ 3 & -3 & -4 \end{vmatrix},$$

$$= 1(-12 + 6) - 2(-8 - 6) - 3(-6 - 9)$$

$$= -6 + 28 + 45$$

$$= -6 + 73$$

$$= 67 \neq 0$$

∴ A is invertible (A व्युत्क्रमणीय है)

So, the system has a unique solution

$$x = A^{-1}B \text{.....(1)}$$

Now, the Co-factors of the elements of |A| are

|A| के अवयवों का सहखण्ड है :-

$$A_{11} = -6, \quad A_{12} = 14, \quad A_{13} = -15$$

$$A_{21} = 17, \quad A_{22} = 5, \quad A_{23} = 9$$

$$A_{31} = 13, \quad A_{32} = -8, \quad A_{33} = -1$$

$$\therefore \text{adj } A = \begin{bmatrix} -6 & 17 & 13 \\ 14 & 5 & -8 \\ -15 & 9 & -1 \end{bmatrix}$$

$$\text{and } A^{-1} = \frac{1}{|A|} \text{adj } A$$

$$A^{-1} = \frac{1}{67} \begin{bmatrix} -6 & 17 & 13 \\ 14 & 5 & -8 \\ -15 & 9 & -1 \end{bmatrix}$$

Now from equation (1) (अब समीकरण (1) से)

$$X = A^{-1}B$$

$$\Rightarrow \begin{bmatrix} x \\ y \\ z \end{bmatrix} = \frac{1}{67} \cdot \begin{bmatrix} -6 & 17 & 13 \\ 14 & 5 & -8 \\ -15 & 9 & -1 \end{bmatrix} \cdot \begin{bmatrix} -4 \\ 2 \\ 11 \end{bmatrix}$$

$$\Rightarrow \begin{bmatrix} x \\ y \\ z \end{bmatrix} = \frac{1}{67} \cdot \begin{bmatrix} 201 \\ -134 \\ 67 \end{bmatrix}$$

$$\Rightarrow \begin{bmatrix} x \\ y \\ z \end{bmatrix} = \begin{bmatrix} 3 \\ -2 \\ 1 \end{bmatrix}$$

So, $x = 3, y = -2, z = 1$ Ans

2. Given, $A = \begin{bmatrix} 2 & 0 & -1 \\ 5 & 1 & 0 \\ 0 & 1 & 3 \end{bmatrix}$

we know $A = I \cdot A$

$$\begin{bmatrix} 2 & 0 & -1 \\ 5 & 1 & 0 \\ 0 & 1 & 3 \end{bmatrix} = \begin{bmatrix} 1 & 0 & 0 \\ 0 & 1 & 0 \\ 0 & 0 & 1 \end{bmatrix} \cdot A$$

$$R_2 \rightarrow R_2 - 2R_1$$

$$\begin{bmatrix} 2 & 0 & -1 \\ 1 & 1 & 2 \\ 0 & 1 & 3 \end{bmatrix} = \begin{bmatrix} 1 & 0 & 0 \\ -2 & 1 & 0 \\ 0 & 0 & 1 \end{bmatrix} \cdot A$$

$$R_1 \leftrightarrow R_2$$

$$\begin{bmatrix} 1 & 1 & 2 \\ 2 & 0 & -1 \\ 0 & 1 & 3 \end{bmatrix} = \begin{bmatrix} -2 & 1 & 0 \\ 1 & 0 & 0 \\ 0 & 0 & 1 \end{bmatrix} \cdot A$$

$$R_2 \rightarrow R_2 - 2R_1$$

$$\begin{bmatrix} 1 & 1 & 2 \\ 0 & -2 & -5 \\ 0 & 1 & 3 \end{bmatrix} = \begin{bmatrix} -2 & 1 & 0 \\ 5 & -2 & 0 \\ 0 & 0 & 1 \end{bmatrix} \cdot A$$

$$R_2 \leftrightarrow R_3$$

$$\begin{bmatrix} 1 & 1 & 2 \\ 0 & 1 & 3 \\ 0 & -2 & -5 \end{bmatrix} = \begin{bmatrix} -2 & 1 & 0 \\ 0 & 0 & 1 \\ 5 & -2 & 0 \end{bmatrix} \cdot A$$

$$R_1 \rightarrow R_1 - R_2, R_3 \rightarrow R_3 + 2R_2$$

$$\begin{bmatrix} 1 & 0 & -1 \\ 0 & 1 & 3 \\ 0 & 0 & 1 \end{bmatrix} = \begin{bmatrix} -2 & 1 & -1 \\ 0 & 0 & 1 \\ 5 & -2 & 2 \end{bmatrix} \cdot A$$

$$R_1 \rightarrow R_1 + R_3, R_2 \rightarrow R_2 - 3R_3$$

$$\begin{bmatrix} 1 & 0 & 0 \\ 0 & 1 & 0 \\ 0 & 0 & 1 \end{bmatrix} = \begin{bmatrix} 3 & -1 & 1 \\ -15 & 6 & -5 \\ 5 & -2 & 2 \end{bmatrix} \cdot A$$

$$\text{Hence, } A^{-1} = \begin{bmatrix} 3 & -1 & 1 \\ -15 & 6 & -5 \\ 5 & -2 & 2 \end{bmatrix} \text{ Ans}$$

3.

$$\text{Given, } A = \begin{bmatrix} 3 & 3 & -1 \\ -2 & -2 & 1 \\ -4 & -5 & 2 \end{bmatrix}$$

$$\text{Now (अब) } A' = \begin{bmatrix} 3 & -2 & -4 \\ 3 & -2 & -5 \\ -1 & 1 & 2 \end{bmatrix}$$

Here (यहाँ) $A \neq A' \Rightarrow$ Not symmetric Matrix
सममित आव्यूह नहीं है।

$A \neq -A' \Rightarrow$ Not Skew-symmetric Matrix
विषम सममित आव्यूह नहीं है।

$$\text{Symmetric Matrix} = \frac{1}{2} (A + A')$$

(सममित आव्यूह)

$$= \frac{1}{2} \begin{bmatrix} 6 & 1 & -5 \\ 1 & -4 & -4 \\ -5 & -4 & 4 \end{bmatrix}$$

$$\text{Skew-symmetric Matrix} = \frac{1}{2} (A - A')$$

(विषम सममित आव्यूह)

$$= \frac{1}{2} \begin{bmatrix} 0 & 5 & 3 \\ -5 & 0 & 6 \\ -3 & -6 & 0 \end{bmatrix}$$

square Matrix, $A =$ symmetric Matrix + Skew

symmetric Matrix

$$A = \frac{1}{2} \begin{bmatrix} 6 & 1 & -5 \\ 1 & -4 & -4 \\ -5 & -4 & 4 \end{bmatrix} + \frac{1}{2} \begin{bmatrix} 0 & 5 & 3 \\ -5 & 0 & 6 \\ -3 & -6 & 0 \end{bmatrix}$$

Ans

4. Let First number = x
पहली संख्या = x

Second Number = y

दूसरी संख्या = y

Third Number = z

तीसरी संख्या = z

By question (प्रश्न से)

$$x + y + z = 6 \text{ -----(1)}$$

$$x + 2z = 7 \text{ -----(2)}$$

$$3x + y + z = 12 \text{ -----(3)}$$

The Given system in Matrix form is $AX = B$

$$A = \begin{bmatrix} 1 & 1 & 1 \\ 1 & 0 & 2 \\ 3 & 1 & 1 \end{bmatrix}, x = \begin{bmatrix} x \\ y \\ z \end{bmatrix}, B = \begin{bmatrix} 6 \\ 7 \\ 12 \end{bmatrix}$$

$$\text{Now, } |A| = \begin{vmatrix} 1 & 1 & 1 \\ 1 & 0 & 2 \\ 3 & 1 & 1 \end{vmatrix}$$

$$|A| = 1(0 - 2) - 1(1 - 6) + 1(1 - 0)$$

$$= -2 + 5 + 1$$

$|A| = 4 \neq 0 \therefore A$ is invertible (A व्युत्क्रमणीय है।)

$$\text{Now } X = A^{-1}B \text{ -----(4)}$$

The Co-factors of the elements of $|A|$ are-

$$A_{11} = -2, \quad A_{12} = 5, \quad A_{13} = 1$$

$$A_{21} = 0, \quad A_{22} = -2, \quad A_{23} = 2$$

$$A_{31} = 2, \quad A_{32} = -1, \quad A_{33} = -1$$

$$\therefore \text{adj } A = \begin{bmatrix} -2 & 0 & 2 \\ 5 & -2 & -1 \\ 1 & 2 & -1 \end{bmatrix}$$

$$\text{Now } A^{-1} = \frac{1}{|A|} \text{adj } A$$

$$= \frac{1}{4} \cdot \begin{bmatrix} -2 & 0 & 2 \\ 5 & -2 & -1 \\ 1 & 2 & -1 \end{bmatrix}$$

\therefore By (4), $X = A^{-1}B$

$$\begin{aligned} \begin{bmatrix} x \\ y \\ z \end{bmatrix} &= \frac{1}{4} \cdot \begin{bmatrix} -2 & 0 & 2 \\ 5 & -2 & -1 \\ 1 & 2 & -1 \end{bmatrix} \begin{bmatrix} 6 \\ 7 \\ 12 \end{bmatrix} \\ &= \frac{1}{4} \cdot \begin{bmatrix} -12+0+24 \\ 30-14-12 \\ 6+14-12 \end{bmatrix} \\ &= \frac{1}{4} \cdot \begin{bmatrix} 12 \\ 4 \\ 8 \end{bmatrix} \end{aligned}$$

$$= \begin{bmatrix} 3 \\ 1 \\ 2 \end{bmatrix}$$

$$\therefore x = 3, y = 1, z = 2$$

\therefore Required numbers = 3, 1, 2 Ans

(अभिष्ट संख्याएँ)

$$5. \text{ L.H.S.} = \begin{vmatrix} a^2 & bc & c^2+ac \\ a^2+ab & b^2 & ac \\ ab & b^2+bc & c^2 \end{vmatrix}$$

$$C_1 \rightarrow \frac{C_1}{a}, C_2 \rightarrow \frac{C_2}{b}, C_3 \rightarrow \frac{C_3}{c},$$

$$= abc \begin{vmatrix} a & c & c+a \\ a+b & b & a \\ b & b+c & c \end{vmatrix}$$

$$R_2 \rightarrow R_2 - (R_1 + R_3)$$

$$= abc \begin{vmatrix} a & c & c+a \\ 0 & -2c & -2c \\ b & b+c & c \end{vmatrix}$$

$$C_2 \rightarrow C_2 - C_3$$

$$= abc \begin{vmatrix} a & -a & c+a \\ 0 & 0 & -2c \\ b & b & c \end{vmatrix}$$

Expand along R_2

(R_2 के अनुदिश विस्तार करने पर)

$$= abc \cdot 2c \begin{vmatrix} a & -a \\ b & b \end{vmatrix}$$

$$= 2abc^2 \cdot (ab + ab)$$

$$= 2abc^2 \times 2ab$$

$$= 4 a^2 b^2 c^2$$

= R.H.S. Proved

बहुविकल्पीय प्रश्न (MCQ)

1 Marks Question:-

1. If $f(x) = x^2 + 2x$ then $f(2)=?$ यदि $f(x) = x^2 + 2x$ तो $f(2)=?$

- (a) 4 (b) 8
(c) 2 (d) 6

2. A function $f(x) = x^2$ is continuous at

- (a) 2 (b) 3
(c) 0 (d) All of the above

फलन $f(x) = x^2$ संतत होता है

- (a) 2 पर (b) 3 पर
(c) 0 पर (d) उपरोक्त सभी

3. The function $f(x) = \begin{cases} 2x - 1, & x < 0 \\ 2x + 1, & x \geq 0 \end{cases}$ is discontinuous at

- (a) 1 (b) 2
(c) 0 (d) None of these

फलन $f(x) = \begin{cases} 2x - 1, & x < 0 \\ 2x + 1, & x \geq 0 \end{cases}$ संतत नहीं है

- (a) 1 पर (b) 2 पर
(c) 0 पर (d) इनमें से कोई नहीं

4. Function $f(x)$ is continuous at $x=a$ ifफलन $f(x)$, $x=a$ पर संतत है यदि

- (a) $\lim_{x \rightarrow a^+} f(x) = \lim_{x \rightarrow a^-} f(x) = f(a)$
(b) $\lim_{x \rightarrow a^+} f(x) \neq \lim_{x \rightarrow a^-} f(x) = f(a)$
(c) $\lim_{x \rightarrow a^+} f(x) = \lim_{x \rightarrow a^-} f(x) \neq f(a)$

(d) None of these इनमें से कोई नहीं

5. प्रत्येक नियत फलन होता है।

Every Constant function is

- (a) Discontinuous (असंतत)
(b) Continuous (संतत)
(c) Discontinuous and Continuous (असंतत और संतत)
(d) None of these (इनमें से कोई नहीं)

6. Which of the following function is continuous

निम्नलिखित फलन में से कौन सा संतत है—

- (a) Identity function (तत्समक फलन)
(b) Polynomial function (बहुपद फलन)
(c) Rational function (परिमेय फलन)
(d) All of the above (उपरोक्त सभी)

7. If f and g be continuous function thenयदि f और g संतत फलन हैं, तो

- (a) $f+g$ is also continuous ($f+g$ भी संतत हैं)
(b) $f.g$ is also continuous ($f.g$ भी संतत हैं)
(c) Both (a) and (b)/ दोनों (a) तथा (b)
(d) None of these./ इनमें से कोई नहीं।

8. The value of k for which

$$f(x) = \begin{cases} \frac{\sin 5x}{3x}, & \text{if } x \neq 0 \\ k, & \text{if } x = 0 \end{cases}$$

is continuous at $x = 0$ यदि $x = 0$ पर $f(x) = \begin{cases} \frac{\sin 5x}{3x}, & \text{यदि } x \neq 0 \\ k, & \text{यदि } x = 0 \end{cases}$ संतत है तो k का मान होगा—

- (a) $\frac{1}{3}$ (b) 0
(c) $\frac{3}{5}$ (d) $\frac{5}{3}$

9. Let $f(x) = x^{3/2}$. Then $f'(0) = ?$ माना $f(x) = x^{3/2}$. $f'(0) = ?$

- (a) $\frac{3}{2}$ (b) $\frac{1}{2}$
(c) does not exist (d) None of these
(प्राप्त नहीं है) (इनमें से कोई नहीं)

10. The function $f(x) = |x|$, $\forall x \in \mathbf{R}$ isफलन $f(x) = |x|$, $\forall x \in \mathbf{R}$ है—

- (a) Continuous but not differentiable at $x=0$
 $x=0$ पर संतत परन्तु अवकलनीय नहीं
(b) differentiable but not continuous at $x=0$
 $x=0$ पर अवकलनीय परन्तु संतत नहीं
(c) Neither continuous nor differentiable at $x=0$
 $x=0$ पर, ना संतत ना अवकलनीय
(d) None of these . (इनमें से कोई नहीं)

11. If the function $f(x) = \begin{cases} \frac{k \cos x}{\pi - 2x}, & x \neq \pi/2 \\ 3, & x = \pi/2 \end{cases}$ be continuous at $x = \pi/2$ then the value of k is
यदि $x = \pi/2$ पर $f(x) = \begin{cases} \frac{k \cos x}{\pi - 2x}, & x \neq \pi/2 \\ 3, & x = \pi/2 \end{cases}$ संतत है तो k का मान है।
(a) -3 (b) -5
(c) 6 (d) 3
12. If $y = \sin(x^2+5)$ then $\frac{dy}{dx} = ?$
यदि $y = \sin(x^2+5)$ तो $\frac{dy}{dx} = ?$
(a) $2x \cdot \sin(x^2+5)$ (b) $2x \cdot \cos(x^2+5)$
(c) $x \cdot \cos(x^2+5)$ (d) None
13. If $y = \cos(\sin x)$ then $\frac{dy}{dx} = ?$
(a) $-\cos x \cdot \sin(\sin x)$ (b) $\cos x \cdot \sin(\sin x)$
(c) $-\sin(\sin x)$ (d) $-\cos(\sin x)$
14. If $y = x^2$ then $\frac{dy}{dx} = ?$
(a) x (b) $2x$
(c) -2 (d) $-x$
15. If $y = x^{-3}$ then $\frac{dy}{dx} = ?$
(a) $-3x^{-4}$ (b) $3x^4$
(c) $3x^2$ (d) None
16. If $y = \cos(\sqrt{x})$ then $\frac{dy}{dx} = ?$
(a) $\frac{\sin \sqrt{x}}{2\sqrt{x}}$ (b) $\frac{-\sin \sqrt{x}}{\sqrt{x}}$
(c) $\frac{-\sin \sqrt{x}}{2\sqrt{x}}$ (d) $\frac{\cos \sqrt{x}}{2\sqrt{x}}$
17. If $2x + 3y = \sin x$ then $\frac{dy}{dx} = ?$
(a) $\cos x$ (b) $-\cos x$
(c) $\frac{\cos x + 2}{3}$ (d) $\frac{\cos x - 2}{3}$
18. If $y = e^{x^3}$ then $\frac{dy}{dx} = ?$
(a) $3x^2 \cdot e^{x^3}$ (b) $x^2 \cdot e^{x^3}$
(c) $3x^2 \cdot e^{x^2}$ (d) None
19. If $y = \sin x^3$ then $\frac{dy}{dx} = ?$
(a) $\sin x^3$ (b) $-\cos x^3$
(c) $3x^2 \cdot \cos x^3$ (d) 0
20. If $y = \log \sin x$ then $\frac{dy}{dx} = ?$
(a) $\cot x$ (b) $\sin x$
(c) $\tan x$ (d) $-\cot x$
21. If $y = 3^x$ then $\frac{dy}{dx} = ?$
(a) 3^x (b) $\log 3$
(c) $3^x \cdot \log 3$ (d) None
22. If $y = \sin^{-1}(x^2)$ then $\frac{dy}{dx} = ?$
(a) $\frac{2x}{\sqrt{x^2-1}}$ (b) $\frac{2x}{\sqrt{x^2+1}}$
(c) $\frac{x}{\sqrt{x^2-1}}$ (d) $\frac{1}{\sqrt{x^2-1}}$
23. If $y = \tan^{-1}(x^3)$ then $\frac{dy}{dx} = ?$
(a) $\frac{3x^2}{x^2-1}$ (b) $\frac{x^2}{x^2+1}$
(c) $\frac{x^2}{x-1}$ (d) $\frac{3x^2}{x^6+1}$
24. If $y = \cos^{-1} x^3$ then $\frac{dy}{dx} = ?$
(a) $\frac{-1}{1+x}$ (b) $\frac{2}{\sqrt{1+x}}$
(c) $\frac{-1}{2\sqrt{x}(1+x)}$ (d) None
25. If $y = \tan^{-1}\left(\frac{\cos x}{1+\sin x}\right)$ then $\frac{dy}{dx} = ?$
(a) $\frac{1}{2}$ (b) $-\frac{1}{2}$
(c) 1 (d) -1
26. If $x = at^2, y = 2at$ then $\frac{dy}{dx} = ?$
(a) $\frac{1}{t}$ (b) $-\frac{1}{t^2}$
(c) $-\frac{2}{t}$ (d) None
27. If $x = a \sec \theta, y = b \tan \theta$ then $\frac{dy}{dx} = ?$
(a) $\frac{b}{a} \sec \theta$ (b) $\frac{b}{a} \operatorname{cosec} \theta$
(c) $\frac{b}{a} \cot \theta$ (d) None
28. If $x = t, y = 2t$ then $\frac{dy}{dx} = ?$
(a) 1 (b) 2
(c) $\frac{1}{2}$ (d) None
29. If $y = \tan^{-1}\left(\frac{1-\cos x}{\sin x}\right)$ then $\frac{dy}{dx} = ?$
(a) 1 (b) -1
(c) $\frac{1}{2}$ (d) $-\frac{1}{2}$
30. If $y = \sqrt{x^5}$ then find $\frac{dy}{dx} = ?$
(a) $5x^4$ (b) $\frac{5x^4}{\sqrt{x^5}}$
(c) $\frac{5x^4}{2\sqrt{x^5}}$ (d) None

MCQ Answers
बहुविकल्पीय प्रश्न उत्तर

- | | | |
|-------|-------|-------|
| 1. b | 11. c | 21. c |
| 2. d | 12. b | 22. a |
| 3. c | 13. a | 23. d |
| 4. a | 14. b | 24. d |
| 5. b | 15. a | 25. c |
| 6. d | 16. c | 26. a |
| 7. c | 17. d | 27. b |
| 8. d | 18. a | 28. b |
| 9. c | 19. c | 29. c |
| 10. a | 20. a | 30. c |

अति लघु उत्तरीय प्रश्न (Very Short Questions)
(2 Marks)

- Prove that the function $f(x) = 5x - 3$ is continuous at $x = 0$.
सिद्ध करें कि $x = 0$ पर फलन $f(x) = 5x - 3$ संतत है।
- Show that the function $f(x) = x^2$ is differentiable at $x = 1$ and find $f'(1)$.
सिद्ध करें $x = 1$ पर फलन $f(x) = x^2$ अवकलनीय है और $f'(1)$ ज्ञात करें।
- If $y = \sin 4x$ then find $\frac{dy}{dx}$.
यदि $y = \sin 4x$ तो $\frac{dy}{dx}$ ज्ञात करें।
- If $y = \cot \sqrt{x}$ then find $\frac{dy}{dx}$.
- If $y = \sqrt{\sin x}$ then find $\frac{dy}{dx}$.
- If $y = \sin 5x \cdot \cos 3x$ then find $\frac{dy}{dx}$.
- If $y = \sqrt{x}$ then find $\frac{dy}{dx}$.
- If $y = (2x + 3)^5$ then find $\frac{dy}{dx}$.
- If $y = e^{x^2}$ then find $\frac{dy}{dx}$.
- If $y = \log(2x + 1)$ then find $\frac{dy}{dx}$.
- If $y = e^{3x}$ then find $\frac{dy}{dx}$.
- If $y = \cos \frac{x}{2}$ then find $\frac{dy}{dx}$.
- If $y = x \cdot \sin x$ then find $\frac{dy}{dx}$.
- If $y = \tan^{-1} x^2$ then find $\frac{dy}{dx}$.
- If $y = \cos^{-1} 2x$ then find $\frac{dy}{dx}$.

- If $y = \log(2x + 3)$ then find $\frac{dy}{dx}$.
- If $y = \operatorname{cosec}(\sqrt{x})$ then find $\frac{dy}{dx}$.
- If $y = e^{\sin x}$ then find $\frac{dy}{dx}$.
- If $y = \sec^{-1}(x^2)$ then find $\frac{dy}{dx}$.
- If $y = (3x^2 + 2x + 1)^2$ then find $\frac{dy}{dx}$.

Solutions of very short questions
अति लघु उत्तरीय प्रश्न का हल

- Given function $f(x) = 5x - 3$
at $x = 0$
 $f(0) = 5(0) - 3 = -3$

$$\begin{aligned} \lim_{x \rightarrow 0^+} f(x) &= \lim_{h \rightarrow 0} f(0+h) \\ &= \lim_{h \rightarrow 0} 5(0+h) - 3 \\ &= \lim_{h \rightarrow 0} 5h - 3 \\ &= 5(0) - 3 = -3 \end{aligned}$$

$$\begin{aligned} \lim_{x \rightarrow 0^-} f(x) &= \lim_{h \rightarrow 0} f(0-h) \\ &= \lim_{h \rightarrow 0} 5(0-h) - 3 \\ &= \lim_{h \rightarrow 0} -5h - 3 \\ &= -5(0) - 3 \\ &= -3 \end{aligned}$$

Clearly $\lim_{x \rightarrow 0^+} f(x) = \lim_{x \rightarrow 0^-} f(x) = f(0)$

$\therefore f(x)$ is continuous at $x = 0$
 $x = 0$ पर $f(x)$ संतत है

- Given function $f(x) = x^2$
at $x = 1$

$$\begin{aligned} R f'(1) &= \lim_{h \rightarrow 0} \frac{f(1+h) - f(1)}{h} \\ &= \lim_{h \rightarrow 0} \frac{(1+h)^2 - (1)^2}{h} \\ &= \lim_{h \rightarrow 0} \frac{1 + 2h + h^2 - 1}{h} \\ &= \lim_{h \rightarrow 0} \frac{2h + h^2}{h} \\ &= \lim_{h \rightarrow 0} (2 + h) \\ &= 2 + 0 = 2 \end{aligned}$$

$$\begin{aligned} \text{and } L f'(1) &= \lim_{h \rightarrow 0} \frac{f(1-h) - f(1)}{-h} \\ &= \lim_{h \rightarrow 0} \frac{(1-h)^2 - (1)^2}{-h} \\ &= \lim_{h \rightarrow 0} \frac{1 - 2h + h^2 - 1}{-h} \\ &= \lim_{h \rightarrow 0} \frac{h^2 - 2h}{-h} \\ &= \lim_{h \rightarrow 0} \frac{h(h-2)}{-h} \\ &= 2 \end{aligned}$$

$\therefore R f'(1) = L f'(1) = 2$

$\therefore f(x)$ is differentiable at $x = 1$ and $f'(1) = 2$

3. Given $y = \sin 4x$
d.w.r. to x
 $\frac{dy}{dx} = \frac{d \sin 4x}{dx}$
 $= \cos 4x \times 4 \times (1)$
 $= 4 \cos 4x$

4. Given $y = \cot \sqrt{x}$
d.w.r. to x
 $\frac{dy}{dx} = \frac{d \cot \sqrt{x}}{dx}$
 $= \frac{d \cot \sqrt{x}}{d \sqrt{x}} \times \frac{d \sqrt{x}}{dx}$
 $= -\operatorname{cosec}^2 \sqrt{x} \times \frac{1}{2\sqrt{x}}$
 $= -\frac{\operatorname{cosec}^2 \sqrt{x}}{2\sqrt{x}}$

5. Given $y = \sqrt{\sin x}$
d.w.r. to x
 $\frac{dy}{dx} = \frac{d \sqrt{\sin x}}{dx}$
 $= \frac{d \sqrt{\sin x}}{d \sin x} \times \frac{d \sin x}{dx}$
 $= \frac{1}{2\sqrt{\sin x}} \times \cos x$
 $= \frac{\cos x}{2\sqrt{\sin x}}$

6. Given $y = \sin 5x \cdot \cos 3x$
 $y = \frac{1}{2} \cdot 2 \sin 5x \cdot \cos 3x$
 $y = \frac{1}{2} [\sin(5x + 3x) + \sin(5x - 3x)]$
 $y = \frac{1}{2} [\sin 8x + \sin 2x]$
d.w.r. to x
 $\frac{dy}{dx} = \frac{1}{2} \left[\frac{d \sin 8x}{dx} + \frac{d \sin 2x}{dx} \right]$
 $\frac{dy}{dx} = \frac{1}{2} [\cos 8x \times 8 + \cos 2x \times 2]$
 $\frac{dy}{dx} = 4 \cos 8x + \cos 2x$

7. Given $y = \sqrt{x}$
d.w.r. to x
 $\frac{dy}{dx} = \frac{d \sqrt{x}}{dx}$
 $= \frac{1}{2\sqrt{x}}$

8. Given $y = (2x + 3)^5$
d.w.r. to x
 $\frac{dy}{dx} = \frac{d (2x + 3)^5}{dx}$
 $= \frac{d (2x + 3)^5}{d (2x + 3)} \times \frac{d (2x + 3)}{dx}$
 $= 5(2x + 3)^4 \times [2 \cdot (1) + 0]$
 $= 10(2x + 3)^4$

9. Given $y = e^{x^2}$
d.w.r. to x
 $\frac{dy}{dx} = \frac{d e^{x^2}}{dx}$
 $= \frac{d e^{x^2}}{dx^2} \times \frac{dx^2}{dx}$
 $= e^{x^2} \times 2x$
 $= 2x \cdot e^{x^2}$

10. Given $y = \log (2x + 1)$
d.w.r. to x
 $\frac{dy}{dx} = \frac{d \log(2x+1)}{dx}$
 $= \frac{d \log(2x+1)}{d(2x+1)} \times \frac{d(2x+1)}{dx}$
 $= \frac{1}{(2x+1)} \times (2 + 0)$
 $= \frac{2}{2x+1}$

11. Given $y = e^{-3x}$
d.w.r. to x
 $\frac{dy}{dx} = \frac{d e^{-3x}}{dx}$
 $= \frac{d e^{-3x}}{d(-3x)} \times \frac{d(-3x)}{dx}$
 $= e^{-3x} \times (-3)$
 $= -3 \cdot e^{-3x}$

12. Given $y = \cos \frac{x}{2}$
d.w.r. to x
 $\frac{dy}{dx} = \frac{d \cos \frac{x}{2}}{dx}$
 $= \frac{d \cos \frac{x}{2}}{d \frac{x}{2}} \times \frac{d \frac{x}{2}}{dx}$
 $= -\sin \frac{x}{2} \times \frac{1}{2}$
 $= -\frac{1}{2} \sin \frac{x}{2}$

13. Given $y = x \cdot \sin x$
d.w.r. to x
 $\frac{dy}{dx} = \frac{d x \cdot \sin x}{dx}$
 $= x \cdot \frac{d \sin x}{dx} + \sin x \cdot \frac{d x}{dx}$
 $= x \cdot (\cos x) + \sin x \cdot (1)$
 $= x \cdot \cos x + \sin x$

14. Given $y = \tan^{-1} x^2$
d.w.r. to x

$$\begin{aligned}\frac{dy}{dx} &= \frac{d \tan^{-1} x^2}{dx} \\ &= \frac{d \tan^{-1} x^2}{dx^2} \times \frac{dx^2}{dx} \\ &= \frac{1}{1+(x^2)^2} \times 2x \\ &= \frac{2x}{1+x^4}\end{aligned}$$

15. Given $y = \cos^{-1} 2x$
d.w.r. to x

$$\begin{aligned}\frac{dy}{dx} &= \frac{d \cos^{-1} 2x}{dx} \\ &= \frac{d \cos^{-1} 2x}{d2x} \times \frac{d2x}{dx} \\ &= \frac{d \cos^{-1} 2x}{d2x} \times \frac{d2x}{dx} \\ &= \frac{-1}{\sqrt{1-(2x)^2}} \times 2 \\ &= \frac{-2}{\sqrt{1-4x^2}}\end{aligned}$$

16. Given $y = \log(2x+3)$
d.w.r. to x

$$\begin{aligned}\frac{dy}{dx} &= \frac{d \log(2x+3)}{dx} \\ &= \frac{d \log(2x+3)}{d(2x+3)} \times \frac{d(2x+3)}{dx} \\ \frac{dy}{dx} &= \frac{1}{2x+3} \times 2 \\ &= \frac{2}{2x+3}\end{aligned}$$

17. Given $y = \operatorname{cosec}(\sqrt{x})$
d.w.r. to x

$$\begin{aligned}\frac{dy}{dx} &= \frac{d \operatorname{cosec}(\sqrt{x})}{dx} \\ &= \frac{-\operatorname{cosec}\sqrt{x} \cdot \cot\sqrt{x}}{2\sqrt{x}}\end{aligned}$$

18. Given $y = e^{\sin x}$
d.w.r. to x

$$\begin{aligned}\frac{dy}{dx} &= \frac{d e^{\sin x}}{dx} \\ &= e^{\sin x} \cdot \cos x\end{aligned}$$

19. Given $y = \sec^{-1}(x^2)$
d.w.r. to x

$$\begin{aligned}\frac{dy}{dx} &= \frac{d \sec^{-1}(x^2)}{dx} \\ &= \frac{1}{x^2 \cdot \sqrt{x^4-1}} \times 2x \\ &= \frac{2}{x\sqrt{x^4-1}}\end{aligned}$$

20. Given $y = (3x^2 + 2x + 1)^2$
d.w.r. to x

$$\begin{aligned}\frac{dy}{dx} &= \frac{d(3x^2 + 2x + 1)^2}{dx} \\ &= 2(3x^2 + 2x + 1) \cdot (6x + 2) \\ &= 4(3x + 1) \cdot (3x^2 + 2x + 1)\end{aligned}$$

Short Question (लघु उत्तरीय प्रश्न)
(3 Marks)

1. Discuss the continuity of the function $f(x)$ at $x = 0$ if

$$f(x) = \begin{cases} 2x - 1, & x < 0 \\ 2x + 1, & x \geq 0 \end{cases}$$

2. Find the value of k for which

$$f(x) = \begin{cases} kx + 5, & x \leq 2 \\ x - 1, & x > 2 \end{cases}$$

is continuous at $x = 2$

3. Find the value of k for which

$$f(x) = \begin{cases} \frac{1 - \cos 4x}{8x^2}, & x \neq 2 \\ k, & x = 0 \end{cases}$$

is continuous at $x = 2$,

$$\text{यदि, } f(x) = \begin{cases} \frac{1 - \cos 4x}{8x^2}, & x \neq 2 \\ k, & x = 0 \end{cases}$$

$x = 2$ पर संतत है तो k का मान ज्ञात करें।

4. Show that the function $f(x) = \begin{cases} 1+x, & x \leq 2 \\ 5-x, & x > 2 \end{cases}$

is not differentiable at $x = 2$

सिद्ध करें कि फलन $f(x) = \begin{cases} 1+x, & x \leq 2 \\ 5-x, & x > 2 \end{cases}$

$x = 2$ पर अवकलनीय नहीं है।

Find $\frac{dy}{dx}$ ($\frac{dy}{dx}$ ज्ञात करें)

5. $y = \cot^3 x^2$

6. $y = \sqrt{\sin x^3}$
7. $y = \sin(\log x)$
8. $y = \sqrt{e^{\sqrt{x}}}$
9. $y = \cos^{-1}(\cot x)$
10. $y = \sin(\tan^{-1} x)$
11. $y = \log(\tan^{-1} x)$
12. $x^2 + y^2 = 4$
13. $x = at^2, y = 2at$
14. $y = x^{10} + 2x^5 + \sqrt{\sin x}$
15. $y = \tan^{-1}\left(\frac{2x}{1-x^2}\right)$
16. $y = \cos^{-1}\sqrt{1-x^2}$
17. $y = x^x$
18. $y = b \sin \theta, x = a \cos \theta$
19. $y = \cot^{-1}\left(\frac{1 + \cos x}{\sin x}\right)$
20. $y = \sec^{-1}\left(\frac{1}{\sqrt{1-x^2}}\right)$

Solutions of short questions (लघु उत्तरीय प्रश्न का हल)

1. Given $f(x) = \begin{cases} 2x - 1, & x < 0 \\ 2x + 1, & x \geq 0 \end{cases}$
 at $x = 0$ ($x = 0$ पर)
 $f(0) = 2 \cdot (0) + 1 = 1$
 $\lim_{x \rightarrow 0^+} f(x) = \lim_{h \rightarrow 0} f(0+h)$
 $= \lim_{h \rightarrow 0} 2(0+h) + 1$
 $= 1$
 $\lim_{x \rightarrow 0^-} f(x) = \lim_{h \rightarrow 0} f(0-h)$
 $= \lim_{h \rightarrow 0} 2(0-h) + (-1)$
 $= -1$
 Clearly $f(0) = \lim_{x \rightarrow 0^+} f(x) \neq \lim_{x \rightarrow 0^-} f(x)$
 $\therefore f(x)$ is discontinuous at $x = 0$
 $x = 0$ पर $f(x)$ असंतत है।

2. Given, $f(x) = \begin{cases} kx + 5, & x \leq 2 \\ x - 1, & x > 2 \end{cases}$
 $f(x)$ is continuous at $x = 2$
 $x = 2$ पर $f(x)$ संतत है
 $\therefore f(2) = \lim_{x \rightarrow 2^+} f(x) = \lim_{x \rightarrow 2^-} f(x)$
 $\Rightarrow k \cdot (2) + 5 = \lim_{h \rightarrow 0} f(2+h) = \lim_{h \rightarrow 0} f(2-h)$
 $\Rightarrow 2k + 5 = \lim_{h \rightarrow 0} (2+h) - 1 = \lim_{h \rightarrow 0} k(2-h) + 5$
 $\Rightarrow 2k + 5 = \lim_{h \rightarrow 0} (h + 1)$
 $\Rightarrow 2k + 5 = 1$
 $\Rightarrow 2k = 1 - 5$
 $\Rightarrow 2k = -4$
 $\Rightarrow k = -2$

3. Given, $f(x) = \begin{cases} \frac{1 - \cos 4x}{8x^2}, & x \neq 0 \\ k, & x = 0 \end{cases}$

$f(x)$ is continuous at $x = 0$
 $x = 0$ पर $f(x)$ संतत है।

$$\begin{aligned} \therefore f(0) &= \lim_{x \rightarrow 0^+} f(x) = \lim_{x \rightarrow 0^-} f(x) \\ \Rightarrow k &= \lim_{h \rightarrow 0} f(0+h) \\ \Rightarrow k &= \lim_{h \rightarrow 0} \frac{1 - \cos(4(0+h))}{8(0+h)^2} \\ \Rightarrow k &= \lim_{h \rightarrow 0} \frac{1 - \cos 4h}{8h^2} \\ \Rightarrow k &= \lim_{h \rightarrow 0} \frac{2 \sin^2 2h}{8h^2} \\ \Rightarrow k &= \lim_{h \rightarrow 0} \frac{\sin^2 2h}{4h^2} \\ \Rightarrow k &= \lim_{h \rightarrow 0} \left(\frac{\sin 2h}{2h} \right)^2 \\ \Rightarrow k &= (1)^2 \\ \Rightarrow k &= 1 \end{aligned}$$

4. Given,
 $f(x) = \begin{cases} 1 + x, & x \leq 2 \\ 5 - x, & x > 2 \end{cases}$
 at $x = 2$ ($x=2$ पर)
 $Rf'(2) = \lim_{h \rightarrow 0} \frac{f(2+h) - f(2)}{h}$
 $= \lim_{h \rightarrow 0} \frac{[5 - (2+h)] - [1+2]}{h}$
 $= \lim_{h \rightarrow 0} \frac{5 - 2 - h - 3}{h}$
 $= \lim_{h \rightarrow 0} \frac{-h}{h}$
 $= -1$
 $Lf'(2) = \lim_{h \rightarrow 0} \frac{f(2-h) - f(2)}{-h}$

$$\begin{aligned}
&= \lim_{h \rightarrow 0} \frac{[1+(2-h)] - [1+2]}{-h} \\
&= \lim_{h \rightarrow 0} \frac{1+2-h-3}{-h} \\
&= \lim_{h \rightarrow 0} \frac{-h}{-h} \\
&= 1
\end{aligned}$$

Clearly $Rf'(2) \neq Lf'(2)$

$\therefore f(x)$ is not differentiable at $x = 2$

$x = 2$ पर $f(x)$ अवकलनीय नहीं है।

5. Given,

$$y = \cot^3 x^2 = (\cot x^2)^3$$

d.w.r. to x

$$\begin{aligned}
\frac{dy}{dx} &= \frac{d(\cot x^2)^3}{dx} \\
&= \frac{d(\cot x^2)^3}{d(\cot x^2)} \times \frac{d \cot x^2}{dx^2} \times \frac{dx^2}{dx} \\
&= 3(\cot x^2)^2 \times (-\operatorname{cosec}^2 x^2) \times (2x) \\
&= -6x \cdot \cot^2 x^2 \cdot \operatorname{cosec}^2 x^2
\end{aligned}$$

6. Given

$$y = \sqrt{\sin x^3}$$

d.w.r. to x

$$\begin{aligned}
\frac{dy}{dx} &= \frac{d\sqrt{\sin x^3}}{dx} \\
&= \frac{d\sqrt{\sin x^3}}{d \sin x^3} \times \frac{d \sin x^3}{dx^3} \times \frac{dx^3}{dx} \\
&= \frac{1}{2\sqrt{\sin x^3}} \times \cos x^3 \times 3x^2 \\
&= \frac{3x^2 \cdot \cos x^3}{2\sqrt{\sin x^3}}
\end{aligned}$$

7. Given

$$y = \sin(\log x)$$

d.w.r. to x

$$\begin{aligned}
\frac{dy}{dx} &= \frac{d \sin(\log x)}{dx} \\
&= \frac{d \sin(\log x)}{d(\log x)} \times \frac{d \log x}{dx} \\
&= \cos(\log x) \times \frac{1}{x} \\
&= \frac{\cos(\log x)}{x}
\end{aligned}$$

8. Given

$$y = \sqrt{e^{\sqrt{x}}}$$

d.w.r. to x

$$\begin{aligned}
\frac{dy}{dx} &= \frac{d\sqrt{e^{\sqrt{x}}}}{dx} \\
&= \frac{d\sqrt{e^{\sqrt{x}}}}{de^{\sqrt{x}}} \times \frac{de^{\sqrt{x}}}{d\sqrt{x}} \times \frac{d\sqrt{x}}{dx} \\
&= \frac{1}{2\sqrt{e^{\sqrt{x}}}} \times e^{\sqrt{x}} \times \frac{1}{2\sqrt{x}} \\
&= \frac{e^{\sqrt{x}}}{4\sqrt{x} \cdot \sqrt{e^{\sqrt{x}}}} \\
&= \frac{\sqrt{e^{\sqrt{x}}}}{4\sqrt{x}}
\end{aligned}$$

9. Given

$$y = \cos^{-1}(\cot x)$$

d.w.r. to x

$$\begin{aligned}
\frac{dy}{dx} &= \frac{d \cos^{-1}(\cot x)}{dx} \\
&= \frac{d \cos^{-1}(\cot x)}{d \cot x} \times \frac{d \cot x}{dx} \\
&= \frac{-1}{\sqrt{1-\cot^2 x}} \times (-\operatorname{cosec}^2 x) \\
&= \frac{\operatorname{cosec}^2 x}{\sqrt{1-\cot^2 x}}
\end{aligned}$$

10. Given

$$y = \sin(\tan^{-1} x)$$

d.w.r. to x

$$\begin{aligned}
\frac{dy}{dx} &= \frac{d \sin(\tan^{-1} x)}{dx} \\
&= \frac{d \sin(\tan^{-1} x)}{d \tan^{-1} x} \times \frac{d \tan^{-1} x}{dx} \\
&= \cos(\tan^{-1} x) \times \frac{1}{1+x^2} \\
&= \frac{\cos(\tan^{-1} x)}{1+x^2}
\end{aligned}$$

11. Given $y = \log(\tan^{-1} x)$

d.w.r. to x

$$\begin{aligned}
\frac{dy}{dx} &= \frac{d \log(\tan^{-1} x)}{dx} \\
&= \frac{d \log(\tan^{-1} x)}{d \tan^{-1} x} \times \frac{d \tan^{-1} x}{dx} \\
&= \frac{1}{\tan^{-1} x} \times \frac{1}{1+x^2} = \frac{1}{(1+x^2)\tan^{-1} x}
\end{aligned}$$

12. Given $x^2 + y^2 = 4$

d.w.r. to x

$$2x + 2y \frac{dy}{dx} = 0$$

$$\Rightarrow 2y \frac{dy}{dx} = -2x$$

$$\Rightarrow \frac{dy}{dx} = \frac{-x}{y}$$

13. Given

$$x = at^2 \quad x = 2at \\ \text{d.w.r. to } t \quad \text{d.w.r. to } t$$

$$\frac{dx}{dt} = 2at, \quad \frac{dy}{dt} = 2a$$

$$\text{Now } \frac{dy}{dx} = \frac{\frac{dy}{dt}}{\frac{dx}{dt}} \\ = \frac{2a}{2at} = \frac{1}{t}$$

14. Given $y = x^{10} + 2x^5 + \sqrt{\sin x}$
d.w.r. to x

$$\frac{dy}{dx} = \frac{d}{dx} x^{10} + \frac{d}{dx} 2x^5 + \frac{d}{dx} \sqrt{\sin x} \\ = 10x^9 + 10x^4 + \frac{d}{dx} \sqrt{\sin x} \times \frac{d \sin x}{dx} \\ = 10x^9 + 10x^4 + \frac{1}{2\sqrt{\sin x}} \times \cos x \\ = 10x^9 + 10x^4 + \frac{\cos x}{2\sqrt{\sin x}}$$

15. Given

$$y = \tan^{-1}\left(\frac{2x}{1-x^2}\right)$$

$$\text{Put } x = \tan \theta \quad \therefore \theta = \tan^{-1} x$$

$$y = \tan^{-1}\left(\frac{2\tan \theta}{1-\tan^2 \theta}\right)$$

$$y = \tan^{-1}(\tan 2\theta)$$

$$y = 2\theta = 2\tan^{-1} x$$

d.w.r. to x

$$\frac{dy}{dx} = \frac{2}{1+x^2}$$

16. Given

$$y = \cos^{-1}\sqrt{1-x^2}$$

$$\text{Put } x = \sin \theta \quad \therefore \theta = \sin^{-1} x$$

$$y = \cos^{-1}\sqrt{1-\sin^2 \theta}$$

$$y = \cos^{-1}\sqrt{\cos^2 \theta}$$

$$y = \cos^{-1}(\cos \theta)$$

$$y = \theta$$

$$y = \sin^{-1} x$$

d.w.r. to x

$$\frac{dy}{dx} = \frac{1}{\sqrt{1-x^2}}$$

17.

Given

$$y = x^x$$

taking log both sides

दोनों पक्षों में log लेने पर

$$\log y = \log x^x$$

$$\log y = x \cdot \log x$$

d.w.r. to x

$$\frac{1}{y} \cdot \frac{dy}{dx} = x \cdot \frac{1}{x} + \log x \cdot 1$$

$$\frac{dy}{dx} = y[1 + \log x]$$

$$= x^x(1 + \log x)$$

18. Given

$$x = a \cos \theta$$

$$y = b \sin \theta$$

d.w.r. to θ

d.w.r. to θ

$$\frac{dx}{d\theta} = -a \sin \theta, \quad \frac{dy}{d\theta} = b \cos \theta$$

$$\therefore \frac{dy}{dx} = \frac{\frac{dy}{d\theta}}{\frac{dx}{d\theta}}$$

$$= \frac{b \cos \theta}{-a \sin \theta}$$

$$= -\frac{b}{a} \cdot \cot \theta$$

19. Given

$$y = \cot^{-1}\left(\frac{1+\cos x}{\sin x}\right)$$

$$\Rightarrow y = \cot^{-1}\left(\frac{2\cos^2 \frac{x}{2}}{2\sin \frac{x}{2} \cdot \cos \frac{x}{2}}\right)$$

$$\Rightarrow y = \cot^{-1}\left(\frac{\cos \frac{x}{2}}{\sin \frac{x}{2}}\right)$$

$$\Rightarrow y = \cot^{-1}\left(\cot \frac{x}{2}\right)$$

$$\Rightarrow y = \frac{x}{2}$$

d.w.r. to x

$$\frac{dy}{dx} = \frac{1}{2}$$

20. Given $y = \sec^{-1}\left(\frac{1}{\sqrt{1-x^2}}\right)$
 put $x = \sin \theta \therefore \theta = \sin^{-1} x$
 $y = \sec^{-1}\left(\frac{1}{\sqrt{1-\sin^2\theta}}\right)$
 $y = \sec^{-1}\left(\frac{1}{\sqrt{\cos^2\theta}}\right)$
 $y = \sec^{-1}\left(\frac{1}{\cos\theta}\right)$
 $y = \sec^{-1}(\sec \theta)$
 $y = \theta$
 $y = \sin^{-1} x$
 d.w.r. to x
 $\frac{dy}{dx} = \frac{1}{\sqrt{1-x^2}}$

लघु उत्तरीय प्रश्न (Short Question)

3 Marks Question:-

Find $\frac{dy}{dx}$ $\left(\frac{dy}{dx}$ ज्ञात करें।

- $2x + 3y = \sin x$
- $xy + y^2 = \tan x + y$
- $y = \tan^{-1}\left(\frac{3x - x^3}{1 - 3x^2}\right)$
- $y = \sin^{-1}(2x\sqrt{1-x^2})$
- $y = \sin(\tan^{-1} e^x)$
- $y = \log(\cos e^x)$
- $y = e^x + e^{x^2} + \dots + e^{x^5}$
- $y = (\log x)^{\cos x}$
- $x^y + y^x = 1$
- $y^x = x^y$
- $(\cos y)^x = (\cos x)^y$
- $x = a(\theta - \sin \theta), y = a(1 + \cos \theta)$

13. if $y = 5\cos x - 3\sin x$, then prove that $\frac{d^2y}{dx^2} + y = 0$

यदि $y = 5\cos x - 3\sin x$, तो सिद्ध करें $\frac{d^2y}{dx^2} + y = 0$

14. If $y = 3 \sin x + \log x$ then find $\frac{d^2y}{dx^2}$

यदि $y = 3 \sin x + \log x$ तो $\frac{d^2y}{dx^2}$ ज्ञात करें।

15. If $y = \tan^{-1}x$ then find $\frac{dy}{dx}$ at $x = 1$

यदि $y = \tan^{-1}x$ तो $x = 1$ पर $\frac{dy}{dx}$ ज्ञात करें।

16. Show that $f(x) = |x-2|$ is continuous but not differentiable at $x = 2$

सिद्ध कीजिए कि $x = 2$ पर $f(x) = |x-2|$ संतत है, परन्तु अवकलनीय नहीं है।

**Solutions of short questions
(लघु उत्तरीय प्रश्न का हल)**

1. $2x + 3y = \sin x$

diff. both sides w.r.t x

$$2 + 3 \frac{dy}{dx} = \cos x$$

$$3 \frac{dy}{dx} = \cos x - 2$$

$$\frac{dy}{dx} = \frac{\cos x - 2}{3}$$

2. $xy + y^2 = \tan x + y$

diff. both sides w.r.t x

$$x \cdot \frac{dy}{dx} + y \cdot 1 + 2y \frac{dy}{dx} = \sec^2 x + \frac{dy}{dx}$$

$$\Rightarrow \frac{dy}{dx} \cdot (x + 2y - 1) = \sec^2 x - y$$

$$\Rightarrow \frac{dy}{dx} = \frac{\sec^2 x - y}{x + 2y - 1}$$

3. $y = \tan^{-1}\left(\frac{3x - x^3}{1 - 3x^2}\right)$
 put $x = \tan \theta \quad \therefore \theta = \tan^{-1} x$
 $y = \tan^{-1}\left(\frac{3 \tan \theta - \tan^3 \theta}{1 - 3 \tan^2 \theta}\right)$
 $y = \tan^{-1}(\tan 3\theta)$
 $y = 3\theta$
 $y = 3 \cdot \tan^{-1} x$

diff. both sides w.r. to x

$$\frac{dy}{dx} = \frac{3}{1+x^2}$$

4. $y = \sin^{-1}(2x\sqrt{1-x^2})$
 put $x = \sin \theta \quad \therefore \theta = \sin^{-1} x$
 $y = \sin^{-1}(2 \sin \theta \sqrt{1-\sin^2 \theta})$
 $y = \sin^{-1}(2 \sin \theta \cdot \cos \theta)$
 $y = \sin^{-1}(\sin 2\theta)$
 $y = 2\theta$
 $y = 2 \sin^{-1} x$
 d.w.r. to x
 $\frac{dy}{dx} = \frac{2}{\sqrt{1-x^2}}$

5. $y = \sin(\tan^{-1} e^{-x})$
 d.w.r. to x
 $\frac{dy}{dx} = \frac{d \sin(\tan^{-1} e^{-x})}{dx}$
 $= \frac{d \sin(\tan^{-1} e^{-x})}{d(\tan^{-1} e^{-x})} \times \frac{d \tan^{-1} e^{-x}}{d e^{-x}} \times \frac{d e^{-x}}{d(x)}$
 $= \cos(\tan^{-1} e^{-x}) \times \frac{1}{1+(e^{-x})^2} \times e^{-x} \times (-1)$
 $= \frac{-e^{-x} \cdot \cos(\tan^{-1} e^{-x})}{1+e^{-2x}}$

6. $y = \log(\cos e^x)$
 d.w.r. to x
 $\frac{dy}{dx} = \frac{d \log(\cos e^x)}{dx}$
 $= \frac{d \log(\cos e^x)}{d(\cos e^x)} \times \frac{d \cos e^x}{d e^x} \times \frac{d e^x}{dx}$
 $= \frac{1}{\cos e^x} \times (-\sin e^x) \times e^x$
 $= -e^x \cdot \tan(e^x)$

7. $y = e^x + e^{x^2} + \dots + e^{x^5}$
 $y = e^x + e^{x^2} + e^{x^3} + e^{x^4} + e^{x^5}$
 d.w.r. to x
 $\frac{dy}{dx} = e^x + 2x \cdot e^{x^2} + 3x^2 \cdot e^{x^3} + 4x^3 \cdot e^{x^4} + 5x^4 \cdot e^{x^5}$

8. $y = (\log x)^{\cos x}$
 taking log both sides
 $\log y = \log(\log x)^{\cos x}$
 $\log y = \cos x \cdot \log(\log x)$
 diff. both sides w.r.t x
 $\frac{1}{y} \cdot \frac{dy}{dx} = \cos x \cdot \frac{d \log(\log x)}{dx} + \log(\log x) \cdot \frac{d \cos x}{dx}$
 $\Rightarrow \frac{dy}{dx} = y \cdot \left[\cos x \cdot \frac{1}{\log x} \times \frac{1}{x} + \log(\log x) \cdot (-\sin x) \right]$
 $= (\log x)^{\cos x} \cdot \left[\frac{\cos x}{x \cdot \log x} - \sin x \cdot \log(\log x) \right]$

9. $x^y + y^x = 1$
 d.w.r to x both sides
 $\frac{d x^y}{dx} + \frac{d y^x}{dx} = \frac{d(1)}{dx}$
 $\Rightarrow x^y \cdot \left[\frac{y}{x} \cdot \frac{dx}{dx} + \log x \cdot \frac{dy}{dx} \right] + y^x \cdot \left[\frac{x}{y} \cdot \frac{dy}{dx} + \log y \cdot \frac{dx}{dx} \right] = 0$
 $\Rightarrow \frac{y \cdot x^y}{x} + x^y \cdot \log x \cdot \frac{dy}{dx} + \frac{x \cdot y^x}{y} \cdot \frac{dy}{dx} + y^x \log y = 0$
 $\Rightarrow \frac{dy}{dx} \left[x^y \cdot \log x + \frac{x \cdot y^x}{y} \right] = - \left[y^x \cdot \log y + \frac{y \cdot x^y}{x} \right]$
 $\Rightarrow \frac{dy}{dx} \left[x^y \cdot \log x + x \cdot y^{x-1} \right] = - \left[y^x \cdot \log y + y \cdot x^{y-1} \right]$
 $\Rightarrow \frac{dy}{dx} = \frac{- \left[y^x \cdot \log y + y \cdot x^{y-1} \right]}{\left[x^y \cdot \log x + x \cdot y^{x-1} \right]}$

10. $y^x = x^y$
 taking log both sides
 $\Rightarrow \log y^x = \log x^y$
 $\Rightarrow x \cdot \log y = y \cdot \log x$
 diff. both sides w.r.t x
 $\Rightarrow x \cdot \frac{1}{y} \cdot \frac{dy}{dx} + \log y = y \cdot \frac{1}{x} + \log x \cdot \frac{dy}{dx}$
 $\Rightarrow \frac{dy}{dx} \left(\frac{x}{y} - \log x \right) = \frac{y}{x} - \log y$
 $\Rightarrow \frac{dy}{dx} = \frac{\left(\frac{y}{x} - \log y \right)}{\left(\frac{x}{y} - \log x \right)} = \frac{y}{x} \left(\frac{y-x \log y}{x-y \log x} \right)$

11. $(\cos x)^y = (\cos y)^x$
 taking log both sides
 दोनों पक्षों में log लेने पर
 $y \cdot \log(\cos x) = x \cdot \log(\cos y)$
 diff. both sides w.r.t x

$$y \cdot \frac{1}{\cos x} (-\sin x) + \log(\cos x) \frac{dy}{dx} = x \cdot \left(\frac{-\sin y}{\cos y} \right) \frac{dy}{dx} + \log(\cos y)$$

$$\Rightarrow -y \tan x + \log(\cos x) \frac{dy}{dx} = -x \tan y \frac{dy}{dx} + \log(\cos y)$$

$$\Rightarrow \frac{dy}{dx} [\log(\cos x) + x \tan y] = \log(\cos y) + y \tan x$$

$$\Rightarrow \frac{dy}{dx} = \frac{\log(\cos y) + y \tan x}{\log(\cos x) + x \tan y}$$

12. $x = a(\theta - \sin \theta)$ $y = a(1 + \cos \theta)$
 d.w.r. to θ d.w.r. to θ

$$\frac{dx}{d\theta} = a(1 - \cos \theta), \quad \frac{dy}{d\theta} = -a \sin \theta$$

Now $\frac{dy}{dx} = \frac{\frac{dy}{d\theta}}{\frac{dx}{d\theta}} = \frac{-a \sin \theta}{a(1 - \cos \theta)}$

$$= \frac{-2 \sin \frac{\theta}{2} \cdot \cos \frac{\theta}{2}}{2 \sin^2 \frac{\theta}{2}}$$

$$= -\cot \frac{\theta}{2}$$

13. $y = 5 \cos x - 3 \sin x$ — (1)
 d.w.r. to x

$$\frac{dy}{dx} = -5 \sin x - 3 \cos x$$
 — (2)
 again d.w.r. to x
$$\frac{d^2y}{dx^2} = -5 \cos x + 3 \sin x$$
 — (3)
 Adding (1) and (3) we get
 (1) तथा (3) को जोड़ने पर
$$\frac{d^2y}{dx^2} + y = 0$$

14. $y = 3 \sin x + \log x$ — (1)
 d.w.r. to x

$$\frac{dy}{dx} = 3 \cos x + \frac{1}{x}$$

$$\frac{d^2y}{dx^2} = -3 \sin x - \frac{1}{x^2}$$

15. $y = \tan^{-1}x$ — (1)
 d.w.r. to x

$$\frac{dy}{dx} = \frac{1}{1+x^2}$$

at $x = 1$ ($x = 1$ पर)

$$\left. \frac{dy}{dx} \right|_{x=1} = \frac{1}{1+(1)^2}$$

$$= \frac{1}{1+1}$$

$$= \frac{1}{2}$$

16. Given
 $f(x) = |x-2|$ — (1)
 at $x = 2$

$$\lim_{x \rightarrow 2^+} f(x) = \lim_{h \rightarrow 0} f(2+h) = \lim_{h \rightarrow 0} |2+h-2|$$

$$= \lim_{h \rightarrow 0} h = 0$$

$$\lim_{x \rightarrow 2^-} f(x) = \lim_{h \rightarrow 0} f(2-h) = \lim_{h \rightarrow 0} |2-h-2|$$

$$= \lim_{h \rightarrow 0} h = 0$$

and
 $f(2) = |2-2| = 0$
 $\therefore f(2) = \lim_{x \rightarrow 2^+} f(x) = \lim_{x \rightarrow 2^-} f(x)$
 $\therefore f(x)$ is continuous at $x = 2$ **Proved**
 $x = 2$ पर $f(x)$ संतत है।

Again :-

$$Rf'(2) = \lim_{h \rightarrow 0} \frac{f(2+h) - f(2)}{h} = \lim_{h \rightarrow 0} \frac{|2+h-2| - |2-2|}{h}$$

$$= \lim_{h \rightarrow 0} \frac{h-0}{h} = 1$$

$$Lf'(2) = \lim_{h \rightarrow 0} \frac{f(2-h) - f(2)}{-h} = \lim_{h \rightarrow 0} \frac{|2-h-2| - |2-2|}{-h}$$

$$= \lim_{h \rightarrow 0} \frac{h}{-h} = -1$$

$\therefore Rf'(2) \neq Lf'(2)$
 $\therefore f(x)$ is not differentiable at $x = 2$
 $x = 2$ पर $f(x)$ अवकलनीय है। **Proved**

MCQ:- (बहुविकल्पीय प्रश्न) -

Q 1 $f(x) = \sin x$ is increasing in $f(x) = \sin x$ किस अन्तराल में वर्धमान है -

- (a) $\left(\frac{\pi}{2}, \pi\right)$ (b) $\left(\pi, \frac{3\pi}{2}\right)$
 (c) $(0, \pi)$ (d) $\left(-\frac{\pi}{2}, \frac{\pi}{2}\right)$

Q 2 The function $f(x) = x^3 - 6x^2 + 9x + 3$ is decreasing forफलन $f(x) = x^3 - 6x^2 + 9x + 3$ के ह्रासमान के लिए

- (a) $|x| < 3$ (b) $|x| > 3$
 (c) $-3 < x < 3$ (d) None of these/
 इनमें से कोई नहीं।

Q 3 The least value of k for which

 $f(x) = x^2 + kx + 1$ is increasing on $(1, 2)$ is-k के किस मान के लिए $f(x) = x^2 + kx + 1$,अन्तराल $(1, 2)$ पर वर्धमान है ?

- (a) -2 (b) -1
 (c) 1 (d) 2

Q 4 The least value of $f(x) = e^x + e^{-x}$ is $f(x) = e^x + e^{-x}$ का न्यूनतम मान है-

- (a) -2 (b) 0
 (c) 2 (d) None of these/
 इनमें से कोई नहीं

Q 5 The maximum value of $f(x) = (x-2)(x-3)^2$ is- $f(x) = (x-2)(x-3)^2$ का महत्तम मान है-

- (a) $\frac{7}{3}$ (b) 3
 (c) $\frac{4}{27}$ (d) 0

Q 6 Tangent is parallel to x - axis then slope-

स्पर्श रेखा x-अक्ष के समान्तर है तो प्रवणता-

- (a) -1 (b) 0
 (c) ∞ (d) None /कोई नहीं

Q 7 Slope of tangent at $x = 2$, where curve $y = x^2 - 2x$ वक्र $y = x^2 - 2x$ में $x = 2$ पर स्पर्श रेखा का ढाल =

- (a) 2 (b) 4
 (c) -2 (d) 0

Q 8 Slope of line $4x - 2y + 8 = 0$ is-रेखा $4x - 2y + 8 = 0$ का ढाल है-

- (a) 4 (b) -2
 (c) 8 (d) 2

Q 9 If curve $y = x^2$ then slope of normal at $x = 1$ is-यदि वक्र $y = x^2$ है तो $x = 1$ पर अभिलम्ब का प्रवणता है-

- (a) 2 (b) -2
 (c) $\frac{1}{2}$ (d) $-\frac{1}{2}$

Q 10 The slope at the point $(1, \sqrt{3})$ of the curve $x^2 + y^2 = 4$ is-वक्र $x^2 + y^2 = 4$ के बिन्दु $(1, \sqrt{3})$ पर ढाल है -

- (a) $-\frac{1}{\sqrt{3}}$ (b) $\frac{1}{2}$
 (c) $-\sqrt{3}$ (d) 3

Q 11 If m_1 and m_2 are slope of tangents at any point on the curve. The tangents are perpendicular ifयदि m_1 और m_2 वक्र के किसी बिंदु पर दो स्पर्श रेखाओं की ढाल हैं-

स्पर्श रेखाएँ परस्पर लम्बवत है यदि -

- (a) $m_1 = m_2$ (b) $m_1 \times m_2 = -1$
 (c) $\frac{m_1}{m_2} = 2$ (d) None /कोई नहीं।

Q 12 Tangent and normal is

स्पर्श रेखा और अभिलम्ब है -

- (a) Parallel to each other at point on the curve / वक्र के बिन्दु पर समान्तर
 (b) Perpendicular each other at point on the curve / वक्र के बिन्दु पर लम्बवत
 (c) Does not intersect each other/एक दूसरे को प्रतिच्छेद नहीं करते
 (d) None of these / इनमें से कोई नहीं।

Q 13 The rate of change of the area of a circle with respect to its radius r , when $r = 6\text{cm}$.वृत्त के क्षेत्रफल के परिवर्तन की दर त्रिज्या r के सापेक्ष क्या होगी, यदि $r = 6\text{cm}$.

- (a) $12\text{ cm}^2/\text{cm}$ (b) $\pi\text{ cm}^2/\text{cm}$
 (c) $12\pi\text{ cm}^2/\text{cm}$ (d) $6\pi\text{ cm}^2/\text{cm}$

Q 14 The normal at the point $(1,1)$ on the curve $2y + x^2 = 3$ isवक्र $2y + x^2 = 3$ के बिन्दु $(1,1)$ पर अभिलम्ब है-

- (a) $x + y = 0$ (b) $x - y = 0$
 (c) $x + y + 1 = 0$ (d) $x - y + 1 = 0$

Q 15 The equation of normal to the curve $x^2 = 4y$ passing through $(1,2)$ isवक्र $x^2 = 4y$ के बिन्दु $(1,2)$ से गुजरने वाले अभिलम्ब का समीकरण-

- (a) $x + y = 3$ (b) $x - y = 3$
 (c) $x + y = 1$ (d) $x - y = 1$

Q 16 The line $y = x + 1$ is a tangent to the curve $y^2 = 4x$ at the pointरेखा $y = x + 1$ वक्र $y^2 = 4x$ के किस बिन्दु पर स्पर्श करती है।

- (a) $(1,2)$ (b) $(2,1)$
 (c) $(1,-2)$ (d) $(-1,2)$

Q 17 The approximate value of $\sqrt{37}$ is $\sqrt{37}$ का सन्निकट मान है-

- (a) 6.08 (b) 7.08
 (c) 5.6 (d) 9.2

Q 18 Equation of the tangent to the curve $y = x^2$ at $x = 1$ isवक्र $y = x^2$ के $x=1$ पर स्पर्श रेखा का समीकरण है-

- (a) $2x + y - 1 = 0$ (b) $2x - y - 1 = 0$
 (c) $2x - y + 1 = 0$ (d) None of these / इनमें से कोई नहीं।

Q 19 If $f'(x) > 0$ for all $x \in]a, b[$ then $f(x)$ is -यदि $f'(x) > 0$ सभी $x \in]a, b[$ तो $f(x)$ होगा

- (a) increasing / वर्धमान
 (b) decreasing / ह्यसमान
 (c) both increasing and decreasing / वर्धमान और ह्यसमान दोनों
 (d) None of these / इनमें से कोई नहीं

Q 20 The approximate value of $\sqrt{26}$ is $\sqrt{26}$ का सन्निकट मान है -

- (a) 6 (b) 5.1
 (c) 5.8 (d) 5.9

Very Short Questions (2 Marks)**Q 1 In the curve $y^2 = 4x$ obtain the slope of the curve at the point where $y = 2$** वक्र $y^2 = 4x$ में वक्र के उस बिन्दु का प्रवणता निकाले जहाँ $y = 2$ **Q 2 Find the point on the curve $y = x^3 - 2x^2 + x - 2$ where the tangents are parallel to the x -axis**वक्र $y = x^3 - 2x^2 + x - 2$ पर उन बिन्दुओं को मालूम करें जिन पर की स्पर्श रेखाएँ x -अक्ष के समान्तर हों।**Q 3 Find the rate of change of the area of a circle with respect to its radius r when $r = 3\text{cm}$** त्रिज्या r के सापेक्ष वृत्त के क्षेत्रफल के परिवर्तन की दर ज्ञात करें जब $r = 3\text{cm}$ **Q 4 Examine whether the function** $f(x) = x^2 - 4x + 3$ is increasing or decreasing at $x = 1$?बताएँ कि फलन $f(x) = x^2 - 4x + 3$, $x = 1$ पर वर्धमान है या ह्यसमान है ?**Q 5 Find the approximate change in the volume v of a cube of side x caused by increasing the side by 1%**

यदि घन की भुजा x , 1% वृद्धि होती है तो आयतन v के सन्निकट परिवर्तन ज्ञात करें ?

Q 6 Find the maximum value of $f(x) = x^2 - 4x + 2$
फलन $f(x) = x^2 - 4x + 2$ के उच्चिष्ठ मान ज्ञात करें ?

Q 7 Show that the function given by $f(x) = 3x + 17$ is strictly increasing on R
सिद्ध कीजिए R पर $f(x) = 3x + 17$ से प्रदत्त फलन निरंतर वर्धमान है |

Q 8 Find the slope of the normal to the curve $x = a\cos^3\theta$, $y = a\sin^3\theta$ at $\theta = \frac{\pi}{4}$?
वक्र $x = a\cos^3\theta$, $y = a\sin^3\theta$ के $\theta = \frac{\pi}{4}$ पर अभिलम्ब की प्रवणता ज्ञात कीजिए ?

Short Questions (3 Marks)

Q 1 The radius of a circle is increasing at the rate of 0.7cm/s . What is the rate of increase of its circumference ?

एक वृत्त की त्रिज्या 0.7cm/s की दर से बढ़ रही है। इसकी परिधि की वृद्धि की दर क्या है?

Q 2 A balloon which remains spherical has a variable radius. Find the rate at which its volume is increasing with the radius when the radius is 10cm

एक गुब्बारा जो सदैव गोलाकार रहता है, की त्रिज्या परिवर्तनशील है। त्रिज्या के सापेक्ष आयतन के परिवर्तन की दर ज्ञात कीजिए जब त्रिज्या 10cm है |

Q 3 Find the intervals in which the function f given by $f(x) = 2x^2 - 3x$ is
अंतराल ज्ञात कीजिए जिनमें $f(x) = 2x^2 - 3x$ से प्रदत्त फलन f -

(a) strictly increasing / निरंतर वर्धमान

(b) strictly decreasing / निरंतर ह्यसमान

Q 4 Prove that the logarithmic function is strictly increasing on $(0, \infty)$

सिद्ध कीजिए कि लघुगणकीय फलन $(0, \infty)$ में निरंतर वर्धमान फलन है |

Q 5 Find the equation of all lines having slope -1 that are tangent to the curve $y = \frac{1}{x-1}$, $x \neq 1$
प्रवणता -1 वाली सभी रेखाओं का समीकरण ज्ञात कीजिए जो वक्र $y = \frac{1}{x-1}$, $x \neq 1$ को स्पर्श करती है |

Q 6 Find the equation of the normal at the point (am^2, am^3) for the curve $ay^2 = x^3$?

वक्र $ay^2 = x^3$ के बिन्दु (am^2, am^3) पर अभिलम्ब का समीकरण ज्ञात कीजिए ?

Q 7 Find the maximum and minimum values of $f(x) = 9x^2 + 12x + 2$?

फलन $f(x) = 9x^2 + 12x + 2$ का महत्तम और निम्नतम मान ज्ञात करें ?

Q 8 Find the maximum profit that a company can make if the profit function is given by $p(x) = 41 - 72x - 18x^2$?

यदि लाभ फलन $p(x) = 41 - 72x - 18x^2$ से प्रदत्त है तो किसी कंपनी द्वारा अर्जित उच्चतम लाभ ज्ञात कीजिए ?

Long Questions (5 Marks)

Q 1 Find two numbers whose sum is 24 and whose product is large as possible ?

ऐसी दो संख्याएँ ज्ञात कीजिए जिनका योग 24 है और जिनका गुणनफल उच्चतम हों ?

Q 2 Show that all the rectangles inscribed in a given fixed circle, the square has the maximum area.

सिद्ध कीजिए कि एक दिए गए वृत्त के अंतर्गत सभी आयतों में वर्ग का क्षेत्रफल उच्चतम होता है |

Q 3 Find the maximum and minimum values of $3x^4 - 8x^3 + 12x^2 - 48x + 25$ in $[0, 3]$.?

अंतराल $[0, 3]$ पर $3x^4 - 8x^3 + 12x^2 - 48x + 25$ के उच्चतम मान और निम्नतम मान ज्ञात कीजिए ?

Q 4 Prove that $y = \frac{4\sin\theta}{2 + \cos\theta} - \theta$, is increasing in $\left[0, \frac{\pi}{2}\right]$.

सिद्ध कीजिए कि $\left[0, \frac{\pi}{2}\right]$ में, $y = \frac{4\sin\theta}{2 + \cos\theta} - \theta$ एक वर्धमान फलन है |

Q 5 Find points on the curve $\frac{x^2}{9} + \frac{y^2}{16} = 1$ at which the tangents are

(a) parallel to x-axis (b) parallel to y-axis

वक्र $\frac{x^2}{9} + \frac{y^2}{16} = 1$ पर उन बिन्दुओं को ज्ञात कीजिए जिन पर स्पर्श रेखाएँ

(a) x-अक्ष के समांतर है

(b) y-अक्ष के समांतर है

Q 6 Show that the closed right circular cylinder of given surface and maximum volume is such that its height is equal to the diameter of the base.

सिद्ध कीजिए कि प्रदत्त पृष्ठ एवं महत्तम आयतन के बेलन की ऊँचाई, आधार के व्यास के बराबर होती है।

Q 7 Find the absolute maximum value and the absolute minimum value of

$$f(x) = \sin x + \cos x, x \in [0, \pi] ?$$

अंतराल $x \in [0, \pi]$ में फलन $f(x) = \sin x + \cos x$ के निरपेक्ष महत्तम और निरपेक्ष निम्नतम मान ज्ञात करें ?

Answer: "Application of Derivatives Solution"

**Solution of MCQ
91 - Marks)**

- 1 - (d) 2 - (a) 3 - (a) 4 - (c) 5 - (c) 6 - (b) 7 - (a)
8 - (d) 9 - (d) 10 - (a) 11 - (b) 12 - (b) 13 - (c)
14 - (b) 15 - (a) 16 - (a) 17 - (a) 18 - (b) 19 - (b)
20 - (b)

**Solutions of very short questions
(2- Marks)**

1 Ans :- **Given** $y^2 = 4x$ (1)
d.w.r.to x
 $2y \frac{dy}{dx} = 4$
 $\frac{dy}{dx} = \frac{2}{y}$ (2)
at $y = 2$
slope $= \left. \frac{dy}{dx} \right|_{y=2} = \frac{2}{2} = 1$

2 Ans:- **Given curve**

$$y = x^3 - 2x^2 + x - 2 \text{(1)}$$

d.w.r.to x

$$\frac{dy}{dx} = 3x^2 - 4x + 1 \text{(2)}$$

tangents are parallel to x - axis

$$\therefore \frac{dy}{dx} = 0$$

$$\Rightarrow 3x^2 - 4x + 1 = 0 \Rightarrow (3x - 1)(x - 1) = 0$$

$$\Rightarrow x = 1, \frac{1}{3}$$

From equation (1)

$$\text{when } x = 1 \Rightarrow$$

$$y = 1^3 - 2 \cdot 1^2 + 1 - 2$$

$$y = 1 - 2 + 1 - 2 = -2$$

$$\therefore \text{Point} = (1, -2)$$

$$\text{when } x = \frac{1}{3} \Rightarrow$$

$$y = \left(\frac{1}{3}\right)^3 - 2 \cdot \left(\frac{1}{3}\right)^2 + \frac{1}{3} - 2$$

$$y = -\frac{50}{27}$$

$$\therefore \text{Point} = \left(\frac{1}{3}, -\frac{50}{27}\right)$$

3 Ans :-

Let

A = Area of circle (वृत्त का क्षेत्रफल)

r = radius of circle (वृत्त की त्रिज्या)

we know

$$A = \pi r^2$$

d.w.r. to r

$$\frac{dA}{dr} = 2\pi r$$

at $r = 3\text{cm}$

$$\left. \frac{dA}{dr} \right|_{r=3\text{cm}} = 2\pi(3)$$

$$= 6\pi \text{ cm}^2/\text{cm}$$

4 Ans :-

$$f(x) = x^2 - 4x + 3 \text{(1)}$$

d.w.r. to x

$$f'(x) = 2x - 4 \text{(2)}$$

For increasing or decreasing at $x = 1$

$x=1$ पर वर्धमान या ह्रासमान के लिए

$$f'(1) = 2 \cdot (1) - 4$$

$$= 2 - 4$$

$$= -2 < 0$$

So, f(x) is decreasing at $x = 1$

$x=1$ पर $f(x)$ ह्रासमान है।

5 Ans :-

Let, v = volume of cube of side x

(भुजा x वाले घन का आयतन)

$$\therefore v = x^3$$

d.w.r. to x

$$\frac{dv}{dx} = 3x^2$$

Now change in volume

(अब आयतन में परिवर्तन)

$$\Delta v = \frac{dv}{dx} \cdot \Delta x$$

$$= 3x^2 \times \Delta x$$

$$= 3x^2 \times (1\% \text{ of } x)$$

$$= 3x^2 \times \frac{1}{100} \times x$$

$$= 0.03x^3$$

6 Ans : -

$$f(x) = x^2 - 4x + 2 \dots\dots\dots(1)$$

d.w.r. to x

$$f'(x) = 2x - 4$$

$$f'(x) = 2 \dots\dots\dots(2)$$

for critical point,

$$f'(x) = 0$$

$$\Rightarrow 2x - 4 = 0 \Rightarrow 2x = 4$$

$$\therefore x = 2$$

Now from equation(2) $\Rightarrow x = 2$

$$\Rightarrow f'(2) = 2 = +ve \text{ Maximum}$$

\therefore equation(1) $\Rightarrow x = 2$

$$\Rightarrow f(2) = 2^2 - 4(2) + 2$$

$$= 4 - 8 + 2$$

$$= -2$$

7 Ans : -

Given $f(x) = 3x + 17$

Let $x_1, x_2 \in \mathbb{R}$

$$x_1 < x_2$$

$$\Rightarrow 3x_1 < 3x_2$$

$$\Rightarrow 3x_1 + 17 < 3x_2 + 17$$

$$\Rightarrow f(x_1) < f(x_2)$$

Hence, $f(x)$ is strictly increasing on \mathbb{R}

अतः \mathbb{R} पर $f(x)$ निरंतर वर्धमान है।

8 Ans : -

Given $x = a \cos^3 \theta$

d.w.r. to θ

$$\frac{dx}{d\theta} = 3a \cos^2 \theta (-\sin \theta)$$

And $y = a \sin^3 \theta$

d.w.r. to θ

$$\frac{dy}{d\theta} = 3a \sin^2 \theta (\cos \theta)$$

$$\frac{dy}{dx} = \frac{\frac{dy}{d\theta}}{\frac{dx}{d\theta}} = \frac{3a \sin^2 \theta (\cos \theta)}{3a \cos^2 \theta (-\sin \theta)}$$

$$= -\tan \theta$$

$$\text{at } \theta = \frac{\pi}{4}$$

$$\begin{aligned} \text{slope of normal} &= \left. \frac{-1}{\frac{dy}{dx}} \right]_{\theta = \frac{\pi}{4}} \\ \text{अभिलंब की प्रवणता} &= \frac{-1}{-\tan \frac{\pi}{4}} \\ &= 1 \end{aligned}$$

Solutions of short questions
(3- Marks)

1 Ans : -

Let r = radius of circle (वृत्त क त्रिज्या)

c = circumference of circle (वृत्त की परिधि)

we know

$$c = 2\pi r$$

d.w.r. to t

$$\frac{dc}{dt} = 2\pi \frac{dr}{dt} \dots\dots\dots(1)$$

given (दिया है)

$$\text{rate of increase of radius} = \frac{dr}{dt} = 0.7 \text{ cm/s}$$

$$\begin{aligned} \therefore \text{equation(1)} &\Rightarrow \frac{dc}{dt} = 2\pi(0.7) \\ &= 1.4\pi \text{ cm/s} \end{aligned}$$

2 Ans : -

Let r = radius of balloon (गुब्बारे की त्रिज्या)

v = volume of balloon (गुब्बारे की आयतन)

we know

$$v = \frac{4}{3} \pi r^3$$

d.w.r. to r

$$\frac{dv}{dr} = 4\pi r^2$$

at $r = 10 \text{ cm} \Rightarrow$

$$\begin{aligned} \left. \frac{dv}{dr} \right]_{r=10 \text{ cm}} &= 4\pi(10)^2 \\ &= 400\pi \text{ cm}^3/\text{cm} \end{aligned}$$

3 Ans : -

Given $f(x) = 2x^2 - 3x$

d.w.r. to x

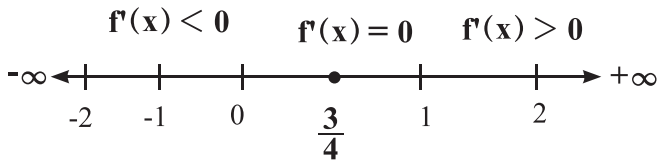
$$f'(x) = 4x - 3$$

for critical points -

$$f'(x) = 0$$

$$\Rightarrow 4x - 3 = 0 \Rightarrow 4x = 3$$

$$\Rightarrow x = \frac{3}{4}$$



Clearly $f(x)$ is strictly increasing on $(\frac{3}{4}, \infty)$
 $(\frac{3}{4}, \infty)$ अन्तराल पर $f(x)$ निरंतर वर्धमान है।
 and $f(x)$ is strictly decreasing on $(-\infty, \frac{3}{4})$
 $(-\infty, \frac{3}{4})$ अन्तराल पर $f(x)$ निरंतर ह्रासमान है।

4 Ans :-

Let $f(x) = \log x \Rightarrow f'(x) = \frac{1}{x}$
 when $x \in (0, \infty)$, $f'(x) > 0$
 $\therefore f(x)$ is strictly increasing in $(0, \infty)$
 $(0, \infty)$ पर $f(x)$ निरंतर वर्धमान है।

5 Ans :-

Given curve $y = \frac{1}{x-1}$, $x \neq 1$ (1)

d.w.r. to x
 $\frac{dy}{dx} = \frac{-1}{(x-1)^2}$

$$\Rightarrow -1 = \frac{-1}{(x-1)^2} \left\{ \because \frac{dy}{dx} = \text{slope} = -1 \right\}$$

$$\Rightarrow (x-1)^2 = 1$$

$$\Rightarrow x^2 - 2x + 1 - 1 = 0$$

$$\Rightarrow x(x-2) = 0$$

$$\Rightarrow x = 0, 2$$

When $x = 0 \Rightarrow$

from equation(1) \Rightarrow

$$y = \frac{1}{0-1}$$

$$y = -1$$

point = (x, y)

$$= (0, -1)$$

equation of tangent at $(0, -1)$

$$y - y_1 = m(x - x_1)$$

$$y + 1 = -1(x - 0)$$

$$x + y + 1 = 0$$

When $x = 2 \Rightarrow$

from equation(1) \Rightarrow

$$y = \frac{1}{2-1}$$

$$y = 1$$

point = (x, y)

$$= (2, 1)$$

equation of tangent at $(2, 1)$

$$y - y_1 = m(x - x_1)$$

$$y - 1 = -1(x - 2)$$

$$y - 1 = -x + 2$$

$$x + y - 3 = 0$$

6 Ans.

Given curve (दिया गया वक्र)

$$ay^2 = x^3 \text{(1)}$$

d.w.r. to x

$$2ay \frac{dy}{dx} = 3x^2$$

$$\Rightarrow \frac{dy}{dx} = \frac{3x^2}{2ay}$$

at (am^2, am^3)

slope of tangent = $\left. \frac{dy}{dx} \right|_{(am^2, am^3)}$
 (स्पर्श रेखा का ढाल)

$$= \frac{3(am^2)^2}{2a(am^3)^2} = \frac{3m}{2}$$

Equation of normal at (am^2, am^3)

(am^2, am^3) पर अभिलंब का समीकरण

$$y - am^3 = \frac{-1}{\frac{3m}{2}}(x - am^2)$$

$$\Rightarrow y - am^3 = \frac{-2}{3m}(x - am^2)$$

$$\Rightarrow 3my - 3am^4 = -2x + 2am^2$$

$$\Rightarrow 2x + 3my - 3am^4 - 2am^2 = 0$$

7 Ans :-

Given function (दिया गया फलन)

$$f(x) = 9x^2 + 12x + 2 \text{(1)}$$

$$= 9x^2 + 6x + 6x + 4 - 2$$

$$= (3x)^2 + 2 \cdot 3x \cdot 2 + (2)^2 - 2$$

$$f(x) = (3x + 2)^2 - 2 \text{(2)}$$

clearly,

$$(3x + 2)^2 \geq 0$$

$$(3x + 2)^2 - 2 \geq -2$$

For minimum (न्यूनतम के लिए)

$$3x + 2 = 0$$

$$\Rightarrow x = -\frac{2}{3}$$

\(\therefore\) minimum value of f (f का न्यूनतम मान)

$$f\left(-\frac{2}{3}\right) = \left(3 \times -\frac{2}{3} + 2\right)^2 - 2$$

$$= (-2 + 2)^2 - 2$$

$$= 0^2 - 2$$

$$= -2$$

$$\therefore f(x) \geq -2 \forall x$$

\(\therefore\) f(x) has no maximum value.

f(x) का महत्तम मान नहीं है।

8 Ans :-

Given

$$p(x) = 41 - 72x - 18x^2 \dots\dots\dots(1)$$

$$\frac{dp}{dx} = -72 - 36x \dots\dots\dots(2)$$

$$\frac{d^2p}{dx^2} = -36 \dots\dots\dots(3)$$

For critical point -

$$\frac{dp}{dx} = 0$$

$$\Rightarrow -72 - 36x = 0$$

$$\Rightarrow 36x = -72$$

$$\Rightarrow x = -2$$

$$\text{equation(3)} \Rightarrow \left. \frac{d^2p}{dx^2} \right|_{x=-2} = -36 = -ve$$

Maximum value at x = -2

x = -2 पर महत्तम मान है।

$$\text{equation(1)} \Rightarrow p(-2) = 41 - 72(-2) - 18(-2)^2$$

$$= 41 + 144 - 72$$

$$= 113$$

Solutions of long questions
(5- Marks)

1 Ans :-

Let one number = x

other number = 24 - x

Function (फलन)

y = product of two numbers

(दो संख्याओं का गुणा)

$$y = x \cdot (24 - x) \dots\dots\dots(1)$$

$$\frac{dy}{dx} = 24 - 2x \dots\dots\dots(2)$$

$$\frac{d^2y}{dx^2} = -2 \dots\dots(3)$$

For critical point

$$\frac{dy}{dx} = 0$$

$$\Rightarrow 24 - 2x = 0$$

$$\Rightarrow x = 12$$

$$\text{equation(3)} \Rightarrow \left. \frac{d^2y}{dx^2} \right|_{x=12} = -2 (-ve)$$

\(\therefore\) y is maximum at x = 12

clearly

one number = x = 12

other number = 24 - x = 24 - 12 = 12

\(\therefore\) The numbers = 12 and 12

2 Ans ;

Let EBCD be a rectangle inscribed

in a circle of radius r and centre o.

(माना EBCD वृत्त के अन्तर्गत एक आयत है

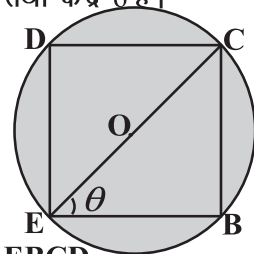
और वृत्त की त्रिज्या r तथा केंद्र o है।

Let \(\angle CEB = \theta\)

Then

$$EC = 2r, \quad EB = 2r \cos \theta$$

$$\text{and } BC = 2r \sin \theta$$



Let A = area of rectangle EBCD

आयत EBCD का क्षेत्रफल

$$A = EB \times BC$$

$$A = 2r \cos \theta \times 2r \sin \theta$$

$$A = 4r^2 \cos \theta \cdot \sin \theta$$

$$A = 2r^2 \sin 2\theta \dots\dots\dots(1) (\because r = \text{constant})$$

$$\frac{dA}{d\theta} = 4r^2 \cos 2\theta \dots\dots\dots(2)$$

$$\frac{d^2A}{d\theta^2} = -8r^2 \sin 2\theta \dots\dots\dots(3)$$

For critical points \(\Rightarrow \frac{dA}{d\theta} = 0\)

$$\Rightarrow 4r^2 \cos 2\theta = 0$$

$$\Rightarrow \cos 2\theta = 0$$

$$\Rightarrow 2\theta = \frac{\pi}{2} \Rightarrow \theta = \frac{\pi}{4}$$

$$\text{equation(3)} \Rightarrow \left. \frac{d^2A}{d\theta^2} \right|_{\theta=\frac{\pi}{4}} = -8r^2 (-ve) \quad [\text{maximum}]$$

$$\therefore EB = 2r \cos \theta = 2r \cdot \cos \frac{\pi}{4} = 2r \times \frac{1}{\sqrt{2}} = \sqrt{2} r$$

$$BC = 2r \sin \theta = 2r \cdot \sin \frac{\pi}{4} = 2r \times \frac{1}{\sqrt{2}} = \sqrt{2} r$$

$$\therefore EB = BC$$

\therefore EBCD is a square Proved

3 Ans : -

Given

$$f(x) = 3x^4 - 8x^3 + 12x^2 - 48x + 25 \dots\dots(1)$$

d.w.r. to x

$$f'(x) = 12x^3 - 24x^2 + 24x - 48 \dots\dots(2)$$

$$f''(x) = 36x^2 - 48x + 24 \dots\dots(3)$$

For critical points -

$$f'(x) = 0$$

$$\Rightarrow 12x^3 - 24x^2 + 24x - 48 = 0$$

$$\Rightarrow 12(x^3 - 2x^2 + 2x - 4) = 0$$

$$\Rightarrow 12[x^2(x-2) + 2(x-2)] = 0$$

$$\Rightarrow (x^2 + 2)(x-2) = 0$$

$$x^2 + 2 = 0$$

$$x^2 = -2$$

$$x = \sqrt{-2} \notin [0, 3]$$

or

$$x - 2 = 0 \in [0, 3]$$

$$x = 2$$

$$\therefore x = 2$$

$$\text{equation(3)} \Rightarrow f''(2) = 36(2)^2 - 48(2) + 24$$

$$= 144 - 96 + 24$$

$$= 72 (+ve)$$

So, $x = 2$ is a point of local minima

$$\text{Now equation(1)} \Rightarrow f(2) = -39$$

$$f(0) = 25$$

$$f(3) = 16$$

$$\therefore \text{Maximum value of } f(x) = 25 \text{ at } x = 0 \in [0, 3]$$

$$\therefore \text{Minimum value of } f(x) = -39 \text{ at } x = 2 \in [0, 3]$$

4 Ans ; -

Given

$$y = \frac{4 \sin \theta}{2 + \cos \theta} - \theta \dots\dots(1)$$

d.w.r. to θ

$$\frac{dy}{d\theta} = \frac{d}{d\theta} \left[\frac{4 \sin \theta}{2 + \cos \theta} \right] - \frac{d\theta}{d\theta}$$

$$= \frac{(2 + \cos \theta) \frac{d}{d\theta} (4 \sin \theta) - 4 \sin \theta \frac{d(2 + \cos \theta)}{d\theta}}{(2 + \cos \theta)^2} - 1$$

$$= \frac{(2 + \cos \theta) \cdot 4 \cos \theta - 4 \sin \theta \cdot (0 - \sin \theta)}{(2 + \cos \theta)^2} - 1$$

$$= \frac{8 \cos \theta + 4 \cos^2 \theta + 4 \sin^2 \theta}{(2 + \cos \theta)^2} - 1$$

$$= \frac{8 \cos \theta + 4}{(2 + \cos \theta)^2} - 1$$

$$= \frac{8 \cos \theta + 4 - 4 - \cos^2 \theta - 4 \cos \theta}{(2 + \cos \theta)^2}$$

$$= \frac{4 \cos \theta - \cos^2 \theta}{(2 + \cos \theta)^2}$$

$$\frac{dy}{d\theta} = \frac{\cos \theta \cdot (4 - \cos \theta)}{(2 + \cos \theta)^2}$$

$$\text{In } \left[0, \frac{\pi}{2} \right], \cos \theta > 0 \Rightarrow -\cos \theta < 0 \Rightarrow 4 - \cos \theta > 0$$

$$\therefore \cos \theta (4 - \cos \theta) \geq 0 \text{ and } (2 + \cos \theta)^2 > 0$$

$$\Rightarrow \frac{\cos \theta (4 - \cos \theta)}{(2 + \cos \theta)^2} \geq 0 \Rightarrow \frac{dy}{d\theta} \geq 0$$

So, y is increasing on $\left[0, \frac{\pi}{2} \right]$

5 Ans : -

Given

$$\frac{x^2}{9} + \frac{y^2}{16} = 1 \dots\dots(1)$$

d.w.r. to x

$$\frac{2x}{9} + \frac{2y}{16} \cdot \frac{dy}{dx} = 0$$

$$\Rightarrow \frac{2y}{16} \frac{dy}{dx} = -\frac{2x}{9}$$

$$\Rightarrow \frac{dy}{dx} = -\frac{16x}{9y} \dots\dots(2)$$

(a) tangent is parallel to x - axis

स्पर्श रेखा x-अक्ष के समान्तर है

$$\therefore \frac{dy}{dx} = 0 \Rightarrow -\frac{16x}{9y} = 0$$

$$\therefore x = 0$$

$$\text{equation(1)} \Rightarrow 0 + \frac{y^2}{16} = 1$$

$$y^2 = 16$$

$$y = \pm 4$$

$$\therefore \text{points (बिन्दुएँ)} = (x, y) = (0, \pm 4)$$

(b) tangent is parallel to y - axis

स्पर्श रेखा y-अक्ष के समान्तर है

$$\frac{dx}{dy} = 0 \Rightarrow -\frac{9y}{16x} = 0$$

$$\therefore y = 0$$

$$\text{equation(1)} \Rightarrow \frac{x^2}{9} + 0 = 1 \Rightarrow x^2 = 9$$

$$\Rightarrow x = \pm 3$$

$$\text{points (बिन्दुएँ)} = (x, y) = (\pm 3, 0)$$

6 Ans ; -

Let

r = radius of cylinder
बेलन की त्रिज्या

h = height of cylinder
बेलन की ऊँचाई

s = surface area of cylinder
बेलन का पृष्ठीय क्षेत्रफल

v = volume of cylinder बेलन का आयतन

we know

$$s = 2\pi r^2 + 2\pi rh$$

$$2\pi rh = s - 2\pi r^2 \quad \therefore h = \frac{s - 2\pi r^2}{2\pi r} \dots\dots(1)$$

and (और)

$$v = \pi r^2 h$$

$$v = \pi r^2 \left(\frac{s - 2\pi r^2}{2\pi r} \right) \quad \{\text{By (1)}\}$$

$$v = \frac{sr}{2} - \pi r^3 \dots\dots(2)$$

d.w.r. to r

$$\frac{dv}{dr} = \frac{s}{2} - 3\pi r^2 \dots\dots(3)$$

$$\frac{d^2v}{dr^2} = -6\pi r \dots\dots(4)$$

For critical point -

$$\frac{dv}{dr} = 0$$

$$\Rightarrow \frac{s}{2} - 3\pi r^2 = 0$$

$$\Rightarrow r^2 = \frac{s}{6\pi}$$

$$\Rightarrow r = \sqrt{\frac{s}{6\pi}}$$

from equation(4)

$$\left. \frac{d^2v}{dr^2} \right|_{r=\sqrt{\frac{s}{6\pi}}} = -6\pi \sqrt{\frac{s}{6\pi}} \quad (-ve)$$

\therefore volume will be maximum

$$\text{Now } r^2 = \frac{s}{6\pi}$$

$$s = 6\pi r^2$$

from equation(1)

$$\Rightarrow h = \frac{6\pi r^2 - 2\pi r^2}{2\pi r}$$

$$\Rightarrow h = \frac{4\pi r^2}{2\pi r}$$

$$\Rightarrow h = 2r$$

clearly height of cylinder is equal to diameter.

स्पष्ट है, बेलन की ऊँचाई व्यास के बराबर है।

7 Ans :-

$$f(x) = \sin x + \cos x, \quad x \in [0, \pi] \dots\dots(1)$$

d.w.r. to x

$$f'(x) = \cos x - \sin x$$

For critical point -

$$f'(x) = 0$$

$$\cos x - \sin x = 0$$

$$\tan x = 1 \quad \therefore x = \frac{\pi}{4} \in [0, \pi]$$

Now equation(1) \Rightarrow

$$\begin{aligned} \text{at } x = \frac{\pi}{4} \Rightarrow f\left(\frac{\pi}{4}\right) &= \sin \frac{\pi}{4} + \cos \frac{\pi}{4} \\ &= \frac{1}{\sqrt{2}} + \frac{1}{\sqrt{2}} = \frac{2}{\sqrt{2}} = \sqrt{2} \end{aligned}$$

$$\text{at } x = 0 \Rightarrow f(0) = \sin 0 + \cos 0 = 0 + 1 = 1$$

$$\text{at } x = \pi \Rightarrow f(\pi) = \sin \pi + \cos \pi = 0 - 1 = -1$$

$$\therefore \text{absolute maximum value} = \sqrt{2} \text{ at } x = \frac{\pi}{4}$$

$$\text{निरपेक्ष महत्तम मान} = \sqrt{2}; \quad x = \frac{\pi}{4}$$

$$\therefore \text{absolute minimum value} = -1 \text{ at } x = \pi$$

$$\text{निरपेक्ष निम्नतम मान} = -1; \quad x = \pi$$

MCQ :

1. $\int \sin 2x \, dx$ is equal to (बराबर हैं)

- a) $2\cos 2x + c$ b) $\frac{1}{2} \cos 2x + c$
c) $-\frac{1}{2} \cos 2x + c$ d) $\cos 2x + c$

2. $\int (\sqrt{x} + \frac{1}{\sqrt{x}}) \, dx$ is equal to (बराबर हैं)

- a) $\frac{1}{3}x^{\frac{1}{3}} + 2x^{\frac{1}{2}} + c$ b) $\frac{2}{3}x^{\frac{2}{3}} + \frac{1}{2}x^2 + c$
c) $\frac{2}{3}x^{\frac{3}{2}} + 2x^{\frac{1}{2}} + c$ d) $\frac{3}{2}x^{\frac{3}{2}} + \frac{1}{2}x^{\frac{1}{2}} + c$

3. $\int \cot x \, dx =$

- a) $\log |\sin x| + c$ b) $\log |\cos x| + c$
c) $\log |\sec x| + c$ d) None of these
(इनमें से कोई नहीं)

4. $\int \frac{dx}{\sin^2 x \cos^2 x} =$

- a) $\tan x + \cot x + c$
b) $\tan x - \cot x + c$
c) $\tan x \cdot \cot x + c$
d) $\tan x - \cot 2x + c$

5. $\int \frac{10x^9 + 10^x \log_e 10}{x^{10} + 10^x} \, dx$ equals (बराबर है)

- a) $10^x - x^{10} + c$ b) $10^x + x^{10} + c$
c) $(10^x - x^{10})^{-1} + c$ d) $\log(10^x + x^{10}) + c$

6. $\int \frac{\sin^2 x - \cos^2 x}{\sin^2 x \cos^2 x} \, dx$ is equal to (बराबर है)

- a) $\tan x + \cot x + c$
b) $\tan x + \operatorname{cosec} x + c$
c) $-\tan x + \cot x + c$
d) $\tan x + \sec x + c$

7. $\int \frac{e^x(1+x)}{\cos^2(e^x)} \, dx =$

- a) $-\cot(e^x) + c$ b) $\tan(xe^x) + c$
c) $\tan(e^x) + c$ d) $\cot(e^x) + c$

8. $\int \frac{dx}{x^2 + 2x + 2}$ equals (बराबर है)

- a) $x \tan^{-1}(x+1) + c$
b) $\tan^{-1}(x+1) + c$
c) $(x+1) \tan^{-1} x + c$
d) $\tan^{-1} x + c$

9. $\int \frac{dx}{\sqrt{9x - 4x^2}}$ equals (बराबर है)

- a) $\frac{1}{9} \sin^{-1} \left(\frac{9x-8}{8} \right) + c$
b) $\frac{1}{2} \sin^{-1} \left(\frac{8x-9}{9} \right) + c$
c) $\frac{1}{3} \sin^{-1} \left(\frac{9x-8}{8} \right) + c$
d) $\frac{1}{2} \sin^{-1} \left(\frac{9x-8}{9} \right) + c$

10. $\int \frac{x \, dx}{(x-1)(x-2)}$ equals (बराबर हैं)

- a) $\log \left| \frac{(x-1)^2}{x-2} \right| + c$
b) $\log \left| \frac{(x-2)^2}{x-1} \right| + c$
c) $\log \left| \left(\frac{x-1}{x-2} \right)^2 \right| + c$
d) $\log |(x-1)(x-2)| + c$

11. $\int \frac{dx}{x(x^2+1)}$ equals (बराबर है)

- a) $\log |x| - \frac{1}{2} \log(x^2+1) + c$
b) $\log |x| + \frac{1}{2} \log(x^2+1) + c$
c) $-\log |x| + \frac{1}{2} \log(x^2+1) + c$
d) $\frac{1}{2} \log |x| + \log(x^2+1) + c$

12. $\int x^2 e^{x^3} \, dx$ equals (बराबर है)

- a) $\frac{1}{3} e^{x^3} + c$
b) $\frac{1}{3} e^{x^2} + c$
c) $\frac{1}{2} e^{x^3} + c$
d) $\frac{1}{2} e^{x^2} + c$

13. $\int e^x \sec x (1 + \tan x) \, dx =$

- a) $e^x \cos x + c$ b) $e^x \sec x + c$
 c) $e^x \sin x + c$ d) $e^x \tan x + c$

14. $\int \sqrt{1+x^2} dx$ is equal to (बराबर है)

- a) $\frac{x}{2}\sqrt{1+x^2} + \frac{1}{2}\log|x + \sqrt{1+x^2}| + c$
 b) $\frac{2}{3}(1+x^2)^{\frac{3}{2}} + c$
 c) $\frac{2}{3}x(1+x^2)^{\frac{3}{2}} + c$
 d) $\frac{x^2}{2}\sqrt{1+x^2} + \frac{1}{2}\log|x + \sqrt{1+x^2}| + c$

15. $\int \frac{1}{x+\sqrt{x}} dx$ is equal to (बराबर है)

- a) $\log|x| + \log(1+\sqrt{x}) + c$
 b) $2\log(1+\sqrt{x}) + c$
 c) $\log(1+\sqrt{x}) + c$
 d) $\log|x| + c$

16. $\int \frac{x^4+1}{x^2+1} dx =$

- a) $\frac{x^3}{3} + x + \tan^{-1}x + c$
 b) $\frac{x^3}{3} - x + \tan^{-1}x + c$
 c) $\frac{x^3}{3} + x + 2\tan^{-1}x + c$
 d) $\frac{x^3}{3} - x + 2\tan^{-1}x + c$

17. $\int \frac{dx}{e^x+e^{-x}}$ is equal to (बराबर है)

- a) $\tan^{-1}(e^x) + c$
 b) $\tan^{-1}(e^{-x}) + c$
 c) $\log(e^x - e^{-x}) + c$
 d) $\log(e^x + e^{-x}) + c$

18. $\int \frac{\cos 2x}{(\sin x + \cos x)^2} dx =$

- a) $\frac{-1}{\sin x + \cos x} + c$
 b) $\log|\sin x + \cos x| + c$
 c) $\log|\sin x - \cos x| + c$
 d) $\frac{1}{(\sin x + \cos x)^2} + c$

19. $\int \frac{e^x}{e^{2x}+1} dx$ is equal to (बराबर है)

- a) $\log(e^x + e^{-x}) + c$ b) $\tan^{-1}e^x + c$
 c) $\log(e^{2x} + 1) + c$ d) $\tan^{-1}(2e^x) + c$

20. $\int \cos \sqrt{x} dx$ equals (बराबर है)

- a) $\sqrt{x} \sin \sqrt{x} + \cos \sqrt{x} + c$
 b) $\sqrt{x} \sin \sqrt{x} - \cos \sqrt{x} + c$
 c) $\frac{1}{2}[\sqrt{x} \sin \sqrt{x} + \cos \sqrt{x}] + c$
 d) $2[\sqrt{x} \sin \sqrt{x} + \cos \sqrt{x}] + c$

21. $\int e^x(1 + \tan x + \tan^2 x) dx =$

- a) $e^x \cos x + c$ b) $e^x \sin x + c$
 c) $e^x \tan x + c$ d) $e^x \sec x + c$

22. $\int \frac{dx}{1+x^2} =$

- a) $\sin^{-1}x + c$ b) $\tan^{-1}x + c$
 c) $\log(1+x^2) + c$ d) $\cot^{-1}x + c$

23. $\int \frac{\cos 2x + 2\sin^2 x}{\cos^2 x} dx =$

- a) $\tan x + c$ b) $\cot x + c$
 c) $\sin x + c$ d) $\cos x + c$

24. $\int \frac{dx}{\sqrt{1-x^2}}$ equals (बराबर है)

- a) $\cos^{-1}x + c$
 b) $-\sin^{-1}x + c$
 c) $\sin^{-1}x + c$
 d) $\tan^{-1}x + c$

25. $\int e^x(\sin x + \cos x) dx =$

- a) $e^x \sin x + c$ b) $e^x \cos x + c$
 c) $e^x \tan x + c$ d) $\frac{e^x}{\sin x} + C$

26. $\int \frac{\sec^2 x}{\operatorname{cosec}^2 x} dx =$

- a) $\cot x + x + c$ b) $\cot x - x + c$
 c) $\tan x - x + c$ d) $\tan x + c$

27. $\int \frac{2}{\sqrt{1-4x^2}} dx =$

- a) $\tan^{-1}(2x) + c$ b) $\cot^{-1}(2x) + c$
 c) $\cos^{-1}(2x) + c$ d) $\sin^{-1}(2x) + c$

28. $\int_{-\pi/2}^{\pi/2} \sin^9 x dx =$

- a) -1 b) 0
 c) 1 c) None of these/
 (इनमें से कोई नहीं)

29. $\int_0^p \frac{\sqrt{x}}{\sqrt{x} + \sqrt{p-x}} dx =$

- a) p b) p/2
c) 2p d) none of these/
(इनमें से कोई नहीं)

30. $\int_1^{\sqrt{3}} \frac{dx}{1+x^2}$ equals (बराबर है)

- a) $\frac{\pi}{3}$ b) $\frac{2\pi}{3}$
c) $\frac{\pi}{6}$ d) $\frac{\pi}{12}$

31. $\int_0^{2/3} \frac{dx}{4+9x^2}$ equals (बराबर है)

- a) $\frac{\pi}{6}$ b) $\frac{\pi}{12}$
c) $\frac{\pi}{24}$ d) $\frac{\pi}{4}$

32. $\int_{1/3}^1 \frac{(x-x^3)^{1/3}}{x^4} dx$, is equal to (बराबर है)

- a) 6 b) 0
c) 3 d) 4

33. $\int_{-\pi/2}^{\pi/2} (x^3 + x \cos x + \tan^5 x + 1) dx =$

- a) 0 b) 2
c) π d) 1

34. $\int_0^{\pi/2} \log(4+3\sin x) dx =$

- a) 2 b) $\frac{3}{4}$
c) 0 d) -2

35. $\int_0^1 \tan^{-1}\left(\frac{2x-1}{1+x-x^2}\right) dx =$

- a) 1 b) 0
c) -1 d) $\frac{\pi}{4}$

36. $\int_0^1 \sqrt{x(1-x)} dx =$

- a) $\frac{\pi}{8}$ b) $\frac{\pi}{6}$
c) $\frac{\pi}{4}$ d) $\frac{\pi}{2}$

37. $\int_1^{\sqrt{3}} \frac{1}{1+x^2} dx =$

- a) $\frac{\pi}{3}$ b) $\frac{\pi}{4}$
c) $\frac{\pi}{6}$ d) $\frac{\pi}{12}$

38. $\int_0^1 e^x dx =$

- a) e - 1 b) $\frac{e-1}{e}$
c) $\frac{e^2-1}{e}$ d) $\frac{e^2-1}{2}$

39. $\int_0^{1/2} \frac{dx}{\sqrt{1-x^2}} =$

- a) $\frac{\pi}{6}$ b) $\frac{\pi}{3}$
c) $\frac{\pi}{2}$ d) None of these/
(इनमें से कोई नहीं)

40. $\int_0^1 \frac{x}{1+x} dx =$

- a) 1-log2 b) 2
c) 1+log2 d) log2

ANSWER

- | | |
|-------|-------|
| 1. c | 21. c |
| 2. c | 22. b |
| 3. a | 23. a |
| 4. b | 24. c |
| 5. d | 25. a |
| 6. a | 26. c |
| 7. b | 27. d |
| 8. b | 28. b |
| 9. b | 29. b |
| 10. b | 30. d |
| 11. a | 31. c |
| 12. a | 32. d |
| 13. b | 33. c |
| 14. a | 34. c |
| 15. b | 35. b |
| 16. d | 36. a |
| 17. a | 37. d |
| 18. b | 38. a |
| 19. b | 39. a |
| 20. d | 40. a |

INTEGRALS (02 MARKS)

EVALUATE (मान निकाले)

1) $\int \tan x \, dx$

2) $\int \sec x \, dx$

3) $\int \operatorname{cosec} x \, dx$

4) $\int \left(\sqrt{x} - \frac{1}{\sqrt{x}} \right)^2 dx$

5) $\int \frac{x^3 - x^2 + x - 1}{x - 1} dx$

6) $\int (1 - x)\sqrt{x} \, dx$

7) $\int \frac{2 - 3 \sin x}{\cos^2 x} dx$

8) $\int \frac{\sin(\tan^{-1} x)}{1 + x^2} dx$

9) $\int \sin^3 x \cos^2 x \, dx$

10) $\int \frac{1}{1 + \tan x} dx$

11) $\int \frac{\sin x}{\sin(x + a)} dx$

12) $\int \frac{(\log x)^2}{x} dx$

13) $\int \frac{1}{x + x \log x} dx$

14) $\int (x^3 - 1)^{1/3} x^5 dx$

15) $\int \frac{e^{\tan^{-1} x}}{1 + x^2} dx$

16) $\int \frac{e^{2x} - 1}{e^{2x} + 1} dx$

17) $\int \frac{\sin^{-1} x}{\sqrt{1 - x^2}} dx$

18) $\int \sec^2(7 - 4x) dx$

19) $\int \frac{1}{\cos^2 x (1 - \tan x)^2} dx$

20) $\int \frac{(x + 1)(x + \log x)^2}{x} dx$

21) $\int \frac{1 - \cos x}{1 + \cos x} dx$

22) $\int \frac{\sin^2 x}{1 + \cos x} dx$

23) $\int \frac{\cos 2x + 2 \sin^2 x}{\cos^2 x} dx$

24) $\int \frac{\cos 2x}{(\cos x + \sin x)^2} dx$

25) $\int \frac{3x^2}{x^6 + 1} dx$

26) $\int \frac{x^2}{1 - x^6} dx$

27) $\int \frac{\sec^2 x}{\sqrt{\tan^2 x + 4}} dx$

28) $\int \frac{1}{x^2 - 9} dx$

29) $\int \frac{1}{e^x - 1} dx$

30) $\int \log x \, dx$

31) $\int x e^x \, dx$

32) $\int x \sin x \, dx$

33) $\int \tan^{-1} x \, dx$

34) $\int e^x \left(\frac{1}{x} - \frac{1}{x^2} \right) dx$

$$35. \int \sqrt{4-x^2} dx$$

$$36. \int \sqrt{x^2+4x+1} dx$$

$$37. \int \frac{1}{x-x^2} dx$$

$$38. \int \sqrt{\frac{x}{1-x}} dx$$

$$39. \int \frac{(\sin^{-1}x)^3}{\sqrt{1-x^2}} dx$$

$$40. \int \frac{dx}{1+e^x}$$

DEFINITE INTEGRALS (2 Marks)

$$1. \int_{-1}^1 (x+1) dx$$

$$2. \int_2^3 \frac{1}{x} dx$$

$$3. \int_0^{\pi/2} \cos 2x dx$$

$$4. \int_4^5 e^x dx$$

$$5. \int_0^1 \frac{dx}{\sqrt{1-x^2}}$$

$$6. \int_2^3 \frac{dx}{x^2-1}$$

$$7. \int_0^{\pi/2} \cos^2 x dx$$

$$8. \int_2^3 \frac{x}{x^2+1} dx$$

$$9. \int_0^1 \frac{\tan^{-1}x}{1+x^2} dx$$

$$10. \int_{-\pi/4}^{\pi/4} \sin^2 x dx$$

$$11. \int_0^1 x(1-x)^n dx$$

$$12. \int_{-1}^1 e^x dx$$

INDEFINITE INTEGRATION (3 MARKS)

EVALUATE (मान निकाले)

$$1. \int (5x+3)\sqrt{2x-1} dx$$

$$2. \int \frac{x(x+3)}{x+5} dx$$

$$3. \int \sin^4 x dx$$

$$4. \int \frac{\cos 2x - \cos 2\alpha}{\cos x - \cos \alpha} dx$$

$$5. \int \tan^4 x dx$$

$$6. \int \tan^3 x dx$$

$$7. \int \frac{dx}{x^2-a^2}$$

$$8. \int \frac{dx}{a^2-x^2}$$

$$9. \int \frac{dx}{x^2+a^2}$$

$$10. \int \frac{dx}{\sqrt{x^2-a^2}}$$

$$11. \int \frac{dx}{\sqrt{a^2-x^2}}$$

$$12. \int \frac{dx}{\sqrt{x^2+a^2}}$$

$$13. \int \frac{dx}{x^2-6x+13}$$

$$14. \int \frac{x+3}{\sqrt{5-4x-x^2}} dx$$

$$15. \int \frac{x+2}{\sqrt{x^2-1}} dx$$

$$16. \int \frac{x}{(x-1)(x-2)(x-3)} dx$$

$$17. \int e^x \sin x dx$$

$$18. \int x \sin^{-1} x dx$$

$$19. \int \frac{(x^2+1)e^x}{(x+1)^2} dx$$

$$20. \int \sin^{-1} \left(\frac{2x}{1+x^2} \right) dx$$

$$21. \int \sqrt{x^2 + 2x + 5} dx$$

$$22. \int \sqrt{1 + 3x - x^2} dx$$

$$23. \int \frac{x \sin^{-1} x}{\sqrt{1-x^2}} dx$$

DEFINITE INTEGRALS (03 MARKS)

$$1. \int_0^1 \frac{dx}{(\sqrt{x+1} + \sqrt{x})}$$

$$2. \int_0^{\pi/2} \frac{dx}{1+\sin x}$$

$$3. \int_0^{\pi/2} \frac{\sqrt{\sin x}}{\sqrt{\sin x + \sqrt{\cos x}}} dx$$

$$4. \int_0^1 |x-1| dx$$

$$5. \int_0^{\pi/2} \log \sin x dx$$

$$6. \int_0^{\pi/4} \log(1 + \tan x) dx$$

$$7. \int_0^{2\pi} |\cos x| dx$$

$$8. \int_{\pi/6}^{\pi/3} \frac{dx}{1+\sqrt{\tan x}}$$

$$9. \int_0^{2\pi} \cos^5 x dx$$

$$10. \int_0^{\pi} \frac{x}{1+\sin x} dx$$

$$11. \int_0^{\pi/2} \frac{x}{\sin x + \cos x} dx$$

$$12. \int_{-a}^a \sqrt{\frac{a-x}{a+x}} dx$$

DEFINITE INTEGRALS AS THE
LIMIT OF A SUM (05 MARKS)

EVALUATE THE FOLLOWING DEFINITE
INTEGRALS AS THE LIMIT OF SUM

$$1. \int_0^1 x^2 dx$$

$$2. \int_0^1 e^x dx$$

$$3. \int_0^3 x dx$$

$$4. \int_0^4 (x + e^{2x}) dx$$

SOLUTION OF INTEGRATION(2 MARKS)

$$\begin{aligned}
 1. \quad \text{Let } I &= \int \tan x dx = \int \frac{\sin x}{\cos x} dx \\
 &\text{put } \cos x = t \text{ so that } -\sin x dx = dt \\
 \therefore \sin x dx &= -dt \\
 \int \tan x dx &= -\int \frac{dt}{t} \\
 &= -\log |t| + C \\
 &= -\log |\cos x| + c \\
 &= \log |\sec x| + c \\
 \therefore \int \tan x dx &= -\log |\cos x| + c \\
 &= \log |\sec x| + c
 \end{aligned}$$

2. Let $I = \int \sec x \, dx$
 $= \int \frac{\sec x (\sec x + \tan x)}{\sec x + \tan x} dx$
 put $\sec x + \tan x = t$
 $\sec x (\sec x + \tan x) dx = dt$
 $\therefore I = \int \frac{dt}{t} = \log |t| + c$
 $= \log |\sec x + \tan x| + c$
3. Let $I = \int \operatorname{cosec} x \, dx$
 $= \int \frac{\operatorname{cosec} x (\operatorname{cosec} x - \cot x)}{(\operatorname{cosec} x - \cot x)} dx$
 Put $\operatorname{cosec} x - \cot x = t$
 $\therefore \operatorname{cosec} x (\operatorname{cosec} x - \cot x) dx = dt$
 $\Rightarrow I = \int \frac{dt}{t} = \log |t| + c$
 $= \log |\operatorname{cosec} x - \cot x| + c.$
4. Let $I = \int (\sqrt{x} - \frac{1}{\sqrt{x}})^2 dx = \int (x + \frac{1}{x} - 2) dx$
 $= \int x \, dx + \int \frac{1}{x} dx - \int 2 \, dx$
 $= \frac{x^2}{2} + \log |x| - 2x + c$
5. $I = \int \frac{x^3 - x^2 + x - 1}{x - 1} dx$
 $= \int \frac{x^2(x-1) + 1(x-1)}{x-1} dx$
 $= \int \frac{(x-1)(x^2+1)}{x-1} dx$
 $= \int (x^2 + 1) dx = \frac{x^3}{3} + x + c$
6. $I = \int (1-x)\sqrt{x} \, dx = \int (\sqrt{x} - x\sqrt{x}) dx$
 $= \int x^{1/2} dx - \int x^{3/2} dx$
 $= \frac{x^{1/2+1}}{\frac{1}{2}+1} - \frac{x^{3/2+1}}{\frac{3}{2}+1} + c$
 $= \frac{2}{3}x^{3/2} - \frac{2}{5}x^{5/2} + c$
7. $I = \int \frac{2-3\sin x}{\cos^2 x} dx = \int (\frac{2}{\cos^2 x} - \frac{3\sin x}{\cos^2 x}) dx$
 $= 2 \int \sec^2 x \, dx - 3 \int \sec x \cdot \tan x \, dx$
 $= 2 \tan x - 3 \sec x + c$

8. $I = \int \frac{\sin(\tan^{-1} x)}{1+x^2} dx$
 Put $\tan^{-1} x = t, \therefore \frac{1}{1+x^2} dx = dt$
 $\therefore I = \int \sin t \, dt = -\cos(t) + c$
 $= -\cos(\tan^{-1} x) + c$
9. $I = \int \sin^3 x \cos^2 x \, dx = \int \sin^2 x \cos^2 x \sin x \, dx$
 $= \int (1 - \cos^2 x) \cos^2 x (\sin x) \, dx;$
 put $\cos x = t$
 $\Rightarrow -\sin x dx = dt$
 $\therefore I = -\int (1-t^2)t^2 dt = -\int (t^2 - t^4) dt$
 $= -(\frac{t^3}{3} - \frac{t^5}{5}) + c$
 $= -\frac{1}{3} \cos^3 x + \frac{1}{5} \cos^5 x + c.$
10. $I = \int \frac{1}{1+\tan x} dx = \int \frac{\cos x}{\cos x + \sin x} dx$
 $= \frac{1}{2} \int \frac{2\cos x}{\cos x + \sin x} dx$
 $= \frac{1}{2} \int \frac{\cos x + \sin x + \cos x - \sin x}{\cos x + \sin x} dx$
 $= \frac{1}{2} \int 1 dx + \frac{1}{2} \int \frac{\cos x - \sin x}{\cos x + \sin x} dx$
 $= \frac{1}{2} x + \frac{1}{2} \log |\cos x + \sin x| + c$
11. Let $I = \int \frac{\sin x}{\sin(x+a)} dx$
 put $(x+a) = t \Rightarrow dx = dt$
 $\therefore I = \int \frac{\sin(t-a)}{\sin t} dt$
 $= \int \frac{\sin t \cos a - \cos t \sin a}{\sin t} dt$
 $= \cos a \int dt - \int \sin a \cot t \, dt$
 $= \cos a (t) - \sin a \int \cot t \, dt$
 $= \cos a (t) - \sin a \log |\sin t| + c$
 $= \cos a (x+a) - \sin a \log |\sin(x+a)| + c$
 $= x \cos a + a \cos a - \sin a \log |\sin(x+a)| + c$
12. let $I = \int \frac{(\log x)^2}{x} dx$
 put $\log x = t \Rightarrow \frac{1}{x} dx = dt$
 $\therefore I = \int t^2 dt = \frac{t^3}{3} + c$
 $= \frac{(\log x)^3}{3} + c$

$$13. \quad I = \int \frac{1}{x+x \log x} dx = \int \frac{1}{x(1+\log x)} dx$$

put $1 + \log x = t \Rightarrow \frac{1}{x} dx = dt$

$$\therefore I = \int \frac{dt}{t} = \log |t| + c$$

$$= \log |1 + \log x| + c.$$

$$14. \quad I = \int (x^3 - 1)^{1/3} x^5 dx = \int (x^3 - 1)^{1/3} x^3 x^2 dx$$

put $x^3 - 1 = t \Rightarrow 3x^2 dx = dt \Rightarrow x^2 dx = \frac{1}{3} dt$

$$\therefore I = \frac{1}{3} \int t^{1/3} (t+1) dt = \frac{1}{3} \int (t^{4/3} + t^{1/3}) dt$$

$$= \frac{1}{3} \left[\frac{t^{4/3+1}}{\frac{4}{3}+1} \right] + \frac{1}{3} \left[\frac{t^{1/3+1}}{\frac{1}{3}+1} \right] + c$$

$$= \frac{1}{7} t^{7/3} + \frac{1}{4} t^{4/3} + c$$

$$= \frac{1}{7} (x^3 - 1)^{7/3} + \frac{1}{4} (x^3 - 1)^{4/3} + c$$

$$15. \quad I = \int \frac{e^{\tan^{-1} x}}{1+x^2} dx$$

put $\tan^{-1} x = t \Rightarrow \frac{1}{1+x^2} dx = dt$

$$\therefore I = \int e^t dt = e^t + c$$

$$= e^{\tan^{-1} x} + c$$

$$16. \quad I = \int \frac{e^{2x}-1}{e^{2x}+1} dx = \int \frac{e^{2x}-1}{e^x} / \frac{e^{2x}+1}{e^x} dx$$

$$= \int \frac{e^x - e^{-x}}{e^x + e^{-x}} dx$$

put $e^x + e^{-x} = t \Rightarrow (e^x - e^{-x}) dx = dt$

$$\therefore I = \int \frac{dt}{t} = \log |t| + c = \log |e^x + e^{-x}| + c$$

$$17. \quad I = \int \frac{\sin^{-1} x}{\sqrt{1-x^2}} dx$$

put $\sin^{-1} x = t \Rightarrow \frac{1}{\sqrt{1-x^2}} dx = dt$

$$\therefore I = \int t dt = \frac{t^2}{2} + c = \frac{(\sin^{-1} x)^2}{2} + c$$

$$18. \quad I = \int \sec^2(7-4x) dx$$

put $7-4x = t \Rightarrow -4dx = dt$

$$\therefore dx = -\frac{1}{4} dt$$

$$\therefore I = -\frac{1}{4} \int \sec^2 t dt = -\frac{1}{4} \tan t + c$$

$$= -\frac{1}{4} \tan(7-4x) + c$$

$$19. \quad I = \int \frac{1}{\cos^2 x (1-\tan x)^2} dx = \int \frac{\sec^2 x}{(1-\tan x)^2} dx$$

put $1 - \tan x = t \Rightarrow -\sec^2 x dx = dt$

$$\Rightarrow \sec^2 x dx = -dt$$

$$I = -\int \frac{dt}{t^2} = \frac{1}{t} + c = \frac{1}{(1-\tan x)} + c$$

$$20. \quad I = \int \frac{(x+1)(x+\log x)^2}{x} dx$$

$$= \int \left(\frac{x+1}{x}\right)(x+\log x)^2 dx$$

$$= \int \left(1 + \frac{1}{x}\right)(x+\log x)^2 dx$$

put $x + \log x = t \Rightarrow \left(1 + \frac{1}{x}\right) dx = dt$

$$\therefore I = \int t^2 dt = \frac{t^3}{3} + c = \frac{(x+\log x)^3}{3} + c$$

$$21. \quad I = \int \frac{1-\cos x}{1+\cos x} dx = \int \frac{2\sin^2 \frac{x}{2}}{2\cos^2 \frac{x}{2}} dx$$

$$= \int \tan^2 \frac{x}{2} dx = \int \left(\sec^2 \frac{x}{2} - 1\right) dx$$

$$= \frac{\tan \frac{x}{2}}{1/2} - x + c$$

$$= 2 \tan \frac{x}{2} - x + c$$

$$22. \quad I = \int \frac{\sin^2 x}{1+\cos x} dx = \int \frac{1-\cos^2 x}{1+\cos x} dx$$

$$= \int \frac{(1+\cos x)(1-\cos x)}{1+\cos x} dx = \int (1-\cos x) dx$$

$$= x - \sin x + c$$

$$23. \quad I = \int \frac{\cos 2x + 2\sin^2 x}{\cos^2 x} dx$$

$$= \int \frac{1-2\sin^2 x + 2\sin^2 x}{\cos^2 x} dx = \int \frac{1}{\cos^2 x} dx$$

$$= \int \sec^2 x dx = \tan x + c$$

$$24. \quad I = \int \frac{\cos 2x}{(\cos x + \sin x)^2} dx = \int \frac{\cos^2 x - \sin^2 x}{(\cos x + \sin x)^2} dx$$

$$= \int \frac{(\cos x + \sin x)(\cos x - \sin x)}{(\cos x + \sin x)^2} dx$$

$$= \int \frac{\cos x - \sin x}{\cos x + \sin x} dx$$

$$= \int \frac{1 - \tan x}{1 + \tan x} dx$$

$$= \int \tan\left(\frac{\pi}{4} - x\right) dx$$

$$= \log \left| \cos\left(\frac{\pi}{4} - x\right) \right| + c$$

or,

$$I = \int \frac{\cos 2x}{(\cos x + \sin x)^2} dx = \int \frac{\cos^2 x - \sin^2 x}{(\cos x + \sin x)^2} dx$$

$$= \int \frac{(\cos x + \sin x)(\cos x - \sin x)}{(\cos x + \sin x)^2} dx$$

$$= \int \frac{\cos x - \sin x}{\cos x + \sin x} dx$$

put $\cos x + \sin x = t$

$$\Rightarrow (\cos x - \sin x) dx = dt$$

$$\therefore I = \int \frac{dt}{t} = \log |t| + c$$

$$= \log |\cos x + \sin x| + c$$

$$25. \quad I = \int \frac{3x^2}{x^6+1} dx = \int \frac{3x^2}{(x^3)^2+1} dx$$

put $x^3 = t \Rightarrow 3x^2 dx = dt$

$$\therefore I = \int \frac{dt}{t^2+1} = \tan^{-1}(t) + c$$

$$= \tan^{-1}(x^3) + c$$

$$26. \quad I = \int \frac{x^2}{1-x^6} dx = \int \frac{x^2}{1-(x^3)^2} dx$$

put $x^3 = t \Rightarrow 3x^2 dx = dt$

$$x^2 dx = \frac{1}{3} dt$$

$$\therefore I = \frac{1}{3} \int \frac{dt}{1-t^2} = \frac{1}{3} \int \frac{dt}{(1-t)^2}$$

$$= \frac{1}{3} \times \frac{1}{2} \log \left| \frac{1+t}{1-t} \right| + c$$

$$= \frac{1}{6} \log \left| \frac{1+x^3}{1-x^3} \right| + c$$

$$27. \quad I = \int \frac{\sec^2 x}{\sqrt{\tan^2 x + 4}} dx$$

put $\tan x = t \Rightarrow \sec^2 x dx = dt$

$$\therefore I = \int \frac{dt}{\sqrt{t^2+4}} = \int \frac{dt}{\sqrt{t^2+2^2}}$$

$$= \log |t + \sqrt{t^2+4}| + c$$

$$= \log |\tan x + \sqrt{\tan^2 x + 4}| + c.$$

$$28. \quad I = \int \frac{1}{x^2-9} dx = \int \frac{1}{x^2-3^2} dx$$

$$= \frac{1}{2 \times 3} \log \left| \frac{x-3}{x+3} \right| + c$$

$$= \frac{1}{6} \log \left| \frac{x-3}{x+3} \right| + c.$$

$$29. \quad I = \int \frac{1}{e^x-1} dx$$

put $e^x - 1 = t \Rightarrow e^x dx = dt$

$$\therefore dx = \frac{1}{e^x} dt = \frac{1}{(t+1)} dt$$

$$\therefore I = \int \frac{1}{t(t+1)} dt = \int \frac{t+1-t}{t(t+1)} dt$$

$$= \int \left(\frac{1}{t} - \frac{1}{t+1} \right) dt = \log |t| - \log |t+1| + c$$

$$= \log \left| \frac{t}{t+1} \right| + c = \log \left| \frac{e^x-1}{e^x} \right| + c$$

$$30. \quad I = \int \log x dx = \int \log x \cdot 1 dx$$

$$= \log x \int 1 dx - \int \left[\frac{d}{dx} (\log x) \int 1 dx \right] dx$$

$$= \log x \cdot x - \int \frac{1}{x} \cdot x dx$$

$$= x \log x - \int 1 dx = x \log x - x + c$$

$$= x (\log x - 1) + c$$

$$31. \quad I = \int x e^x dx$$

$$= x \int e^x dx - \int \left[\frac{d}{dx} (x) \int e^x dx \right] dx$$

$$= x e^x - \int 1 \cdot e^x dx$$

$$= x e^x - e^x + c$$

$$= (x-1) e^x + c$$

$$32. \quad I = \int x \sin x dx$$

$$= x \int \sin x dx - \int \left[\frac{d}{dx} (x) \int \sin x dx \right] dx$$

$$= x (-\cos x) - \int 1 \cdot (-\cos x) dx$$

$$= -x \cos x + \int \cos x dx$$

$$= -x \cos x + \sin x + c$$

$$33. \quad I = \int \tan^{-1} x dx = \int (\tan^{-1} x \cdot 1) dx$$

$$= \tan^{-1} x \cdot \int 1 dx - \int \left[\frac{d}{dx} (\tan^{-1} x) \int 1 dx \right] dx$$

$$= x \tan^{-1} x - \int \frac{x}{1+x^2} dx$$

$$= x \tan^{-1} x - \frac{1}{2} \int \frac{2x}{1+x^2} dx$$

$$= x \tan^{-1} x - \frac{1}{2} \log |1+x^2| + c$$

$$34. \quad I = \int e^x \left(\frac{1}{x} - \frac{1}{x^2} \right) dx$$

consider $f(x) = \frac{1}{x}$, then $f'(x) = -\frac{1}{x^2}$

thus the given integrand is of the form $e^x [f(x) + f'(x)]$.

$$\therefore I = \int e^x \left(\frac{1}{x} - \frac{1}{x^2} \right) dx = e^x \cdot \frac{1}{x} + c$$

$$\therefore I = \frac{e^x}{x} + c.$$

$$35. \quad I = \int \sqrt{4-x^2} dx$$

$$= \int \sqrt{2^2-x^2} dx$$

$$= \frac{x}{2} \sqrt{2^2-x^2} + \frac{2^2}{2} \sin^{-1} \frac{x}{2} + c$$

$$= \frac{x}{2} \sqrt{4-x^2} + 2 \sin^{-1} \frac{x}{2} + c$$

$$36. \quad I = \int \sqrt{x^2+4x+1} dx$$

$$= \int \sqrt{x^2+4x+4-4+1} dx$$

$$= \int \sqrt{(x+2)^2-3} dx$$

$$= \int \sqrt{(x+2)^2-(\sqrt{3})^2} dx$$

$$= \frac{x+2}{2} \sqrt{(x+2)^2-(\sqrt{3})^2} - \frac{3}{2} \log |(x+2) + \sqrt{x^2+4x+1}| + c$$

$$= \frac{x+2}{2} \sqrt{x^2+4x+1} - \frac{3}{2} \log |(x+2) + \sqrt{x^2+4x+1}| + c$$

$$\begin{aligned}
 37. \quad I &= \int \frac{1}{x-x^2} dx = \int \frac{1}{x(1-x)} dx \\
 &= \int \left(\frac{1}{x} + \frac{1}{1-x} \right) dx \\
 &= \log|x| - \log|1-x| + c \\
 &= \log \left| \frac{x}{1-x} \right| + c
 \end{aligned}$$

$$\begin{aligned}
 38. \quad I &= \int \sqrt{\frac{x}{1-x}} dx \\
 &\text{put } x = \sin^2 t \\
 &dx = 2 \sin t \cos t dt \\
 &= \int \sqrt{\frac{\sin^2 t}{1-\sin^2 t}} \cdot 2 \sin t \cos t dt \\
 &= \int \frac{\sin t}{\cos t} \cdot 2 \sin t \cos t dt \\
 &= \int 2 \sin^2 t dt \\
 &= \int (1 - \cos 2t) dt = t - \frac{\sin 2t}{2} + c \\
 &= t - \frac{2 \sin t \cdot \cos t}{2} + c \\
 &= t - \sin t \cdot \cos t + c \\
 &= \sin^{-1} \sqrt{x} - \sqrt{x} \cdot \sqrt{1-x} + c
 \end{aligned}$$

$$\begin{aligned}
 39. \quad I &= \int \frac{(\sin^{-1} x)^3}{\sqrt{1-x^2}} dx \\
 &\text{put } \sin^{-1} x = t \\
 &\therefore \frac{1}{\sqrt{1-x^2}} dx = dt \\
 \therefore I &= \int t^3 dt = \frac{t^4}{4} + c \\
 &= \frac{(\sin^{-1} x)^4}{4} + c
 \end{aligned}$$

$$\begin{aligned}
 40. \quad I &= \int \frac{1}{1+e^x} dx \\
 &\text{put } 1 + e^x = t \Rightarrow e^x dx = dt \\
 &\Rightarrow dx = \frac{1}{e^x} dt \\
 &\Rightarrow dx = \frac{1}{t-1} dt \\
 \therefore I &= \int \frac{1}{t(t-1)} dt = \int \left(\frac{1}{t-1} - \frac{1}{t} \right) dt \\
 &= \log|t-1| - \log|t| + c \\
 &= \log \left| \frac{t-1}{t} \right| + c \\
 &= \log \left| \frac{e^x}{1+e^x} \right| + c
 \end{aligned}$$

$$\begin{aligned}
 1. \quad I &= \int_{-1}^1 (x+1) dx = \left[\frac{x^2}{2} + x \right]_{-1}^1 \\
 &= \frac{1}{2} [(1)^2 - (-1)^2] + [1 - (-1)] \\
 &= \frac{1}{2} (1-1) + (1+1) \\
 &= \frac{1}{2} \times 0 + 2 = 2
 \end{aligned}$$

$$\begin{aligned}
 2. \quad I &= \int_2^3 \frac{1}{x} dx = [\log x]_2^3 \\
 &= (\log 3 - \log 2) \\
 &= \log \frac{3}{2}
 \end{aligned}$$

$$\begin{aligned}
 3. \quad I &= \int_0^{\pi/2} \cos x dx = [\sin x]_0^{\pi/2} \\
 &= \sin \frac{\pi}{2} - \sin 0 = 1 - 0 = 1
 \end{aligned}$$

$$\begin{aligned}
 4. \quad I &= \int_4^5 e^x dx = [e^x]_4^5 \\
 &= e^5 - e^4 \\
 &= e^4 (e - 1)
 \end{aligned}$$

$$\begin{aligned}
 5. \quad I &= \int_0^1 \frac{dx}{\sqrt{1-x^2}} = [\sin^{-1} x]_0^1 \\
 &= \sin^{-1} 1 - \sin^{-1} 0 \\
 &= \frac{\pi}{2} - 0 = \frac{\pi}{2}
 \end{aligned}$$

$$\begin{aligned}
 6. \quad I &= \int_2^3 \frac{dx}{x^2-1} = \frac{1}{2} \left[\log \frac{x-1}{x+1} \right]_2^3 \\
 &= \frac{1}{2} [\log(x-1) - \log(x+1)]_2^3 \\
 &= \frac{1}{2} \left[\log 2 - \log \frac{4}{3} \right] \\
 &= \frac{1}{2} \log \frac{2}{3} = \frac{1}{2} \log \frac{3}{2}
 \end{aligned}$$

$$\begin{aligned}
 7. \quad I &= \int_0^{\pi/2} \cos^2 x dx \text{ ----- (i)} \\
 &= \int_0^{\pi/2} \cos^2 \left(\frac{\pi}{2} - x \right) dx \\
 &= \int_0^{\pi/2} \sin^2 x dx \text{ ----- (ii)} \\
 &\text{adding (i) and (ii), we get} \\
 2I &= \int_0^{\pi/2} (\cos^2 x + \sin^2 x) dx \\
 &= \int_0^{\pi/2} 1 \cdot dx = [x]_0^{\pi/2} \\
 \therefore 2I &= \frac{\pi}{2} \Rightarrow I = \frac{\pi}{4}
 \end{aligned}$$

8. $I = \int_2^3 \frac{x}{x^2+1} dx$
 put $x^2 + 1 = t \Rightarrow 2x dx = dt$
 $\therefore x dx = \frac{1}{2} dt$
 when $x = 2$ then $t = 5$ and
 when $x = 3$ then $t = 10$
 $I = \frac{1}{2} \int_5^{10} \frac{dt}{t} = \frac{1}{2} [\log t]_5^{10}$
 $= \frac{1}{2} [\log 10 - \log 5]$
 $= \frac{1}{2} \log \frac{10}{5} = \frac{1}{2} \log 2$

9. $I = \int_0^1 \frac{\tan^{-1} x}{1+x^2} dx$
 put $\tan^{-1} x = t$
 $\Rightarrow \frac{1}{1+x^2} dx = dt$
 when $x = 0$ then $t = 0$ and
 when $x = 1$ then $t = \frac{\pi}{4}$
 $\therefore I = \int_0^{\pi/4} t dt = \left[\frac{t^2}{2} \right]_0^{\pi/4}$
 $= \frac{\frac{\pi^2}{16} - 0}{2} = \frac{\pi^2}{32}$

10. $I = \int_{-\pi/4}^{\pi/4} \sin^2 x dx = 2 \int_0^{\pi/4} \sin^2 x dx$
 $= 2 \int_0^{\pi/4} \frac{1 - \cos 2x}{2} dx = \int_0^{\pi/4} (1 - \cos 2x) dx$
 $= \left[x - \frac{\sin 2x}{2} \right]_0^{\pi/4} = \frac{\pi}{4} - \frac{1}{2} \sin \frac{\pi}{2}$
 $= \frac{\pi}{4} - \frac{1}{2}$

11. $I = \int_0^1 x(1-x)^n dx = \int_0^1 (1-x) \cdot x^n dx$
 $= \int_0^1 (x^n - x^{n+1}) dx = \left[\frac{x^{n+1}}{n+1} - \frac{x^{n+2}}{n+2} \right]_0^1$
 $= \frac{1}{n+1} - \frac{1}{n+2} = \frac{n+2-n-1}{(n+1)(n+2)} = \frac{1}{n^2+3n+2}$

12. $I = \int_{-1}^1 e^x dx = [e^x]_{-1}^1$
 $= e^1 - e^{-1} = e - \frac{1}{e}$

1. $I = \int (5x+3)\sqrt{2x-1} dx$
 $= (5x+3) \int \sqrt{2x-1} dx - \int \left\{ \frac{d}{dx} (5x+3) \int \sqrt{2x-1} dx \right\} dx$
 $= (5x+3) \frac{(2x-1)^{3/2}}{\frac{3}{2} \times 2} - \int 5 \left\{ \frac{(2x-1)^{3/2}}{\frac{3}{2} \times 2} \right\} dx$
 $= \frac{1}{3} (5x+3) (2x-1)^{3/2} - \frac{5}{3} \int (2x-1)^{3/2} dx$
 $= \frac{1}{3} (5x+3) (2x-1)^{3/2} - \frac{5}{3} \cdot \frac{(2x-1)^{5/2}}{\frac{5}{2} \times 2} + c$
 $= \frac{1}{3} (5x+3) (2x-1)^{3/2} - \frac{1}{3} (2x-1)^{5/2} + c$
 $= \frac{1}{3} (2x-1)^{3/2} [5x+3 - (2x-1)] + c$
 $= \frac{1}{3} (2x-1)^{3/2} (3x+4) + c$

2. $I = \int \frac{x(x+3)}{x+5} dx = \int \frac{x^2+3x}{x+5} dx$
 $= \int \left[(x-2) + \frac{10}{x+5} \right] dx$
 $= \frac{x^2}{2} - 2x + 10 \log |x+5| + c$

3. $I = \int \sin^4 x dx = \int (\sin^2 x)^2 dx$
 $= \int \left(\frac{1 - \cos 2x}{2} \right)^2 dx$
 $= \frac{1}{4} \int (1 + \cos^2 2x - 2 \cos 2x) dx$
 $= \frac{1}{4} \int \left(1 + \frac{1 + \cos 4x}{2} - 2 \cos 2x \right) dx$
 $= \frac{1}{4} \int \frac{2 + 1 + \cos 4x - 4 \cos 2x}{2} dx$
 $= \frac{1}{8} \int (3 + \cos 4x - 4 \cos 2x) dx$
 $= \frac{3x}{8} + \frac{\sin 4x}{32} - \frac{\sin 2x}{4} + c$

4. $I = \int \frac{\cos 2x - \cos 2\alpha}{\cos x - \cos \alpha} dx$
 $= \int \frac{(2 \cos^2 x - 1) - (2 \cos^2 \alpha - 1)}{\cos x - \cos \alpha} dx$
 $= 2 \int \frac{\cos^2 x - \cos^2 \alpha}{\cos x - \cos \alpha} dx$
 $= 2 \int \frac{(\cos x + \cos \alpha)(\cos x - \cos \alpha)}{(\cos x - \cos \alpha)} dx$
 $= 2 \int (\cos x + \cos \alpha) dx$
 $= 2 \sin x + 2x \cos \alpha + c$

$$\begin{aligned}
 5. \quad I &= \int \tan^4 x dx = \int (\tan^2 x \cdot \tan^2 x) dx \\
 &= \int \tan^2 x (\sec^2 x - 1) dx \\
 &= \int (\tan^2 x \sec^2 x - \tan^2 x) dx \\
 &= \int \tan^2 x \sec^2 x dx - \int \tan^2 x dx \\
 &= \int \tan^2 x \cdot \sec^2 x dx - \int (\sec^2 x - 1) dx \\
 &= \int \tan^2 x \cdot \sec^2 x dx - \int \sec^2 x dx + \int 1 dx \\
 &\text{put } \tan x = t \text{ in 1st integral,} \\
 &\Rightarrow \sec^2 x dx = dt \\
 \therefore I &= \int t^2 dt - \tan x + x \\
 &= \frac{t^3}{3} - \tan x + x + c \\
 &= \frac{\tan^3 x}{3} - \tan x + x + c
 \end{aligned}$$

$$\begin{aligned}
 6. \quad I &= \int \tan^3 x dx = \int \tan x \tan^2 x dx \\
 &= \int \tan x (\sec^2 x - 1) dx \\
 &= \int \tan x \sec^2 x dx - \int \tan x dx \\
 &\text{put } \tan x = t \text{ in first integral,} \\
 &\Rightarrow \sec^2 x = \frac{dt}{dx} \Rightarrow \sec^2 x dx = dt \\
 \therefore I &= \int t dt - \log |\sec x| \\
 &= \frac{t^2}{2} - \log |\sec x| + c \\
 &= \frac{\tan^2 x}{2} - \log |\sec x| + c
 \end{aligned}$$

$$\begin{aligned}
 7. \quad I &= \int \frac{dx}{x^2 - a^2} = \int \frac{1}{(x+a)(x-a)} dx \\
 &= \frac{1}{2a} \int \frac{(x+a) - (x-a)}{(x+a)(x-a)} dx \\
 &= \frac{1}{2a} \int \left(\frac{1}{x-a} - \frac{1}{x+a} \right) dx \\
 &= \frac{1}{2a} [\log |x-a| - \log |x+a|] + c \\
 &= \frac{1}{2a} \log \left| \frac{x-a}{x+a} \right| + c
 \end{aligned}$$

$$\begin{aligned}
 8. \quad I &= \int \frac{dx}{a^2 - x^2} = \int \frac{1}{(a+x)(a-x)} dx \\
 &= \frac{1}{2a} \int \frac{(a+x) + (a-x)}{(a+x)(a-x)} dx \\
 &= \frac{1}{2a} \int \left(\frac{1}{a-x} + \frac{1}{a+x} \right) dx \\
 &= \frac{1}{2a} [-\log |a-x| + \log |a+x|] + c \\
 &= \frac{1}{2a} \log \left| \frac{a+x}{a-x} \right| + c
 \end{aligned}$$

$$\begin{aligned}
 9. \quad I &= \int \frac{dx}{x^2 + a^2} \\
 &\text{put } x = a \tan \theta \text{ then } dx = a \sec^2 \theta d\theta \\
 \therefore I &= \int \frac{a \sec^2 \theta d\theta}{a^2 + a^2 \tan^2 \theta} = \int \frac{a \sec^2 \theta}{a^2 \sec^2 \theta} d\theta \\
 &= \frac{1}{a} \int d\theta = \frac{1}{a} \theta + c = \frac{1}{a} \tan^{-1} \frac{x}{a} + c
 \end{aligned}$$

$$\begin{aligned}
 10. \quad I &= \int \frac{dx}{\sqrt{x^2 - a^2}} \\
 &\text{put } x = a \sec \theta \\
 \therefore dx &= a \sec \theta \cdot \tan \theta d\theta \\
 \therefore I &= \int \frac{a \sec \theta \cdot \tan \theta d\theta}{\sqrt{a^2 \sec^2 \theta - a^2}} = \int \frac{a \sec \theta \cdot \tan \theta}{a \tan \theta} d\theta \\
 &= \int \sec \theta d\theta = \log |\sec \theta + \tan \theta| + c_1 \\
 &= \log \left| \frac{x}{a} + \sqrt{\frac{x^2}{a^2} - 1} \right| + c_1 \\
 &= \log |x + \sqrt{x^2 - a^2}| - \log |a| + c_1 \\
 &= \log |x + \sqrt{x^2 - a^2}| + c, \\
 &\text{where } c = c_1 - \log |a|
 \end{aligned}$$

$$\begin{aligned}
 11. \quad I &= \int \frac{dx}{\sqrt{a^2 - x^2}} \\
 &\text{put } x = a \sin \theta, \text{ then } dx = a \cos \theta d\theta \\
 \therefore I &= \int \frac{a \cos \theta d\theta}{\sqrt{a^2 - a^2 \sin^2 \theta}} = \int \frac{a \cos \theta}{a \cos \theta} d\theta \\
 &= \int d\theta = \theta + c = \sin^{-1} \frac{x}{a} + c
 \end{aligned}$$

$$\begin{aligned}
 12. \quad I &= \int \frac{dx}{\sqrt{x^2 + a^2}} \\
 &\text{put } x = a \tan \theta, \text{ then } dx = a \sec^2 \theta d\theta \\
 \therefore I &= \int \frac{a \sec^2 \theta d\theta}{\sqrt{a^2 \tan^2 \theta + a^2}} = \int \frac{a \sec^2 \theta}{a \sec \theta} d\theta \\
 &= \int \sec \theta d\theta = \log |\sec \theta + \tan \theta| + c_1 \\
 &= \log \left| \frac{x}{a} + \sqrt{\frac{x^2}{a^2} + 1} \right| + c_1 \\
 &= \log |x + \sqrt{x^2 + a^2}| - \log |a| + c_1 \\
 &= \log |x + \sqrt{x^2 + a^2}| + c \\
 &\text{where } c = c_1 - \log |a|
 \end{aligned}$$

$$\begin{aligned}
 13. \quad I &= \int \frac{dx}{x^2 - 6x + 13} = \int \frac{dx}{(x-3)^2 + 4} \\
 &= \int \frac{dx}{(x-3)^2 + (2)^2} \\
 &\text{put } x-3 = t, \\
 &\text{then } dx = dt \\
 I &= \int \frac{dt}{(t)^2 + (2)^2} = \frac{1}{2} \tan^{-1} \frac{t}{2} + c \\
 &= \frac{1}{2} \tan^{-1} \frac{x-3}{2} + c
 \end{aligned}$$

14.
$$I = \int \frac{x+3}{\sqrt{5-4x-x^2}} dx$$
 let $x+3 = A \cdot \frac{d}{dx}(5-4x-x^2) + B$

$$= A(-4-2x) + B$$

equating the coefficients of x and the constant terms from both sides.

$$-2A = 1 \quad \text{and} \quad -4A + B = 3$$

$$\Rightarrow A = -\frac{1}{2}, \text{ and } B = 1$$

$$\therefore I = -\frac{1}{2} \int \frac{-4-2x}{\sqrt{5-4x-x^2}} dx + \int \frac{1}{\sqrt{5-4x-x^2}} dx$$

$$= -\frac{1}{2} I_1 + I_2 \text{----- (i)}$$

In I_1 , put $5-4x-x^2 = t, \therefore (-4-2x) dx = dt$

$$\therefore I_1 = \int \frac{dt}{\sqrt{t}} = 2\sqrt{t} + c_1$$

$$= 2\sqrt{5-4x-x^2} + c_1 \text{---- (ii)}$$

Now,

$$I_2 = \int \frac{dx}{\sqrt{5-4x-x^2}} = \int \frac{dx}{\sqrt{9-(x+2)^2}}$$
 put $x+2 = t \Rightarrow dx = dt$

$$I_2 = \int \frac{dt}{\sqrt{3^2-t^2}} = \sin^{-1} \frac{t}{3} + c_2$$

$$= \sin^{-1} \frac{x+2}{3} + c_2 \text{----- (iii)}$$

Substituting the value of I_1 and I_2 from (ii) and (iii) in (i) we get,

$$I = -\frac{1}{2} (2\sqrt{5-4x-x^2}) + \sin^{-1} \frac{x+2}{3} + c_2 - \frac{c_1}{2}$$

$$= -\sqrt{5-4x-x^2} + \sin^{-1} \frac{x+2}{3} + c,$$
 where $c = -\frac{1}{2}c_1 + c_2$

15.
$$I = \int \frac{x+2}{\sqrt{x^2-1}} dx$$

$$= \int \left(\frac{x}{\sqrt{x^2-1}} + \frac{2}{\sqrt{x^2-1}} \right) dx$$

$$= \int \frac{x}{\sqrt{x^2-1}} dx + \int \frac{2}{\sqrt{x^2-1}} dx$$

$$= \int \frac{x}{\sqrt{x^2-1}} dx + 2 \log|x + \sqrt{x^2-1}| + c_1$$
 Now,
 Let $I_1 = \int \frac{x}{\sqrt{x^2-1}} dx = \frac{1}{2} \int \frac{2x}{\sqrt{x^2-1}} dx$
 put $x^2-1 = t \Rightarrow 2x dx = dt$

$$\therefore I_1 = \frac{1}{2} \int \frac{dt}{\sqrt{t}} = \frac{1}{2} \times 2\sqrt{t} + c_2 = \sqrt{x^2-1} + c_2$$

$$\therefore I = \sqrt{x^2-1} + 2 \log|x + \sqrt{x^2-1}| + c_1 + c_2$$

$$= \sqrt{x^2-1} + 2 \log|x + \sqrt{x^2-1}| + c$$
 where $c = c_1 + c_2$

16.
$$I = \int \frac{x}{(x-1)(x-2)(x-3)} dx$$
 let $\frac{x}{(x-1)(x-2)(x-3)}$

$$= \frac{A}{(x-1)} + \frac{B}{(x-2)} + \frac{C}{(x-3)} \text{--- (i)}$$

$$= \frac{A(x-2)(x-3) + B(x-1)(x-3) + C(x-1)(x-2)}{(x-1)(x-2)(x-3)}$$

$$\Rightarrow x = A(x-2)(x-3) + B(x-1)(x-3) + C(x-1)(x-2) \text{--- (ii)}$$
 put $x = 1, 2, 3$ in (ii) successively we get,

$$1 = A(-1)(-2) \Rightarrow A = \frac{1}{2}$$

$$2 = B(1)(-1) \Rightarrow B = -2$$

$$3 = C(2)(1) \Rightarrow C = \frac{3}{2}$$

$$\therefore I = \int \left[\frac{1}{2(x-1)} - \frac{2}{x-2} + \frac{3}{2(x-3)} \right] dx$$

$$= \frac{1}{2} \int \frac{1}{x-1} dx - 2 \int \frac{1}{x-2} dx + \frac{3}{2} \int \frac{1}{x-3} dx$$

$$\therefore I = \frac{1}{2} \log|x-1| - 2 \log|x-2| + \frac{3}{2} \log|x-3| + c$$
 17.
$$I = \int e^x \sin x dx \text{..... (1)}$$
 Integrating by parts, we get

$$I = e^x \int \sin x dx - \int \left\{ \frac{d}{dx}(e^x) \int \sin x dx \right\} dx$$

$$= e^x(-\cos x) - \int e^x(-\cos x) dx$$

$$= -e^x \cos x + \int e^x \cos x dx$$

$$= -e^x \cos x + e^x \int \cos x dx - \int \left\{ \frac{d}{dx}(e^x) \int \cos x dx \right\} dx$$

$$= -e^x \cos x + e^x \sin x - \int e^x \sin x dx + c_1$$
 or, $I = e^x(\sin x - \cos x) - I + c_1$; from (i)
 or, $I + I = e^x(\sin x - \cos x) + c_1$

$$2I = e^x(\sin x - \cos x) + c_1$$

$$\therefore I = \frac{e^x}{2}(\sin x - \cos x) + \frac{c_1}{2}$$

$$\therefore \int e^x \sin x dx = \frac{e^x}{2}(\sin x - \cos x) + c;$$
 where $c = \frac{c_1}{2}$

18.
$$I = \int x \sin^{-1} x dx$$
 put $x = \sin \theta \Rightarrow dx = \cos \theta d\theta$

$$\therefore I = \int \theta \sin \theta \cdot \cos \theta d\theta = \frac{1}{2} \int \theta \sin 2\theta d\theta$$
 Integrating by parts, we get;

$$I = \frac{1}{2} \left[\theta \int \sin 2\theta d\theta - \int \left\{ \frac{d(\theta)}{d\theta} \int \sin 2\theta d\theta \right\} d\theta \right]$$

$$= \frac{1}{2} \left[\theta \left(\frac{-\cos 2\theta}{2} \right) - \int \frac{-\cos 2\theta}{2} d\theta \right]$$

$$= \frac{1}{4} \left[-\theta \cos 2\theta + \frac{\sin 2\theta}{2} \right] + c$$

$$= \frac{1}{4} \left[-\theta(1-2\sin^2 \theta) + \frac{2\sin \theta \cos \theta}{2} \right] + c$$

$$= \frac{1}{4} \left[-\sin^{-1} x(1-2x^2) + x\sqrt{1-x^2} \right] + c$$

$$I = \frac{1}{4} \left[(2x^2-1)\sin^{-1} x + x\sqrt{1-x^2} \right] + c$$

19.
$$I = \int \frac{(x^2+1)e^x}{(x+1)^2} dx$$

$$= \int \frac{x^2-1+2}{(x+1)^2} e^x dx$$

$$= \int e^x \left[\frac{x^2-1}{(x+1)^2} + \frac{2}{(x+1)^2} \right] dx$$

$$= \int e^x \left[\frac{x-1}{(x+1)} + \frac{2}{(x+1)^2} \right] dx$$
consider $f(x) = \frac{x-1}{x+1}$,
then $f'(x) = \frac{2}{(x+1)^2}$
Thus, the given integrand is of
the form $e^x[f(x) + f'(x)]$
Hence, $\int \frac{x^2+1}{(x+1)^2} e^x dx = \frac{x-1}{x+1} \cdot e^x + c$

$$= \int \sqrt{\left(\frac{\sqrt{13}}{2}\right)^2 - \left(x - \frac{3}{2}\right)^2} dx$$

$$= \left(x - \frac{3}{2}\right) \sqrt{\left(\frac{\sqrt{13}}{2}\right)^2 - \left(x - \frac{3}{2}\right)^2} +$$

$$\frac{\left(\frac{\sqrt{13}}{2}\right)^2}{2} \sin^{-1}\left(\frac{x - \frac{3}{2}}{\frac{\sqrt{13}}{2}}\right) + c$$

$$= \frac{2x-3}{4} \sqrt{1+3x-x^2} +$$

$$\frac{13}{8} \sin^{-1}\left(\frac{2x-3}{\sqrt{13}}\right) + c$$

20.
$$I = \int \sin^{-1}\left(\frac{2x}{1+x^2}\right) dx$$

$$= \int 2 \tan^{-1} x dx$$
Integrating by parts, we get

$$I = \tan^{-1} x \int 2 dx - \int \left[\frac{d}{dx}(\tan^{-1} x) \int 2 dx \right] dx$$

$$= 2x \tan^{-1} x - \int \frac{2x}{1+x^2} dx + c$$

$$= 2x \tan^{-1} x - \log|1+x^2| + c$$

23.
$$I = \int \frac{x \sin^{-1} x}{\sqrt{1-x^2}} dx$$
put $\sin^{-1} x = t \Rightarrow \frac{1}{\sqrt{1-x^2}} dx = dt$

$$I = \int t \sin t dt$$

Integrating by parts, we get

$$I = t \int \sin t dt - \int \left\{ \frac{d(t)}{dt} \int \sin t dt \right\} dt$$

$$= t(-\cos t) - \int 1.(-\cos t) dt$$

$$= -t \cos t + \sin t + c$$

$$= -\sin^{-1} x \sqrt{1-x^2} + x + c$$

$$\int \frac{x \sin^{-1} x}{\sqrt{1-x^2}} dx = -\sin^{-1} x \sqrt{1-x^2} + x + c$$

21.
$$I = \int \sqrt{x^2+2x+5} dx$$

$$= \int \sqrt{(x+1)^2+(2)^2} dx$$

$$= \frac{x+1}{2} \sqrt{(x+1)^2+(2)^2} +$$

$$\frac{2^2}{2} \log|(x+1) + \sqrt{(x+1)^2+(2)^2}| + c$$

$$= \frac{x+1}{2} \sqrt{x^2+2x+5} +$$

$$2 \log|x+1 + \sqrt{x^2+2x+5}| + c$$

22.
$$I = \int \sqrt{1+3x-x^2} dx$$

$$= \int \sqrt{1-(x^2-3x)} dx$$

$$= \int \sqrt{1-\left\{x^2-2 \cdot \frac{3}{2} \cdot x + \frac{9}{4} - \frac{9}{4}\right\}} dx$$

$$= \int \sqrt{1+\frac{9}{4}-\left(x-\frac{3}{2}\right)^2} dx$$

$$= \int \sqrt{\frac{13}{4}-\left(x-\frac{3}{2}\right)^2} dx$$

DEFINITE INTEGRATION (03 MARKS)

1. we have,

$$I = \int_0^1 \frac{dx}{\sqrt{x+1} + \sqrt{x}}$$

$$= \int_0^1 \left[\frac{\sqrt{x+1} - \sqrt{x}}{(\sqrt{x+1} + \sqrt{x})(\sqrt{x+1} - \sqrt{x})} \right] dx$$

$$= \int_0^1 \frac{\sqrt{x+1} - \sqrt{x}}{(x+1-x)} dx$$

$$= \int_0^1 (\sqrt{x+1} - \sqrt{x}) dx$$

$$= \left[\frac{2}{3} (x+1)^{3/2} - \frac{2}{3} x^{3/2} \right]_0^1$$

$$= \frac{2}{3} [(x+1)^{3/2} - x^{3/2}]_0^1$$

$$= \frac{2}{3} [(2)^{3/2} - 1^{3/2} - (1^{3/2} - 0)]$$

$$= \frac{2}{3} (2\sqrt{2} - 1 - 1) = \frac{2}{3} (2\sqrt{2} - 2)$$

$$= \frac{4}{3} (\sqrt{2} - 1)$$

$$\begin{aligned}
2. \quad I &= \int_0^{\pi/2} \frac{dx}{1 + \sin x} = \int_0^{\pi/2} \frac{dx}{1 + \cos(\frac{\pi}{2} - x)} \\
&= \int_0^{\pi/2} \frac{dx}{2 \cos^2(\frac{\pi}{4} - \frac{x}{2})} \\
&= \frac{1}{2} \int_0^{\pi/2} \sec^2(\frac{\pi}{4} - \frac{x}{2}) dx \\
&= -\frac{1}{2} \left[\frac{\tan(\frac{\pi}{4} - \frac{x}{2})}{\frac{1}{2}} \right]_0^{\pi/2} \\
&= -\left[\tan(\frac{\pi}{4} - \frac{x}{2}) \right]_0^{\pi/2} \\
&= -\left[\tan(\frac{\pi}{4} - \frac{\pi}{4}) - \tan \frac{\pi}{4} \right] \\
&= -[\tan 0 - 1] = -(0 - 1) = 1
\end{aligned}$$

$$\begin{aligned}
3. \quad I &= \int_0^{\pi/2} \frac{\sqrt{\sin x}}{\sqrt{\sin x} + \sqrt{\cos x}} dx \text{ ---- (i)} \\
&= \int_0^{\pi/2} \frac{\sqrt{\sin(\frac{\pi}{2} - x)}}{\sqrt{\sin(\frac{\pi}{2} - x)} + \sqrt{\cos(\frac{\pi}{2} - x)}} dx \\
\text{or, } I &= \int_0^{\pi/2} \frac{\sqrt{\cos x}}{\sqrt{\cos x} + \sqrt{\sin x}} dx \text{ ---- (ii)} \\
\text{Adding (i) and (ii) we get,} \\
2I &= \int_0^{\pi/2} \frac{\sqrt{\sin x} + \sqrt{\cos x}}{\sqrt{\sin x} + \sqrt{\cos x}} dx \\
&= \int_0^{\pi/2} 1 dx = [x]_0^{\pi/2} = \frac{\pi}{2} - 0 \\
&= \frac{\pi}{2} \\
\therefore I &= \frac{\pi}{4} \text{ Ans.}
\end{aligned}$$

$$\begin{aligned}
4. \quad I &= \int_0^4 |x - 1| dx \\
&= \int_0^1 |x - 1| dx + \int_1^4 |x - 1| dx \\
&= -\int_0^1 (x - 1) dx + \int_1^4 (x - 1) dx \\
&= -\left[\frac{x^2}{2} - x \right]_0^1 + \left[\frac{x^2}{2} - x \right]_1^4 \\
&= -\left[\left(\frac{1}{2} - 1 \right) - 0 \right] + \left[\left(\frac{16}{2} - 4 \right) - \left(\frac{1}{2} - 1 \right) \right] \\
&= \frac{1}{2} + \left(4 + \frac{1}{2} \right) = 5
\end{aligned}$$

$$\begin{aligned}
5. \quad I &= \int_0^{\pi/2} \log \sin x dx \text{ ---- (i)} \\
&= \int_0^{\pi/2} \log \sin(\frac{\pi}{2} - x) dx \\
&= \int_0^{\pi/2} \log \cos x dx \text{ ---- (ii)} \\
\text{Adding (i) and (ii) we get,} \\
2I &= \int_0^{\pi/2} (\log \sin x + \log \cos x) dx \\
&= \int_0^{\pi/2} \log(\sin x \cdot \cos x) dx \\
&= \int_0^{\pi/2} \log\left(\frac{\sin 2x}{2}\right) dx \\
&= \int_0^{\pi/2} \log \sin 2x dx - \int_0^{\pi/2} \log 2 dx \\
&\text{put } 2x = t \text{ in 1st integral} \\
\therefore dx &= \frac{1}{2} dt \\
&\text{when } x = 0 \text{ then } t = 0, \\
&\text{when } x = \frac{\pi}{2}, \text{ then } t = \pi \\
\therefore 2I &= \frac{1}{2} \int_0^\pi \log \sin t dt - \log 2 [x]_0^{\pi/2} \\
&= \frac{2}{2} \int_0^{\pi/2} \log \sin t dt - \frac{\pi}{2} \log 2 \\
&= \int_0^{\pi/2} \log \sin x dx - \frac{\pi}{2} \log 2 \text{ (by changing} \\
&\text{variable } t \text{ to } x) \\
&= I - \frac{\pi}{2} \log 2 \\
\therefore 2I - I &= -\frac{\pi}{2} \log 2 \\
\therefore I &= -\frac{\pi}{2} \log 2
\end{aligned}$$

$$\begin{aligned}
6. \quad I &= \int_0^{\pi/4} \log(1 + \tan x) dx \text{ ---- (i)} \\
&= \int_0^{\pi/4} \log(1 + \tan(\frac{\pi}{4} - x)) dx \\
&= \int_0^{\pi/4} \log\left(1 + \frac{1 - \tan x}{1 + \tan x}\right) dx \\
&= \int_0^{\pi/4} \log\left(\frac{1 + \tan x + 1 - \tan x}{1 + \tan x}\right) dx \\
&= \int_0^{\pi/4} \log\left(\frac{2}{1 + \tan x}\right) dx \text{ ---- (ii)} \\
\text{Adding (i) and (ii) we get,} \\
2I &= \int_0^{\pi/4} \log(1 + \tan x) dx \\
&\quad + \int_0^{\pi/4} \log\left(\frac{2}{1 + \tan x}\right) dx
\end{aligned}$$

$$\begin{aligned}
&= \int_0^{\pi/4} \log(1 + \tan x) dx + \\
&\quad \int_0^{\pi/4} [\log 2 - \log(1 + \tan x)] dx \\
&= \int_0^{\pi/4} \log(1 + \tan x) dx + \int_0^{\pi/4} \log 2 dx \\
&\quad - \int_0^{\pi/4} \log(1 + \tan x) dx \\
&= \int_0^{\pi/4} \log 2 dx = \log 2 [x]_0^{\pi/4} = \frac{\pi}{4} \log 2 \\
\therefore I &= \frac{\pi}{8} \log 2
\end{aligned}$$

$$\begin{aligned}
7. \quad I &= \int_0^{2\pi} |\cos x| dx \\
&= \int_0^{\pi/2} |\cos x| dx + \int_{\pi/2}^{3\pi/2} |\cos x| dx \\
&\quad + \int_{3\pi/2}^{2\pi} |\cos x| dx \\
&= \int_0^{\pi/2} \cos x dx - \int_{\pi/2}^{3\pi/2} \cos x dx \\
&\quad + \int_{3\pi/2}^{2\pi} \cos x dx \\
&= [\sin x]_0^{\pi/2} - [\sin x]_{\pi/2}^{3\pi/2} + [\sin x]_{3\pi/2}^{2\pi} \\
&= (\sin \frac{\pi}{2} - \sin 0) - (\sin \frac{3\pi}{2} - \sin \frac{\pi}{2}) \\
&\quad + (\sin 2\pi - \sin \frac{3\pi}{2}) \\
&= (1 - 0) - (-1 - 1) + [0 - (-1)] \\
&= 1 + 2 + 1 = 4
\end{aligned}$$

$$\begin{aligned}
8. \quad I &= \int_{\pi/6}^{\pi/3} \frac{dx}{1 + \sqrt{\tan x}} \\
&= \int_{\pi/6}^{\pi/3} \left(\frac{\sqrt{\cos x}}{\sqrt{\cos x} + \sqrt{\sin x}} \right) dx \text{ ----- (i)} \\
&= \int_{\pi/6}^{\pi/3} \frac{\sqrt{\cos \left(\frac{\pi}{3} + \frac{\pi}{6} - x \right)}}{\sqrt{\cos \left(\frac{\pi}{3} + \frac{\pi}{6} - x \right)} + \sqrt{\sin \left(\frac{\pi}{3} + \frac{\pi}{6} - x \right)}} dx \\
&= \int_{\pi/6}^{\pi/3} \frac{\sqrt{\sin x}}{\sqrt{\sin x} + \sqrt{\cos x}} dx \text{ ---- (ii)} \\
&\text{Adding (i) and (ii), we get} \\
2I &= \int_{\pi/6}^{\pi/3} 1 dx = [x]_{\pi/6}^{\pi/3} = \frac{\pi}{3} - \frac{\pi}{6} = \frac{\pi}{6} \\
\therefore I &= \frac{\pi}{12}
\end{aligned}$$

$$\begin{aligned}
9. \quad I &= \int_0^{2\pi} \cos^5 x dx \\
&= 2 \int_0^{\pi} \cos^5 x dx \text{ ----- (i)} \\
&[\because \cos(2\pi - x) = \cos x]
\end{aligned}$$

$$\text{Let } I = \int_0^{\pi} \cos^5 x dx \text{ ---- (ii)}$$

$$= \int_0^{\pi} \cos^5(\pi - x) dx$$

$$= - \int_0^{\pi} \cos^5 x dx \text{ ----- (iii)}$$

$$[\because \cos(\pi - x) = -\cos x]$$

adding (ii) and (iii), we get,

$$2I = 0$$

$$\therefore I = 0,$$

$$\text{Hence, } \int_0^{2\pi} \cos^5 x dx = 2I = 2 \times 0 = 0$$

$$10. \quad I = \int_0^{\pi} \frac{x}{1 + \sin x} dx \text{ ----- (i)}$$

$$= \int_0^{\pi} \frac{\pi - x}{1 + \sin(\pi - x)} dx$$

$$= \int_0^{\pi} \frac{\pi - x}{1 + \sin x} dx \text{ ----- (ii)}$$

Adding (i) and (ii), we get

$$2I = \int_0^{\pi} \frac{x + \pi - x}{1 + \sin x} dx$$

$$= \pi \int_0^{\pi} \frac{1}{1 + \sin x} dx$$

$$= \pi \int_0^{\pi} \frac{1 - \sin x}{1 - \sin^2 x} dx$$

$$= \pi \int_0^{\pi} \frac{1 - \sin x}{\cos^2 x} dx$$

$$= \pi \int_0^{\pi} (\sec^2 x - \sec x \cdot \tan x) dx$$

$$= \pi [\tan x - \sec x]_0^{\pi}$$

$$= \pi [(\tan \pi - \sec \pi) - (\tan 0 - \sec 0)]$$

$$= \pi [0 - (-1) - (0 - 1)] = 2\pi$$

$$\therefore I = \pi$$

$$11. \quad I = \int_0^{\pi/2} \frac{x}{\sin x + \cos x} dx \text{ ---- (i)}$$

$$= \int_0^{\pi/2} \frac{\frac{\pi}{2} - x}{\sin \left(\frac{\pi}{2} - x \right) + \cos \left(\frac{\pi}{2} - x \right)} dx$$

$$= \int_0^{\pi/2} \frac{\frac{\pi}{2} - x}{\cos x + \sin x} dx \text{ ---- (ii)}$$

Adding (i) and (ii), we get

$$2I = \int_0^{\pi/2} \frac{x + \frac{\pi}{2} - x}{\sin x + \cos x} dx$$

$$= \frac{\pi}{2} \int_0^{\pi/2} \frac{1}{\sin x + \cos x} dx$$

$$\begin{aligned} \therefore I &= \frac{\pi}{4} \int_0^{\pi/2} \frac{1}{\sqrt{2} \left(\frac{1}{\sqrt{2}} \sin x + \frac{1}{\sqrt{2}} \cos x \right)} dx \\ &= \frac{\pi}{4\sqrt{2}} \int_0^{\pi/2} \frac{1}{\cos \left(x - \frac{\pi}{4} \right)} dx \\ &= \frac{\pi}{4\sqrt{2}} \int_0^{\pi/2} \sec \left(x - \frac{\pi}{4} \right) dx \\ &= \frac{\pi}{4\sqrt{2}} \left[\log \left| \sec \left(x - \frac{\pi}{4} \right) + \tan \left(x - \frac{\pi}{4} \right) \right| \right]_0^{\pi/2} \\ &= \frac{\pi}{4\sqrt{2}} \left[\log \left| \sec \frac{\pi}{4} + \tan \frac{\pi}{4} \right| - \log \left| \sec \frac{\pi}{4} - \tan \frac{\pi}{4} \right| \right] \\ &= \frac{\pi}{4\sqrt{2}} \left[\log(\sqrt{2} + 1) - \log(\sqrt{2} - 1) \right] \\ &= \frac{\pi}{4\sqrt{2}} \log \left(\frac{\sqrt{2} + 1}{\sqrt{2} - 1} \right) = \frac{\pi}{4\sqrt{2}} \log(\sqrt{2} + 1)^2 \\ \therefore I &= \frac{\pi}{2\sqrt{2}} \log(\sqrt{2} + 1) \end{aligned}$$

12. $I = \int_{-a}^a \sqrt{\frac{a-x}{a+x}} dx$

$$= \int_{-a}^a \frac{a-x}{\sqrt{a^2-x^2}} dx$$

$$= \int_{-a}^a \frac{a}{\sqrt{a^2-x^2}} dx - \int_{-a}^a \frac{x}{\sqrt{a^2-x^2}} dx$$

Since, $\frac{x}{\sqrt{a^2-x^2}}$ is an odd function.

Hence $\int_{-a}^a \frac{x}{\sqrt{a^2-x^2}} dx = 0$

$$\therefore I = \int_{-a}^a \frac{a}{\sqrt{a^2-x^2}} dx - 0$$

$$= \int_{-a}^a \frac{a}{\sqrt{a^2-x^2}} dx$$

$$= a \int_{-a}^a \frac{1}{\sqrt{a^2-x^2}} dx$$

$$= 2a \int_0^a \frac{dx}{\sqrt{a^2-x^2}} = 2a \left[\sin^{-1} \frac{x}{a} \right]_0^a$$

$$= 2a [\sin^{-1} 1 - \sin^{-1} 0] = 2a \left(\frac{\pi}{2} - 0 \right)$$

$$I = 2a \cdot \frac{\pi}{2} = \pi a$$

**DEFINITE INTEGRATION
AS THE LIMIT OF SUM**

1. We have $\int_a^b f(x) dx = \lim_{h \rightarrow 0} \sum_{r=1}^n hf(a+rh)$
 where $nh = b - a$ and $n \rightarrow \infty$
 Here $f(x) = x^2$, $a = 0$, $b = 1$

$$\begin{aligned} \therefore f(a+rh) &= f(0+rh) = f(rh) \\ &= (rh)^2 = r^2 h^2 \end{aligned}$$

and $nh = b - a = 1 - 0 = 1$

$$\begin{aligned} \therefore \int_0^1 f(x) dx &= \lim_{h \rightarrow 0} h \sum_{r=1}^n f(a+rh) \\ &= \lim_{h \rightarrow 0} h \sum_{r=1}^n r^2 h^2 \\ &= \lim_{h \rightarrow 0} h^3 \sum_{r=1}^n r^2 \\ &= \lim_{h \rightarrow 0} \frac{h^3 n(n+1)(2n+1)}{6} \\ &= \lim_{h \rightarrow 0} \frac{nh(nh+h)(2nh+h)}{6} \\ &= \lim_{h \rightarrow 0} \frac{1(1+h)(2+h)}{6} \\ &= \frac{1 \times 1 \times 2}{6} = \frac{1}{3} \end{aligned}$$

$$\therefore \int_0^1 x^2 dx = \frac{1}{3}$$

2. From definition

$$\int_a^b f(x) dx = \lim_{h \rightarrow 0} \sum_{r=1}^n hf(a+rh)$$

where $nh = b - a$, $n \rightarrow \infty$

Here $f(x) = e^x$, $a = 0$, $b = 1$

$$\therefore f(a+rh) = f(0+rh) = f(rh) = e^{rh}$$

and $nh = b - a = 1 - 0 = 1$

From (i)

$$\begin{aligned} \int_0^1 f(x) dx &= \lim_{h \rightarrow 0} h \sum_{r=1}^n f(a+rh) \\ &= \lim_{h \rightarrow 0} h \sum_{r=1}^n e^{rh} \\ &= \lim_{h \rightarrow 0} h (e^h + e^{2h} + e^{3h} + e^{4h} \\ &\quad + \dots + e^{nh}) \\ &= \lim_{h \rightarrow 0} h \frac{e^h(1 - e^{nh})}{1 - e^h} \\ &= \lim_{h \rightarrow 0} h \frac{e^h(1 - e^1)}{1 - e^h} \\ &= \lim_{h \rightarrow 0} \frac{he^h(e-1)}{-1 + e^h} (e-1) \\ &= \lim_{h \rightarrow 0} \frac{e^h(e-1)}{\left(\frac{e^h - 1}{h} \right)} \\ &= \lim_{h \rightarrow 0} \frac{e^h(e-1)}{\frac{e^h - 1}{h}} \\ &= \frac{e^0(e-1)}{1} = (e-1) \end{aligned}$$

3. From definition

$$\int_a^b f(x) dx = \lim_{h \rightarrow 0} \sum_{r=1}^n hf(a+rh)$$

Where, $nh = b - a$ and $n \rightarrow \infty$

Here $f(x) = x$, $a = 0$, $b = 3$

$$\therefore f(a+rh) = f(0+rh) = f(rh) = rh$$

$$\text{and } nh = b - a = 3 - 0 = 3$$

$$\begin{aligned} \text{From (i)} \int_0^3 f(x) dx &= \lim_{h \rightarrow 0} h \sum_{r=1}^n f(a+rh) \\ &= \lim_{h \rightarrow 0} h \sum_{r=1}^n rh \\ &= \lim_{h \rightarrow 0} h^2 \sum_{r=1}^n r \\ &= \lim_{h \rightarrow 0} h^2 \frac{n(n+1)}{2} \\ &= \lim_{h \rightarrow 0} \frac{nh(nh+h)}{2} \\ &= \lim_{h \rightarrow 0} \frac{3(3+h)}{2} \\ &= \frac{9}{2} \text{ Ans..} \end{aligned}$$

4. From definition

$$\int_a^b f(x) dx = \lim_{h \rightarrow 0} \sum_{r=1}^n hf(a+rh) \quad \text{--- (i)}$$

Where, $nh = b - a$ and $n \rightarrow \infty$

Here, $f(x) = x + e^{2x}$, $a = 0$, $b = 4$

$$\therefore nh = b - a = 4 - 0 = 4$$

$$\therefore f(a+rh) = f(0+rh) = f(rh) = rh + e^{2rh}$$

\therefore From (i),

$$\begin{aligned} \int_0^4 (x + e^{2x}) dx &= \lim_{h \rightarrow 0} h \sum_{r=1}^n (rh + e^{2rh}) \\ &= \lim_{h \rightarrow 0} h^2 \sum_{r=1}^n r + \lim_{h \rightarrow 0} h \sum_{r=1}^n e^{2rh} \\ &= \lim_{h \rightarrow 0} h^2 \frac{n(n+1)}{2} + \lim_{h \rightarrow 0} h \frac{e^{2nh}(e^{2nh} - 1)}{e^{2h} - 1} \\ &= \lim_{h \rightarrow 0} \frac{nh(nh+h)}{2} + \lim_{h \rightarrow 0} \frac{h e^{2nh}(e^{2nh} - 1)}{e^{2h} - 1} \\ &= \lim_{h \rightarrow 0} \frac{4(4+h)}{2} + \lim_{h \rightarrow 0} \frac{e^{2h}(e^8 - 1)}{\left(\frac{e^{2h} - 1}{2h}\right) \cdot 2} \\ &= \frac{16}{2} + \frac{e^0(e^8 - 1)}{1 \times 2} \\ &= 8 + \frac{e^8 - 1}{2} = \frac{16 + e^8 - 1}{2} \\ &= \frac{e^8 + 15}{2} \text{ Ans..} \end{aligned}$$

Q 1 Find the area of the circle $x^2 + y^2 = a^2$ by integration.

वृत्त $x^2 + y^2 = a^2$ का क्षेत्रफल समाकलन द्वारा निकालें।

Q 2 Find the area of the smaller portion of the circle $x^2 + y^2 = a^2$ cut off by the line $x = \frac{a}{2}$.

सरल रेखा $x = \frac{a}{2}$ द्वारा विभाजित वृत्त $x^2 + y^2 = a^2$ के भागों में से छोटे भाग का क्षेत्रफल निकालें।

Q 3 Find the area of the region bounded by the parabola $y = x^2$ and $y = |x|$.

परवलय $y = x^2$ तथा $y = |x|$ से घिरे क्षेत्र का क्षेत्रफल ज्ञात करें।

Q 4 Find the area bounded by the parabola $y^2 = 4x$ and the straight line $x + y = 3$.

परवलय $y^2 = 4x$ तथा सरल रेखा $x + y = 3$ से घिरे क्षेत्र का क्षेत्रफल ज्ञात करें।

Q 5 Find the area of the region bounded by the parabolas $x^2 = y$ and $y^2 = x$.

परवलयों $x^2 = y$ तथा $y^2 = x$ से घिरे क्षेत्र का क्षेत्रफल ज्ञात करें।

Q 6 Find the area lying above the x-axis and included between the curves $x^2 + y^2 = 8x$ and $y^2 = 4x$.

x-अक्ष के ऊपर वृत्त $x^2 + y^2 = 8x$ एवं परवलय $y^2 = 4x$ के मध्यवर्ती क्षेत्र का क्षेत्रफल ज्ञात कीजिए।

Q 7 Find the area of the region enclosed by the curves $x^2 + y^2 = 1$ and $(x-1)^2 + y^2 = 1$.

वक्रों $x^2 + y^2 = 1$ तथा $(x-1)^2 + y^2 = 1$ से घिरे क्षेत्र का क्षेत्रफल ज्ञात कीजिए।

Q 8 Using integration, find the area of $\triangle ABC$ whose vertices are $A(2,0)$, $B(4,5)$ and $C(6,3)$.

समाकलन विधि का प्रयोग करते हुए एक ऐसे त्रिभुज ABC का क्षेत्रफल ज्ञात कीजिए जिसके शीर्ष $A(2,0)$, $B(4,5)$ एवं $C(6,3)$ हैं।

Q 9 Find the area of the smaller region bounded by the ellipse $\frac{x^2}{a^2} + \frac{y^2}{b^2} = 1$ and the straight line $\frac{x}{a} + \frac{y}{b} = 1$.

दीर्घ वृत्त $\frac{x^2}{a^2} + \frac{y^2}{b^2} = 1$ एवं रेखा $\frac{x}{a} + \frac{y}{b} = 1$ से घिरे लघु क्षेत्र का क्षेत्रफल ज्ञात कीजिए।

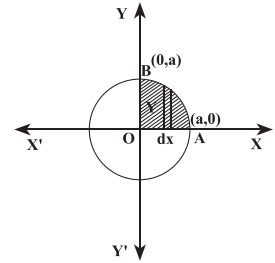
5- Marks Solution

1 Ans :-

Whole area enclosed by the given circle

= 4(area of the region AOBA bounded by the curve, x-axis and the ordinates $x=0$ and $x=a$)

$$\begin{aligned} &= 4 \int_0^a y \, dx \\ &= 4 \int_0^a \sqrt{a^2 - x^2} \, dx \\ &= 4 \left[\frac{x}{2} \sqrt{a^2 - x^2} + \frac{a^2}{2} \sin^{-1} \frac{x}{a} \right]_0^a \\ &= 4 \left[\left(\frac{a}{2} \times 0 + \frac{a^2}{2} \sin^{-1} 1 \right) - 0 \right] \\ &= 4 \left(\frac{a^2}{2} \right) \left(\frac{\pi}{2} \right) = \pi a^2 \text{ sq. units} \end{aligned}$$

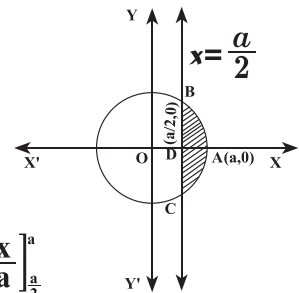


2 Ans :-

From the figure ,

Required area = 2(area of the region ABDA)

$$\begin{aligned} &= 2 \int_{\frac{a}{2}}^a y \, dx \\ &= 2 \int_{\frac{a}{2}}^a \sqrt{a^2 - x^2} \, dx \\ &= 2 \left[\frac{x}{2} \sqrt{a^2 - x^2} + \frac{a^2}{2} \sin^{-1} \frac{x}{a} \right]_{\frac{a}{2}}^a \\ &= 2 \left[\frac{a}{2} \times 0 - \frac{a}{4} \times \frac{\sqrt{3a^2}}{2} + \frac{a^2}{2} \left(\sin^{-1} 1 - \sin^{-1} \frac{1}{2} \right) \right] \\ &= 2 \left[\frac{-\sqrt{3}}{8} a^2 + \frac{a^2}{2} \left(\frac{\pi}{2} - \frac{\pi}{6} \right) \right] \\ &= 2 \left[\frac{-\sqrt{3}}{8} a^2 + \frac{a^2}{2} \times \frac{\pi}{3} \right] = a^2 \left[\frac{\pi}{3} - \frac{\sqrt{3}}{4} \right] \text{ sq. units} \end{aligned}$$



3 Ans :-

Given curves are

$$x^2 = y \dots\dots\dots(1)$$

$$\text{and } y = |x| \dots\dots\dots(2)$$

From (2)

$$y = |x| = \begin{cases} x, & \text{when } x \geq 0 \\ -x, & \text{when } x < 0 \end{cases}$$

on solving (1) and (2), we get

curve $x^2 = y$ and $y = x$ intersect each other at O (0,0) and A(1,1).

and curve $x^2 = y$ and $y = -x$ intersect each other at O (0,0) and B(-1,1).

∴ shaded region is the required region .

Draw $AD \perp OX$ and $BC \perp OX'$.

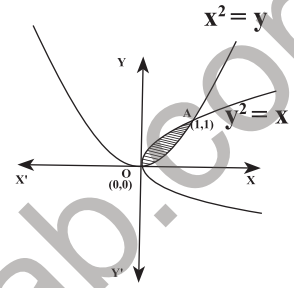
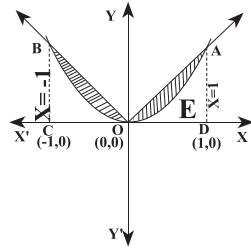
∴ Required area = 2(area of region OEAO)

$$= 2 \int_0^1 (y_1 - y_2) dx$$

$$= 2 \int_0^1 y dx (\text{for the line OA}) - 2 \int_0^1 y dx (\text{for the parabola})$$

$$= 2 \int_0^1 x dx - 2 \int_0^1 x^2 dx = 2 \left[\frac{x^2}{2} \right]_0^1 - 2 \left[\frac{x^3}{3} \right]_0^1$$

$$= 2 \left(\frac{1}{2} - 0 \right) - 2 \left(\frac{1}{3} - 0 \right) = 1 - \frac{2}{3} = \frac{1}{3} \text{ sq. units}$$



Given parabolas are

$$x^2 = y \dots\dots\dots(1)$$

$$\text{and } y^2 = x \dots\dots\dots(2)$$

on solving (1) and (2)

points of intersection

are O(0,0) and A(1,1).

∴ Required area

$$= \int_0^1 (y_1 - y_2) dx = \int_0^1 (\sqrt{x} - x^2) dx$$

$$= \left[\frac{2}{3} x^{3/2} - \frac{x^3}{3} \right]_0^1 = \frac{2}{3} - \frac{1}{3} = \frac{1}{3} \text{ sq. units}$$

6 Ans :-

Given curves are

$$x^2 + y^2 = 8x \dots\dots\dots(1)$$

$$\text{and } y^2 = 4x \dots\dots\dots(2)$$

From (1) and (2)

$$x^2 + 4x = 8x$$

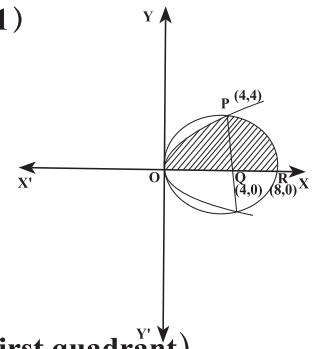
$$\text{or, } x^2 - 4x = 0 \Rightarrow x = 0, 4$$

∴ When $x = 0$ then $y = 0$

When $x = 4$ then $y = 4$ (in first quadrant)

∴ Area of region OPRQO =

Area of region OPQO + Area of region QPRQ



4 Ans :-

Given curves are

$$y^2 = 4x \dots\dots\dots(1)$$

$$\text{and } x + y = 3 \dots\dots\dots(2)$$

From (1) and (2)

$$y^2 = 4(3 - y)$$

$$\Rightarrow y^2 + 4y - 12 = 0$$

$$\Rightarrow y = -6, 2$$

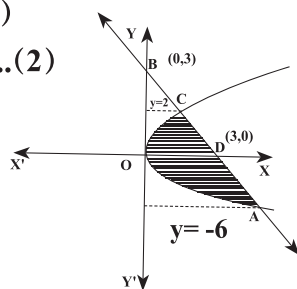
∴ Area of shaded region

i.e. Area of region OCDAO

$$= \int_{-6}^2 (x_1 - x_2) dy = \int_{-6}^2 \left[(3 - y) - \frac{y^2}{4} \right] dy$$

$$= \left[3y - \frac{y^2}{2} - \frac{y^3}{12} \right]_{-6}^2 = \left(6 - 2 - \frac{8}{12} \right) - \left(-18 - 18 - \frac{-216}{12} \right)$$

$$= \left(\frac{10}{3} + 18 \right) = \frac{64}{3} \text{ sq. units}$$



5 Ans :-

$$= 2 \left[\frac{2}{3} x^{3/2} \right]_0^4 + \int_0^4 \sqrt{4^2 - t^2} dt$$

(Put $x - 4 = t$
∴ $dx = dt$
if $x = 4$, $t = 0$
if $x = 8$, $t = 4$)

$$= \frac{4}{3} (4^{3/2} - 0) + \left[\frac{t}{2} \sqrt{4^2 - t^2} + \frac{16}{2} \sin^{-1} \frac{t}{4} \right]_0^4$$

$$= \frac{4}{3} \times 8 + [(0 + 8\sin^{-1} 1) - (0 + 8\sin^{-1} 0)]$$

$$= \frac{32}{3} + \frac{8\pi}{2} - 0 = \frac{32}{3} + 4\pi$$

$$= \frac{4}{3} (8 + 3\pi) \text{ sq. units}$$

7 Ans

Given circles are

$$x^2 + y^2 = 1 \dots\dots\dots(1)$$

and $(x - 1)^2 + y^2 = 1 \dots\dots\dots(2)$

centre of circle(1) is (0,0) and

radius = 1 unit

centre of (2) is (1,0) and radius = 1 unit

by (1) - (2), we get $2x - 1 = 0$

$$\Rightarrow x = \frac{1}{2}$$

∴ From (1), when $x = \frac{1}{2}$, $y^2 = \frac{3}{4}$

$$\therefore y = \pm \frac{\sqrt{3}}{2}$$

∴ Required area = 2 × area of region OABO

$$= 2 \int_0^{\frac{\sqrt{3}}{2}} (x_1 - x_2) dy$$

$$= 2 \int_0^{\frac{\sqrt{3}}{2}} [\sqrt{1 - y^2} - (1 - \sqrt{1 - y^2})] dy$$

$$\left[\begin{array}{l} \text{From eqn(1), } x = \pm \sqrt{1 - y^2}, \therefore \text{ For arc AB } x = \sqrt{1 - y^2} \\ \text{From eqn(2), } x - 1 = \pm \sqrt{1 - y^2}, \therefore \text{ For arc OA } x = 1 - \sqrt{1 - y^2} \end{array} \right]$$

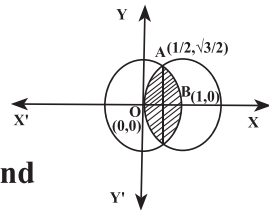
$$= 4 \int_0^{\frac{\sqrt{3}}{2}} \sqrt{1 - y^2} dy - 2 \int_0^{\frac{\sqrt{3}}{2}} 1 dy$$

$$= 4 \left[\frac{y}{2} \sqrt{1 - y^2} + \frac{1}{2} \sin^{-1} y \right]_0^{\frac{\sqrt{3}}{2}} - 2[y]_0^{\frac{\sqrt{3}}{2}}$$

$$= 2 \left[\frac{\sqrt{3}}{2} \cdot \frac{1}{2} + \sin^{-1} \frac{\sqrt{3}}{2} \right] - 0 - 2 \left(\frac{\sqrt{3}}{2} - 0 \right)$$

$$= \frac{\sqrt{3}}{2} + \frac{2\pi}{3} - \sqrt{3}$$

$$= \left(\frac{2\pi}{3} - \frac{\sqrt{3}}{2} \right) \text{ sq. units}$$



8 Ans :-

Equation of side AB is

$$y - 0 = \frac{5 - 0}{4 - 2} (x - 2)$$

or $y = \frac{5}{2}(x - 2) \dots\dots\dots(1)$

Equation of side BC is

$$y - 5 = \frac{3 - 5}{6 - 4} (x - 4)$$

or, $y - 5 = \frac{-2}{2} (x - 4)$

or, $y - 5 = -x + 4$ or, $y = -x + 9 \dots\dots\dots(2)$

Equation of side AC is

$$y - 0 = \frac{3 - 0}{6 - 2} (x - 2)$$

or, $y = \frac{3}{4}(x - 2) \dots\dots\dots(3)$

From B, draw $BP \perp OX$ and from C draw $CQ \perp OX$.

∴ Area of $\Delta ABC = \text{ar}(\Delta APB) + \text{ar}(\text{trapezium BPQC}) - \text{ar}(\Delta AQC)$

$$= \int_2^4 y_{AB} dx + \int_4^6 y_{BC} dx - \int_2^6 y_{AC} dx$$

$$= \int_2^4 \frac{5}{2}(x - 2) dx + \int_4^6 (-x + 9) dx - \int_2^6 \frac{3}{4}(x - 2) dx$$

$$= \frac{5}{2} \left[\frac{x^2}{2} - 2x \right]_2^4 + \left[-\frac{x^2}{2} + 9x \right]_4^6 - \frac{3}{4} \left[\frac{x^2}{2} - 2x \right]_2^6$$

$$= \frac{5}{2} [0 + 2] + [36 - 28] - \frac{3}{4} [6 - (-2)]$$

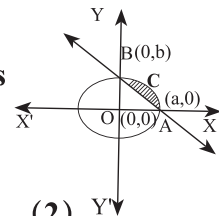
$$= 5 + 8 - 6 = 7 \text{ sq. units}$$

9. Ans

Given equation of ellipse is

$$\frac{x^2}{a^2} + \frac{y^2}{b^2} = 1 \dots\dots\dots(1)$$

and line is $\frac{x}{a} + \frac{y}{b} = 1 \dots\dots\dots(2)$



we have to find the area of shaded region

∴ Area of region ABCA = $\int_0^a (y_1 - y_2) dx$

$$= \int_0^a y dx (\text{for ellipse}) - \int_0^a y dx (\text{for line})$$

$$= \int_0^a \frac{b}{a} \sqrt{a^2 - x^2} dx - \int_0^a \frac{b(a - x)}{a} dx$$

$$= \frac{b}{a} \left[\frac{x \sqrt{a^2 - x^2}}{2} + \frac{a^2}{2} \sin^{-1} \frac{x}{a} \right]_0^a - \frac{b}{a} \left[ax - \frac{x^2}{2} \right]_0^a$$

$$= \frac{ab}{2} (\sin^{-1} 1 - \sin^{-1} 0) - \left(ab - \frac{ab}{2} \right)$$

$$= \left(\frac{\pi ab}{4} - \frac{ab}{2} \right) \text{ sq. unit}$$

∴ Required area = $\left(\frac{\pi ab}{4} - \frac{ab}{2} \right) \text{ sq. unit}$

MCQ:- (बहुविकल्पीय प्रश्न) -

Q 1 The order of the differential equation

$$2x^2 \frac{d^2y}{dx^2} - 3 \frac{dy}{dx} + y = 0 \text{ is}$$

अवकल समीकरण $2x^2 \frac{d^2y}{dx^2} - 3 \frac{dy}{dx} + y = 0$ की

कोटि है:

- (a) 2 (b) 1
(c) 0 (d) Not defined
(अपरिभाषित)

Q 2 The differential equation representing the family of curve $y^2 = 2c(x + \sqrt{c})$, where c is a positive parameter, is of

$y^2 = 2c(x + \sqrt{c})$, जहाँ C एक घनात्मक प्राचल है, से निरूपित होने वाले वक्र-कुल का अवकल

समीकरण निम्नांकित में किस प्रकार का होगा?

- (a) order 1, degree 3 (b) order 2, degree 3
(कोटि 1) (घात 3) (कोटि 2) (घात 3)
(c) order 3, degree 3 (d) order 4, degree 4
(कोटि 3) (घात 3) (कोटि 4) (घात 4)

Q 3 A solution of the differential equation

$$\left(\frac{dy}{dx}\right)^2 - x \frac{dy}{dx} + y = 0 \text{ is.}$$

अवकल समीकरण $\left(\frac{dy}{dx}\right)^2 - x \frac{dy}{dx} + y = 0$ का समाधान है:

- (a) $y = 2$ (b) $y = 2x$
(c) $y = 2x - 4$ (d) $y = 2x^2 - 4$

Q 4 The order of the differential equation

$$\frac{d^2y}{dx^2} = \sqrt{1 + \left(\frac{dy}{dx}\right)^2} \text{ is}$$

अवकल समीकरण $\frac{d^2y}{dx^2} = \sqrt{1 + \left(\frac{dy}{dx}\right)^2}$ की कोटि है:

- (a) 1 (b) 2
(c) 3 (d) 4

Q 5 The degree of the differential equation

$$\left(\frac{d^3y}{dx^3}\right)^2 - 3 \frac{d^2y}{dx^2} + 2 \left(\frac{dy}{dx}\right)^4 = y^4 \text{ is}$$

अवकल समीकरण $\left(\frac{d^3y}{dx^3}\right)^2 - 3 \frac{d^2y}{dx^2} + 2 \left(\frac{dy}{dx}\right)^4 = y^4$ का घात है :

- (a) 4 (b) 2
(c) 3 (d) 1

Q 6 The order and degree of the differential

equation $\frac{d^4y}{dx^4} = y + \left(\frac{dy}{dx}\right)^4$ are respectively

अवकल समीकरण $\frac{d^4y}{dx^4} = y + \left(\frac{dy}{dx}\right)^4$ की कोटि एवं घात क्रमशः है:

- (a) 2,2 (b) 4,1
(c) 2,4 (d) 4,2

Q 7 Integrating factor of the differential equation

$$\frac{dy}{dx} + y = \frac{1+y}{x} \text{ is}$$

अवकल समीकरण $\frac{dy}{dx} + y = \frac{1+y}{x}$ का समाकलन गुणांक है:

- (a) e^x (b) xe^x
(c) e^x/x (d) x/e^x

Q 8 What is the integrating factor of

$$\frac{dy}{dx} + y \sec x = \tan x$$

$\frac{dy}{dx} + y \sec x = \tan x$ का समाकलन गुणांक क्या है?

- (a) $\sec x + \tan x$ (b) $\log(\sec x + \tan x)$
(c) $e^{\sec x}$ (d) $\sec x$

Q 9 The general solution of the differential equation

$$\frac{dy}{dx} = \frac{y}{x} \text{ is}$$

अवकल समीकरण $\frac{dy}{dx} = \frac{y}{x}$ का व्यापक हल है:

- (a) $y = k/x$ (b) $y = kx$
(c) $y = k \log x$ (d) $\log y = kx$

Q 10 If a and b are the order and degree of the differential equation

$$y \frac{dy}{dx} + x^3 \left(\frac{d^2y}{dx^2}\right) + xy = \cos x, \text{ then}$$

यदि a तथा b अवकल समीकरण

$$y \frac{dy}{dx} + x^3 \left(\frac{d^2y}{dx^2}\right) + xy = \cos x$$

के कोटि तथा घात हैं, तो

- (a) $a < b$ (b) $a = b$
 (c) $a > b$ (d) None of these
 (इनमें से कोई नहीं)

Very Short Question (2 Marks)

Q 1 Find the differential equation of the family of curves $x^2 + y^2 = 2ax$.

वक्रों के कुल $x^2 + y^2 = 2ax$ का अवकल समीकरण ज्ञात कीजिए।

Q 2 Form the differential equation of the family of parabolas having vertex at origin and axis along positive y-axis.

ऐसे परवलयों के कुल का अवकल समीकरण निर्मित कीजिए, जिनका शीर्ष मूल-बिन्दु पर है और जिनका अक्ष धनात्मक y-अक्ष की दिशा में है।

Solve the following differential equations :-

निम्नलिखित अवकल समीकरणों को हल करें :-

Q 3 $\frac{dy}{dx} = \frac{1+y^2}{1+x^2}$

Q 4 $\frac{dy}{dx} = \sqrt{4-y^2}, -2 < y < 2$

Q 5 $\frac{dy}{dx} = \frac{x-1}{y+2} (y \neq -2)$

Q 6 $\frac{dy}{dx} = 1 - x + y - xy$

Q 7 $\frac{dy}{dx} = (1+x^2)(1+y^2)$

Q 8 $\frac{dy}{dx} = \frac{1-\cos x}{1+\cos x}$

Q 9 $x \frac{dy}{dx} - y = x^2$

Q 10 $x \frac{dy}{dx} = x + y$

Short Question (3 Marks)

Solve ; - (हल करें :-)

Q 1 $\sec^2 x \tan y dx + \sec^2 y \tan x dy = 0$

Q 2 $y \log y dx - x dy = 0$

Q 3 $e^x \tan y dx + (1 - e^x) \sec^2 y dy = 0$

Q 4 $x dy - y dx = \sqrt{x^2 + y^2} dx$

Q 5 $\frac{dy}{dx} - y = \cos x$

Q 6 $x \frac{dy}{dx} + 2y = x^2$

Q 7 $\frac{dy}{dx} + 2y = \sin x$

Q 8 $\frac{dy}{dx} + \frac{y}{x} = x^2$

Q 9 $\cos^2 x \frac{dy}{dx} + y = \tan x$

Q 10 $(1+x^2)dy + 2xydx = \cot x dx, (x \neq 0)$

Q 11 $(x+y) \frac{dy}{dx} = 1$

Q 12 $x \frac{dy}{dx} = y - x \tan \frac{y}{x}$

Long Question (5 Marks)

Solve (हल करें) :-

Q 1 $(1 + e^{x/y}) dx + e^{x/y} (1 - \frac{x}{y}) dy = 0$

Q 2. $(x \cos \frac{y}{x} + y \sin \frac{y}{x}) y dx = (y \sin \frac{y}{x} - x \cos \frac{y}{x}) x dy$

Q 3 $y dx + x \log(\frac{y}{x}) dy - 2x dy = 0$

Q 4 $(x^2 - 1) \frac{dy}{dx} + 2xy = \frac{2}{x^2 - 1}$

Q 5 $(1 + x^2) \frac{dy}{dx} + y = \tan^{-1} x$

Q 6 $\frac{dy}{dx} - 2y = \cos 3x$

Q 7 $(x \log x) \frac{dy}{dx} + y = \frac{2}{x} \log x$

Q 8 $\frac{dy}{dx} - 3y \cot x = \sin 2x$, given that $y=2$, when $x = \frac{\pi}{2}$

Q 9 $(1 + y^2)dx = (\tan^{-1}y - x)dy$

Q 10 $\frac{dy}{dx} + xy = xy^3$

MCQ 1-Marks Solution

Ans :-

1 - (a) 2 - (a) 3 - (c) 4 - (b) 5 - (b) 6 - (b) 7 - (c)

8 - (a) 9 - (b) 10 - (c)

2-Marks Solution

1 Ans :-

Given curve is $x^2 + y^2 = 2ax$ (1)

दिया गया वक्र है $x^2 + y^2 = 2ax$ (1)

on differentiating both sides w.r. to x,

दोनों तरफ x के सापेक्ष अवकलन करने पर,

$$2x + 2y \frac{dy}{dx} = 2a \text{(2)}$$

∴ From (1) and (2)

(1) तथा (2) से ,

$$x^2 + y^2 = x \left(2x + 2y \frac{dy}{dx} \right)$$

$$\text{or, } x^2 + y^2 = 2x^2 + 2xy \frac{dy}{dx}$$

$$\text{or, } 2xy \frac{dy}{dx} + x^2 - y^2 = 0$$

which is the required differential equation .

यही अभीष्ट अवकल समीकरण है ।

2 Ans :-

Let P denote the family of parabolas and let (0,a) be the focus of a member of the given family , where a is an arbitrary constant.

माना कि P परवलय के कुल है तथा (0,a) नाभि का नियामक है,जहाँ a कोई स्वेच्छ अचर है ।

∴ Equation of family P is

अतः वक्रों के कुल P का समीकरण है

$$x^2 = 4ay \text{(1)}$$

Differentiating both sides of equation (1) w.r. to x, we get,

समीकरण (1) को दोनों तरफ x के सापेक्ष अवकलित करने पर,

$$2x = 4a \frac{dy}{dx}$$

$$\therefore 2x = \frac{x^2}{y} \frac{dy}{dx} \quad [\text{from (1), } 4a = \frac{x^2}{y}]$$

$$\text{or, } 2y = x \frac{dy}{dx}$$

$$\text{or, } x \frac{dy}{dx} - 2y = 0$$

which is the differential equation of the given family of parabolas.

यही दिये गए परवलयों के कुल का अवकल समीकरण है ।

3 Ans :-

$$\text{Given differential equation is } \frac{dy}{dx} = \frac{1 + y^2}{1 + x^2}$$

दिया गया अवकल समीकरण है

$$\text{or, } \frac{dy}{1 + y^2} = \frac{dx}{1 + x^2}$$

Integrating both sides, we get

दोनों तरफ समाकलित करने पर,

$$\int \frac{dy}{1 + y^2} = \int \frac{dx}{1 + x^2}$$

$$\text{or, } \tan^{-1}y = \tan^{-1}x + c$$

$$\text{or, } \tan^{-1}y - \tan^{-1}x = c$$

$$\text{or, } \tan^{-1} \frac{y - x}{1 + yx} = c$$

$$\text{or, } \frac{y - x}{1 + xy} = \text{tanc}$$

$$\text{or, } \frac{y - x}{1 + xy} = k \quad (\text{where } k = \text{tanc})$$

which is the required general solution.

यही अभीष्ट व्यापक हल है ।

4 Ans :-

दिया गया अवकल समीकरण है

$$\text{Given differential equation is } \frac{dy}{dx} = \sqrt{4 - y^2}$$

$$\text{or, } \frac{dy}{\sqrt{4 - y^2}} = dx$$

on integrating both sides, we get

दोनों तरफ समाकलित करने पर

$$\int \frac{dy}{\sqrt{4 - y^2}} = \int dx$$

$$\text{or, } \int \frac{dy}{\sqrt{2^2 - y^2}} = \int dx$$

$$\text{or, } \sin^{-1} \left(\frac{y}{2} \right) = x + c$$

or, $\frac{y}{2} = \sin(x + c)$

$\therefore y = 2\sin(x + c)$

which is the required general solution.

यही अभीष्ट व्यापक हल है।

5 Ans :-

दिया गया अवकल समीकरण है

Given differential equation is $\frac{dy}{dx} = \frac{x-1}{y+2}$

or $(y+2)dy = (x-1)dx$

दोनों तरफ समाकलित करने पर

integrating both sides, we get

$\int (y+2)dy = \int (x-1)dx$

or, $\frac{y^2}{2} + 2y = \frac{x^2}{2} - x + c$

or, $\frac{y^2 + 4y}{2} = \frac{x^2 - 2x + 2c}{2}$

$y^2 + 4y = x^2 - 2x + k$, where $k = 2c$

$y^2 + 4y - x^2 + 2x = k$

Which is the required general solution.

यही अभीष्ट व्यापक हल है।

6 Ans :-

दिया गया अवकल समीकरण है

Given differential equation is

$\frac{dy}{dx} = 1 - x + y - xy$

or, $\frac{dy}{dx} = 1(1-x) + y(1-x)$

or, $\frac{dy}{dx} = (1-x)(1+y)$

or, $\frac{dy}{1+y} = (1-x)dx$

दोनों तरफ समाकलित करने पर

integrating both sides, we get

$\int \frac{dy}{1+y} = \int (1-x)dx$

or, $\log|1+y| = x - \frac{x^2}{2} + c$

Which is the required general solution.

यही अभीष्ट व्यापक हल है।

7 Ans :-

दिया गया अवकल समीकरण है

Given differential equation is

$\frac{dy}{dx} = (1+x^2)(1+y^2)$

or, $\frac{dy}{1+y^2} = (1+x^2)dx$

दोनों तरफ समाकलित करने पर

integrating both sides, we get

$\int \frac{dy}{1+y^2} = \int (1+x^2)dx$

or, $\tan^{-1}y = x + \frac{x^3}{3} + c$

Which is the required general solution.

यही अभीष्ट व्यापक हल है।

8 Ans :-

$\frac{dy}{dx} = \frac{1 - \cos x}{1 + \cos x}$

or, $dy = \left(\frac{1 - \cos x}{1 + \cos x}\right)dx$

or, $dy = \frac{2\sin^2 \frac{x}{2}}{2\cos^2 \frac{x}{2}} dx$

or, $dy = \tan^2 \frac{x}{2} dx$

or, $dy = \left(\sec^2 \frac{x}{2} - 1\right)dx$

दोनों तरफ समाकलित करने पर

integrating both sides, we get

$\int dy = \int \left(\sec^2 \frac{x}{2} - 1\right)dx$

or, $y = \frac{\tan \frac{x}{2}}{\frac{1}{2}} - x + c$

or, $y = 2\tan \frac{x}{2} - x + c$

Which is the required general solution

यही अभीष्ट व्यापक हल है।

9 Ans :-

दिया गया अवकल समीकरण है

Given differential equation is $x \frac{dy}{dx} - y = x^2$

or $\frac{dy}{dx} - \frac{1}{x} \cdot y = x \dots\dots\dots(1)$

यह $\frac{dy}{dx} + Py = Q$ के रूप का रैखिक अवकल

समीकरण है, जहाँ $P = -\frac{1}{x}$, तथा $Q = X$

which is a linear differential equation of the

from $\frac{dy}{dx} + Py = Q$, where $P = -\frac{1}{x}$, $Q = x$

Now I.F. = $e^{\int P dx} = e^{\int -\frac{1}{x} dx} = e^{-\log x} = e^{\log \frac{1}{x}}$

$$\Rightarrow \text{I.F.} = \frac{1}{x}$$

\therefore Solution of the d.e.(1) will be

अतः अवकल समीकरण (1) का हल होगा :-

$$y \cdot \frac{1}{x} = \int \frac{1}{x} \cdot x dx + c$$

$$\text{or, } \frac{y}{x} = x + c \Rightarrow y = x^2 + cx$$

यही अभीष्ट व्यापक हल है।

Which is the required general solution.

10 Ans :-

दिया गया अवकल समीकरण है

Given differential equation is $x \frac{dy}{dx} = x + y$

$$\text{or, } \frac{dy}{dx} = 1 + \frac{y}{x}$$

$$\text{or, } \frac{dy}{dx} - \frac{1}{x} \cdot y = 1 \dots\dots\dots(1)$$

which is a linear differential equation of the form

$$\frac{dy}{dx} + Py = Q, \text{ where } P = -\frac{1}{x}, Q = 1$$

यह $\frac{dy}{dx} + Py = Q$ के रूप का रैखिक अवकल

समीकरण है जहाँ $P = -\frac{1}{x}$, $Q = 1$

$$\text{Now, I.F.} = e^{\int P dx} = e^{\int -\frac{1}{x} dx} = e^{-\log x} = e^{\log \frac{1}{x}} = \frac{1}{x}$$

\therefore Solution of the d.e.(1) will be

अतः अवकल समीकरण (1) का हल होगा :-

$$y \cdot \frac{1}{x} = \int \frac{1}{x} \cdot 1 dx + c$$

$$\text{or, } \frac{y}{x} = \log|x| + c$$

$$\text{or, } y = x \log|x| + cx$$

Which is the required general solution.

यही अभीष्ट व्यापक हल है।

1 Ans :-

दिया गया अवकल समीकरण है

Given differential equation is

$$\sec^2 x \tan y dx + \sec^2 y \tan x dy = 0$$

dividing by $\tan x \cdot \tan y$, we get

$$\frac{\sec^2 x}{\tan x} dx + \frac{\sec^2 y}{\tan y} dy = 0$$

समाकलित करने पर

Integrating, we get

$$\int \frac{\sec^2 x}{\tan x} dx + \int \frac{\sec^2 y}{\tan y} dy = \log c$$

$$\text{or, } \log|\tan x| + \log|\tan y| = \log c$$

$$\text{or, } \log|\tan x \cdot \tan y| = \log c$$

$$\text{or, } |\tan x \cdot \tan y| = c$$

$$\therefore \tan x \cdot \tan y = \pm c$$

$$\text{or, } \tan x \cdot \tan y = k \text{ where } k = \pm c$$

Which is the required general solution.

यही अभीष्ट व्यापक हल है।

2 Ans :-

दिया गया अवकल समीकरण है

Given differential equation is $y \log y dx - x dy = 0$

$$\text{or, } x dy = y \log y dx$$

$$\text{or, } \frac{dy}{y \log y} = \frac{dx}{x} \dots\dots\dots(1)$$

दोनों तरफ समाकलित करने पर

Integrating both sides, we get

$$\int \frac{dy}{y \log y} = \int \frac{dx}{x}$$

$$\text{or, } \log(\log y) = \log|x| + \log|c|$$

$$\Rightarrow \log(\log y) = \log|cx|$$

$$\Rightarrow \log y = cx \Rightarrow y = e^{cx}$$

Which is the required general solution.

यही अभीष्ट व्यापक हल है।

3 Ans :-

दिया गया अवकल समीकरण है

Given differential equation is

$$e^x \tan y dx + (1 - e^x) \sec^2 y dy = 0$$

$$\text{or, } \frac{e^x}{1 - e^x} dx + \frac{\sec^2 y}{\tan y} dy = 0$$

समाकलित करने पर

Integrating, we get

$$\int \frac{e^x}{1-e^x} dx + \int \frac{\sec^2 y}{\tan y} dy = \log c$$

$$\text{or, } -\log(1-e^x) + \log \tan y = \log c$$

$$\text{or, } \log \frac{\tan y}{1-e^x} = \log c$$

$$\text{or, } \frac{\tan y}{1-e^x} = c \Rightarrow \tan y = c(1-e^x)$$

Which is the required general solution.

यही अभीष्ट व्यापक हल है।

4 Ans ; -

दिया गया अवकल समीकरण है

Given differential equation is

$$x dy - y dx = \sqrt{x^2 + y^2} dx$$

$$\text{or, } x dy = (y + \sqrt{x^2 + y^2}) dx$$

$$\text{or, } \frac{dy}{dx} = \frac{y + \sqrt{x^2 + y^2}}{x} \dots\dots\dots(1)$$

Which is a homogeneous differential equation

यह एक समघातीय अवकल समीकरण है।

$$\text{put } y = vx \quad \therefore \frac{dy}{dx} = v + x \frac{dv}{dx}$$

∴ Equation (1) becomes

∴ समीकरण(1) हो जाता है

$$v + x \frac{dv}{dx} = \frac{vx + \sqrt{x^2 + v^2 x^2}}{x}$$

$$\text{or, } x \frac{dv}{dx} = \sqrt{1 + v^2} \quad \text{or, } \frac{dv}{\sqrt{1 + v^2}} = \frac{dx}{x}$$

समाकलित करने पर

Integrating, we get

$$\log|v + \sqrt{1 + v^2}| = \log|x| + \log k$$

$$\Rightarrow |v + \sqrt{1 + v^2}| = k|x|$$

$$\Rightarrow v + \sqrt{1 + v^2} = \pm kx = cx, \text{ where } c = \pm k$$

$$\therefore \frac{y}{x} + \sqrt{1 + \frac{y^2}{x^2}} = cx$$

$$\Rightarrow y + \sqrt{x^2 + y^2} = cx^2$$

Which is the required general solution.

यही अभीष्ट व्यापक हल है।

5 Ans ; -

दिया गया अवकल समीकरण है

$$\text{Given differential equation is } \frac{dy}{dx} - y = \cos x \dots(1)$$

which is a linear differential equation of the form $\frac{dy}{dx} + Py = Q$, where $P = -1$, $Q = \cos x$

यह $\frac{dy}{dx} + Py = Q$ के रूप का रैखिक अवकल

समीकरण है जहाँ $P = -1$, $Q = \cos x$

$$\therefore \text{I.F} = e^{\int p dx} = e^{\int -1 dx} = e^{-x}$$

∴ Solution of d.e. (1), will be

अतः अवकल समीकरण (1) का हल होगा :-

$$y \cdot e^{-x} = \int e^{-x} \cdot \cos x dx + c \dots\dots\dots(2)$$

$$\text{Let } I = \int e^{-x} \cos x dx$$

$$= \cos x \cdot (-e^{-x}) - \int -e^{-x} (-\sin x) dx$$

$$= -e^{-x} \cos x - \int e^{-x} \sin x dx$$

$$= -e^{-x} \cos x - \left[\sin x (-e^{-x}) - \int \cos x (-e^{-x}) dx \right]$$

$$= -e^{-x} \cos x + e^{-x} \sin x - \int e^{-x} \cos x dx$$

$$\text{or, } I = e^{-x} (\sin x - \cos x) - I$$

$$\text{or, } 2I = e^{-x} (\sin x - \cos x)$$

$$\therefore I = \frac{e^{-x} (\sin x - \cos x)}{2}$$

$$\therefore \text{From eqn (2), } y \cdot e^{-x} = \frac{e^{-x} (\sin x - \cos x)}{2} + c$$

$$\therefore y = \frac{\sin x - \cos x}{2} + ce^x$$

Which is the required general solution.

यही अभीष्ट व्यापक हल है।

6 Ans : -Given differential equation is

दिया गया अवकल समीकरण है

$$x \frac{dy}{dx} + 2y = x^2 \quad \text{or, } \frac{dy}{dx} + \frac{2}{x} y = x \dots\dots(1)$$

which is a linear differential equation of the form $\frac{dy}{dx} + Py = Q$ where $P = \frac{2}{x}$, $Q = x$

यह $\frac{dy}{dx} + Py = Q$ के रूप का रैखिक अवकल

समीकरण है, जहाँ $P = \frac{2}{x}$, $Q = x$

$$\therefore \text{I.F.} = e^{\int P dx} = e^{\int \frac{2}{x} dx} = e^{2 \log x} = e^{\log x^2} = x^2$$

∴ Solution of d.e. (1) will be

∴ अवकल समीकरण (1) का हल होगा

$$y \cdot x^2 = \int x^2 \cdot x dx + c$$

$$\text{or, } y \cdot x^2 = \frac{x^4}{4} + c$$

$$\therefore y = \frac{x^2}{4} + \frac{c}{x^2}$$

Which is the general solution of given d.e.

यही अभीष्ट व्यापक हल है।

7 Ans :-

दिया गया अवकल समीकरण है

$$\text{Given d.e. is } \frac{dy}{dx} + 2y = \sin x \dots\dots\dots(1)$$

which is a linear differential equation of the form

$$\frac{dy}{dx} + Py = Q, \text{ where } P = 2, Q = \sin x$$

यह $\frac{dy}{dx} + Py = Q$ के रूप का रैखिक अवकल

समीकरण है, जहाँ $P = 2, Q = \sin x$

$$\therefore \text{I.F.} = e^{\int P dx} = e^{\int 2 dx} = e^{2x}$$

\therefore Solution of d.e. (1) will be

\therefore अवकल समीकरण (1) का हल होगा

$$y \cdot e^{2x} = \int e^{2x} \cdot \sin x dx + c \dots\dots\dots(2)$$

$$\text{Let } I = \int e^{2x} \sin x dx$$

$$\begin{aligned} &= \sin x \cdot \frac{e^{2x}}{2} - \int \frac{e^{2x}}{2} \cdot \cos x dx \\ &= \frac{e^{2x} \cdot \sin x}{2} - \frac{1}{2} \left[\cos x \left(\frac{e^{2x}}{2} \right) - \int \frac{e^{2x}}{2} \cdot (-\sin x) dx \right] \end{aligned}$$

$$= \frac{e^{2x} \cdot \sin x}{2} - \frac{e^{2x} \cdot \cos x}{4} - \frac{1}{4} \int e^{2x} \sin x$$

$$\text{or, } I = \frac{e^{2x} (2 \sin x - \cos x)}{4} - \frac{1}{4} I$$

$$\text{or, } I + \frac{1}{4} I = \frac{e^{2x} (2 \sin x - \cos x)}{4}$$

$$\text{or, } \frac{5}{4} I = \frac{e^{2x} (2 \sin x - \cos x)}{4}$$

$$\therefore I = \frac{e^{2x} (2 \sin x - \cos x)}{5}$$

\therefore From eqn(2)

\therefore समी.(2)से,

$$y \cdot e^{2x} = \frac{e^{2x} (2 \sin x - \cos x)}{5} + c$$

$$\therefore y = \frac{1}{5} (2 \sin x - \cos x) + ce^{-2x}$$

which is the required general solution.

यही अभीष्ट व्यापक हल है।

8 Ans :-

दिया गया अवकल समीकरण है

$$\text{Given d.e. is } \frac{dy}{dx} + \frac{y}{x} = x^2 \dots\dots\dots(1)$$

which is a linear differential equation of the form

$$\frac{dy}{dx} + Py = Q, \text{ where } P = \frac{1}{x}, Q = x^2$$

यह $\frac{dy}{dx} + Py = Q$ के रूप का रैखिक अवकल

समीकरण है जहाँ $P = \frac{1}{x}, Q = x^2$

$$\therefore \text{I.F.} = e^{\int P dx} = e^{\int \frac{1}{x} dx} = e^{\log x} = x$$

\therefore Solution of equation (1) will be

अतः समीकरण (1) का हल होगा :-

$$y \cdot x = \int x \cdot x^2 dx + c$$

$$\text{or, } xy = \int x^3 dx + c$$

$$\text{or, } xy = \frac{x^4}{4} + c$$

$$\text{or, } y = \frac{x^3}{4} + \frac{c}{x}$$

which is the required general solution .

यही अभीष्ट व्यापक हल है।

9 Ans :-

दिया गया अवकल समीकरण है

Given differential equation is

$$\cos^2 x \frac{dy}{dx} + y = \tan x$$

$$\text{or, } \frac{dy}{dx} + \sec^2 x \cdot y = \sec^2 x \cdot \tan x \dots\dots\dots(1)$$

which is a linear d.e. of the form $\frac{dy}{dx} + Py = Q$

where $P = \sec^2 x, Q = \sec^2 x \cdot \tan x$

यह $\frac{dy}{dx} + Py = Q$ के रूप का रैखिक अवकल

समीकरण है, जहाँ $P = \sec^2 x, Q = \sec^2 x \tan x$

$$\text{Now, I.F.} = e^{\int P dx} = e^{\int \sec^2 x dx} = e^{\tan x}$$

\therefore Solution of eqn(1) will be

अतः समीकरण (1) का हल होगा :-

$$y \cdot e^{\tan x} = \int e^{\tan x} \cdot \sec^2 x \cdot \tan x dx + c$$

$$\text{put } \tan x = t \therefore \sec^2 x dx = dt$$

$$\therefore y \cdot e^{\tan x} = \int t \cdot e^t dt + c$$

$$= t \int e^t dt - \int \left(\frac{d(t)}{dt} \int e^t dt \right) dt + c$$

$$\begin{aligned}
&= te^t - \int e^t dt + c \\
&= te^t - e^t + c \\
&= \tan x \cdot e^{\tan x} - e^{\tan x} + c \\
&= e^{\tan x} (\tan x - 1) + c \\
\therefore y &= (\tan x - 1) + ce^{-\tan x}
\end{aligned}$$

Which is the required general solution.

यही अभीष्ट व्यापक हल है।

10 Ans :-

दिया गया अवकल समीकरण है:-

Given differential equation is

$$(1 + x^2)dy + 2xydx = \cot x dx$$

$$\text{or, } (1 + x^2) \frac{dy}{dx} + 2xy = \cot x$$

$$\text{or, } \frac{dy}{dx} + \frac{2x}{1+x^2} \cdot y = \frac{\cot x}{1+x^2} \dots\dots\dots(1)$$

which is a linear d.e. of the form $\frac{dy}{dx} + Py = Q$

$$\text{where } P = \frac{2x}{1+x^2}, Q = \frac{\cot x}{1+x^2}$$

यह $\frac{dy}{dx} + Py = Q$ के रूप का रैखिक अवकल

$$\text{समीकरण है जहाँ } P = \frac{2x}{1+x^2}, Q = \frac{\cot x}{1+x^2}$$

$$\text{Now, I.F.} = e^{\int P dx} = e^{\int \frac{2x}{1+x^2} dx} = e^{\log(1+x^2)} = 1 + x^2$$

\therefore Solution of equation (1) will be

अतः समीकरण (1) का हल होगा :-

$$y(1 + x^2) = \int (1 + x^2) \cdot \frac{\cot x}{1 + x^2} dx + c$$

$$\text{or, } y(1 + x^2) = \int \cot x dx + c$$

$$\text{or, } y(1 + x^2) = \log|\sin x| + c$$

$$\therefore y = (1 + x^2)^{-1} \log|\sin x| + c(1 + x^2)^{-1}$$

Which is required general solution.

यही अभीष्ट व्यापक हल है।

11 Ans :-

$$(x + y) \frac{dy}{dx} = 1, \text{ or, } \frac{dx}{dy} = x + y$$

$$\text{or, } \frac{dx}{dy} - x = y \dots\dots\dots(1)$$

which is a linear d.e. of the form

$$\frac{dx}{dy} + Px = Q, \text{ where, } P = -1, Q = y$$

यह $\frac{dx}{dy} + Px = Q$ के रूप का रैखिक अवकल

समीकरण है जहाँ $P = -1, Q = y$

$$\therefore \text{I.F.} = e^{\int P dy} = e^{\int -1 dy} = e^{-y}$$

\therefore Solution of eqn(1) will be

अतः समीकरण (1) का हल होगा :-

$$x \cdot e^{-y} = \int ye^{-y} dy + c$$

$$\text{or, } x \cdot e^{-y} = -ye^{-y} - \int -e^{-y} dy + c$$

$$= -ye^{-y} - e^{-y} + c = -e^{-y}(1 + y) + c$$

$$\therefore x = -(1 + y) + ce^y$$

Which is the required general solution.

यही अभीष्ट व्यापक हल है।

$$\text{12 Ans :- Given d.e. is } x \frac{dy}{dx} = y - x \tan \frac{y}{x}$$

दिया गया अवकल समीकरण है

$$\frac{dy}{dx} = \frac{y}{x} - \tan \frac{y}{x} \dots\dots\dots(1)$$

which is a homogeneous differential equation

यह एक समघातीय अवकल समीकरण है।

\therefore Put $y = vx$

$$\therefore \frac{dy}{dx} = v + x \frac{dv}{dx}$$

\therefore Equation (1) becomes

समीकरण (1) हो जाता है

$$v + x \frac{dv}{dx} = v - \tan v$$

$$\Rightarrow x \frac{dv}{dx} = -\tan v$$

$$\text{or, } \frac{dv}{\tan v} = -\frac{dx}{x}$$

$$\Rightarrow \int \frac{dv}{\tan v} = -\int \frac{dx}{x}$$

$$\text{or, } \int \cot v dv = -\log|x| + \log c$$

$$\text{or, } \log(\sin v) + \log|x| = \log c$$

$$\Rightarrow \log|x \sin v| = \log c$$

$$\Rightarrow |x \sin v| = c$$

$$\Rightarrow x \sin v = \pm c = k \text{ (say)}$$

$$\Rightarrow x \sin \frac{y}{x} = k$$

Which is the required general solution.

यही अभीष्ट व्यापक हल है।

1 Ans :-

दिया गया अवकल समीकरण है

Given differential equation is

$$(1 + e^{\frac{x}{y}})dx + e^{\frac{x}{y}}\left(1 - \frac{x}{y}\right)dy = 0$$

$$\text{or, } \frac{dx}{dy} = -\frac{e^{\frac{x}{y}}\left(1 - \frac{x}{y}\right)}{1 + e^{\frac{x}{y}}} \dots\dots\dots(1)$$

which is a homogeneous differential equation

यह एक समघातीय अवकल समीकरण है।

$$\text{Put } x = vy \text{ , then } \frac{dx}{dy} = v + y \frac{dv}{dy}$$

∴ From eqn(1),

अतः समीकरण (1) से :-

$$v + y \frac{dv}{dy} = -\frac{e^v(1-v)}{1+e^v}$$

$$\begin{aligned} \therefore y \frac{dv}{dy} &= -\frac{e^v(1-v)}{1+e^v} - v \\ &= \frac{-e^v(1-v) - v(1+e^v)}{1+e^v} \end{aligned}$$

$$\text{or, } y \frac{dv}{dy} = -\frac{v+e^v}{1+e^v}$$

$$\text{or, } \frac{1+e^v}{v+e^v} dv = -\frac{dy}{y}$$

$$\Rightarrow \int \frac{1+e^v}{v+e^v} dv = -\int \frac{dy}{y}$$

$$\Rightarrow \log|v+e^v| = -\log|y| + c$$

$$\Rightarrow \log|y(v+e^v)| = c$$

$$\Rightarrow |y(v+e^v)| = e^c$$

$$\Rightarrow y\left(\frac{x}{y} + e^{\frac{x}{y}}\right) = \pm e^c = k(\text{say})$$

$$\therefore x + ye^{\frac{x}{y}} = k$$

Which is the required general solution .

यही अभीष्ट व्यापक हल है।

2 Ans :-

दिया गया अवकल समीकरण है-

Given differential equation is

$$y\left(x\cos\frac{y}{x} + y\sin\frac{y}{x}\right)dx = x\left(y\sin\frac{y}{x} - x\cos\frac{y}{x}\right)dy$$

$$\text{or, } y\left(x\cos\frac{y}{x} + y\sin\frac{y}{x}\right) = x\left(y\sin\frac{y}{x} - x\cos\frac{y}{x}\right)\frac{dy}{dx}$$

$$\text{or, } \frac{dy}{dx} = \frac{\left\{x\cos\frac{y}{x} + y\sin\left(\frac{y}{x}\right)\right\}y}{\left\{y\sin\frac{y}{x} - x\cos\frac{y}{x}\right\}x}$$

dividing num. and den. by x^2 , we get

अंश तथा हर को x^2 से विभाजित करने पर,

$$\frac{dy}{dx} = \frac{\left\{\cos\frac{y}{x} + \frac{y}{x}\sin\left(\frac{y}{x}\right)\right\}\frac{y}{x}}{\left\{\frac{y}{x}\sin\frac{y}{x} - \cos\frac{y}{x}\right\}} \dots\dots\dots(1)$$

$$\text{Put } y = vx \text{ , then } \frac{dy}{dx} = v + x \frac{dv}{dx}$$

$$\therefore \text{From (1), } v + x \frac{dv}{dx} = \frac{(\cos v + v\sin v)v}{v\sin v - \cos v}$$

$$\text{or, } x \frac{dv}{dx} = \frac{v(\cos v + v\sin v)}{v\sin v - \cos v} - v$$

$$\text{or, } x \frac{dv}{dx} = \frac{v(\cos v + v\sin v - v\sin v + \cos v)}{v\sin v - \cos v}$$

$$= \frac{2v\cos v}{v\sin v - \cos v}$$

$$\text{or, } \frac{v\sin v - \cos v}{v\cos v} dv = \frac{2dx}{x}$$

$$\text{or, } \int \frac{v\sin v - \cos v}{v\cos v} dv = 2 \int \frac{1}{x} dx$$

$$\Rightarrow \int \left(\tan v - \frac{1}{v}\right) dv = 2\log|x| + \log c$$

$$\text{or, } -\log|\cos v| - \log|v| = 2\log|x| + \log c$$

$$\text{or, } -\log|v\cos v| = 2\log|x| + \log c$$

$$\text{or, } 2\log|x| + \log|v\cos v| = -\log c$$

$$\text{or, } \log|x^2 v\cos v| = \log k \quad (-\log c = \log k)$$

$$\Rightarrow |x^2 v\cos v| = k \Rightarrow x^2 v\cos v = \pm k = c$$

(Where $\pm k = c$)

$$\Rightarrow x^2 \frac{y}{x} \cos \frac{y}{x} = c \Rightarrow xy \cos \frac{y}{x} = c$$

Which is the required general solution.
यही अभीष्ट व्यापक हल है।

3 Ans :- दिया गया अवकल समीकरण है

Given differential equation is

$$ydx + x\log\left(\frac{y}{x}\right)dy - 2xdy = 0 \dots\dots\dots(1)$$

$$\text{or, } y \frac{dx}{dy} = 2x - x\log\left(\frac{y}{x}\right)$$

$$\text{or, } \frac{dx}{dy} = 2\frac{x}{y} - \frac{x}{y}\log\left(\frac{y}{x}\right)$$

$$\text{or, } \frac{dx}{dy} = 2\frac{x}{y} + \frac{x}{y}\log\left(\frac{x}{y}\right) \dots\dots\dots(2)$$

$$\left(\because \log_a = -\log \frac{1}{a}\right)$$

which is a homogeneous differential equation

यह एक समघातीय अवकल समीकरण है।

Put $x = vy$, then $\frac{dx}{dy} = v + y \frac{dv}{dy}$

$$\therefore \text{From eqn(2), } v + y \frac{dv}{dy} = 2v + v \log v$$

$$\Rightarrow y \frac{dv}{dy} = v + v \log v$$

$$\Rightarrow \frac{dv}{v(1 + \log v)} = \frac{dy}{y}$$

$$\Rightarrow \int \frac{dv}{v(1 + \log v)} = \int \frac{dy}{y}$$

$$\Rightarrow \log|1 + \log v| = \log|y| + c$$

$$\Rightarrow \log \left| \frac{1 + \log v}{y} \right| = c$$

$$\Rightarrow \left| \frac{1 + \log v}{y} \right| = e^c$$

$$\therefore \frac{1 + \log v}{y} = \pm e^c = k(\text{say})$$

$$\Rightarrow 1 + \log \frac{x}{y} = ky,$$

Where k is an arbitrary constant.

Which is the required general solution.

यही अभीष्ट व्यापक हल है।

4 Ans :-

दिया गया अवकल समीकरण है

Given d.e. is $(x^2 - 1) \frac{dy}{dx} + 2xy = \frac{2}{x^2 - 1}$

$$\text{or, } \frac{dy}{dx} + \frac{2x}{x^2 - 1} \cdot y = \frac{2}{(x^2 - 1)^2} \dots\dots(1)$$

which is a linear differential equation of the form

$$\frac{dy}{dx} + Py = Q$$

where $P = \frac{2x}{x^2 - 1}$, $Q = \frac{2}{(x^2 - 1)^2}$

यह $\frac{dy}{dx} + Py = Q$ के रूप का रैखिक अवकल

समीकरण है, जहाँ $P = \frac{2x}{x^2 - 1}$, $Q = \frac{2}{(x^2 - 1)^2}$

$$\therefore \text{I.F.} = e^{\int P dx} = e^{\int \frac{2x}{x^2 - 1} dx} = e^{\log(x^2 - 1)} = x^2 - 1$$

\therefore Solution of equation (1) will be

अतः समीकरण (1) का हल होगा :-

$$\begin{aligned} y(x^2 - 1) &= \int (x^2 - 1) \cdot \frac{2}{(x^2 - 1)^2} \cdot dx + c \\ &= \int \frac{2}{x^2 - 1} dx + c \end{aligned}$$

$$\therefore y(x^2 - 1) = 2 \cdot \frac{1}{2} \log \left| \frac{x - 1}{x + 1} \right| + c$$

$$\text{or, } y(x^2 - 1) = \log \left| \frac{x - 1}{x + 1} \right| + c$$

Which is the required general solution.

यही अभीष्ट व्यापक हल है।

5 Ans :-

दिया गया अवकल समीकरण है

Given differential equation is

$$(1 + x^2) \frac{dy}{dx} + y = \tan^{-1} x$$

$$\text{or, } \frac{dy}{dx} + \frac{1}{1 + x^2} \cdot y = \frac{\tan^{-1} x}{1 + x^2} \dots\dots\dots(1)$$

which is a linear d.e. of the form

$$\frac{dy}{dx} + Py = Q, \text{ where } P = \frac{1}{1 + x^2}, Q = \frac{\tan^{-1} x}{1 + x^2}$$

यह $\frac{dy}{dx} + Py = Q$ के रूप का रैखिक अवकल

समीकरण है, जहाँ $P = \frac{1}{1 + x^2}$, $Q = \frac{\tan^{-1} x}{1 + x^2}$

$$\text{Now, I.F.} = e^{\int P dx} = e^{\int \frac{1}{1 + x^2} dx} = e^{\tan^{-1} x}$$

\therefore Solution of equation (1) will be

अतः समीकरण (1) का हल होगा :-

$$y \cdot e^{\tan^{-1} x} = \int e^{\tan^{-1} x} \cdot \frac{\tan^{-1} x}{1 + x^2} dx + c$$

$$\text{Put } \tan^{-1} x = t \quad \therefore \frac{1}{1 + x^2} dx = dt$$

$$\therefore y \cdot e^{\tan^{-1} x} = \int t e^t dt + c$$

$$= t \int e^t dt - \int \left\{ \frac{d(t)}{dt} \int e^t dt \right\} dt + c$$

$$= t e^t - \int e^t dt + c$$

$$= t e^t - e^t + c$$

$$\therefore y \cdot e^{\tan^{-1} x} = (t - 1) e^t + c$$

$$\text{or, } y \cdot e^{\tan^{-1} x} = (\tan^{-1} x - 1) e^{\tan^{-1} x} + c$$

$$\therefore y = \tan^{-1} x - 1 + c e^{-\tan^{-1} x}$$

Which is the required general solution.

यही अभीष्ट व्यापक हल है।

6 Ans :-

दिया गया अवकल समीकरण है

Given differential equation is

$$\frac{dy}{dx} - 2y = \cos 3x \dots\dots\dots(1)$$

which is a linear differential equation of the form

$$\frac{dy}{dx} + Py = Q, \text{ where } P = -2, Q = \cos 3x$$

यह $\frac{dy}{dx} + Py = Q$ के रूप का रैखिक अवकल

समीकरण है, जहाँ $P = -2, Q = \cos 3x$

$$\text{Now, I.F.} = e^{\int P dx} = e^{\int -2 dx} = e^{-2x}$$

∴ Solution of the equation (1) will be

अतः समीकरण (1) का हल होगा :-

$$y \cdot e^{-2x} = \int e^{-2x} \cos 3x dx + c \dots\dots\dots(2)$$

$$\text{Let } I = \int e^{-2x} \cos 3x dx$$

then

$$\begin{aligned} I &= \cos 3x \int e^{-2x} dx - \int \left\{ \frac{d}{dx} (\cos 3x) \int e^{-2x} dx \right\} dx \\ &= \frac{-e^{-2x} \cos 3x}{2} - \int (-3 \sin 3x) \left(\frac{-e^{-2x}}{2} \right) dx \\ &= \frac{-e^{-2x} \cos 3x}{2} - \frac{3}{2} \int e^{-2x} \sin 3x dx \\ &= \frac{-e^{-2x} \cos 3x}{2} - \frac{3}{2} \left[-\sin 3x \cdot \frac{e^{-2x}}{2} - \int 3 \cos 3x \cdot \frac{e^{-2x}}{-2} dx \right] \\ &= \frac{-e^{-2x} \cos 3x}{2} + \frac{3e^{-2x} \sin 3x}{4} - \frac{9}{4} \int e^{-2x} \cos 3x dx \end{aligned}$$

$$\text{or, } I = \frac{-2e^{-2x} \cos 3x + 3e^{-2x} \sin 3x}{4} - \frac{9}{4} I$$

$$\text{or, } I + \frac{9}{4} I = \frac{e^{-2x} (-2 \cos 3x + 3 \sin 3x)}{4}$$

$$\text{or, } \frac{13}{4} I = \frac{e^{-2x} (-2 \cos 3x + 3 \sin 3x)}{4}$$

$$\Rightarrow I = \frac{1}{13} e^{-2x} (-2 \cos 3x + 3 \sin 3x)$$

∴ From eqn(2),

$$y \cdot e^{-2x} = \frac{e^{-2x}}{13} (3 \sin 3x - 2 \cos 3x) + c$$

$$\Rightarrow y = \frac{1}{13} (3 \sin 3x - 2 \cos 3x) + ce^{2x}$$

Which is the required general solution.

यही अभीष्ट व्यापक हल है।

7 Ans :-

दिया गया अवकल समीकरण है

$$\text{Given d.e. is } x \log x \cdot \frac{dy}{dx} + y = \frac{2}{x} \log x$$

$$\text{or, } \frac{dy}{dx} + \frac{1}{x \log x} \cdot y = \frac{2}{x^2} \dots\dots\dots(1)$$

which is a linear d.e. of the form $\frac{dy}{dx} + Py = Q$

$$\text{where } P = \frac{1}{x \log x} \text{ and } Q = \frac{2}{x^2}$$

यह $\frac{dy}{dx} + Py = Q$ के रूप का रैखिक अवकल

समीकरण है, जहाँ $P = \frac{1}{x \log x}$ and $Q = \frac{2}{x^2}$

$$\text{Now, I.F.} = e^{\int P dx} = e^{\int \frac{1}{x \log x} dx} = e^{\log(\log x)} = \log x$$

∴ Solution of equation (1) will be

अतः समीकरण (1) का हल होगा :-

$$\begin{aligned} y \cdot \log x &= \int \frac{2}{x^2} \cdot \log x dx + c \\ &= 2 \left[\log x \int \frac{1}{x^2} dx - \int \left\{ \frac{d(\log x)}{dx} \int \frac{1}{x^2} dx \right\} dx \right] + C \\ &= 2 \left[\log x \left(-\frac{1}{x} \right) - \int \frac{1}{x} \left(-\frac{1}{x} \right) dx \right] + c \\ &= -\frac{2 \log x}{x} + 2 \int \frac{1}{x^2} dx + c \\ &= -\frac{2 \log x}{x} - \frac{2}{x} + c \\ &= -\frac{2}{x} (\log x + 1) + c \end{aligned}$$

$$\therefore y \cdot \log x = -\frac{2}{x} (\log x + 1) + c$$

Which is the required general solution.

यही अभीष्ट व्यापक हल है।

8 Ans :-

दिया गया अवकल समीकरण है

Given differential equation is

$$\frac{dy}{dx} - 3 \cot x \cdot y = \sin 2x \dots\dots\dots(1)$$

which is a linear differential equation of the form

$$\frac{dy}{dx} + Py = Q, \text{ where } P = -3 \cot x, Q = \sin 2x$$

यह $\frac{dy}{dx} + Py = Q$ के रूप का रैखिक अवकल

समीकरण है, जहाँ $P = -3 \cot x$ and $Q = \sin 2x$

$$\text{Now, I.F.} = e^{\int P dx} = e^{\int -3 \cot x dx} = e^{-3 \log \sin x} = e^{\log(\sin x)^{-3}}$$

$$= (\sin x)^{-3} = \frac{1}{\sin^3 x}$$

∴ Solution of the given differential equation(1) will be

अतः दिए गए अवकल समीकरण (1) का हल होगा :-

$$\begin{aligned} y \times \frac{1}{\sin^3 x} &= \int \left(\sin 2x \times \frac{1}{\sin^3 x} \right) dx + c \\ \text{or, } \frac{y}{\sin^3 x} &= \int \frac{2 \sin x \cdot \cos x}{\sin^3 x} dx + c \\ &= 2 \int \frac{\cos x}{\sin^2 x} dx + c \end{aligned}$$

$$= 2 \int \frac{dt}{t^2} + c \quad \text{where } \sin x = t$$

$$= -\frac{2}{t} + c = -\frac{2}{\sin x} + c$$

$$\therefore \frac{y}{\sin^3 x} = -\frac{2}{\sin x} + c$$

$$\therefore y = -2\sin^2 x + c\sin^3 x \dots\dots\dots(2)$$

Now, given $y = 2$ when $x = \frac{\pi}{2}$

$$\therefore \text{From eqn(2), } 2 = -2 + c \Rightarrow c = 4$$

$$\therefore y = -2\sin^2 x + 4\sin^3 x$$

Which is the required particular solution.

यही अभीष्ट विशेष हल है।

9 Ans :-

दिया गया अवकल समीकरण है

Given differential equation is

$$(1 + y^2)dx = (\tan^{-1}y - x)dy$$

$$\text{or, } \frac{dx}{dy} = \frac{\tan^{-1}y - x}{1 + y^2}$$

$$\text{or, } \frac{dx}{dy} = \frac{\tan^{-1}y}{1 + y^2} - \frac{1}{1 + y^2} \cdot x$$

$$\text{or, } \frac{dx}{dy} + \frac{1}{1 + y^2} \cdot x = \frac{\tan^{-1}y}{1 + y^2} \dots\dots\dots(1)$$

which is a linear diff. equation of the form

$$\frac{dx}{dy} + Px = Q, \text{ where } P = \frac{1}{1 + y^2}, Q = \frac{\tan^{-1}y}{1 + y^2}$$

यह $\frac{dx}{dy} + Px = Q$ के रूप का रैखिक अवकल

समीकरण है, जहाँ $P = \frac{1}{1 + y^2}, Q = \frac{\tan^{-1}y}{1 + y^2}$

$$\therefore \text{I.F.} = e^{\int Pdy} = e^{\int \frac{1}{1+y^2} dy} = e^{\tan^{-1}y}$$

\therefore Solution of the differential equation (1) will be

अतः अवकल समीकरण (1) का हल होगा :-

$$x \cdot e^{\tan^{-1}y} = \int e^{\tan^{-1}y} \cdot \frac{\tan^{-1}y}{1 + y^2} dy + c$$

$$= \int te^t dt + c, \text{ where } \tan^{-1}y = t$$

$$= t \int e^t dt - \int \left\{ \frac{d(t)}{dt} \cdot \int e^t dt \right\} dt + c$$

$$= te^t - \int e^t dt + c$$

$$= te^t - e^t + c$$

$$= e^t(t - 1) + c$$

$$\therefore x \cdot e^{\tan^{-1}y} = e^{\tan^{-1}y}(\tan^{-1}y - 1) + c$$

$$\therefore x = \tan^{-1}y - 1 + ce^{-\tan^{-1}y}$$

Which is the required general solution.

यही अभीष्ट व्यापक हल है।

10 Ans :-

दिया गया अवकल समीकरण है

Given differential equation is

$$\frac{dy}{dx} + xy = xy^3 \dots\dots\dots(1)$$

$$\text{or, } \frac{1}{y^3} \cdot \frac{dy}{dx} + \frac{xy}{y^3} = x$$

$$\text{or, } \frac{1}{y^3} \frac{dy}{dx} + \frac{1}{y^2} \cdot x = x \dots\dots\dots(2)$$

$$\text{Put } \frac{1}{y^2} = t \quad \therefore -\frac{2}{y^3} \frac{dy}{dx} = \frac{dt}{dx}$$

$$\text{or, } \frac{1}{y^3} \frac{dy}{dx} = -\frac{1}{2} \frac{dt}{dx} \dots\dots\dots(3)$$

\therefore Equation (2) becomes

$$-\frac{1}{2} \frac{dt}{dx} + t \cdot x = x$$

$$\text{or, } \frac{dt}{dx} - 2x \cdot t = -2x \dots\dots\dots(4)$$

which is a linear differential equation of the form

$$\frac{dt}{dx} + Pt = Q, \text{ where } P = -2x \text{ and } Q = -2x$$

यह $\frac{dt}{dx} + Pt = Q$ के रूप का रैखिक अवकल

समीकरण है जहाँ $P = -2x$ and $Q = -2x$

$$\therefore \text{I.F.} = e^{\int Pdx} = e^{\int -2x dx} = e^{-x^2}$$

\therefore Solution of equation (4) will be

अतः समीकरण (4) का हल होगा :-

$$t \cdot e^{-x^2} = \int e^{-x^2} (-2x) dx + c$$

$$= e^{-x^2} + c$$

$$\Rightarrow \frac{1}{y^2} \cdot e^{-x^2} = e^{-x^2} + c$$

$$\Rightarrow \frac{1}{y^2} = 1 + ce^{x^2}$$

Which is the required general solution.

यही अभीष्ट व्यापक हल है।

बहुविकल्पीय प्रश्न (MCQ)

1 Marks Question:-

1. Position vector of the point (x,y,z) is

बिन्दु (x,y,z) का स्थिति सदिश है।

- (A) $x\hat{i} - y\hat{j} - z\hat{k}$ (B) $x\hat{i} + y\hat{j} - z\hat{k}$
(C) $x\hat{i} - y\hat{j} + z\hat{k}$ (D) $x\hat{i} + y\hat{j} + z\hat{k}$

2. Position vector of the point (1,0,2) is

बिन्दु (1,0,2) का स्थिति सदिश है।

- (A) $\hat{i} + \hat{j} + 2\hat{k}$ (B) $\hat{i} + 2\hat{j}$
(C) $\hat{i} + 3\hat{k}$ (D) $\hat{i} + 2\hat{k}$

3. Find the magnitude of vector $\vec{a} = \hat{i} + \hat{j} + \hat{k}$ सदिश $\vec{a} = \hat{i} + \hat{j} + \hat{k}$ का परिमाण होगा।

- (A) $\frac{\hat{i} + \hat{j} + \hat{k}}{\sqrt{3}}$ (B) $\sqrt{3}$
(C) 3 (D) $\frac{1}{\sqrt{3}}$

4. Magnitude of vector $2\hat{i} - 7\hat{j} - 3\hat{k}$ isसदिश $2\hat{i} - 7\hat{j} - 3\hat{k}$ का परिमाण है।

- (A) $\sqrt{61}$ (B) $\sqrt{62}$
(C) $\sqrt{64}$ (D) $\sqrt{32}$

5. If vector $2\hat{i} + 3\hat{j} = x\hat{i} + y\hat{j}$ then x = ___यदि सदिश $2\hat{i} + 3\hat{j} = x\hat{i} + y\hat{j}$ हो तो x = ___

- (A) 2 (B) 3
(C) 4 (D) 9

6. The projection of vector $\vec{a} = 2\hat{i} + 3\hat{j} + 2\hat{k}$ on $\vec{b} = \hat{i} + 2\hat{j} + \hat{k}$ isसदिश $\vec{a} = 2\hat{i} + 3\hat{j} + 2\hat{k}$ का सदिश $\vec{b} = \hat{i} + 2\hat{j} + \hat{k}$ पर प्रक्षेप होगा।

- (A) $\frac{10}{\sqrt{6}}$ (B) $\frac{15}{\sqrt{6}}$
(C) $\frac{5\sqrt{6}}{3}$ (D) $\frac{6\sqrt{5}}{3}$

7. The projection of vector $\hat{i} + \hat{j}$ on $\hat{i} - \hat{j}$ isसदिश $\hat{i} + \hat{j}$ का सदिश $\hat{i} - \hat{j}$ पर प्रक्षेप होगा।

- (A) 2 (B) 0
(C) -1 (D) 1

8. If $\vec{a} = 5\hat{i} + 7\hat{j} - 3\hat{k}$ and $\vec{b} = 2\hat{i} - 3\hat{j} - \hat{k}$ then $\vec{a} - \vec{b}$ isयदि $\vec{a} = 5\hat{i} + 7\hat{j} - 3\hat{k}$ और $\vec{b} = 2\hat{i} - 3\hat{j} - \hat{k}$ तो $\vec{a} - \vec{b}$ होगा।

- (A) $7\hat{i} + 10\hat{j} - 4\hat{k}$ (B) $3\hat{i} + 10\hat{j} - 2\hat{k}$
(C) $7\hat{i} + 4\hat{j} - 2\hat{k}$ (D) $10\hat{i} - 21\hat{j} + 3\hat{k}$

9. If $\vec{A} = 2\hat{i} - 3\hat{j}$ and $\vec{B} = -\hat{i} - \hat{j}$ then $\vec{A} + \vec{B}$ is equal toयदि $\vec{A} = 2\hat{i} - 3\hat{j}$ और $\vec{B} = -\hat{i} - \hat{j}$ है तो $\vec{A} + \vec{B} = ?$

- (A) $3\hat{i} - 4\hat{j}$ (B) $3\hat{i} - 2\hat{j}$
(C) $\hat{i} - 4\hat{j}$ (D) $2\hat{i} - 3\hat{j}$

10. Find the unit vector in the direction of \vec{AB} where A(1,2,3) and B(4,5,6) are the given pointसदिश \vec{AB} के अनुदिश मात्रक सदिश ज्ञात कीजिए जहाँ A(1,2,3) और B(4,5,6) है।

- (A) $5\hat{i} + 7\hat{j} + 9\hat{k}$ (B) $3\hat{i} + 3\hat{j} + 3\hat{k}$
(C) $4\hat{i} + 10\hat{j} + 18\hat{k}$ (D) $-3\hat{i} + 3\hat{j} - 3\hat{k}$

11. If $\vec{a} = 2\hat{i} + \lambda\hat{j} + \hat{k}$ and $\vec{b} = 4\hat{i} - 2\hat{j} + 2\hat{k}$ are perpendicular then $\lambda = ?$ यदि $\vec{a} = 2\hat{i} + \lambda\hat{j} + \hat{k}$ और $\vec{b} = 4\hat{i} - 2\hat{j} + 2\hat{k}$ लम्बवत्त हो, तो $\lambda = ?$

- (A) 5 (B) 6
(C) 4 (D) -5

12. The scalar product of $5\hat{i} + \hat{j} - 3\hat{k}$ and $3\hat{i} - 4\hat{j} + 7\hat{k}$ isसदिश $5\hat{i} + \hat{j} - 3\hat{k}$ और $3\hat{i} - 4\hat{j} + 7\hat{k}$ का सदिश गुणक होगा।

- (A) 15 (B) -15
(C) 10 (D) -10

13. Which vector direction is along the vector $\hat{i} + 2\hat{j} + 3\hat{k}$?सदिश $\hat{i} + 2\hat{j} + 3\hat{k}$ के अनुदिश सदिश कौन है?

- (A) $2\hat{i} - 4\hat{j} + 6\hat{k}$ (B) $\hat{i} - 2\hat{j} + 3\hat{k}$
(C) $2\hat{i} + 4\hat{j} + 6\hat{k}$ (D) $3(\hat{i} - 2\hat{j} - 2\hat{k})$

14. If \vec{a} and \vec{b} are non-zero vector and $\vec{a} \cdot \vec{b} = 0$ then

यदि \vec{a} और \vec{b} अशून्य सदिश और $\vec{a} \cdot \vec{b} = 0$ है तो

- (A) $\vec{a} = \vec{b}$ (B) $\vec{a} \parallel \vec{b}$
(C) $|\vec{a}| = |\vec{b}|$ (D) $\vec{a} \perp \vec{b}$

15. The Additive inverse of vector $-2\hat{i} + \hat{j} - \hat{k}$ is सदिश $-2\hat{i} + \hat{j} - \hat{k}$ का योज्य प्रतिलोम (ऋणात्मक) मान है।

- (A) $-2\hat{i} - \hat{j} - \hat{k}$ (B) $\frac{\hat{i}}{2} + \hat{j} - \hat{k}$
(C) $\frac{1}{6}(-2\hat{i} + 6 - \hat{k})$ (D) $2\hat{i} - \hat{j} + \hat{k}$

16. If $|\vec{a}| = 1, |\vec{b}| = 2$ and $\vec{a} \cdot \vec{b} = 1$ then angle between \vec{a} and \vec{b} is

यदि $|\vec{a}| = 1, |\vec{b}| = 2$ और $\vec{a} \cdot \vec{b} = 1$ हो तो \vec{a} और \vec{b} के बीच का कोण होगा।

- (A) $\frac{\pi}{3}$ (B) $\frac{\pi}{4}$
(C) $\frac{\pi}{2}$ (D) $\frac{2\pi}{3}$

17. The unit vector along the vector

$$\vec{a} = 2\hat{i} + 3\hat{j} + \hat{k} \text{ is}$$

सदिश $\vec{a} = 2\hat{i} + 3\hat{j} + \hat{k}$ के अनुदिश मात्रक सदिश होगा।

- (A) $\frac{1}{\sqrt{5}}(2\hat{i} + 3\hat{j} + \hat{k})$ (B) $\frac{1}{\sqrt{6}}(2\hat{i} + 3\hat{j} + \hat{k})$
(C) $\frac{1}{\sqrt{14}}(2\hat{i} + 3\hat{j} + \hat{k})$ (D) $\frac{1}{14}(2\hat{i} + 3\hat{j} + \hat{k})$

18. If $|\vec{a}| = 3, |\vec{b}| = \frac{\sqrt{2}}{3}$ and $\vec{a} \times \vec{b}$ is a unit vector then angle between \vec{a} and \vec{b} is

यदि $|\vec{a}| = 3, |\vec{b}| = \frac{\sqrt{2}}{3}$ और $\vec{a} \times \vec{b}$ एक इकाई सदिश हो तो सदिश \vec{a} और \vec{b} के बीच का कोण होगा।

- (A) $\frac{\pi}{6}$ (B) $\frac{\pi}{4}$
(C) $\frac{\pi}{3}$ (D) $\frac{\pi}{2}$

19. If $|\vec{a}| \neq 0, |\vec{b}| \neq 0$ and $\vec{a} \times \vec{b} = 0$ then

यदि $|\vec{a}| \neq 0, |\vec{b}| \neq 0$ और $\vec{a} \times \vec{b} = 0$ हो तो

- (A) $\vec{a} = \vec{b}$ (B) $\vec{a} \perp \vec{b}$
(C) $\vec{a} \parallel \vec{b}$ (D) $\vec{a} \cdot \vec{b} = \vec{a} \times \vec{b}$

20. If $|\vec{a}| = 2, |\vec{b}| = 3$ and $\vec{a} \cdot \vec{b} = 4$ then $|\vec{a} - \vec{b}| = ?$

यदि $|\vec{a}| = 2, |\vec{b}| = 3$ और $\vec{a} \cdot \vec{b} = 4$ है तो

$$|\vec{a} - \vec{b}| = ?$$

- (A) $\sqrt{5}$ (B) 5
(C) $\frac{1}{5}$ (D) $\frac{1}{\sqrt{5}}$

21. If θ is the angle between \vec{a} and \vec{b} such that $|\vec{a} \cdot \vec{b}| = |\vec{a} \times \vec{b}|$ then θ is

यदि सदिश \vec{a} और \vec{b} के बीच का कोण θ है और जहाँ $|\vec{a} \cdot \vec{b}| = |\vec{a} \times \vec{b}|$ हो तो θ का मान होगा।

- (A) 0 (B) $\frac{\pi}{4}$
(C) $\frac{\pi}{2}$ (D) π

22. The direction cosine of the vector $\hat{i} + 2\hat{j} + 3\hat{k}$ is सदिश $\hat{i} + 2\hat{j} + 3\hat{k}$ का दिक्-कोसाइन होगा।

- (A) 1, 2, 3 (B) $\frac{\hat{i} + 2\hat{j} + 3\hat{k}}{\sqrt{14}}$
(C) $\frac{1}{\sqrt{14}}, \frac{2}{\sqrt{14}}, \frac{3}{\sqrt{14}}$ (D) $\frac{-1}{\sqrt{14}}, \frac{-2}{\sqrt{14}}, \frac{-3}{\sqrt{14}}$

VERY SHORT QUESTIONS

1. Find the value of x, y and z, where vector $\vec{a} = x\hat{i} + 2\hat{j} + z\hat{k}$ and $\vec{b} = 2\hat{i} + y\hat{j} + \hat{k}$ are equal.

x, y और z का मान ज्ञात कीजिए, जहाँ सदिश $\vec{a} = x\hat{i} + 2\hat{j} + z\hat{k}$ और $\vec{b} = 2\hat{i} + y\hat{j} + \hat{k}$ बराबर है।

2. Find a vector in the direction of the vector $5\hat{i} - \hat{j} + 2\hat{k}$. which has magnitude 8 units.

सदिश $5\hat{i} - \hat{j} + 2\hat{k}$ के अनुदिश सदिश ज्ञात कीजिए, जिसका परिमाण 8 इकाई है।

3. If $\vec{a} = 2\hat{i} - \hat{j} + 2\hat{k}$ and $\vec{b} = -\hat{i} + \hat{j} - \hat{k}$ then find a unit vector in the direction of $(\vec{a} + \vec{b})$.

यदि $\vec{a} = 2\hat{i} - \hat{j} + 2\hat{k}$ और $\vec{b} = -\hat{i} + \hat{j} - \hat{k}$ हो तो सदिश $(\vec{a} + \vec{b})$ के अनुदिश इकाई सदिश ज्ञात कीजिए।

4. If A(1,2,-3) and B(-1,2,1) are two given point in the space then find \overline{AB} .

यदि बिन्दु A(1,2,-3) और बिन्दु B(-1,2,1) अंतरिक्ष पर स्थित हो तो सदिश \overline{AB} ज्ञात करें।

5. Find the position vector of a point R which divides the line joining point P(1,2,-1) and Q(-1,1,1) in the ratio 2:1 internally.

बिन्दु P(1,2,-1) और Q(-1,1,1) को मिलाने वाली रेखा को बिन्दु R, 2:1 के अनुपात में अन्तः विभाजित

करती हो तो बिन्दु R का बिन्दु सदिश क्या होगा ?

6. Find the value of P for which $P(\hat{i} + \hat{j} + \hat{k})$ is a unit vector.

P का मान ज्ञात करे जहाँ $P(\hat{i} + \hat{j} + \hat{k})$ एक इकाई सदिश है।

7. Find the angle between the vectors $\hat{i} - 2\hat{j} + 3\hat{k}$ and $3\hat{i} - 2\hat{j} + \hat{k}$

सदिश $\hat{i} - 2\hat{j} + 3\hat{k}$ और $3\hat{i} - 2\hat{j} + \hat{k}$ के बीच का कोण ज्ञात कीजिए।

8. If $\vec{a} = 5\hat{i} - \hat{j} - 3\hat{k}$ and $\vec{b} = \hat{i} + 3\hat{j} - 5\hat{k}$ then show that vector $\vec{a} + \vec{b}$ and $\vec{a} - \vec{b}$ are perpendicular.

यदि $\vec{a} = 5\hat{i} - \hat{j} - 3\hat{k}$ और $\vec{b} = \hat{i} + 3\hat{j} - 5\hat{k}$ तो सिद्ध करें कि सदिश $\vec{a} + \vec{b}$ और $\vec{a} - \vec{b}$ लम्बवत् है।

9. If \vec{a} is unit vector and $(\vec{x} - \vec{a}) \cdot (\vec{x} + \vec{a}) = 12$ then Find the value of $|\vec{x}|$

यदि \vec{a} इकाई सदिश और $(\vec{x} - \vec{a}) \cdot (\vec{x} + \vec{a}) = 12$ हो तो $|\vec{x}|$ का मान ज्ञात कीजिए।

10. If $\vec{a} = 2\hat{i} + \hat{j} + 3\hat{k}$ and $\vec{b} = 3\hat{i} + 5\hat{j} - 2\hat{k}$ then Find the value of $|\vec{a} \times \vec{b}|$

यदि $\vec{a} = 2\hat{i} + \hat{j} + 3\hat{k}$ और $\vec{b} = 3\hat{i} + 5\hat{j} - 2\hat{k}$ हो तो $|\vec{a} \times \vec{b}|$ ज्ञात कीजिए।

11. If $(2\hat{i} + 6\hat{j} + 27\hat{k}) \times (\hat{i} + \lambda\hat{j} + \mu\hat{k}) = \vec{0}$ then Find the value of λ and μ .

यदि $(2\hat{i} + 6\hat{j} + 27\hat{k}) \times (\hat{i} + \lambda\hat{j} + \mu\hat{k}) = \vec{0}$ तो λ और μ को ज्ञात कीजिए।

12. Find the area of triangle whose vertices are A(1,1,2), B(2,3,5) and C(1,5,5).

एक त्रिभुज का क्षेत्रफल ज्ञात कीजिए, जिसके शीर्ष A(1,1,2), B(2,3,5) और C(1,5,5) हैं।

13. Show that the points $A(-2\hat{i} + 3\hat{j} + 5\hat{k})$, $B(\hat{i} + 2\hat{j} + 3\hat{k})$ and $C(7\hat{i} - \hat{k})$ are collinear.

दर्शाइए कि बिन्दु $A(-2\hat{i} + 3\hat{j} + 5\hat{k})$, $B(\hat{i} + 2\hat{j} + 3\hat{k})$ और $C(7\hat{i} - \hat{k})$ संरेख है।

14. Find the area of parallelogram whose adjacent sides are represented by the vectors $\vec{a} = \hat{i} - \hat{j} + 3\hat{k}$ and $\vec{b} = 2\hat{i} - 7\hat{j} + \hat{k}$

एक समांतर चतुर्भुज का क्षेत्रफल ज्ञात कीजिए जिसकी संलग्न भुजाएँ $\vec{a} = \hat{i} - \hat{j} + 3\hat{k}$ और $\vec{b} = 2\hat{i} - 7\hat{j} + \hat{k}$ द्वारा निर्धारित है।

15. Find the projection of $\vec{a} = 2\hat{i} - \hat{j} + \hat{k}$ on

$$\vec{b} = \hat{i} - 2\hat{j} + \hat{k}$$

सदिश $\vec{a} = 2\hat{i} - \hat{j} + \hat{k}$ का सदिश $\vec{b} = \hat{i} - 2\hat{j} + \hat{k}$ पर प्रक्षेप ज्ञात करे।

16. Find value (मान ज्ञात करें) $\hat{i} \cdot (\hat{j} \times \hat{k}) + \hat{j} \cdot (\hat{i} \times \hat{k}) + \hat{k} \cdot (\hat{i} \times \hat{j})$

3 Marks Question (Vector)

1. Show that the point A, B and C whose position vectors $\vec{a} = 3\hat{i} - 4\hat{j} - 4\hat{k}$, $\vec{b} = 2\hat{i} - \hat{j} + \hat{k}$ and $\vec{c} = \hat{i} - 3\hat{j} - 5\hat{k}$ respectively, are vertices of right angle triangle.

दर्शाइए कि बिन्दु A, B और C जिनके स्थिति सदिश क्रमशः $\vec{a} = 3\hat{i} - 4\hat{j} - 4\hat{k}$, $\vec{b} = 2\hat{i} - \hat{j} + \hat{k}$ और $\vec{c} = \hat{i} - 3\hat{j} - 5\hat{k}$ है, एक समकोण त्रिभुज के शीर्षों का निर्माण करता है।

2. If $\vec{a} = 2\hat{i} + 2\hat{j} + 3\hat{k}$, $\vec{b} = -\hat{i} + 2\hat{j} + \hat{k}$ and $\vec{c} = 3\hat{i} + \hat{j}$ such that $(\vec{a} + \lambda\vec{b}) \perp \vec{c}$ then Find the value of λ .

यदि $\vec{a} = 2\hat{i} + 2\hat{j} + 3\hat{k}$, $\vec{b} = -\hat{i} + 2\hat{j} + \hat{k}$ और $\vec{c} = 3\hat{i} + \hat{j}$ इस प्रकार है कि $(\vec{a} + \lambda\vec{b}) \perp \vec{c}$ तो λ का मान ज्ञात कीजिए।

3. If A(1,2,3), B(-1,0,0) and C(0,1,2) be the vertices of $\triangle ABC$ then find the value $\angle ABC$.

यदि किसी $\triangle ABC$ के शीर्ष A, B, C क्रमशः (1,2,3), (-1,0,0) और (0,1,2) है तो $\angle ABC$ का मान ज्ञात कीजिए।

4. If $\vec{a}, \vec{b}, \vec{c}$ be three vectors such that $\vec{a} + \vec{b} + \vec{c} = \vec{0}$ and $|\vec{a}| = 3, |\vec{b}| = 5, |\vec{c}| = 7$ Find the angle between \vec{a} and \vec{b} .

यदि $\vec{a}, \vec{b}, \vec{c}$ तीन सदिश इस प्रकार है कि $\vec{a} + \vec{b} + \vec{c} = \vec{0}$ और $|\vec{a}| = 3, |\vec{b}| = 5, |\vec{c}| = 7$ है तो सदिश \vec{a} और \vec{b} के बीच कोण का मान ज्ञात करें।

5. If $\vec{a}, \vec{b}, \vec{c}$ are vectors such that $|\vec{a}| = 5, |\vec{b}| = 4, |\vec{c}| = 3$ and each vector is perpendicular to the sum of the other two, then find $|\vec{a} + \vec{b} + \vec{c}|$.

यदि $\vec{a}, \vec{b}, \vec{c}$ सदिश इस प्रकार है कि $|\vec{a}| = 5, |\vec{b}| = 4, |\vec{c}| = 3$ और प्रत्येक सदिश अन्य दो सदिशों के योग पर लम्बवत् है तो $|\vec{a} + \vec{b} + \vec{c}|$ का मान ज्ञात करें।

6. Show that the points A(1,2,7), B(2,6,3) and C(3,10,-1) are collinear.

दर्शाए की बिन्दु $A(1,2,7)$, $B(2,6,3)$ और $C(3,10,-1)$ संरेख है।

Let O be the origin of the space.

$$\text{then } \vec{OA} = \hat{i} + 2\hat{j} - 3\hat{k}$$

$$\& \vec{OB} = -\hat{i} + 2\hat{j} + \hat{k}$$

$$\therefore \vec{AB} = \vec{OB} - \vec{OA}$$

$$\begin{aligned} &= (-\hat{i} + 2\hat{j} + \hat{k}) - (\hat{i} + 2\hat{j} - 3\hat{k}) \\ &= (-1 - 1)\hat{i} + (2\hat{j} - 2\hat{j}) + (1 + 3)\hat{k} \\ &= -2\hat{i} + 0\hat{j} + 4\hat{k} = -2\hat{i} + 4\hat{k} \end{aligned}$$

5. Let O be the origin

$$\text{so that } \vec{OP} = \hat{i} + 2\hat{j} - \hat{k} = \vec{a} \text{ (Let)}$$

$$\vec{OQ} = -\hat{i} + \hat{j} + \hat{k} = \vec{b} \text{ (Let)}$$

Point R divides PQ internally in the ratio 2:1

$$\text{then } \vec{OR} = \frac{m\vec{b} + n\vec{a}}{m+n} [\because m:n = 2:1]$$

$$\begin{aligned} &= \frac{2(-\hat{i} + \hat{j} + \hat{k}) + 1(\hat{i} + 2\hat{j} - \hat{k})}{2+1} \\ &= \frac{(-2+1)\hat{i} + (2+2)\hat{j} + (2-1)\hat{k}}{3} \end{aligned}$$

$$= \frac{-\hat{i} + 4\hat{j} + \hat{k}}{3}$$

Hence, the position vector of R is $\frac{-\hat{i} + 4\hat{j} + \hat{k}}{3}$.

6. Let $\vec{a} = P(\hat{i} + \hat{j} + \hat{k})$

$$|\vec{a}| = \sqrt{p^2 + p^2 + p^2} = \pm P\sqrt{3}$$

We have given that $|\vec{a}| = 1$

$$\Rightarrow \pm P\sqrt{3} = 1$$

$$P = \pm \frac{1}{\sqrt{3}}$$

7.

$$\text{Let } \vec{a} = \hat{i} - 2\hat{j} + 3\hat{k}$$

$$\vec{b} = 3\hat{i} - 2\hat{j} + \hat{k}$$

$$\text{Now } |\vec{a}| = \sqrt{1^2 + (-2)^2 + 3^2} = \sqrt{1+4+9} = \sqrt{14}$$

$$|\vec{b}| = \sqrt{3^2 + (-2)^2 + 1^2} = \sqrt{9+4+1} = \sqrt{14}$$

$$\vec{a} \cdot \vec{b} = (\hat{i} - 2\hat{j} + 3\hat{k}) \cdot (3\hat{i} - 2\hat{j} + \hat{k})$$

$$= 3 + 4 + 3 = 10$$

Let θ be the angle between \vec{a} and \vec{b} ,

$$\text{then } \cos \theta = \frac{\vec{a} \cdot \vec{b}}{|\vec{a}| |\vec{b}|} = \frac{10}{\sqrt{14} \cdot \sqrt{14}} = \frac{10}{14}$$

$$\cos \theta = \frac{5}{7}$$

$$\therefore \theta = \cos^{-1} \frac{5}{7}$$

(MCQ) Answer, Chapter - Vector

- | | | |
|------|-------|-------|
| 1. D | 9. C | 17. C |
| 2. B | 10. B | 18. B |
| 3. B | 11. A | 19. C |
| 4. B | 12. D | 20. A |
| 5. A | 13. C | 21. B |
| 6. A | 14. D | 22. C |
| 7. B | 15. D | |
| 8. B | 16. A | |

Very Short Questions Answer

1. Given that $\vec{a} = \vec{b}$
 $\Rightarrow (x\hat{i} + 2\hat{j} + z\hat{k}) = (2\hat{i} + y\hat{j} + \hat{k})$
 so that, the component of \hat{i}, \hat{j} and \hat{k} are equal.
 $\therefore x = 2, y = 2, z = 1$

2. Let $\vec{a} = 5\hat{i} - \hat{j} + 2\hat{k}$
 Then $|\vec{a}| = \sqrt{5^2 + (-1)^2 + 2^2}$
 $= \sqrt{25 + 1 + 4}$
 $= \sqrt{30}$

\therefore unit vector,

$$\hat{a} = \frac{\vec{a}}{|\vec{a}|} = \left\{ \frac{5}{\sqrt{30}}\hat{i} - \frac{1}{\sqrt{30}}\hat{j} + \frac{2}{\sqrt{30}}\hat{k} \right\}$$

Hence, the required vector = $8\hat{a}$

$$= 8 \left\{ \frac{5}{\sqrt{30}}\hat{i} - \frac{1}{\sqrt{30}}\hat{j} + \frac{2}{\sqrt{30}}\hat{k} \right\}$$

3. Given that

$$\vec{a} = 2\hat{i} - \hat{j} + 2\hat{k}$$

$$\vec{b} = -\hat{i} + \hat{j} - \hat{k}$$

$$\therefore \vec{a} + \vec{b} = (2-1)\hat{i} + (-1+1)\hat{j} + (2-1)\hat{k}$$

$$= \hat{i} + 0\hat{j} + \hat{k} = \hat{i} + \hat{k}$$

$$|\vec{a} + \vec{b}| = \sqrt{1^2 + 1^2} = \sqrt{2}$$

Unit vector along $(\vec{a} + \vec{b})$

$$= \frac{(\vec{a} + \vec{b})}{|\vec{a} + \vec{b}|} = \frac{1}{\sqrt{2}}(\hat{i} + \hat{k})$$

8.

Given that

$$\vec{a} = 5\hat{i} - \hat{j} - 3\hat{k}$$

$$\vec{b} = \hat{i} + 3\hat{j} - 5\hat{k}$$

$$\text{Now } \vec{a} + \vec{b} = 6\hat{i} + 2\hat{j} - 8\hat{k}$$

$$\vec{a} - \vec{b} = 4\hat{i} - 4\hat{j} + 2\hat{k}$$

$$\begin{aligned} \therefore (\vec{a} + \vec{b}) \cdot (\vec{a} - \vec{b}) &= (6\hat{i} + 2\hat{j} - 8\hat{k}) \cdot (4\hat{i} - 4\hat{j} + 2\hat{k}) \\ &= 24 - 8 - 16 \\ &= 0 \end{aligned}$$

Hence, $(\vec{a} + \vec{b})$ and $(\vec{a} - \vec{b})$ is perpendicular to each other.

9.

$$\begin{aligned} (\vec{x} - \vec{a}) \cdot (\vec{x} + \vec{a}) &= 12 \\ \Rightarrow \vec{x} \cdot \vec{x} + \vec{x} \cdot \vec{a} - \vec{a} \cdot \vec{x} - \vec{a} \cdot \vec{a} &= 12 \\ \Rightarrow |\vec{x}|^2 - |\vec{a}|^2 &= 12 \end{aligned}$$

$$\Rightarrow |\vec{x}|^2 - 1^2 = 12 \left[\begin{array}{l} \because \vec{a} \text{ is unit vector} \\ \therefore |\vec{a}| = 1 \end{array} \right]$$

$$|\vec{x}|^2 = 13$$

$$\therefore |\vec{x}| = \sqrt{13}$$

10.

$$\text{Given that } \vec{a} = 2\hat{i} + \hat{j} + 3\hat{k}$$

$$\vec{b} = 3\hat{i} + 5\hat{j} - 2\hat{k}$$

$$\vec{a} \times \vec{b} = \begin{vmatrix} \hat{i} & \hat{j} & \hat{k} \\ 2 & 1 & 3 \\ 3 & 5 & -2 \end{vmatrix}$$

$$\begin{aligned} &= (-2 - 15)\hat{i} - (-4 - 9)\hat{j} + (10 - 3)\hat{k} \\ &= -17\hat{i} + 13\hat{j} + 7\hat{k} \end{aligned}$$

$$\begin{aligned} |\vec{a} \times \vec{b}| &= \sqrt{(-17)^2 + (13)^2 + 7^2} \\ &= \sqrt{289 + 169 + 49} \\ &= \sqrt{507} \end{aligned}$$

11. Given that

$$(2\hat{i} + 6\hat{j} + 27\hat{k}) \times (\hat{i} + \lambda\hat{j} + \mu\hat{k}) = \vec{0}$$

$$\text{Now } \begin{vmatrix} \hat{i} & \hat{j} & \hat{k} \\ 2 & 6 & 27 \\ 1 & \lambda & \mu \end{vmatrix} = (2\lambda - 6)\hat{i} + (27 - 2\mu)\hat{j} + (2\lambda - 6)\hat{k}$$

$$\therefore (2\lambda - 6)\hat{i} + (27 - 2\mu)\hat{j} + (2\lambda - 6)\hat{k} = \vec{0}$$

Equating the coefficient of \hat{i}, \hat{j} & \hat{k} . We, get

$$2\lambda - 6 = 0 \Rightarrow \lambda = 3$$

$$27 - 2\mu = 0 \Rightarrow \mu = \frac{27}{2}$$

12.

Let O be the origin

$$\text{then } \vec{OA} = \hat{i} + \hat{j} + 2\hat{k}$$

$$\vec{OB} = 2\hat{i} + 3\hat{j} + 5\hat{k}$$

$$\vec{OC} = \hat{i} + 5\hat{j} + 5\hat{k}$$

$$\therefore \vec{AB} = \vec{OB} - \vec{OA} = \hat{i} + 2\hat{j} + 3\hat{k}$$

$$\vec{AC} = \vec{OC} - \vec{OA} = 0\hat{i} + 4\hat{j} + 3\hat{k}$$

$$\therefore \text{area of } \triangle ABC = \left| \frac{1}{2} (\vec{AB} \times \vec{AC}) \right|$$

$$\text{Now } \vec{AB} \times \vec{AC} = \begin{vmatrix} \hat{i} & \hat{j} & \hat{k} \\ 1 & 2 & 3 \\ 0 & 4 & 3 \end{vmatrix}$$

$$\begin{aligned} &= (6 - 12)\hat{i} + (0 - 3)\hat{j} + (4 - 0)\hat{k} \\ &= -6\hat{i} - 3\hat{j} + 4\hat{k} \end{aligned}$$

$$\text{Now } \frac{1}{2} (\vec{AB} \times \vec{AC}) = 2\hat{i} - \frac{3}{2}\hat{j} - 3\hat{k}$$

$$\begin{aligned} \text{Area of } \triangle ABC &= \left| \frac{1}{2} (\vec{AB} \times \vec{AC}) \right| = \sqrt{9 + \frac{9}{4} + 4} \\ &= \sqrt{\frac{61}{4}} = \frac{1}{2} \sqrt{61} \text{ Sq. Unit} \end{aligned}$$

13.

Let O be the origin. then

$$\vec{OA} = -2\hat{i} + 3\hat{j} + 5\hat{k}$$

$$\vec{OB} = \hat{i} + 2\hat{j} + 3\hat{k}$$

$$\vec{OC} = 7\hat{i} - \hat{k}$$

$$\text{Now } \vec{AB} = \vec{OB} - \vec{OA}$$

$$= (\hat{i} + 2\hat{j} + 3\hat{k}) - (-2\hat{i} + 3\hat{j} + 5\hat{k})$$

$$= (1 + 2)\hat{i} + (2 - 3)\hat{j} + (3 - 5)\hat{k}$$

$$= 3\hat{i} - \hat{j} - 2\hat{k}$$

$$\vec{BC} = \vec{OC} - \vec{OB}$$

$$= (7\hat{i} - \hat{k}) - (\hat{i} + 2\hat{j} + 3\hat{k})$$

$$= 6\hat{i} - 2\hat{j} - 4\hat{k}$$

$$\vec{AC} = \vec{OC} - \vec{OA}$$

$$= (7\hat{i} - \hat{k}) - (-2\hat{i} + 3\hat{j} + 5\hat{k})$$

$$= 9\hat{i} - 3\hat{j} - 6\hat{k}$$

$$\text{Now } \vec{AB} \times \vec{AC} = \begin{vmatrix} \hat{i} & \hat{j} & \hat{k} \\ 3 & -1 & -2 \\ 9 & -3 & -6 \end{vmatrix}$$

$$= (6 - 6)\hat{i} + (-18 + 18)\hat{j} + (-9 + 9)\hat{k}$$

$$= 0\hat{i} + 0\hat{j} + 0\hat{k} = \vec{0}$$

Hence, point A, B and C are collinear.

14.

Given that adjacent sides of Parallelogram are

$$\vec{a} = \hat{i} - \hat{j} + 3\hat{k}$$

$$\vec{b} = 2\hat{i} - 7\hat{j} + \hat{k}$$

Then the area of parallelogram = $|\vec{a} \times \vec{b}|$

$$\text{Now } \vec{a} \times \vec{b} = \begin{vmatrix} \hat{i} & \hat{j} & \hat{k} \\ 1 & -1 & 3 \\ 2 & -7 & 1 \end{vmatrix}$$

$$= (-1 + 21)\hat{i} + (6 - 1)\hat{j} + (-7 + 3)\hat{k}$$

$$= 20\hat{i} + 5\hat{j} - 4\hat{k}$$

$$\therefore |\vec{a} \times \vec{b}| = \sqrt{(20)^2 + 5^2 + (-4)^2}$$

$$= \sqrt{400 + 25 + 16}$$

$$= \sqrt{441} = 21$$

Hence, area of parallelogram is 21 Sq. Unit.

15.

$$\text{Projection of } \vec{a} \text{ on } \vec{b} = \frac{\vec{a} \cdot \vec{b}}{|\vec{b}|}$$

$$= \frac{(2\hat{i} - \hat{j} + \hat{k}) \cdot (\hat{i} - 2\hat{j} + \hat{k})}{\sqrt{(1)^2 + (-2)^2 + 1^2}}$$

$$= \frac{2 + 2 + 1}{\sqrt{1 + 4 + 1}} = \frac{5}{\sqrt{6}} = \frac{5\sqrt{6}}{6}$$

16.

$$\hat{i} \cdot (\hat{j} \times \hat{k}) + \hat{j} \cdot (\hat{i} \times \hat{k}) + \hat{k} \cdot (\hat{i} \times \hat{j})$$

$$= \hat{i} \cdot \hat{i} + \hat{j} \cdot (-\hat{j}) + \hat{k} \cdot \hat{k} \quad \left[\begin{array}{l} \because \hat{i} \times \hat{j} = \hat{k} \\ \hat{j} \times \hat{k} = \hat{i} \\ \hat{i} \times \hat{k} = -\hat{j} \end{array} \right]$$

$$= 1 - 1 + 1 = 1$$

3 Marks (Vector) Questions Answer

1.

Let O be the origin.

$$\text{Then } \vec{AB} = \vec{OB} - \vec{OA}$$

$$= (2\hat{i} - \hat{j} + \hat{k}) - (3\hat{i} - 4\hat{j} - 4\hat{k})$$

$$= -\hat{i} + 3\hat{j} + 5\hat{k}$$

$$|\vec{AB}| = \sqrt{1 + 9 + 25} = \sqrt{35}$$

$$\vec{BC} = \vec{OC} - \vec{OB}$$

$$= (\hat{i} - 3\hat{j} - 5\hat{k}) - (2\hat{i} - \hat{j} + \hat{k})$$

$$= -\hat{i} - 2\hat{j} - 6\hat{k}$$

$$|\vec{BC}| = \sqrt{1 + 4 + 36} = \sqrt{41}$$

$$\vec{AC} = \vec{OC} - \vec{OA}$$

$$= (\hat{i} - 3\hat{j} - 5\hat{k}) - (3\hat{i} - 4\hat{j} - 4\hat{k})$$

$$= -2\hat{i} + \hat{j} - \hat{k}$$

$$|\vec{AC}| = \sqrt{4 + 1 + 1} = \sqrt{6}$$

$$\text{Now } |\vec{BC}|^2 = |\vec{AB}|^2 + |\vec{AC}|^2$$

Hence the point A, B and C

are the vertices of the right angle triangle.

2.

Given that

$$\vec{a} = 2\hat{i} + 2\hat{j} + 3\hat{k}$$

$$\vec{b} = -\hat{i} + 2\hat{j} + \hat{k}$$

$$\vec{c} = 3\hat{i} + \hat{j}$$

$$\therefore (\vec{a} + \lambda\vec{b}) \perp \vec{c} \Leftrightarrow (\vec{a} + \lambda\vec{b}) \cdot \vec{c} = 0$$

$$\Rightarrow [(2\hat{i} + 2\hat{j} + 3\hat{k}) + \lambda(-\hat{i} + 2\hat{j} + \hat{k})] \cdot (3\hat{i} + \hat{j}) = 0$$

$$\Rightarrow [(2 - \lambda)\hat{i} + (2 + 2\lambda)\hat{j} + (3 + \lambda)\hat{k}] \cdot (3\hat{i} + \hat{j}) = 0$$

$$\Rightarrow 3(2 - \lambda) + 2 + 2\lambda = 0$$

$$\Rightarrow 6 - 3\lambda + 2 + 2\lambda = 0$$

$$\Rightarrow 8 - \lambda = 0$$

$$\therefore \lambda = 8$$

3.

Let O be the origin. then

$$\vec{OA} = \hat{i} + 2\hat{j} + 3\hat{k}$$

$$\vec{OB} = -\hat{i}$$

$$\vec{OC} = \hat{j} + 2\hat{k}$$

$\therefore \angle ABC$ makes between \vec{AB} & \vec{BC}

$$\therefore \vec{AB} = \vec{OB} - \vec{OA}$$

$$= -\hat{i} - (\hat{i} + 2\hat{j} + 3\hat{k})$$

$$= -2\hat{i} - 2\hat{j} - 3\hat{k}$$

$$\vec{BC} = \vec{OC} - \vec{OB}$$

$$= \hat{j} + 2\hat{k} + \hat{i}$$

$$= \hat{i} + \hat{j} + 2\hat{k}$$

$$\therefore |\vec{AB} \cdot \vec{BC}| = |-2 - 2 - 6| = 10$$

$$|\vec{AB}| = \sqrt{4 + 4 + 9} = \sqrt{17}$$

$$|\vec{BC}| = \sqrt{1 + 1 + 4} = \sqrt{6}$$

$$\therefore \cos(\angle ABC) = \frac{\vec{AB} \cdot \vec{BC}}{|\vec{AB}| |\vec{BC}|}$$

$$= \frac{10}{\sqrt{17} \cdot \sqrt{6}}$$

$$\therefore \angle ABC = \cos^{-1}\left(\frac{10}{\sqrt{102}}\right)$$

4.

Let θ be the angle between \vec{a} and \vec{b}

Now

$$\vec{a} + \vec{b} + \vec{c} = 0$$

$$\Rightarrow \vec{a} + \vec{b} = -\vec{c}$$

$$\Rightarrow (\vec{a} + \vec{b}) \cdot (\vec{a} + \vec{b}) = (-\vec{c}) \cdot (-\vec{c})$$

$$\begin{aligned} &\Rightarrow \vec{a} \cdot \vec{a} + \vec{a} \cdot \vec{b} + \vec{b} \cdot \vec{a} + \vec{b} \cdot \vec{b} = \vec{c} \cdot \vec{c} \\ &\Rightarrow |\vec{a}|^2 + 2\vec{a} \cdot \vec{b} + |\vec{b}|^2 = |\vec{c}|^2 \\ &\quad [\because \vec{a} \cdot \vec{b} = |\vec{a}| |\vec{b}| \cos \theta] \\ &\Rightarrow |\vec{a}|^2 + |\vec{b}|^2 + 2|\vec{a}| |\vec{b}| \cos \theta = |\vec{c}|^2 \\ &\Rightarrow 3^2 + 5^2 + 2 \cdot 3 \cdot 5 \cos \theta = 7^2 \\ &\Rightarrow 9 + 25 + 30 \cos \theta = 49 \\ &\Rightarrow 30 \cos \theta = 49 - 34 = 15 \\ &\Rightarrow \cos \theta = \frac{15}{30} = \frac{1}{2} \\ &\therefore \theta = \cos^{-1} \frac{1}{2} \\ &\theta = \cos^{-1} (\cos 60^\circ) \\ &\therefore \theta = 60^\circ \end{aligned}$$

5. We have given that

$$\begin{aligned} &\vec{a} \perp (\vec{b} + \vec{c}), \vec{b} \perp (\vec{c} + \vec{a}) \text{ and } \vec{c} \perp (\vec{a} + \vec{b}) \\ &\Rightarrow \vec{a} \cdot (\vec{b} + \vec{c}) = 0, \vec{b} \cdot (\vec{c} + \vec{a}) = 0 \\ &\quad \text{and } \vec{c} \cdot (\vec{a} + \vec{b}) = 0 \\ &\Rightarrow \vec{a} \cdot \vec{b} + \vec{a} \cdot \vec{c} = 0, \vec{b} \cdot \vec{c} + \vec{b} \cdot \vec{a} = 0 \\ &\quad \text{and } \vec{c} \cdot \vec{a} + \vec{c} \cdot \vec{b} = 0 \end{aligned}$$

By adding all, we get

$$\begin{aligned} &2(\vec{a} \cdot \vec{b} + \vec{b} \cdot \vec{c} + \vec{c} \cdot \vec{a}) = 0 \\ &\Rightarrow \vec{a} \cdot \vec{b} + \vec{b} \cdot \vec{c} + \vec{c} \cdot \vec{a} = 0 \end{aligned}$$

Now

$$\begin{aligned} &|\vec{a} + \vec{b} + \vec{c}|^2 = (\vec{a} + \vec{b} + \vec{c}) \cdot (\vec{a} + \vec{b} + \vec{c}) \\ &= |\vec{a}|^2 + |\vec{b}|^2 + |\vec{c}|^2 + 2(\vec{a} \cdot \vec{b} + \vec{b} \cdot \vec{c} + \vec{c} \cdot \vec{a}) \\ &= 5^2 + 4^2 + 3^2 + 0 \quad (\because \vec{a} \cdot \vec{b} + \vec{b} \cdot \vec{c} + \vec{c} \cdot \vec{a} = 0) \\ &= 25 + 16 + 9 \\ &|\vec{a} + \vec{b} + \vec{c}|^2 = 50 \\ &|\vec{a} + \vec{b} + \vec{c}| = \sqrt{50} = 5\sqrt{2} \end{aligned}$$

6.

Let O be the origin. Then

$$\begin{aligned} \vec{OA} &= \hat{i} + 2\hat{j} + 7\hat{k}, \\ \vec{OB} &= 2\hat{i} + 6\hat{j} + 3\hat{k} \\ \vec{OC} &= 3\hat{i} + 10\hat{j} - \hat{k} \end{aligned}$$

$$\begin{aligned} \therefore \vec{AB} &= \vec{OB} - \vec{OA} = (2\hat{i} + 6\hat{j} + 3\hat{k}) - (\hat{i} + 2\hat{j} + 7\hat{k}) \\ &= \hat{i} - 4\hat{j} + 4\hat{k} \\ \vec{BC} &= \vec{OC} - \vec{OB} = (3\hat{i} + 10\hat{j} - \hat{k}) - (2\hat{i} + 6\hat{j} + 3\hat{k}) \end{aligned}$$

$$\begin{aligned} &= \hat{i} + 4\hat{j} - 4\hat{k} \\ \vec{AC} &= \vec{OC} - \vec{OA} = (3\hat{i} + 10\hat{j} - \hat{k}) - (\hat{i} + 2\hat{j} + 7\hat{k}) \\ &= 2\hat{i} + 8\hat{j} - 8\hat{k} \\ \therefore |\vec{AB}| &= \sqrt{1 + 16 + 16} = \sqrt{33} \\ |\vec{BC}| &= \sqrt{1 + 16 + 16} = \sqrt{33} \\ |\vec{AC}| &= \sqrt{4 + 64 + 64} = \sqrt{4 \times 33} = 2\sqrt{33} \\ \therefore |\vec{AC}| &= |\vec{AB}| + |\vec{BC}| \\ \text{Hence, points } A, B \text{ and } C &\text{ are Collinear.} \end{aligned}$$

MCQ:- (बहुविकल्पीय प्रश्न) -

Q 1 If a line makes angles 90° , 60° and 30° with the +ve direction of the axes x,y, and z respectively. then find the direction cosine .

यदि एक रेखा x,y और z अक्षों की धनात्मक दिशा के साथ क्रमशः 90° , 60° तथा 30° का कोण बनाती है तो दिक्-कोसाइन ज्ञात करें।

- (a) $0, \frac{1}{2}, \frac{\sqrt{3}}{2}$ (b) $1, \frac{\sqrt{3}}{2}, \frac{1}{2}$
 (c) $0, 0, 1$ (d) $1, \frac{1}{\sqrt{2}}, \frac{1}{2}$

Q 2 A line makes equal angles with the axes. then the direction cosines are-

एक रेखा की दिक्-कोसाइन क्या होगी? जो अक्षों के साथ समान कोण बनाती है।

- (a) $\pm 1, \pm 1, \pm 1$
 (b) $\pm \frac{1}{\sqrt{2}}, \pm \frac{1}{\sqrt{2}}, \pm \frac{1}{\sqrt{2}}$
 (c) $0, 0, 0$
 (d) $\pm \frac{1}{\sqrt{3}}, \pm \frac{1}{\sqrt{3}}, \pm \frac{1}{\sqrt{3}}$

Q 3 The direction cosines of a line whose direction ratios are 2, -6, 3.

यदि एक रेखा के दिक्-अनुपात 2,-6,3 हो तो इसकी दिक्-कोसाइन क्या होगा ?

- (a) $\frac{2}{\sqrt{5}}, \frac{-6}{\sqrt{5}}, \frac{3}{\sqrt{5}}$ (b) $\frac{2}{\sqrt{3}}, \frac{-6}{\sqrt{3}}, \frac{3}{\sqrt{3}}$
 (c) $\frac{2}{7}, \frac{-6}{7}, \frac{3}{7}$ (d) $\frac{2}{49}, \frac{-6}{49}, \frac{3}{49}$

Q 4 The direction cosines of the line segment joining the point A(-2,4,5) and B(1,2,3) are

बिन्दुओं A (-2,4,5) और B(1,2,3) को मिलाने वाली रेखा की दिक्-कोसाइन होगा।

- (a) $\frac{-3}{\sqrt{77}}, \frac{2}{\sqrt{77}}, \frac{-8}{\sqrt{77}}$ (b) $\frac{3}{\sqrt{77}}, \frac{-2}{\sqrt{77}}, \frac{8}{\sqrt{77}}$
 (c) $\frac{-2}{\sqrt{77}}, \frac{4}{\sqrt{77}}, \frac{-5}{\sqrt{77}}$ (d) $\frac{1}{\sqrt{77}}, \frac{2}{\sqrt{77}}, \frac{3}{\sqrt{77}}$

Q 5 The direction ratio of the vector $2\hat{i} + \hat{j} - 2\hat{k}$ are

सदिश $2\hat{i} + \hat{j} - 2\hat{k}$ का दिक्-अनुपात होगा।

- (a) 2, 1, -2 (b) $\frac{2}{3}, \frac{1}{3}, \frac{-2}{3}$
 (c) $\frac{2}{\sqrt{3}}, \frac{1}{\sqrt{3}}, \frac{-2}{\sqrt{3}}$ (d) $\frac{-2}{\sqrt{3}}, \frac{-1}{\sqrt{3}}, \frac{-2}{\sqrt{3}}$

Q 6 The direction cosine of the vector $-\hat{i} - 2\hat{j} - 2\hat{k}$ is सदिश $-\hat{i} - 2\hat{j} - 2\hat{k}$ का दिक्-कोसाइन होगा।

- (a) $\frac{1}{\sqrt{3}}, \frac{2}{\sqrt{3}}, \frac{2}{\sqrt{3}}$ (b) -1, -2, -2
 (c) $\frac{-1}{\sqrt{3}}, \frac{2}{\sqrt{3}}, \frac{-2}{\sqrt{3}}$ (d) $\frac{-1}{3}, \frac{-2}{3}, \frac{-2}{3}$

Q 7 The direction cosines of the y-axis are

y-अक्ष का दिक्-कोसाइन होगा।

- (a) (0,0,0) (b) (1,0,0)
 (c) (0,1,0) (d) (0,0,1)

Q 8 The vector equation of the line passing through the points (-1,0,2) and (3,4,6) is :

बिन्दु(-1,0,2) और (3,4,6) से होकर जाने वाली रेखा का सदिश समीकरण होगा।

- (a) $\hat{i} + 2\hat{k} + \lambda(4\hat{i} + 4\hat{j} + 4\hat{k})$
 (b) $\hat{i} - 2\hat{k} + \lambda(4\hat{i} + 4\hat{j} + 4\hat{k})$
 (c) $-\hat{i} + 2\hat{k} + \lambda(4\hat{i} + 4\hat{j} + 4\hat{k})$
 (d) $-\hat{i} + 2\hat{k} + \lambda(4\hat{i} - 4\hat{j} - 4\hat{k})$

Q 9 The cartesian equation of a line

$\frac{x-5}{3} = \frac{y+4}{7} = \frac{z-6}{2}$ then the vector form of the equation is -

कार्तीय समीकरण $\frac{x-5}{3} = \frac{y+4}{7} = \frac{z-6}{2}$ का सदिश समीकरण क्या होगा ?

- (a) $(-5\hat{i} + 4\hat{j} + 6\hat{k}) - \lambda(3\hat{i} + 7\hat{j} + 2\hat{k})$
 (b) $(-5\hat{i} + 4\hat{j} - 6\hat{k}) + \lambda(3\hat{i} + 7\hat{j} + 2\hat{k})$
 (c) $(5\hat{i} + 4\hat{j} + 6\hat{k}) - \lambda(3\hat{i} + 7\hat{j} + 2\hat{k})$
 (d) $(5\hat{i} - 4\hat{j} + 6\hat{k}) + \lambda(3\hat{i} + 7\hat{j} + 2\hat{k})$

Q 10 The vector equation

$\vec{r} = (-3\hat{i} + 5\hat{j} - 6\hat{k}) + \lambda(2\hat{i} + 4\hat{j} + 2\hat{k})$ then the cartesian form of the equation is

सदिश समीकरण $\vec{r} = (-3\hat{i} + 5\hat{j} - 6\hat{k}) + \lambda(2\hat{i} + 4\hat{j} + 2\hat{k})$ को कार्तीय समीकरण रूप होगा।

- (a) $\frac{x-3}{2} = \frac{y+5}{4} = \frac{z-6}{2}$
 (b) $\frac{x+3}{2} = \frac{y-5}{4} = \frac{z+6}{2}$
 (c) $\frac{x+3}{-2} = \frac{y+5}{-4} = \frac{z+6}{-2}$
 (d) None of these (इनमें से कोई नहीं)

Q 11 The distance of the plane $2x-3y+6z+7=0$ from the point $(2,-3,-1)$ is

समतल $2x-3y+6z+7=0$ से बिन्दु $(2,-3,-1)$ की दूरी होगी।

- (a) 4 (b) 3
 (c) 2 (d) $\frac{1}{5}$

Q 12 The direction cosines of the normal to the plane $2x-3y-6z-3=0$ are-

समतल $2x-3y-6z-3=0$ के अभिलंब की दिक्-कोसाइन होगा।

- (a) $\frac{2}{7}, \frac{-3}{7}, \frac{-6}{7}$
 (b) $\frac{2}{7}, \frac{3}{7}, \frac{6}{7}$
 (c) $\frac{-2}{7}, \frac{-3}{7}, \frac{-6}{7}$
 (d) None of these (इनमें से कोई नहीं)

Q 13 If $2x+5y-6z+3=0$ be the equation of plane then the equation of any plane parallel to the given plane is

यदि $2x+5y-6z+3=0$ एक समतल का समीकरण हो तो इसके समान्तर समतल का एक समीकरण होगा।

- (a) $3x+5y-6z+3=0$
 (b) $2x-5y-6z+3=0$
 (c) $2x+5y-6z+k=0$
 (d) None of these (इनमें से कोई नहीं)

Very Short Question (2 Marks)

Q 1 Show that the lines, whose direction cosines are $\frac{12}{13}, \frac{-3}{13}, \frac{-4}{13}$ & $\frac{4}{13}, \frac{12}{13}, \frac{3}{13}$ are mutually Perpendicular.

दर्शाए कि दिक्-कोसाइन $\frac{12}{13}, \frac{-3}{13}, \frac{-4}{13}$ और

$\frac{4}{13}, \frac{12}{13}, \frac{3}{13}$ वाली रेखाएँ परस्पर लम्बवत् हैं।

Q 2 Show that the line segment joining the point $A(1,-1,2)$ and $B(3,4,2)$ is perpendicular to the line segment joining the points $C(0,3,2)$ and $D(3,5,6)$.

दिखाइए कि बिन्दु $A(1,-1,2)$ और $B(3,4,2)$ को मिलाने वाली रेखाखण्ड, बिन्दु $C(0,3,2)$ और $D(3,5,6)$ को मिलाने वाली रेखाखण्ड के लम्बवत् है।

Q 3 A line passes through the point $(1,2,3)$ and is parallel to $3\hat{i} + 2\hat{j} - 2\hat{k}$. Find the equation of the line in vector forms.

बिन्दु $(1,2,3)$ से गुजरने वाली रेखा का सदिश समीकरण ज्ञात कीजिए जो सदिश $3\hat{i} + 2\hat{j} - 2\hat{k}$ के समान्तर है।

Q 4 Find the vector equation of the line passing through the points $(3,-2,-5)$ and $(3,-2,6)$.

बिन्दुओं $(3,-2,-5)$ और $(3,-2,6)$ से गुजरने वाली रेखा का सदिश समीकरण को ज्ञात कीजिए।

Q 5 Find the angle between the lines having direction ratios are $3,4,5$ and $4,-3,5$.

दिक् अनुपात $3,4,5$ और $4,-3,5$ के बीच का कोण ज्ञात करें।

Q 6 Find the distance of the plane $2x-3y+6z+14=0$ from origin.

मूल बिन्दु से समतल $2x-3y+6z+14=0$ की दूरी ज्ञात करें।

Q 7 Find the value of λ for which the lines

$$\frac{x-1}{1} = \frac{y-2}{\lambda} = \frac{z+1}{1} \text{ and } \frac{x+1}{-\lambda} = \frac{y+1}{2} = \frac{z-2}{2}$$

are perpendicular to each other.

λ का मान ज्ञात करें जिससे कि सरल रेखाएँ

$$\frac{x-1}{1} = \frac{y-2}{\lambda} = \frac{z+1}{1} \text{ और } \frac{x+1}{-\lambda} = \frac{y+1}{2} = \frac{z-2}{2}$$

परस्पर लम्ब हो।

Q 8 If α, β, γ be the angles, which a line makes with the positive direction of axes. Prove that $\sin^2 \alpha + \sin^2 \beta + \sin^2 \gamma = 2$

यदि कोई रेखा घनात्मक नियामक अक्षों के साथ α, β, γ कोण बनाती हो, तो सिद्ध कीजिए कि $\sin^2 \alpha + \sin^2 \beta + \sin^2 \gamma = 2$

Q 9 Find the direction cosines for a line that is perpendicular to each of the two lines whose direction ratios are $(2,-1,2)$ and $(3,0,1)$.

उस सरल रेखा के लिए दिक्-कोसाइन ज्ञात कीजिए। जो दिक् अनुपातों $(2,-1,2)$ और $(3,0,1)$ वाली दो सरल रेखाओं में से प्रत्येक पर लम्ब है।

Short Question (3 Marks)

Q 1 Find the angle between the lines $\vec{r} = -2\hat{i} - 5\hat{j} + \hat{k} + \lambda(3\hat{i} + 2\hat{j} + 6\hat{k})$ and $\vec{r} = 7\hat{i} - 6\hat{k} + \mu(\hat{i} + 2\hat{j} + 2\hat{k})$.

दिये गये रेखाओं $\vec{r} = -2\hat{i} - 5\hat{j} + \hat{k} + \lambda(3\hat{i} + 2\hat{j} + 6\hat{k})$ और $\vec{r} = 7\hat{i} - 6\hat{k} + \mu(\hat{i} + 2\hat{j} + 2\hat{k})$ के बीच का कोण ज्ञात करें।

Q 2 Find the angle between the lines

$$\frac{x-2}{2} = \frac{y-1}{5} = \frac{z+3}{-3} \text{ and } \frac{x+2}{-1} = \frac{y-4}{8} = \frac{z-5}{4}$$

दिये गये रेखाओं

$$\frac{x-2}{2} = \frac{y-1}{5} = \frac{z+3}{-3} \text{ और } \frac{x+2}{-1} = \frac{y-4}{8} = \frac{z-5}{4}$$

के बीच का कोण ज्ञात करें।

Q 3 Find the value of P, where lines

$$\frac{1-x}{3} = \frac{7y-14}{2P} = \frac{z-3}{2} \text{ and } \frac{7-7x}{3P} = \frac{y-5}{1} = \frac{6-z}{5}$$

are perpendicular.

P का मान ज्ञात कीजिए, जहाँ रेखाएँ

$$\frac{1-x}{3} = \frac{7y-14}{2P} = \frac{z-3}{2} \text{ और } \frac{7-7x}{3P} = \frac{y-5}{1} = \frac{6-z}{5}$$

परस्पर लम्ब हो।

Q 4 Find the distance between the lines $\vec{r} = \hat{i} + 2\hat{j} - 4\hat{k} + \lambda(2\hat{i} + 3\hat{j} + 6\hat{k})$ and $\vec{r} = 3\hat{i} + 3\hat{j} - 5\hat{k} + \mu(2\hat{i} + 3\hat{j} + 6\hat{k})$

रेखाओं $\vec{r} = \hat{i} + 2\hat{j} - 4\hat{k} + \lambda(2\hat{i} + 3\hat{j} + 6\hat{k})$ और $\vec{r} = 3\hat{i} + 3\hat{j} - 5\hat{k} + \mu(2\hat{i} + 3\hat{j} + 6\hat{k})$ के बीच की दूरी ज्ञात कीजिए।

Q 5 Find the distance of a plane $2x-3y+4z-6=0$ from the origin.

समतल $2x-3y+4z-6=0$ की मूल बिन्दु से दूरी ज्ञात कीजिए।

Q 6 Find the angle between of the planes $2x+y-2z=5$ and $3x-6y-2z=7$ in vector method.

दो समतलो $2x+y-2z=5$ और $3x-6y-2z=7$ के बीच का कोण सदिश विधि द्वारा ज्ञात कीजिए।

Q 7 Find the angle between the planes $x+y+2z=9$ and $2x-y+z=6$.

दो समतलो $x+y+2z=9$ और $2x-y+z=6$ के बीच का कोण ज्ञात कीजिए।

Q 8 Find the value of λ for which the planes $2x-4y+3z=7$ and $x+2y+\lambda z=18$ are perpendicular to each other.

समतलों $2x-4y+3z=7$ और $x+2y+\lambda z=18$ एक दूसरे के लम्बवत् हो तो λ का मान ज्ञात करें।

Q 9 Find the equation of the plane passing through the point $(1,4,-2)$ and parallel to the plane $-2x+y-3z=0$.

उस समतल का समीकरण ज्ञात कीजिए, जो बिन्दु $(1,4,-2)$ से होकर जाती है एवं समतल $-2x+y-3z=0$ के समान्तर हो।

Q 10 Find the equation of the plane passing through the points $(1,1,-1)$, $(6,4,-5)$ and $(-4,-2,3)$.

बिन्दुओं $(1,1,-1)$, $(6,4,-5)$ और $(-4,-2,3)$ से गुजरने वाले समतल का समीकरण ज्ञात कीजिए।

Long Question (5 Marks)

Q 1 Find the shortest distance of lines $\vec{r} = (\hat{i} + 2\hat{j} + \hat{k}) + \lambda(\hat{i} - \hat{j} + \hat{k})$ and $\vec{r} = (2\hat{i} - \hat{j} - \hat{k}) + \mu(2\hat{i} + \hat{j} + 2\hat{k})$.

रेखाओं $\vec{r} = (\hat{i} + 2\hat{j} + \hat{k}) + \lambda(\hat{i} - \hat{j} + \hat{k})$ और

$\vec{r} = (2\hat{i} - \hat{j} - \hat{k}) + \mu(2\hat{i} + \hat{j} + 2\hat{k})$ के बीच की दूरी ज्ञात कीजिए।

Q 2 Find the shortest distance of lines $\vec{r} = (\hat{i} + \hat{j}) + \lambda(2\hat{i} - \hat{j} + \hat{k})$ and $\vec{r} = (2\hat{i} - \hat{j} - \hat{k}) + \mu(3\hat{i} - 5\hat{j} + 2\hat{k})$.

रेखाओं $\vec{r} = (\hat{i} + \hat{j}) + \lambda(2\hat{i} - \hat{j} + \hat{k})$ और

$\vec{r} = (2\hat{i} - \hat{j} - \hat{k}) + \mu(3\hat{i} - 5\hat{j} + 2\hat{k})$ के बीच की दूरी ज्ञात कीजिए।

Q 3 Find the shortest distance of lines $\vec{r} = (\hat{i} + 2\hat{j} + 3\hat{k}) + \lambda(\hat{i} - 3\hat{j} + 2\hat{k})$ and $\vec{r} = (4\hat{i} + 5\hat{j} + 6\hat{k}) + \mu(2\hat{i} + 3\hat{j} + \hat{k})$.

रेखाओं $\vec{r} = (\hat{i} + 2\hat{j} + 3\hat{k}) + \lambda(\hat{i} - 3\hat{j} + 2\hat{k})$ और

$\vec{r} = (4\hat{i} + 5\hat{j} + 6\hat{k}) + \mu(2\hat{i} + 3\hat{j} + \hat{k})$ के बीच की दूरी ज्ञात कीजिए।

Q 4 Find the shortest distance between the line

$$\frac{x+1}{7} = \frac{y+1}{-6} = \frac{z+1}{1} \text{ and } \frac{x-3}{1} = \frac{y-5}{-2} = \frac{z-7}{1}$$

रेखाओं $\frac{x+1}{7} = \frac{y+1}{-6} = \frac{z+1}{1}$ और

$\frac{x-3}{1} = \frac{y-5}{-2} = \frac{z-7}{1}$ के बीच की न्यूनतम दूरी ज्ञात कीजिए।

Q 5 Find the equation of the plane passing through the intersection of the plane $3x-y+2z-4=0$ and $x+y+z-2=0$ and the point $(2,2,1)$.

उस समतल का समीकरण ज्ञात कीजिए, जो समतलो $3x-y+2z-4=0$ और $x+y+z-2=0$ के प्रतिच्छेदन तथा बिन्दु $(2,2,1)$ से होकर जाती है।

Q 6 Find the equation of the plane passing through the line of intersection of the planes $x+y+z=1$ and $2x+3y+4z=5$ which is perpendicular to the plane $x-y+z=0$.

समतलो $x+y+z=1$ और $2x+3y+4z=5$ के प्रतिच्छेदन रेखा से होकर जाने वाली तथा समतल $x-y+z=0$ पर लम्बवत् समतल का समीकरण ज्ञात कीजिए।

Q 7 Find the vector equation of the plane passing through the intersection of the planes $\vec{r} \cdot (2\hat{i} + 2\hat{j} - 3\hat{k}) = 7$, $\vec{r} \cdot (2\hat{i} + 5\hat{j} + 3\hat{k}) = 9$ and the point $(2,1,3)$.

उस समतल का सदिश समीकरण ज्ञात कीजिए जो समतल $\vec{r} \cdot (2\hat{i} + 2\hat{j} - 3\hat{k}) = 7$, $\vec{r} \cdot (2\hat{i} + 5\hat{j} + 3\hat{k}) = 9$ के प्रतिच्छेदन और बिन्दु $(2,1,3)$ से होकर जाता है।

Q 8 Find the angle between the planes, whose vector equation are $\vec{r} \cdot (2\hat{i} + 2\hat{j} - 3\hat{k}) = 5$ and $\vec{r} \cdot (3\hat{i} - 3\hat{j} + 5\hat{k}) = 3$.

समतलो, जिनके सदिश समीकरण

$\vec{r} \cdot (2\hat{i} + 2\hat{j} - 3\hat{k}) = 5$ और $\vec{r} \cdot (3\hat{i} - 3\hat{j} + 5\hat{k}) = 3$ के बीच का कोण ज्ञात करे।

Q 9 Find the equation of the plane passing through the point $(1, -2, 4)$, $(3, -4, 5)$ and perpendicular to the plane $x + y - 2z = 6$.

उस तल का समीकरण ज्ञात कीजिए जो बिन्दुओं $(1, -2, 4)$ और $(3, -4, 5)$ से गुजरती है तथा समतल $x + y - 2z = 6$ के लम्बवत् है।

MCQ 1-Marks Solution

Ans :-

1 - (a) 2 - (d) 3 - (c) 4 - (b) 5 - (a) 6 - (d) 7 - (c)

8 - (c) 9 - (d) 10 - (b) 11 - (c) 12 - (a) 13 - (c)

2-Marks Solution

1 Ans :

The direction cosines of first lines are

$$\frac{12}{13}, \frac{3}{13}, \frac{4}{13}$$

$$\text{So that } l_1 = \frac{12}{13}, m_1 = \frac{3}{13}, n_1 = \frac{4}{13}$$

The direction cosines of second lines are

$$\frac{4}{13}, \frac{12}{13}, \frac{3}{13}$$

$$\text{So that } l_2 = \frac{4}{13}, m_2 = \frac{12}{13}, n_2 = \frac{3}{13}$$

Now,

$$l_1 l_2 + m_1 m_2 + n_1 n_2 = \frac{12}{13} \cdot \frac{4}{13} + \frac{3}{13} \cdot \frac{12}{13} + \frac{4}{13} \cdot \frac{3}{13}$$

$$= \frac{48}{169} + \frac{36}{169} + \frac{12}{169}$$

$$= 0$$

Hence, the both lines are mutually perpendicular.

2 Ans :-

The direction ratios of the lines AB are

$$(3-1), (4+1), (-2, -2) \text{ i.e. } 2, 5, -4$$

$$\therefore a_1 = 2, b_1 = 5, c_1 = -4$$

Similarly the direction ratios of line CD are 3, 2, 4

$$\therefore a_2 = 3, b_2 = 2, c_2 = 4$$

$$\begin{aligned} \text{Now } a_1 a_2 + b_1 b_2 + c_1 c_2 &= 2 \cdot 3 + 5 \cdot 2 + (-4) \cdot 4 \\ &= 6 + 10 - 16 \\ &= 0 \end{aligned}$$

Hence the line AB and CD are mutually perpendicular.

3 Ans : In vector form

The given line passes through the point A(1, 2, 3) and is parallel to the vector $\vec{m} = 3\hat{i} + 2\hat{j} - 2\hat{k}$

the position vector of A is, $\vec{r}_1 = \hat{i} + 2\hat{j} + 3\hat{k}$

Hence the required line is $\vec{r} = \vec{r}_1 + \lambda \vec{m}$

$$= (\hat{i} + 2\hat{j} + 3\hat{k}) + \lambda(3\hat{i} + 2\hat{j} - 2\hat{k}) \dots \dots \dots \text{eqn(1)}$$

In cartesian form

$$\text{Taking } \vec{r} = x\hat{i} + y\hat{j} + z\hat{k}$$

Then equation (1) becomes

$$x\hat{i} + y\hat{j} + z\hat{k} = (\hat{i} + 2\hat{j} + 3\hat{k}) + \lambda(3\hat{i} + 2\hat{j} - 2\hat{k})$$

$$\Rightarrow x\hat{i} + y\hat{j} + z\hat{k}$$

$$= (1 + 3\lambda)\hat{i} + (2 + 2\lambda)\hat{j} + (3 - 2\lambda)\hat{k}$$

$$x = 1 + 3\lambda \Rightarrow \lambda = \frac{x-1}{3}$$

$$y = 2 + 2\lambda \Rightarrow \lambda = \frac{y-2}{2}$$

$$z = 3 - 2\lambda \Rightarrow \lambda = \frac{z-3}{-2}$$

$$\Rightarrow \frac{x-1}{3} = \frac{y-2}{2} = \frac{z-3}{-2} = \lambda$$

Hence $\frac{x-1}{3} = \frac{y-2}{2} = \frac{z-3}{-2}$ are the required equation of the given line.

4 Ans :-

Let the position vectors of $(3, -2, -5)$ and $(3, -2, 6)$ be \vec{r}_1 and \vec{r}_2 respectively. Then

$$\vec{r}_1 = 3\hat{i} - 2\hat{j} - 5\hat{k} \text{ and } \vec{r}_2 = 3\hat{i} - 2\hat{j} + 6\hat{k}$$

$$\therefore \vec{r}_2 - \vec{r}_1 = (3\hat{i} - 2\hat{j} + 6\hat{k}) - (3\hat{i} - 2\hat{j} - 5\hat{k})$$

$$= 0\hat{i} + 0\hat{j} + 11\hat{k} = 11\hat{k}$$

\therefore The vector equation of the line is

$$\vec{r} = \vec{r}_1 + \lambda(\vec{r}_2 - \vec{r}_1)$$

$$\text{i.e. } \vec{r} = 3\hat{i} - 2\hat{j} - 5\hat{k} - \lambda 11\hat{k}$$

This is the required equation.

5 Ans :-

Let θ be the angle between the given vector

$$\text{Let } a_1=3, b_1=4, c_1=5$$

$$\text{and } a_2=4, b_2=-3, c_2=5$$

$$\therefore \cos\theta = \frac{a_1 a_2 + b_1 b_2 + c_1 c_2}{(\sqrt{a_1^2 + b_1^2 + c_1^2})(\sqrt{a_2^2 + b_2^2 + c_2^2})}$$

$$= \frac{3.4 + 4.(-3) + 5.5}{(\sqrt{9 + 16 + 25})(\sqrt{16 + 9 + 25})}$$

$$\cos\theta = \frac{25}{\sqrt{50} \cdot \sqrt{50}} = \frac{25}{50} = \frac{1}{2}$$

$$\theta = \cos^{-1} \frac{1}{2} = \cos^{-1}(\cos 60^\circ)$$

$$\therefore \theta = 60^\circ$$

6 Ans :-

Let O be the origin.

$$\text{i.e. } x_1=0=y_1=z_1$$

the d.r.s of the given plane are $a=2, b=-3, c=6$

So that, perpendicular distance

$$P = \left| \frac{ax_1 + by_1 + cz_1 + d}{\sqrt{a^2 + b^2 + c^2}} \right|$$

$$= \left| \frac{2.0 + (-3).0 + 6.0 + 14}{\sqrt{2^2 + (-3)^2 + 6^2}} \right|$$

$$= \frac{14}{\sqrt{4 + 9 + 36}}$$

$$= \frac{14}{\sqrt{49}}$$

$$P = \frac{14}{7} = 2 \text{ units.}$$

Hence, the distance of the plane $2x-3y+6z+14=0$ from origin is 2 units.

7 Ans :-

The d.r.s of the first line are $a_1=1, b_1=\lambda, c_1=1$

The d.r.s of the second line are $a_2=-\lambda, b_2=2, c_2=2$

\therefore the lines are perpendicular to each other.

$$\text{so that, } a_1 a_2 + b_1 b_2 + c_1 c_2 = 0$$

$$\Rightarrow 1.(-\lambda) + \lambda.2 + 1.2 = 0$$

$$\Rightarrow -\lambda + 2\lambda + 2 = 0$$

$$\lambda = -2$$

8 Ans :-

The given line makes angles α, β, γ with the x-axis, y-axis and z-axis respectively.

So that, the direction cosine are

$$l = \cos\alpha$$

$$m = \cos\beta$$

$$n = \cos\gamma$$

we know that, $l^2 + m^2 + n^2 = 1$

$$\Rightarrow \cos^2\alpha + \cos^2\beta + \cos^2\gamma = 1$$

$$\Rightarrow 1 - \sin^2\alpha + 1 - \sin^2\beta + 1 - \sin^2\gamma = 1$$

$$\Rightarrow 3 - (\sin^2\alpha + \sin^2\beta + \sin^2\gamma) = 1$$

$$\Rightarrow \sin^2\alpha + \sin^2\beta + \sin^2\gamma = 2$$

9 Ans :-

Let l, m, n be the direction cosines of the required line.

$$\text{Then, } l(2) + m(-1) + n(2) = 0$$

$$\text{and, } l(3) + m(0) + n(1) = 0$$

$$\Rightarrow 2l - m + 2n = 0 \dots\dots\dots(1)$$

$$\text{and } 3l - 0m + n = 0 \dots\dots\dots(2)$$

Solve the (1) and(2) by Cross multiplying method, we get-

$$\frac{l}{-1} = \frac{m}{6-2} = \frac{n}{3}$$

$$\Rightarrow \frac{l}{-1} = \frac{m}{4} = \frac{n}{3} = \frac{\sqrt{l^2 + m^2 + n^2}}{\sqrt{(-1)^2 + 4^2 + 3^2}} = \frac{1}{\sqrt{26}}$$

$$\therefore l = \frac{-1}{\sqrt{26}}, m = \frac{4}{\sqrt{26}}, n = \frac{3}{\sqrt{26}}$$

3-Marks Solution

1 Ans :- Let θ be the angle between the given lines .

The given lines are parallel to the vector.

$$\vec{m}_1 = 3\hat{i} + 2\hat{j} + 6\hat{k} \text{ and } \vec{m}_2 = \hat{i} + 2\hat{j} + 2\hat{k}$$

$$\therefore \cos\theta = \frac{\vec{m}_1 \cdot \vec{m}_2}{|\vec{m}_1| |\vec{m}_2|} = \frac{(3\hat{i} + 2\hat{j} + 6\hat{k}) \cdot (\hat{i} + 2\hat{j} + 2\hat{k})}{|3\hat{i} + 2\hat{j} + 6\hat{k}| |\hat{i} + 2\hat{j} + 2\hat{k}|}$$

$$= \frac{3 + 4 + 12}{\sqrt{3^2 + 2^2 + 6^2} \sqrt{1^2 + 2^2 + 2^2}}$$

$$= \frac{19}{\sqrt{9 + 4 + 36} \sqrt{1 + 4 + 4}}$$

$$= \frac{19}{\sqrt{49} \sqrt{9}} = \frac{19}{7 \cdot 3} = \frac{19}{21}$$

$$\cos\theta = \frac{19}{21} \Rightarrow \theta = \cos^{-1}\left(\frac{19}{21}\right)$$

2 Ans :-

The d.r.s. of the line $\frac{x-2}{2} = \frac{y-1}{5} = \frac{z+3}{-3}$ are 2,5,3

i.e. $a_1 = 2, b_1 = 5, c_1 = 3$

And, the d.r.s of the line $\frac{x+2}{-1} = \frac{y-4}{8} = \frac{z-5}{4}$ are -1,8,4

i.e. $a_2 = -1, b_2 = 8, c_2 = 4$

Let θ be the angle between the given lines

$$\therefore \cos\theta = \frac{a_1 a_2 + b_1 b_2 + c_1 c_2}{\sqrt{a_1^2 + b_1^2 + c_1^2} \sqrt{a_2^2 + b_2^2 + c_2^2}}$$

$$= \frac{2 \cdot (-1) + 5 \cdot 8 + 3 \cdot 4}{\sqrt{4 + 25 + 9} \cdot \sqrt{1 + 64 + 16}}$$

$$\cos\theta = \frac{-2 + 40 - 12}{\sqrt{38} \cdot 9} = \frac{26}{9\sqrt{38}}$$

$$\therefore \theta = \cos^{-1}\left(\frac{26}{9\sqrt{38}}\right)$$

3 Ans :-

The d.r.s of the line $\frac{1-x}{3} = \frac{7y-14}{2P} = \frac{z-3}{2}$

i.e. $\frac{x-1}{-3} = \frac{y-14}{(2P/7)} = \frac{z-3}{2}$ are -3, $\frac{2P}{7}$, 2

The d.r.s of the line $\frac{7-7x}{3P} = \frac{y-5}{1} = \frac{6-z}{5}$

i.e. $\frac{x-1}{(-3P/7)} = \frac{y-5}{1} = \frac{z-6}{-5}$ are $-\frac{3P}{7}$, 1, -5

\therefore the lines are perpendicular

$$\text{So that } (-3) \cdot \left(-\frac{3P}{7}\right) + \frac{2P}{7} \cdot 1 + 2 \cdot (-5) = 0$$

$$\Rightarrow \frac{9P}{7} + \frac{2P}{7} = 10$$

$$\Rightarrow 11P = 70$$

$$\Rightarrow P = \frac{70}{11}$$

4 Ans :-

Comparing the given equation with the standard form of equation $\vec{r} = \vec{r}_1 + \lambda \vec{m}$ and $\vec{r} = \vec{r}_2 + \mu \vec{m}$ we, get

$$\vec{r}_1 = \hat{i} + 2\hat{j} - 4\hat{k}$$

$$\vec{r}_2 = 3\hat{i} + 3\hat{j} - 5\hat{k}$$

$$\vec{m} = 2\hat{i} + 3\hat{j} + 6\hat{k}$$

$$\therefore |\vec{m}| = \sqrt{4 + 9 + 36} = \sqrt{49} = 7$$

$$\vec{r}_2 - \vec{r}_1 = 2\hat{i} + \hat{j} - \hat{k}$$

$$\therefore \vec{m} \times (\vec{r}_2 - \vec{r}_1) = \begin{vmatrix} \hat{i} & \hat{j} & \hat{k} \\ 2 & 3 & 6 \\ 2 & 1 & -1 \end{vmatrix}$$

$$= (-3 - 6)\hat{i} + (12 + 2)\hat{j} + (2 - 6)\hat{k}$$

$$= -9\hat{i} + 14\hat{j} - 4\hat{k}$$

$$(\text{shortest distance between the lines})d = \frac{|\vec{m} \times (\vec{r}_2 - \vec{r}_1)|}{|\vec{m}|}$$

$$= \frac{|-9\hat{i} + 14\hat{j} - 4\hat{k}|}{7}$$

$$= \frac{\sqrt{81 + 196 + 16}}{7}$$

$$= \frac{\sqrt{293}}{7} \text{ units.}$$

5 Ans :-

Let O(0,0,0) be the origin. The d.r.s of given lines are a=2,b=-3,c=4

\therefore The length of the perpendicular is

$$P = \left| \frac{ax_1 + by_1 + cz_1 + d}{\sqrt{a^2 + b^2 + c^2}} \right|$$

$$= \left| \frac{2 \cdot 0 + (-3) \cdot 0 + 4 \cdot 0 - 6}{\sqrt{4 + 9 + 16}} \right|$$

$$= \frac{|-6|}{\sqrt{29}}$$

$$= \frac{6}{\sqrt{29}} \text{ units}$$

6 Ans :-

The given planes are

$$3x - 6y - 2z = 7 \text{ and } 2x + y - 2z = 5$$

So that, the normal of the planes are

$$\vec{n}_1 = 3\hat{i} - 6\hat{j} - 2\hat{k} \text{ and } \vec{n}_2 = 2\hat{i} + \hat{j} - 2\hat{k}$$

Since, angle between the planes is equal to angle between the normals

$$\begin{aligned} \therefore \cos\theta &= \frac{\vec{n}_1 \cdot \vec{n}_2}{|\vec{n}_1| |\vec{n}_2|} \\ &= \frac{6 - 6 + 4}{\sqrt{9 + 36 + 4} \sqrt{4 + 1 + 4}} \\ &= \frac{4}{\sqrt{49} \sqrt{9}} = \frac{4}{7 \cdot 3} \end{aligned}$$

$$\cos\theta = \frac{4}{21} \Rightarrow \theta = \cos^{-1}\left(\frac{4}{21}\right)$$

7 Ans :-

Let the θ be the angle between planes.

The eqn. of 1st plane is $x+y+2z=9$

so that, d.r.s are $a_1 = 1, b_1 = 1, c_1 = 2$

The eqn. of 2nd plane is $2x-y+z=6$

so that, d.r.s are $a_2 = 2, b_2 = -1, c_2 = 1$

$$\begin{aligned} \therefore \cos\theta &= \frac{a_1 a_2 + b_1 b_2 + c_1 c_2}{\sqrt{a_1^2 + b_1^2 + c_1^2} \sqrt{a_2^2 + b_2^2 + c_2^2}} \\ &= \frac{2 - 1 + 2}{\sqrt{1 + 1 + 4} \sqrt{4 + 1 + 1}} \end{aligned}$$

$$\cos\theta = \frac{3}{6} = \frac{1}{2} = \cos 60^\circ$$

$$\therefore \theta = 60^\circ$$

8 Ans :-

The given planes are

$$2x - 4y + 3z = 7 \text{ and } x + 2y + \lambda z = 18$$

where $a_1 = 2, b_1 = -4, c_1 = 3$

and $a_2 = 1, b_2 = 2, c_2 = \lambda$

The given planes are perpendicular,

$$\therefore a_1 a_2 + b_1 b_2 + c_1 c_2 = 0$$

$$2 - 8 + 3\lambda = 0$$

$$\lambda = \frac{6}{3} = 2$$

9 Ans :-

Let the eqn. of a plane parallel to the planes

$$-2x + y - 3z = 0 \text{ is } -2x + y - 3z = k.$$

\therefore planes $-2x + y - 3z = k$ is passes through

points (1,4,-2)

$$\therefore -2 \cdot 1 + 4 - 3 \cdot (-2) = k$$

$$\Rightarrow -2 + 4 + 6 = k$$

$$k = 8$$

Hence the required plane is

$$-2x + y - 3z = 8$$

10 Ans :-

Let the equation of plane be

$$ax + by + cz + d = 0 \text{(1)}$$

The plane is passes through the point (1,1,-1)

(6,4,-5) and (-4,-2,3) we, get

$$a + b - c + d = 0 \text{(2)}$$

$$6a + 4b - 5c + d = 0 \text{(3)}$$

$$\text{and } -4a - 2b + 3c + d = 0 \text{(4)}$$

subtract (3)-(2) and (3)-(4) we, get

$$5a - 5b - 4c = 0 \text{(5)}$$

$$\text{and, } 10a + 6b - 8c = 0 \text{(6)}$$

solve eqn(5) and (6) by cross multiplication method we, get

$$\frac{a}{40 + 24} = \frac{b}{-40 + 40} = \frac{c}{30 + 50} = k(\text{say})$$

$$a = 64k, b = 0, c = 80k$$

put these values in eqn(2) we, get

$$64k + 0 - 80k + d = 0$$

$$d = 16k$$

Again, put the values of a,b,c and d in eqn(1) we get

$$64kx + 0y + 80kz + 16k = 0$$

$$\Rightarrow 64x + 80z + 16 = 0$$

$$\Rightarrow 4x + 5z + 1 = 0$$

This is the required equation of plane.

1 Ans :-

The equation of the given lines are

$$\vec{r} = (\hat{i} + 2\hat{j} + \hat{k}) + \lambda(\hat{i} - \hat{j} + \hat{k})$$

and, $\vec{r} = (2\hat{i} - \hat{j} - \hat{k}) + \mu(2\hat{i} + \hat{j} + 2\hat{k})$

we know that the shortest distance between the lines $\vec{r} = \vec{a}_1 + \lambda\vec{b}_1$ and $\vec{r} = \vec{a}_2 + \mu\vec{b}_2$ is, given by

$$d = \left| \frac{(\vec{b}_1 \times \vec{b}_2)(\vec{a}_2 - \vec{a}_1)}{|\vec{b}_1 \times \vec{b}_2|} \right| \dots\dots\dots(1)$$

comparing the given equation, we get

$$\vec{a}_1 = \hat{i} + 2\hat{j} + \hat{k}$$

$$\vec{b}_1 = \hat{i} - \hat{j} + \hat{k}$$

$$\vec{a}_2 = 2\hat{i} - \hat{j} - \hat{k}$$

$$\vec{b}_2 = 2\hat{i} + \hat{j} + 2\hat{k}$$

$$\therefore \vec{a}_2 - \vec{a}_1 = (2\hat{i} - \hat{j} - \hat{k}) - (\hat{i} + 2\hat{j} + \hat{k})$$

$$= \hat{i} - 3\hat{j} - 2\hat{k}$$

$$\vec{b}_1 \times \vec{b}_2 = \begin{vmatrix} \hat{i} & \hat{j} & \hat{k} \\ 1 & -1 & 1 \\ 2 & 1 & 2 \end{vmatrix}$$

$$= (-2 - 1)\hat{i} - (2 - 2)\hat{j} + (1 + 2)\hat{k}$$

$$= -3\hat{i} + 3\hat{k}$$

$$|\vec{b}_1 \times \vec{b}_2| = \sqrt{(-3)^2 + 3^2} = \sqrt{9 + 9} = 3\sqrt{2}$$

Now,

$$d = \left| \frac{(-3\hat{i} + 3\hat{k}) \cdot (\hat{i} - 3\hat{j} - 2\hat{k})}{3\sqrt{2}} \right|$$

$$= \left| \frac{-3 - 6}{3\sqrt{2}} \right| = \frac{9}{3\sqrt{2}} = \frac{3}{\sqrt{2}} = \frac{3\sqrt{2}}{2} \text{ units.}$$

2 Ans :-

The equation of the given lines are

$$\vec{r} = (\hat{i} + \hat{j}) + \lambda(2\hat{i} - \hat{j} + \hat{k})$$

and, $\vec{r} = (2\hat{i} - \hat{j} - \hat{k}) + \mu(3\hat{i} - 5\hat{j} + 2\hat{k})$

we know that the shortest distance between the lines $\vec{r} = \vec{a}_1 + \lambda\vec{b}_1$ and $\vec{r} = \vec{a}_2 + \mu\vec{b}_2$ is, given by

$$d = \left| \frac{(\vec{b}_1 \times \vec{b}_2)(\vec{a}_2 - \vec{a}_1)}{|\vec{b}_1 \times \vec{b}_2|} \right|$$

comparing the given equation, we get

$$\vec{a}_1 = \hat{i} + \hat{j}$$

$$\vec{b}_1 = 2\hat{i} - \hat{j} + \hat{k}$$

$$\vec{a}_2 = 2\hat{i} - \hat{j} - \hat{k}$$

$$\vec{b}_2 = 3\hat{i} - 5\hat{j} + 2\hat{k}$$

$$\therefore \vec{a}_2 - \vec{a}_1 = (\hat{i} - 2\hat{j} - \hat{k})$$

$$\vec{b}_1 \times \vec{b}_2 = \begin{vmatrix} \hat{i} & \hat{j} & \hat{k} \\ 2 & -1 & 1 \\ 3 & -5 & 2 \end{vmatrix}$$

$$= (-2 + 5)\hat{i} - (4 - 3)\hat{j} + (-10 + 3)\hat{k}$$

$$= 3\hat{i} - \hat{j} - 7\hat{k}$$

$$|\vec{b}_1 \times \vec{b}_2| = \sqrt{9 + 1 + 49} = \sqrt{59}$$

Now,

$$d = \left| \frac{(3\hat{i} - \hat{j} - 7\hat{k}) \cdot (\hat{i} - 2\hat{j} - \hat{k})}{\sqrt{59}} \right|$$

$$= \left| \frac{3 + 2 + 7}{\sqrt{59}} \right| = \frac{12}{\sqrt{59}} = \frac{12\sqrt{59}}{59} \text{ units.}$$

3 Ans :-

The given lines are

$$\vec{r} = (\hat{i} + 2\hat{j} + 3\hat{k}) + \lambda(\hat{i} - 3\hat{j} + 2\hat{k})$$

and, $\vec{r} = (4\hat{i} + 5\hat{j} + 6\hat{k}) + \mu(2\hat{i} + 3\hat{j} + \hat{k})$

we know that the shortest distance between the lines $\vec{r} = \vec{a}_1 + \lambda\vec{b}_1$ and $\vec{r} = \vec{a}_2 + \mu\vec{b}_2$ is given by

$$d = \left| \frac{(\vec{b}_1 \times \vec{b}_2)(\vec{a}_2 - \vec{a}_1)}{|\vec{b}_1 \times \vec{b}_2|} \right|$$

comparing the given equation, we get

$$\vec{a}_1 = \hat{i} + 2\hat{j} + 3\hat{k}$$

$$\vec{b}_1 = \hat{i} - 3\hat{j} + 2\hat{k}$$

$$\vec{a}_2 = 4\hat{i} + 5\hat{j} + 6\hat{k}$$

$$\vec{b}_2 = 2\hat{i} + 3\hat{j} + \hat{k}$$

$$\therefore \vec{a}_2 - \vec{a}_1 = (3\hat{i} + 3\hat{j} + 3\hat{k})$$

$$\vec{b}_1 \times \vec{b}_2 = \begin{vmatrix} \hat{i} & \hat{j} & \hat{k} \\ 1 & -3 & 2 \\ 2 & 3 & 1 \end{vmatrix}$$

$$= (-3 - 6)\hat{i} - (1 - 4)\hat{j} + (3 + 6)\hat{k}$$

$$= -9\hat{i} + 3\hat{j} + 9\hat{k}$$

$$|\vec{b}_1 \times \vec{b}_2| = \sqrt{81 + 9 + 81} = \sqrt{171} = 3\sqrt{19}$$

Now ,

$$d = \left| \frac{(-9\hat{i} + 3\hat{j} + 9\hat{k}) \cdot (3\hat{i} + 3\hat{j} + 3\hat{k})}{3\sqrt{19}} \right|$$

$$= \left| \frac{-27 + 9 + 27}{3\sqrt{19}} \right| = \frac{9}{3\sqrt{19}} = \frac{3}{\sqrt{19}} \text{ units.}$$

4 Ans :-

The given lines are $\frac{x+1}{7} = \frac{y+1}{-6} = \frac{z+1}{1}$ and $\frac{x-3}{1} = \frac{y-5}{-2} = \frac{z-7}{1}$

These lines are comparing with standard form of equation. we, get

$$x_1 = -1, y_1 = -1, z_1 = -1$$

$$x_2 = 3, y_2 = 5, z_2 = 7$$

$$a_1 = 7, b_1 = -6, c_1 = 1$$

$$a_2 = 1, b_2 = -2, c_2 = 1$$

$$d = \frac{\begin{vmatrix} x_2 - x_1 & y_2 - y_1 & z_2 - z_1 \\ a_1 & b_1 & c_1 \\ a_2 & b_2 & c_2 \end{vmatrix}}{\sqrt{(b_1 c_2 - b_2 c_1)^2 + (c_1 a_2 - c_2 a_1)^2 + (a_1 b_2 - a_2 b_1)^2}}$$

Now ,

$$\begin{vmatrix} x_2 - x_1 & y_2 - y_1 & z_2 - z_1 \\ a_1 & b_1 & c_1 \\ a_2 & b_2 & c_2 \end{vmatrix}$$

$$= \begin{vmatrix} 3+1 & 5+1 & 7+1 \\ 7 & -6 & 1 \\ 1 & -2 & 1 \end{vmatrix} = \begin{vmatrix} 4 & 6 & 8 \\ 7 & -6 & 1 \\ 1 & -2 & 1 \end{vmatrix}$$

$$= 4(-6+2) - 6(7-1) + 8(-14+6)$$

$$= -16 - 36 - 64$$

$$= -116$$

Again ,

$$\sqrt{(b_1 c_2 - b_2 c_1)^2 + (c_1 a_2 - c_2 a_1)^2 + (a_1 b_2 - a_2 b_1)^2}$$

$$= \sqrt{(-6+2)^2 + (1-7)^2 + (-14+6)^2}$$

$$= \sqrt{16+36+64} = \sqrt{116} = 2\sqrt{29}$$

Substituting all the values in eqn(1). we, get

$$\therefore d = \frac{-116}{2\sqrt{29}} = \frac{-58}{\sqrt{29}} = \frac{-58\sqrt{29}}{29} = -2\sqrt{29}$$

$$= 2\sqrt{29} \text{ unit } (\because \text{distance is always non - negative})$$

5 Ans :-

The equation of the plane passing through the intersection of the planes $3x-y+2z-4=0$ and $x+y+z-2=0$ is

$$(3x - y + 2z - 4) + \lambda(x + y + z - 2) = 0, \lambda \in \mathbb{R}$$

.....(1)

The plane passes through the point (2,2,1), therefore this point will satisfy the (1).

$$(3 \cdot 2 - 2 + 2 \cdot 1 - 4) + \lambda(2 + 2 + 1 - 2) = 0$$

$$\Rightarrow (6 - 2 + 2 - 4) + \lambda(3) = 0$$

$$\Rightarrow 2 + 3\lambda = 0$$

$$\therefore \lambda = -\frac{2}{3}$$

Substituting $\lambda = -\frac{2}{3}$ in eqn(1) , we obtain

$$(3x - y + 2z - 4) - \frac{2}{3}(x + y + z - 2) = 0$$

$$\Rightarrow 9x - 3y + 6z - 12 - 2x - 2y - 2z + 4 = 0$$

$$\Rightarrow 7x - 5y + 4z - 8 = 0$$

This is the required equation of plane.

6 Ans :-

The equation of plane passing through the intersection of the planes $x+y+z=1$ and $2x+3y+4z=5$ is

$$(x + y + z - 1) + \lambda(2x + 3y + 4z - 5) = 0, \lambda \in \mathbb{R}$$

$$\Rightarrow (2\lambda + 1)x + (3\lambda + 1)y + (4\lambda + 1)z + (-5\lambda - 1) = 0$$

.....(1)

The d.r.s a_1, b_1, c_1 of the plane (1) are

$$(2\lambda + 1), (3\lambda + 1), (4\lambda + 1) \text{ respectively.}$$

The plane of(1) is perpendicular to $x-y+z=0$ Its d.r.s a_2, b_2, c_2 are 1, -1 and 1 respectively.

\therefore the planes are perpendicular

$$\therefore a_1 a_2 + b_1 b_2 + c_1 c_2 = 0$$

$$\Rightarrow (2\lambda + 1) \cdot 1 + (3\lambda + 1) \cdot (-1) + (4\lambda + 1) \cdot 1 = 0$$

$$\Rightarrow 2\lambda + 1 - 3\lambda - 1 + 4\lambda + 1 = 0$$

$$\Rightarrow 3\lambda + 1 = 0$$

$$\Rightarrow \lambda = -\frac{1}{3}$$

put $\lambda = -\frac{1}{3}$ in(1) we get

$$\left(\frac{-2}{3} + 1\right)x + \left(\frac{-3}{3} + 1\right)y + \left(\frac{-4}{3} + 1\right)z + \left(\frac{5}{3} - 1\right) = 0$$

$$\Rightarrow \frac{1}{3}x + 0 \cdot y - \frac{1}{3}z + \frac{2}{3} = 0$$

$$\Rightarrow x - z + 2 = 0$$

This is required eqn. of plane.

7 Ans :-

The eqn. of planes are

$$\vec{r} \cdot (2\hat{i} + 2\hat{j} - 3\hat{k}) - 7 = 0 \quad \dots\dots\dots(1)$$

$$\text{and } \vec{r} \cdot (2\hat{i} + 5\hat{j} + 3\hat{k}) - 9 = 0 \quad \dots\dots\dots(2)$$

The eqn. of plane passing through the intersection of the planes (1) and (2) is, given by

$$[\vec{r} \cdot (2\hat{i} + 2\hat{j} - 3\hat{k}) - 7] + \lambda [\vec{r} \cdot (2\hat{i} + 5\hat{j} + 3\hat{k}) - 9] = 0$$

$$\Rightarrow \vec{r} \cdot [(2\hat{i} + 2\hat{j} - 3\hat{k}) + \lambda(2\hat{i} + 5\hat{j} + 3\hat{k})] = 9\lambda + 7$$

$$\Rightarrow \vec{r} \cdot [(2 + 2\lambda)\hat{i} + (2 + 5\lambda)\hat{j} + (-3 + 3\lambda)\hat{k}] = 9\lambda + 7 \quad \dots\dots\dots(3)$$

The plane passes through the point (2,1,3)

$$\therefore \text{ its position vector is } \vec{r} = 2\hat{i} + \hat{j} + 3\hat{k}$$

Substituting in eqn(3) we, obtain

$$(2\hat{i} + \hat{j} + 3\hat{k}) \cdot [(2 + 2\lambda)\hat{i} + (2 + 5\lambda)\hat{j} + (-3 + 3\lambda)\hat{k}] = 9\lambda + 7$$

$$\Rightarrow 2(2 + 2\lambda) + (2 + 5\lambda) + 3(-3 + 3\lambda) = 9\lambda + 7$$

$$\Rightarrow 4 + 4\lambda + 2 + 5\lambda - 9 + 9\lambda = 9\lambda + 7$$

$$\Rightarrow -3 + 18\lambda = 9\lambda + 7$$

$$\Rightarrow 9\lambda = 10 \Rightarrow \lambda = \frac{10}{9}$$

Substituting $\lambda = \frac{10}{9}$ in eqn (3). we, get

$$\vec{r} \cdot \left[\left(2 + \frac{20}{9}\right)\hat{i} + \left(2 + \frac{50}{9}\right)\hat{j} + \left(-3 + \frac{30}{9}\right)\hat{k} \right] = \frac{90}{9} + 7$$

$$\Rightarrow \vec{r} \cdot [38\hat{i} + 68\hat{j} + 3\hat{k}] = 153$$

This is required equation of plane.

8 Ans :-

Given equation of plane are

$$\vec{r} \cdot (2\hat{i} + 2\hat{j} - 3\hat{k}) = 5 \text{ and } \vec{r} \cdot (3\hat{i} - 3\hat{j} + 5\hat{k}) = 3$$

We know that if \vec{n}_1 and \vec{n}_2 are normal to the planes $\vec{r} \cdot \vec{n}_1 = d_1$ and $\vec{r} \cdot \vec{n}_2 = d_2$ then the angle between them θ , is given by

$$\cos\theta = \left| \frac{\vec{n}_1 \cdot \vec{n}_2}{|\vec{n}_1| \cdot |\vec{n}_2|} \right| \dots\dots\dots(1)$$

$$\text{Here, } \vec{n}_1 = 2\hat{i} + 2\hat{j} - 3\hat{k}$$

$$\vec{n}_2 = 3\hat{i} - 3\hat{j} + 5\hat{k}$$

$$\vec{n}_1 \cdot \vec{n}_2 = 6 - 6 - 15 = -15$$

$$|\vec{n}_1| = \sqrt{4 + 4 + 9} = \sqrt{17}$$

$$|\vec{n}_2| = \sqrt{9 + 9 + 25} = \sqrt{43}$$

$$\therefore \cos\theta = \left| \frac{-15}{\sqrt{17} \cdot \sqrt{43}} \right| = \frac{15}{\sqrt{731}}$$

$$\therefore \theta = \cos^{-1} \frac{15}{\sqrt{731}} \text{ Ans...}$$

9 Ans :-

Let the equation of required plane be

$$ax + by + cz + d = 0 \quad \dots\dots\dots(1)$$

It is perpendicular to the plane $x + y - 2z = 6$

$$\therefore a \cdot 1 + b \cdot 1 + c \cdot (-2) = 0$$

$$\Rightarrow a + b - 2c = 0 \quad \dots\dots\dots(2)$$

\therefore the plane (1) passes through the given points(1,-2,4) and (3,-4,5). then,

$$a - 2b + 4c + d = 0 \quad \dots\dots\dots(3)$$

$$\text{and } 3a - 4b + 5c + d = 0 \quad \dots\dots\dots(4)$$

Subtract (3) from (4) we, gets

$$2a - 2b + c = 0 \quad \dots\dots\dots(5)$$

Now from (2) and (5)

$$a + b - 2c = 0$$

$$2a - 2b + c = 0$$

Solving these equation by cross multiplication method we, get

$$\frac{a}{1 - 4} = \frac{b}{-4 - 1} = \frac{c}{-2 - 2}$$

$$\Rightarrow \frac{a}{-3} = \frac{b}{-5} = \frac{c}{-4} = -k \text{ (say)}$$

$$\Rightarrow \frac{a}{3} = \frac{b}{5} = \frac{c}{4} = k$$

$$\Rightarrow a = 3k, b = 5k, c = 4k$$

Substituting these values in (3). we, get

$$3k - 10k + 16k + d = 0$$

$$9k + d = 0$$

$$d = -9k$$

Putting the value of a,b,c and d in (1) we, get

$$3x + 5y + 4z - 9 = 0$$

Hence, the required plane.

Solve the L.P.P graphically.

आलेख द्वारा निम्न रैखिक प्रोग्रामन समस्या को हल कीजिए:

1. Maximize $z = 4x + y$ s.t. $x + y \leq 50$,
 $3x + y \leq 90$
 $x \geq 0, y \geq 0$
 निम्न अवरोधों के अंतर्गत $z = 4x + y$ का अधिकतम मान ज्ञात कीजिए : $x + y \leq 50, 3x + y \leq 90$
 $x \geq 0, y \geq 0$

2. Minimize $Z = -3x + 4y$ subject to
 $x + 2y \leq 8, 3x + 2y \leq 12,$
 $x \geq 0, y \geq 0$

निम्न अवरोधों के अंतर्गत $Z = -3x + 4y$ का न्यूनतमीकरण कीजिए :
 $x + 2y \leq 8, 3x + 2y \leq 12,$
 $x \geq 0, y \geq 0$

3. Maximize $Z = 3x + 2y$ subject to
 $x + 2y \leq 10, 3x + y \leq 15 \quad x \geq 0, y \geq 0$

निम्न अवरोधों के अंतर्गत: $Z = 3x + 2y$ का अधिकतम मान ज्ञात कीजिए –

$$x + 2y \leq 10, 3x + y \leq 15 \quad x \geq 0, y \geq 0$$

4. Find Maximum and Minimum value of $Z = 5x + 10y$ subject to $x + 2y \leq 120$,

$$x + y \geq 60, x - 2y \geq 0 \quad x, y \geq 0$$

निम्न अवरोधों के अंतर्गत $Z = 5x + 10y$ का न्यूनतमीकरण तथा अधिकतमीकरण कीजिए :

$$x + 2y \leq 120 ,$$

$$x + y \geq 60, x - 2y \geq 0 \quad x, y \geq 0$$

5. Maximize $Z = y - 2x$ subject to
 $x \leq 2, x + y \leq 3, -2x + y \leq 1 \quad x, y \geq 0$

निम्न अवरोधों के अंतर्गत $Z = y - 2x$

का अधिकतमीकरण कीजिए –

$$x \leq 2, x + y \leq 3, -2x + y \leq 1 \quad x, y \geq 0 .$$

6. Minimize and Maximize $Z = x + 2y$ subject to
 $x + 2y \geq 100, 2x - y \leq 0, 2x + y \leq 200.$
 $x, y \geq 0$

निम्न अवरोधों के अंतर्गत $Z = x + 2y$ का न्यूनतमीकरण तथा अधिकतमीकरण कीजिए :
 $x + 2y \geq 100, 2x - y \leq 0, 2x + y \leq 200$
 $x, y \geq 0$

5 MARKS SOLUTION

Sol -

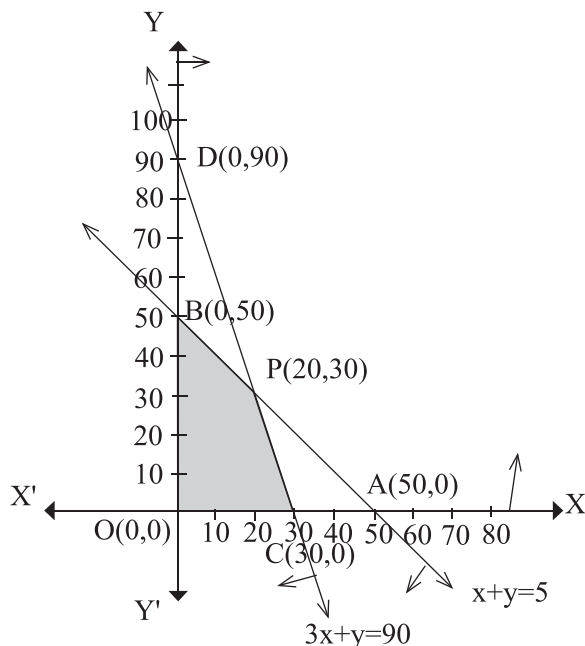
Convert all the constraints into equation, we get,

$$x + y = 50, 3x + y = 90, x = 0, y = 0$$

$$\Rightarrow \frac{x}{50} + \frac{y}{50} = 1, \frac{x}{30} + \frac{y}{90} = 1$$

Hence Eqⁿ $x + y = 50$ cuts the x -axis at A(50,0) and y -axis at B(0,50)

Similarly eqⁿ $3x + y = 90$ cuts the x -axis at C(30,0) and y -axis at D(0,90).



Check the region at (0,0) we get

$$0 + 0 \leq 50 \quad \& \quad 0 + 0 \leq 90$$

\therefore all inequation satisfies (0,0)

Corner point	objective function $Z_{\max} = 4x + y$
O(0,0)	$Z = 0$
C(30,0)	$Z = 4.30 + 0 = 120$ (Max ^m)
P(20,30)	$Z = 4.20 + 30 = 110$
B(0,50)	$Z = 0 + 50 = 50$

\therefore Z is maximum at C(30,0)

$$\therefore Z_{\max} = 120$$

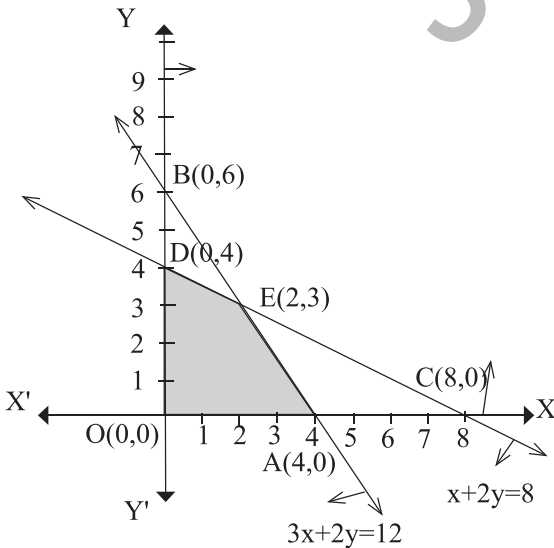
2. Convert all the constraints into eqⁿ-

$$x + 2y = 8, \quad 3x + 2y = 12, \quad x = 0, \quad y = 0$$

Draw the graph-

x	8	0
y	0	4

x	4	0
y	0	6



put (0,0) into equation

$$\text{we get, } 0 \leq 8, \quad 0 \leq 12$$

All the equation satisfies (0,0)

The corner points of the feasible region are

O(0,0), A(4,0), E(2,3) and D(0,4)

The values of Z at there corner points are-

Corner points	$Z = -3x + 4y$
O(0,0)	$Z = 0$
A(4,0)	$Z = -12 + 0 = -12$ (Min ^m)
E(2,3)	$Z = -6 + 12 = 6$
D(0,4)	$Z = 0 + 16 = 16$

The minimum value of Z is -12 at (4,0).

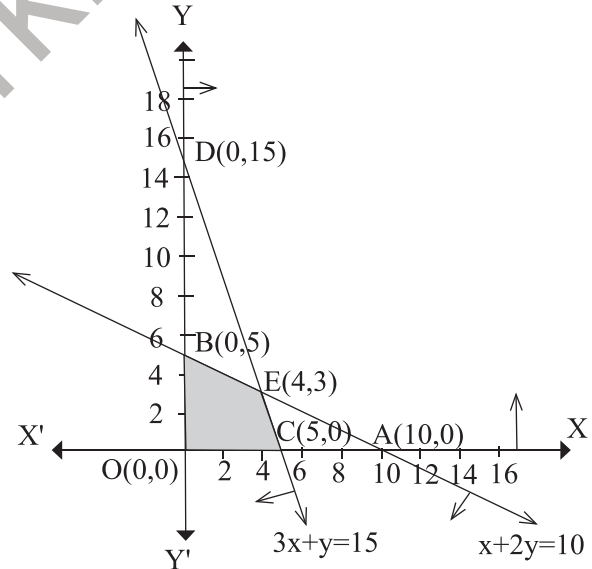
3. Convert all the constraints into eqⁿ.

$$x + 2y = 10, \quad 3x + y = 15, \quad x = 0, \quad y = 0$$

Draw the graph-

x	10	0
y	0	5

x	5	0
y	0	15



The corner points of the feasible region are

O(0,0), C(5,0), E(4,3) and B(0,5)

The values of Z at these corner points are-

Corner points	$Z = 3x + 2y$
O(0,0)	$Z = 0 + 0 = 0$
C(5,0)	$Z = 3.5 + 0 = 15$
E(4,3)	$Z = 3.4 + 2.3 = 18$ (Max ^m)
B(0,5)	$Z = 0 + 2.5 = 10$

\therefore The maximum value of Z is 18 at the point (4,3)

4. Convert all the constraints into eqⁿ-

We get,

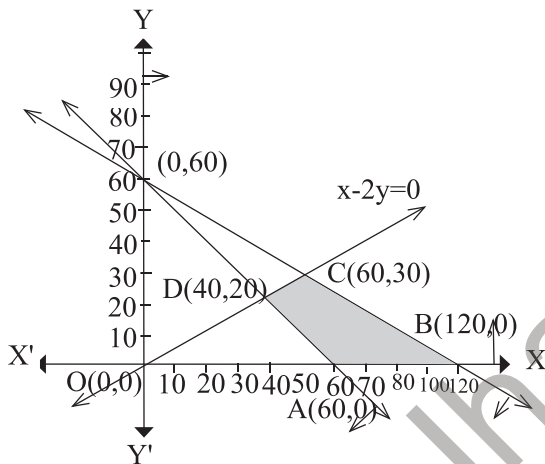
$$x + 2y = 120, x + y = 60, x - 2y = 0,$$

$$x = y = 0$$

$$\Rightarrow \frac{x}{120} + \frac{y}{60} = 1, \frac{x}{60} + \frac{y}{60} = 1,$$

$$x = 2y$$

Hence the equation $x+2y=120$ cut at $(120,0)$ and $(0, 60)$ and $x+y=60$ cuts x-axis at $(60, 0)$ and y-axis at $(0,60)$ and $x=2y$ passes through the origin and all equation satisfies $(0,0)$



The corner points of the feasible region are $A(60,0)$, $B(120,0)$, $C(60,30)$ and $D(40,20)$

The value of z at these corner points are-

Corner points	$Z=5x+10y$
$A(60,0)$	$Z=5.60+0=300$ (Min ^m)
$B(120,0)$	$Z=5.120+0=600$ (Max ^m)
$C(60,30)$	$Z=5.60+10.30=600$ (Max ^m)
$D(40,20)$	$Z=5.40+10.20=400$

The minimum value of Z is 300 at $(60,0)$ and the maximum value of Z is 600 at all the points on the line segment joining $(120,0)$ and $(60,30)$.

5. Sol- Convert all the constraints into eqⁿ-

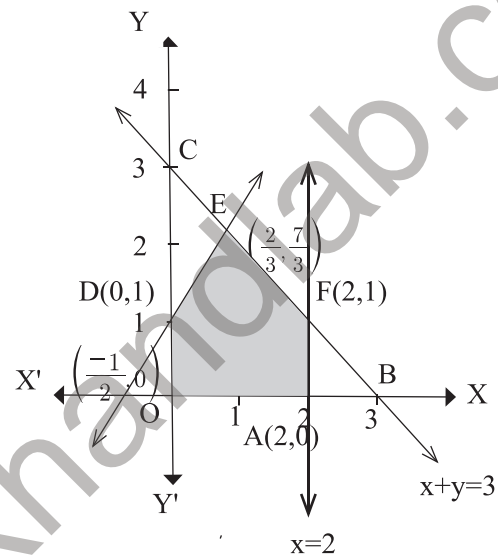
We, get

$$x = 2, x + y = 3, -2x + y = 1, x = 0, y = 0$$

$$\Rightarrow \frac{x}{3} + \frac{y}{3} = 1, \frac{x}{(-\frac{1}{2})} + \frac{y}{1} = 1$$

Hence, the equation $x=2$ cut x-axis at $(2,0)$ and parallel to y-axis, eqⁿ $x+y=3$ cuts x-axis at $(3,0)$ and y-axis at $(0,3)$ and $-2x+y=1$ cuts x-axis at $(-\frac{1}{2}, 0)$ and y-axis at $(0,1)$ and all

inequation satisfies at $(0,0)$.



The corner points of the feasible region are $O(0,0)$, $A(2,0)$, $F(2,1)$, $E(\frac{2}{3}, \frac{7}{3})$ and $D(0,1)$

The value of Z at these corner points are-

Corner points	$Z=y-2x$
$O(0,0)$	$0+0=0$
$A(2,0)$	$0-4=-4$
$F(2,1)$	$1-4=-3$
$E(2/3, 7/3)$	$\frac{7}{3} - \frac{4}{3} = 1$ (Max ^m)
$D(0,1)$	$1-0=1$ (Max ^m)

The maximum value of Z is 1 at all points on the line segment joining $D(0,1)$ and $E(\frac{2}{3}, \frac{7}{3})$

6. Convert all the constraints into eqⁿ-

We get,

$$x + 2y = 100, 2x - y = 0, 2x + y = 200,$$

$$x = y = 0$$

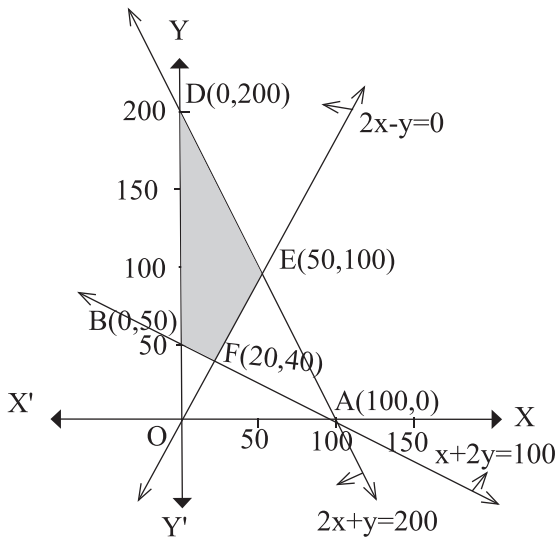
$$\Rightarrow \frac{x}{100} + \frac{y}{50} = 1, 2x = y \quad \frac{x}{100} + \frac{y}{200} = 1$$

Equation $x+2y=100$ cuts x-axis at points

$A(100,0)$ and y axis at $B(0,50)$.

Equation $2x=y$ passes through origin and equation $2x+y=200$ cuts x-axis at point $C(100,0)$

and y-axis at D(0,200) and all the equation satisfies (0,0).



The Corner points of the feasible region are B(0,50), E(50,100), F(20,40) and D(0,200).

The value of Z at these corner points are -

Corner points	$Z=x+2y$
B(0,50)	$Z=0 + 2.50 = 100$ (Min ^m)
F(20,40)	$Z=20+80=100$ (Min ^m)
E(50,100)	$Z=50+200=250$
D(0,200)	$Z=0+400=400$ (Max ^m)

The Maximum value of Z is 400 at (0,200) and the minimum value of Z is 100 at all points on the line segment joining the points B(0,50) and F(20,40).

MCQ

1. An event in the probability that will never be happened is called as.
एक घटना जो कभी नहीं होगी उसे क्या कहा जाता है ?
a) Unsure event b) Sure event
अनिश्चित घटना निश्चित घटना
c) Possible event d) Impossible event
सम्भव घटना असम्भव घटना
2. What will be the probability of getting odd numbers if a dice is thrown ?
एक पासे को फेंकने पर विषम संख्या आने की प्रायिकता क्या होगी ?
a) $\frac{1}{2}$ b) 2
c) $\frac{1}{3}$ d) $\frac{5}{2}$
3. What will be the probability of losing a game if the winning probability is 0.3 ?
यदि एक खेल के जीतने की प्रायिकता 0.3 है तो इसे हारने की प्रायिकता क्या होगी ?
a) 0.5 b) 0.6
c) 0.7 d) 0.8
4. A card is drawn from a pack of 52 cards. What is the probability of getting a king of a black suit ?
52 ताश के पत्तों की एक गड्डी से एक काला राजा मिलने की प्रायिकता क्या है ?
a) $\frac{1}{52}$ b) $\frac{1}{26}$
c) $\frac{3}{26}$ d) $\frac{7}{52}$
5. A card is drawn from a pack of 52 cards. What is the probability of getting a queen card ?
52 ताश के एक गड्डी से एक पत्ता निकाला गया। उसके रानी होने की प्रायिकता क्या है ?
a) $\frac{1}{26}$ b) $\frac{1}{52}$
c) $\frac{3}{13}$ d) $\frac{1}{13}$
6. Which of the following can be the probability of an event ?
निम्न में से कौन सी संख्या किसी घटना की प्रायिकता हो सकती है ?
a) -1.3 b) 04
c) $\frac{3}{8}$ d) $\frac{10}{7}$
7. If $P(A) = \frac{1}{2}$, $P(B) = 0$ then $P\left(\frac{A}{B}\right)$ is
यदि $P(A) = \frac{1}{2}$, $P(B) = 0$ तब $P\left(\frac{A}{B}\right)$ है।
a) 0 b) $\frac{1}{2}$,
c) Undefined d) 1
परिभाषित नहीं
8. If A and B be two events such that
 $P\left(\frac{A}{B}\right) = P\left(\frac{B}{A}\right) \neq 0$, then
यदि A और B दो घटनाएँ इस प्रकार हैं कि
 $P\left(\frac{A}{B}\right) = P\left(\frac{B}{A}\right) \neq 0$, तब
a) $A \subset B$ b) $A = B$
c) $A \cap B \neq \phi$ d) $P(A) = P(B)$
9. If E and F are events such that $P(E) = 0.6$, $P(F) = 0.3$ and $P(E \cap F) = 0.2$. Find $P\left(\frac{E}{F}\right)$
यदि E और F इस प्रकार की घटनाएँ हैं कि $P(E) = 0.6$,
 $P(F) = 0.3$ और $P(E \cap F) = 0.2$. हैं तो $P\left(\frac{E}{F}\right)$ होगा।
a) $\frac{2}{3}$ b) $\frac{3}{2}$
c) $\frac{1}{6}$ d) $\frac{1}{2}$
10. $P(A \cap B)$ is equal to.
 $P(A \cap B)$ के बराबर होगा।
a) $P(A) \cdot P\left(\frac{B}{A}\right)$ b) $P(B) \cdot P\left(\frac{A}{B}\right)$

- c) Both (a) and (b)
(a) और (b) दोनों
- d) None of these
इनमें से कोई नहीं
11. If E and F are independent events , then
यदि E और F स्वतंत्र घटना हो, तो
- a) $P(E \cap F) = \frac{P(E)}{P(F)}$
- b) $P(E \cap F) = P(E) + P(F)$
- c) $P(E \cap F) = P(E) \cdot P(F)$
- d) None of these
इनमें से कोई नहीं
12. The probability of obtaining an even prime number on each die when a pair of dice rolled.
दो पासे के एक बार फेंकने पर प्रत्येक में सम अभाज्य संख्या आने की प्रायिकता क्या होगी?
- a) 0 b) $\frac{1}{3}$
- c) $\frac{1}{12}$ d) $\frac{1}{36}$
13. A die is thrown once , then the probability of getting a number greater than 3 is
एक पासे को एक बार फेंकने पर 3 से बड़ी संख्या आने की प्रायिकता होगी।
- a) $\frac{1}{2}$ b) $\frac{2}{3}$
- c) 3 d) 0
14. An urn containing 6 balls of which two are red and four are black .Two balls are drawn at random, probability that they are of the different colour is?
एक थैले में 6 गेंदे हैं जिसमें 2 गेंदे लाल और 4 गेंदे काली हैं तो दो गेंदे निकालने पर दोनों भिन्न रंग के होने की प्रायिकता क्या होगी ?
- a) $\frac{2}{5}$ b) $\frac{1}{15}$
- c) $\frac{8}{15}$ d) $\frac{4}{15}$
1. Find $P\left(\frac{A}{B}\right)$. If $P(B)=0.5$ and $P(A \cap B) = 0.32$
 $P\left(\frac{A}{B}\right)$ ज्ञात कीजिए, यदि $P(B)=0.5$ और $P(A \cap B) = 0.32$
2. If $P(A)=\frac{6}{11}$, $P(B)=\frac{5}{11}$ and $P(A \cup B) = \frac{7}{11}$, then find $P(A \cap B)$.
यदि $P(A)=\frac{6}{11}$, $P(B)=\frac{5}{11}$ और $P(A \cup B) = \frac{7}{11}$ हो तो $P(A \cap B)$ का मान ज्ञात करें ।
3. Given two independent events A and B Such that $P(A)=0.3$ $P(B)=0.6$.Find $P(A$ and $B)$.
A और B स्वतंत्र घटनाएँ दी गई हैं जहाँ $P(A)=0.3$, $P(B)=0.6$ तो $P(A$ और $B)$ का मान ज्ञात करें ।
4. If $P(A)=0.8$, $P(B)=0.5$ and $P\left(\frac{B}{A}\right) = 0.4$,
find the following :-
यदि $P(A)=0.8$, $P(B)=0.5$ और $P\left(\frac{B}{A}\right) = 0.4$, तो निम्नलिखित ज्ञात करें :-
(i) $P(A \cap B)$ (ii) $P(A/B)$
(iii) $P(A \cup B)$
5. Two cards are drawn at random and without replacement from a pack of 52 playing card . Find the probability that both the cards are black.
52 पत्तों की एक गड्डी में से यादृच्छया बिना प्रतिस्थापित किए दो पत्ते निकाले गए । दोनों पत्तों के काले रंग का होने की प्रायिकता ज्ञात कीजिए ।
6. A die marked 1,2,3 in red and 4,5,6 in green is tossed . Let A be the event 'the number is even' and B be the event 'the number is red' ,Are A and B independent ?
एक पासे पर 1, 2, 3 लाल रंग से और 4, 5, 6 हरे रंग से लिखे गए हैं । इस पासे को उछाला गया । मान ले A घटना "संख्या सम" है और B घटना "संख्या लाल रंग से लिखी गई है" को निरूपित करते हैं । क्या A और B स्वतंत्र है?
7. If E_1 and E_2 are two independent events such that $P(E_1) = 0.35$ and $P(E_1 \cup E_2) = 0.60$ find $P(E_2)$.
यदि E_1 और E_2 दो स्वतंत्र घटना इस प्रकार हैं कि $P(E_1) = 0.35$ और $P(E_1 \cup E_2) = 0.60$ तो $P(E_2)$ का मान ज्ञात करें ।

3 MARKS QUESTION

1. Evaluate $P(A \cup B)$, if $2P(A) = P(B) = \frac{5}{13}$ and $P\left(\frac{A}{B}\right) = \frac{2}{5}$

$P(A \cup B)$ ज्ञात कीजिए, यदि

$$2P(A) = P(B) = \frac{5}{13} \text{ और } P\left(\frac{A}{B}\right) = \frac{2}{5}.$$

2. Determine $P\left(\frac{E}{F}\right)$ if a coin is tossed three times

Where E: head on third toss & F : head on first two tosses.

$P\left(\frac{E}{F}\right)$ ज्ञात कीजिए । यदि एक सिक्के को तीन बार उछाला गया है, जहाँ E= तीसरी उछाल पर चित F=पहली दोनो उछालो पर चित।

3. A family has two children .What is the probability that both the childrens are boys given that at least one of them is a boy?

एक परिवार में दो बच्चे हैं। यदि यह ज्ञात हो कि बच्चों में से कम से कम एक बच्चा लड़का है तो दोनो बच्चों के लड़का होने की क्या प्रायिकता है ?

4. A die is thrown twice and the sum of the numbers appearing is observed to be 6. What is the conditional probability that the number 4 has appeared at least once ?

एक पासे को दो बार उछाला गया और प्रकट हुई संख्याओ का योग 6 पाया गया। संख्या 4 के न्यूनतम एक बार प्रकट होने की सप्रतिबंध प्रायिकता ज्ञात कीजिए।

5. A fair coin and an unbiased die are tossed .Let A be the event 'head appears on the coin' and B be the event '3 on the die'.Check whether A and B are independent event or not?

एक न्याय्य सिक्का और एक अभिनत पासे को उछाला गया। मान ले A घटना 'सिक्के पर चित प्रकट होता है' और B घटना पासे पर संख्या '3 प्रकट होती है' को निरूपित करते है। निरीक्षण कीजिए कि घटनाएँ A और B स्वतंत्र हैं या नहीं?

6. Let A and B be independent events with

$$P(A) = 0.3 \text{ and } P(B) = 0.4 \text{ then find}$$

(i) $P(A \cap B)$

(ii) $P(A \cup B)$

(iii) $P\left(\frac{B}{A}\right)$

मान ले A और B स्वतंत्र घटनाएँ है तथा $P(A)=0.3$ और $P(B)=0.4$ तब

(i) $P(A \cap B)$

(ii) $P(A \cup B)$

(iii) $P\left(\frac{B}{A}\right)$

ज्ञात कीजिए।

7. Two balls are drawn at random with replacement from a box containing 10 black and 8 red balls .Find the probability that both balls are red.

दो गेंद एक बॉक्स से बिना प्रतिस्थापित किए निकाली जाती है। बॉक्स में 10 काली और 8 लाल गेंदे है तो दोनो गेंदे लाल हाने की प्रायिकता ज्ञात कीजिए।

5 MARKS QUESTION

1. A bag contains 4 red and 4 black balls, another bag contains 2 red and 6 black balls. One of the two bag is selected at random and a ball is drawn from the bag which is found to be red. Find the probability that the ball is drawn from the first bag.

एक थैले में 4 लाल और 4 काली गेंदे है और एक अन्य थैले में 2 लाल और 6 काली गेंदें है। दोनो थैलों में से एक को यादृच्छया चुना जाता है और उसमें एक गेंद निकाली जाती है जो लाल है। इस बात की क्या प्रायिकता है कि गेंद पहले थैले से निकाली गई है ?

2. An insurance company insured 2000 scooter driver, 4000 car drivers and 6000 truck drivers. The probability of accident are 0.01, 0.03 and 0.15 respectively. One of the insured persons meets with an accident .What is the probability that he is a scooter driver.

एक बीमा कंपनी 2000 स्कूटर चालकों, 4000 कार चालकों और 6000 ट्रक चालकों का बीमा करती है। दुर्घटनाओं की प्रायिकताएँ क्रमशः 0.01,0.03 और 0.15 है। बीमाकृत व्यक्तियों में से एक दुर्घटनाग्रस्त हो जाता है। उस व्यक्ति के स्कूटर चालक होने की प्रायिकता क्या है?

3. From a lot of 30 bulbs which include 6 defectives . A sample of 4 bulbs is drawn at random with replacement. Find the probability distribution of the number of defective bulbs.

30 बल्बो के एक ढेर में से 6 बल्ब खराब है, 4 बल्बों का एक नमूना (प्रतिदर्श) यादृच्छया बिना प्रतिस्थापना के निकाला जाता है। खराब बल्बों की संख्या का प्रायिकता बंटन ज्ञात कीजिए ।

4. Find the probability distribution of the number of successive two tosses of a die, where a success is defined as

- (i) Number greater than 4
(ii) Six appears on at least one die

एक पासे दो बार उछालने पर सफलता की संख्या का प्रायिकता बंटन ज्ञात कीजिए जहाँ-

- (i) '4 से बड़ी संख्या' को एक सफलता माना गया है।
(ii) 'पासे पर संख्या 6 प्रकट होना' को एक सफलता माना गया है।

5. Find the mean number of heads in three tosses of a fair coin.

एक न्याय्य सिक्के की तीन उछालों पर प्राप्त चित्तों संख्या का माध्य ज्ञात कीजिए।

6. A bag consists of 10 balls each marked with one of the digits 0 to 9 . If four balls are drawn successive with replacement from the bag, what is the probability that none is marked with the digit 0 ?

एक थैले में 10 गेंदे हैं जिनमें से प्रत्येक पर 0 से 9 तक के अंको में से एक अंक लिखा है। यदि थैले में 4 गेंद उत्तरोत्तर पुनः वापस रखते हुए निकाली जाती तो इसकी क्या प्रायिकता है कि उनमें से किसी भी गेंद पर अंक 0 न लिखा हो?

7. A card from a pack of 52 cards is lost .From the remaining cards of the pack , two cards are drawn and are found to be both diamonds .Find the probability of the lost card being a diamond

52 ताशों की गड्डी से एक पत्ता खो जाता है। शेष पत्तों से दो पत्ते निकाले जाते हैं जो ईंट के पत्ते हैं। खो गए पत्ते की ईंट होने की प्रायिकता क्या है ?

8. Find the probability of throwing atmost 2 sixes in 6 throws of a single dice.

एक पासे को छः बार उछालने पर अधिकतम 2 बार छः आने की प्रायिकता ज्ञात कीजिए ।

(MCQ ANSWER)

Ans- 1)-d ,2)-a , 3)-c, 4)-b, 5)-d, 6)-c 7)-c, 8)-d, 9)-a, 10)-c, 11)-c, 12)-d, 13)-a, 14)-c

(2 MARKS) SOLUTION

Sol - Given $P(B) = 0.5$

and $P(A \cap B) = 0.32$

1. $\therefore P\left(\frac{A}{B}\right) = \frac{P(A \cap B)}{P(B)}$
 $= \frac{0.32}{0.5} = \frac{32}{50} = \frac{16}{25}$ Ans

- 2 Sol - Given that

$$P(A) = \frac{6}{11}, P(B) = \frac{5}{11}$$

$$\text{and } P(A \cup B) = \frac{7}{11}$$

$$\therefore P(A \cup B) = P(A) + P(B) - P(A \cap B)$$

$$\Rightarrow P(A \cap B) = P(A) + P(B) - P(A \cup B)$$

$$= \frac{6}{11} + \frac{5}{11} - \frac{7}{11} = \frac{4}{11} \text{ Ans}$$

- 3 Sol - Given that

$$P(A) = 0.3$$

$$, P(B) = 0.6$$

\therefore A and B are independent events then,

$$P(A \text{ and } B) \text{ or } P(A \cap B) = P(A) \cdot P(B)$$

$$= (0.3) \cdot (0.6)$$

$$= 0.18 \text{ Ans}$$

4. Given that $P(A) = 0.8, P(B) = 0.5, P\left(\frac{B}{A}\right) = 0.4$

$$(i) P\left(\frac{B}{A}\right) = 0.4$$

$$\Rightarrow \frac{P(A \cap B)}{P(A)} = 0.4$$

$$\Rightarrow \frac{P(A \cap B)}{0.8} = 0.4$$

$$\therefore P(A \cap B) = 0.4 \times 0.8$$

$$= 0.32$$

$$(ii) P\left(\frac{A}{B}\right) = \frac{P(A \cap B)}{P(B)}$$

$$= \frac{0.32}{0.5} = 0.64$$

$$(iii) P(A \cup B) = P(A) + P(B) - P(A \cap B)$$

$$= 0.8 + 0.5 - 0.32$$

$$= 1.3 - 0.32 = 0.98$$

5. Sol - There are 26 black cards in a pack of 52 cards .

let P(A) be the probability of getting a black cards in first draw

$$\therefore P(A) = \frac{26}{52} = \frac{1}{2}$$

Let P(B) be the probability of getting a black card in the second draw

(the card is not replaced)

$$\therefore P(B) = \frac{25}{51}$$

Thus, the probability of getting both the

$$\text{cards black} = \frac{1}{2} \times \frac{25}{51} = \frac{25}{102}$$

6. Sol - When a die is thrown, the sample space is

$$S = \{1, 2, 3, 4, 5, 6\}, n(S) = 6$$

let A: the number is even = $\{2, 4, 6\}$, $n(A) = 3$

$$\Rightarrow P(A) = \frac{3}{6} = \frac{1}{2}$$

B: the number is red = $\{1, 2, 3\}$, $n(B) = 3$

$$\Rightarrow P(B) = \frac{3}{6} = \frac{1}{2}$$

$$A \cap B = \{2\}$$

$$\Rightarrow P(A \cap B) = \frac{1}{6}$$

$$\text{now, } P(A \cap B) = \frac{1}{6}$$

$$\Rightarrow P(A) \cdot P(B) = \frac{1}{6}$$

$$\Rightarrow \frac{1}{2} \cdot \frac{1}{2} = \frac{1}{6}$$

$$\Rightarrow \frac{1}{4} \neq \frac{1}{6}$$

$$P(A) \cdot P(B) \neq P(A \cap B)$$

therefore A and B are not independent event.

7. Sol - Let $P(E_2) = x$; E_1 and E_2 being independent event

$$\therefore P(E_1 \cap E_2) = P(E_1) \cdot P(E_2) = 0.35x$$

$$\Rightarrow P(E_1) + P(E_2) - P(E_1 \cup E_2) = 0.35x$$

$$\Rightarrow 0.35 + x - 0.60 = 0.35x$$

$$\Rightarrow 0.65x = 0.25$$

$$\Rightarrow x = \frac{25}{65} = \frac{5}{13} \text{ Ans}$$

3 MARKS SOLUTION

1.

$$\text{Sol - Given } 2P(A) = P(B) = \frac{5}{13}$$

$$\text{so, } P(A) = \frac{5}{26}$$

$$\& P(B) = \frac{5}{13}$$

$$\text{Also, } P(A/B) = \frac{2}{5}$$

$$\text{We know } P\left(\frac{A}{B}\right) = \frac{P(A \cap B)}{P(B)}$$

$$\therefore P(A \cap B) = P\left(\frac{A}{B}\right) \cdot P(B)$$

$$= \frac{2}{5} \cdot \frac{5}{13}$$

$$= \frac{2}{13}$$

$$\text{Also, } P(A \cup B) = P(A) + P(B) - P(A \cap B)$$

$$= \frac{5}{26} + \frac{5}{13} - \frac{2}{13}$$

$$= \frac{5 + 10 - 4}{26} = \frac{11}{26} \text{ Ans}$$

2. The sample space of the given experiment will be

$$S = \{HHH, HHT, HTH, THH, HTT, THT, TTH, TTT\}$$

$$E = \{HHH, HTH, THH, TTH\}$$

$$F = \{HHH, HHT\}$$

$$\therefore E \cap F = \{HHH\}$$

$$\text{so that, } n(S) = 8, n(E) = 4,$$

$$n(F) = 2, n(E \cap F) = 1$$

$$P(E) = \frac{4}{8} = \frac{1}{2}$$

$$P(F) = \frac{2}{8} = \frac{1}{4}$$

$$\text{and } P(E \cap F) = \frac{1}{8}$$

$$\therefore P(E/F) = \frac{P(E \cap F)}{P(F)} = \frac{\frac{1}{8}}{\frac{1}{4}} = \frac{1}{8} \times \frac{4}{1} = \frac{1}{2}$$

3. Sol - Let b stands for boy and g stands for girl.

The sample space of the experiment is

$$S = \{(b, b), (g, b), (b, g), (g, g)\}, n(S) = 4$$

Let E be the event that both children are boys & F is the event that atleast one of the child is a boy,

$$\text{Then, } E = \{(b, b)\} \Rightarrow n(E) = 1$$

$$\& F = \{(b, b), (g, b), (b, g)\} \Rightarrow n(F) = 3$$

$$(E \cap F) = \{(b, b)\} \Rightarrow n(E \cap F) = 1$$

$$\therefore P(E) = \frac{1}{4}, P(F) = \frac{3}{4}, P(E \cap F) = \frac{1}{4}$$

$$\therefore P\left(\frac{E}{F}\right) = \frac{P(E \cap F)}{P(F)} = \frac{\frac{1}{4}}{\frac{3}{4}} = \frac{1}{3}$$

4.

Sol -

The sample space of the given experiment is

$$S = \{(1, 1), (1, 2), (1, 3), \dots, (6, 1), (6, 2), (6, 3), (6, 4), (6, 5), (6, 6)\}$$

$$\therefore n(S) = 36$$

Let E be the event that 'number 4 appears at least once' and F be the event that 'the sum of the numbers appearing is 6'.

Then ,

$$E = \{(4, 1), (4, 2), (4, 3), (4, 4), (4, 5), (4, 6), (1, 4), (2, 4), (3, 4), (5, 4), (6, 4)\}$$

$$\therefore n(E) = 11$$

$$\& F = \{(1, 5), (2, 4), (3, 3), (4, 2), (5, 1)\}$$

$$\therefore n(F) = 5$$

$$\therefore (E \cap F) = \{(2, 4), (4, 2)\} \Rightarrow n(E \cap F) = 2$$

$$\text{Therefore } P(E) = \frac{11}{36}, P(F) = \frac{5}{36}$$

$$P(E \cap F) = \frac{2}{36}$$

\therefore Hence , the required probability

$$P\left(\frac{E}{F}\right) = \frac{P(E \cap F)}{P(F)} = \frac{\frac{2}{36}}{\frac{5}{36}} = \frac{2}{5}$$

5.

Sol - If a fair coin and an unbiased die are tossed,

$$\text{then } S = \left\{ \begin{array}{l} (H, 1), (H, 2), (H, 3), (H, 4), (H, 5), (H, 6) \\ (T, 1), (T, 2), (T, 3), (T, 4), (T, 5), (T, 6) \end{array} \right\}$$

A = Head appear on the coin

$$= \{(H, 1), (H, 2), (H, 3), (H, 4), (H, 5), (H, 6)\}$$

$$\therefore P(A) = \frac{6}{12} = \frac{1}{2}$$

B = 3 on the die

$$= \{(H, 3), (T, 3)\}$$

$$\therefore P(B) = \frac{2}{12} = \frac{1}{6}$$

$$\therefore A \cap B = \{(H, 3)\}$$

$$P(A \cap B) = \frac{1}{12}$$

Now,

$$P(A) \cdot P(B) = \frac{1}{2} \cdot \frac{1}{6} = \frac{1}{12} = P(A \cap B)$$

\therefore A and B are independent events.

6.

Sol - It is given that

$$P(A) = 0.3 \text{ and } P(B) = 0.4$$

$$(i) P(A \cap B) = P(A) \cdot P(B) [\because A \text{ and } B \text{ are independent events}]$$

$$= 0.3 \times 0.4 = 0.12 \text{ Ans...}$$

$$(ii) P(A \cup B) = P(A) + P(B) - n(A \cap B)$$

$$= 0.3 + 0.4 - 0.12$$

$$= 0.7 - 0.12$$

$$= 0.58 \text{ Ans...}$$

$$(iii) P\left(\frac{B}{A}\right) = \frac{P(A \cap B)}{P(A)} = \frac{0.12}{0.3} = 0.4 \text{ Ans...}$$

7.

Sol -

Total number of balls = 18

Number of red balls = 8

Number of black balls = 10

\therefore Probability of getting a red

$$\text{ball in the first draw} = \frac{8}{18} = \frac{4}{9}$$

\therefore probability of getting a red

$$\text{ball in the second draw} = \frac{8}{18} = \frac{4}{9}$$

\therefore Probability of getting both balls

$$\text{red} = \frac{4}{9} \times \frac{4}{9} = \frac{16}{81}$$

5 MARKS SOLUTION

1. Let E_1 and E_2 be the events of selecting first bag and second bag respectively

$$\therefore P(E_1) = P(E_2) = \frac{1}{2}$$

let A be the event of getting a red ball

$$\therefore P\left(\frac{A}{E_1}\right) = P(\text{drawing a red ball from first bag})$$

$$= \frac{4}{8} = \frac{1}{2}$$

$$\therefore P\left(\frac{A}{E_2}\right) = P(\text{drawing a red ball from second bag})$$

$$= \frac{2}{8} = \frac{1}{4}$$

The probability of drawing a ball from the first bag ,

given that it is red, is given by $P\left(\frac{E_1}{A}\right)$

[By Baye's theorem]

$$\begin{aligned} \therefore P\left(\frac{E_1}{A}\right) &= \frac{P(E_1) \cdot P\left(\frac{A}{E_1}\right)}{P(E_1) \cdot P\left(\frac{A}{E_1}\right) + P(E_2) \cdot P\left(\frac{A}{E_2}\right)} \\ &= \frac{\frac{1}{2} \cdot \frac{1}{2}}{\frac{1}{2} \cdot \frac{1}{2} + \frac{1}{2} \cdot \frac{1}{4}} = \frac{\frac{1}{4}}{\frac{1}{4} + \frac{1}{8}} = \frac{\frac{1}{4}}{\frac{3}{8}} \\ &= \frac{1}{4} \times \frac{8}{3} = \frac{2}{3} \text{ Ans...} \end{aligned}$$

2.

Sol -

Let E_1, E_2 and E_3 be the respective events that the drivers are a scooter driver, a car driver and a truck driver.

Let A be the event that the person meets with an accident

Total no of drivers = 2000 + 4000 + 6000
= 12000

$$\therefore P(E_1) = \frac{2000}{12000} = \frac{1}{6}$$

$$P(E_2) = \frac{4000}{12000} = \frac{1}{3}$$

$$P(E_3) = \frac{6000}{12000} = \frac{1}{2}$$

$$\begin{aligned} P\left(\frac{A}{E_1}\right) &= P(\text{scooter driver meet with an accident}) \\ &= 0.01 = \frac{1}{100} \end{aligned}$$

$$\begin{aligned} P\left(\frac{A}{E_2}\right) &= P(\text{car driver meet with an accident}) \\ &= 0.03 = \frac{3}{100} \end{aligned}$$

$$\begin{aligned} P\left(\frac{A}{E_3}\right) &= P(\text{truck driver meet with an accident}) \\ &= 0.15 = \frac{15}{100} \end{aligned}$$

The probability that the driver is a scooter driver is

$$\begin{aligned} P\left(\frac{E_1}{A}\right) &= \frac{P(E_1) \cdot P\left(\frac{A}{E_1}\right)}{P(E_1) \cdot P\left(\frac{A}{E_1}\right) + P(E_2) \cdot P\left(\frac{A}{E_2}\right) + P(E_3) \cdot P\left(\frac{A}{E_3}\right)} \\ &= \frac{\frac{1}{6} \cdot \frac{1}{100}}{\frac{1}{6} \cdot \frac{1}{100} + \frac{1}{3} \cdot \frac{3}{100} + \frac{1}{2} \cdot \frac{15}{100}} \\ &= \frac{\frac{1}{6}}{\frac{1}{6} + 1 + \frac{1}{2}} = \frac{\frac{1}{6}}{\frac{1+6+45}{6}} \\ &= \frac{1}{6} \times \frac{6}{52} = \frac{1}{52} \end{aligned}$$

3. Sol -

It is given that out of 30 bulbs 6 are defectives.

$$P(\text{defective bulb}) = \frac{1}{5}$$

no of non defective bulbs = 30 - 6 = 24

$$P(\text{non-defective bulb}) = \frac{4}{5}$$

4 bulbs are drawn from the lot with replacement.

Let x be the random variable that denotes the number of defective bulbs in the selected bulbs.

$\therefore P(x = 0) = P(4 \text{ non defective and } 0 \text{ defective})$

$$= {}^4C_0 \cdot \left(\frac{1}{5}\right)^0 \left(\frac{4}{5}\right)^4 = \frac{256}{625}$$

$P(x = 1) = P(3 \text{ non defective and } 1 \text{ defective})$

$$= {}^4C_1 \cdot \frac{1}{5} \cdot \left(\frac{4}{5}\right)^3 = \frac{256}{625}$$

$P(x = 2) = P(2 \text{ non defective and } 2 \text{ defective})$

$$= {}^4C_2 \cdot \left(\frac{1}{5}\right)^2 \cdot \left(\frac{4}{5}\right)^2 = \frac{96}{625}$$

$P(x = 3) = P(1 \text{ non defective and } 3 \text{ defective})$

$$= {}^4C_3 \cdot \left(\frac{1}{5}\right)^3 \cdot \frac{4}{5} = \frac{16}{625}$$

$P(x = 4) = P(0 \text{ non defective and } 4 \text{ defective})$

$$= {}^4C_4 \cdot \left(\frac{1}{5}\right)^4 \cdot \left(\frac{4}{5}\right)^0 = \frac{1}{625}$$

hence, the required probability distribution is as follows -

X	0	1	2	3	4
P(x)	$\frac{256}{625}$	$\frac{256}{625}$	$\frac{96}{625}$	$\frac{16}{625}$	$\frac{1}{625}$

4.

Sol -

When a die is tossed two time, we obtain

$(6 \times 6) = 36$ number of observation,

Let x be the random variable, which represents the number of successes.

(i) Here, success refers to the number greater than 4.

$P(x = 0) = P(\text{number less than or equal to 4 on both tosses})$

$$= \frac{4}{6} \cdot \frac{4}{6} = \frac{4}{9}$$

$$\begin{aligned} P(x = 1) &= P\left(\begin{array}{l} \text{number less than or equal to 4 on first toss} \\ \text{and greater than 4 on second toss} \end{array}\right) \\ &+ P\left(\begin{array}{l} \text{number greater than 4 on first toss and} \\ \text{less than or equal to 4 on second toss} \end{array}\right) \end{aligned}$$

$$= \frac{4}{6} \times \frac{2}{6} + \frac{2}{6} \times \frac{4}{6} = \frac{4}{9}$$

$P(x = 2) = P(\text{number greater than 4 on both the tosses})$

$$= \frac{2}{6} \times \frac{2}{6} = \frac{1}{9}$$

then the probability distribution is as follows -

x	0	1	2
P(x)	$\frac{4}{9}$	$\frac{4}{9}$	$\frac{1}{9}$

(ii) Here, success mean six appears on at least one die

$P(Y = 0) = P(\text{six does not appear on any of the dice})$ 6.

$$= \frac{5}{6} \times \frac{5}{6} = \frac{25}{36}$$

$P(Y = 1) = P(\text{six appears on at least one of the dice})$

$$= \frac{11}{36}$$

The required probability distribution is as follows

Y	0	1
P(Y)	$\frac{25}{36}$	$\frac{11}{36}$

5.

Sol -

Let x denote the success of getting head .

\therefore sample space is

$S = \{HHH, HHT, HTH, HTT, THH, THT, TTH, TTT\}$

It can be seen that x can take the value of 0, 1, 2 or 3.

$$\therefore P(X = 0) = P(TTT) = P(T) \cdot P(T) \cdot P(T) = \frac{1}{2} \cdot \frac{1}{2} \cdot \frac{1}{2} = \frac{1}{8}$$

$$\begin{aligned} \therefore P(X = 1) &= P(HTT) + P(THT) + P(TTH) \\ &= \frac{1}{2} \times \frac{1}{2} \times \frac{1}{2} + \frac{1}{2} \times \frac{1}{2} \times \frac{1}{2} + \frac{1}{2} \times \frac{1}{2} \times \frac{1}{2} \\ &= \frac{3}{8} \end{aligned}$$

$$\begin{aligned} P(X = 2) &= P(HHT) + P(HTH) + P(THH) \\ &= \frac{1}{2} \times \frac{1}{2} \times \frac{1}{2} + \frac{1}{2} \times \frac{1}{2} \times \frac{1}{2} + \frac{1}{2} \times \frac{1}{2} \times \frac{1}{2} \\ &= \frac{3}{8} \end{aligned}$$

$$P(X = 3) = P(HHH)$$

$$= \frac{1}{2} \times \frac{1}{2} \times \frac{1}{2} = \frac{1}{8}$$

The required probability distribution is as follows -

X	0	1	2	3
P(X)	1/8	3/8	3/8	1/8

Means of X, $E(X) = M = \sum X_i P(X_i)$

$$\begin{aligned} &= 0 \cdot \frac{1}{8} + 1 \cdot \frac{3}{8} + 2 \cdot \frac{3}{8} + 3 \cdot \frac{1}{8} \\ &= \frac{12}{8} = \frac{3}{2} \end{aligned}$$

6. Sol -

Let x denotes the number of balls marked with the digit 0 among the 4 balls drawn.

x has a binomial distribution with $n = 4$

and $P = \frac{1}{10}$

$$\therefore q = 1 - \frac{1}{10} = \frac{9}{10}$$

$$\therefore P(X = x) = {}^n C_x q^{n-x} P^x, \quad x = 1, 2, 3, \dots, n$$

$$\begin{aligned} \therefore P(\text{none marked with 0}) &= P(X = 0) \\ &= {}^4 C_0 \left(\frac{9}{10}\right)^4 \cdot \left(\frac{1}{10}\right)^0 \\ &= 1 \cdot \left(\frac{9}{10}\right)^4 = \left(\frac{9}{10}\right)^4 \end{aligned}$$

7. Sol -

Let E_1 and E_2 be the respective events of choosing a diamond card and a card which is not diamond.

Let A denote the lost card .

out of 52 cards , 13 cards are diamond and 39 cards are not diamond.

$$\therefore P(E_1) = \frac{13}{52} = \frac{1}{4}, \quad P(E_2) = \frac{39}{52} = \frac{3}{4}$$

When one diamond card is lost -

$$\begin{aligned} P\left(\frac{A}{E_1}\right) &= \frac{{}^{12}C_2}{{}^{51}C_2} = \frac{12!}{2!10!} \times \frac{2!49!}{51!} \\ &= \frac{11 \times 12}{50 \times 51} = \frac{22}{425} \end{aligned}$$

When one card is lost which is not diamond is

$$\begin{aligned} P\left(\frac{A}{E_2}\right) &= \frac{{}^{13}C_2}{{}^{51}C_2} = \frac{13!}{2!11!} \times \frac{2!49!}{51!} \\ &= \frac{13 \times 12}{17 \times 51 \times 50 \times 25} = \frac{26}{425} \end{aligned}$$

The probability of getting two cards,
when one card is lost which is not diamond is

$$\begin{aligned} P\left(\frac{E_1}{A}\right) &= \frac{P(E_1) \cdot P\left(\frac{A}{E_1}\right)}{P(E_1) \cdot P\left(\frac{A}{E_1}\right) + P(E_2) \cdot P\left(\frac{A}{E_2}\right)} \\ &= \frac{\frac{1}{4} \cdot \frac{22}{425}}{\frac{1}{4} \cdot \frac{22}{425} + \frac{3}{4} \cdot \frac{26}{425}} \\ &= \frac{22}{22+78} = \frac{22}{100} = \frac{11}{50} \text{ Ans...} \end{aligned}$$

8.

Sol -

Let repeated tossing of the die are

Bernoulli trials .

Let X represents the number of times
of getting sixes in 6 throws of the dice.

Probability of getting six in a single
throw of dice -

$$P = \frac{1}{6}$$

$$\therefore q = 1 - \frac{1}{6} = \frac{5}{6}$$

clearly , x has a binomial distribution

with n = 6

$$P(X = x) = {}^n C_x q^{n-x} p^x = {}^6 C_x \left(\frac{5}{6}\right)^{6-x} \left(\frac{1}{6}\right)^x$$

$$P(\text{at most 2 sixes}) = P(X \leq 2)$$

$$= P(X = 0) + P(X = 1) + P(X = 2)$$

$$= {}^6 C_0 \left(\frac{5}{6}\right)^6 \cdot \left(\frac{1}{6}\right)^0 + {}^6 C_1 \left(\frac{5}{6}\right)^5 \cdot \frac{1}{6} +$$

$${}^6 C_2 \left(\frac{5}{6}\right)^4 \left(\frac{1}{6}\right)^2$$

$$= \left(\frac{5}{6}\right)^6 + 6 \cdot \left(\frac{5}{6}\right)^5 \cdot \frac{1}{6} + 15 \left(\frac{5}{6}\right)^4 \cdot \frac{1}{36}$$

$$= \left(\frac{5}{6}\right)^4 \left[\frac{25}{36} + \frac{5}{6} + \frac{5}{12} \right]$$

$$= \left(\frac{5}{6}\right)^4 \left[\frac{25+30+15}{36} \right]$$

$$= \frac{70}{36} \cdot \left(\frac{5}{6}\right)^4$$

$$= \frac{35}{18} \cdot \left(\frac{5}{6}\right)^4 \text{ Ans....}$$

झारखंड अधिविद्य परिषद्
ANNUAL INTERMEDIATE EXAMINATION 2023

गणित

हल प्रश्न-पत्र / SOLVED PAPER

बहुविकल्पीय प्रश्नोत्तर

INSTRUCTIONS / निर्देश :

- Carefully fill up the necessary particulars on the OMR Answer Sheet.
सावधानी पूर्वक सभी विवरण OMR उत्तर पर पत्रक पर भरें।
- Put your full signature on the OMR Answer Sheet in the space provided.
आप अपना पूरा हस्ताक्षर OMR उत्तर पत्रक पर दी गई जगह पर करें।
- There are 40 Multiple Choice Questions in this Part.
इस भाग में कुल 40 बहु-विकल्पीय प्रश्न हैं।
- All questions are compulsory. Each question carries 1 mark.
सभी प्रश्नों के उत्तर देना अनिवार्य है। प्रत्येक प्रश्न की अधिमानता 1 अंक निर्धारित है।
- There is no negative marking for any wrong answer.
गलत उत्तर के लिए कोई अंक नहीं काटा जायेगा।
- Use the page given at the end of the question booklet for Rough work. Do not do any Rough Work on the OMR Answer Sheet.
रफ़ कार्य हेतु प्रश्न पुस्तिका के अंत में दिये गये पृष्ठ का ही प्रयोग कीजिए। OMR उत्तर पत्रक पर कोई रफ़ कार्य न करें।
- Read all the instructions provided on page 2 of the OMR Answer Sheet carefully and do accordingly.
OMR उत्तर पत्रक के पृष्ठ 2 पर प्रदत्त सभी निर्देशों को ध्यानपूर्वक पढ़ें तथा उसके अनुसार कार्य करें।
- Four options are given for each question. You have to darken duly the most suitable answer on your OMR Answer Sheet. Use only Blue or Black Ball-Point Pen. The use of Pencil is not allowed.
प्रत्येक प्रश्न में चार विकल्प दिये गये हैं। इनमें से सबसे उपयुक्त उत्तर को आप अपने OMR उत्तर पत्रक पर ठीक-ठीक गहरा काला करें। केवल नीला या काला बॉल-प्वाइंट कलम का ही प्रयोग करें। पेंसिल का प्रयोग वर्जित है।

- Adhere to the instructions provided in the OMR Answer Sheet very carefully otherwise your OMR Answer Sheet will be treated as invalid and it will not be evaluated.
OMR उत्तर पत्रक पर दिये गये निर्देशों का ध्यानपूर्वक पालन कीजिए अन्यथा आपका OMR उत्तर पत्रक अमान्य होगा और उसका मूल्यांकन नहीं किया जायेगा।

बहुविकल्पीय प्रश्न (MCQ)

- What type of relation is $R = \{(a, b), (b, c), (b, a), (c, b)\}$ on the set $A = \{a, b, c\}$?**
(1) Reflexive (2) Symmetric
(3) Transitive (4) None of these
संबंध $R = \{(a, b), (b, c), (b, a), (c, b)\}$ समुच्चय $A = \{a, b, c\}$ पर कैसा संबंध है?
(1) स्वतुल्य (2) सममित
(3) संक्रामक (3) इनमें से कोई नहीं
- If $f: R \rightarrow R$ be such that $f(x) = 5x + 4$, then $f^{-1}(x) =$**
(1) $\frac{x-4}{5}$ (2) $\frac{4-x}{5}$
(3) $\frac{x-5}{4}$ (4) none of these
यदि $f: R \rightarrow R$ जहाँ $f(x) = 5x + 4$, तो $f^{-1}(x) =$
(1) $\frac{x-4}{5}$ (2) $\frac{4-x}{5}$
(3) $\frac{x-5}{4}$ (4) इनमें से कोई नहीं
- For any operation $*$, be defined on θ as $a*b = \frac{a+b}{3}$, then $1 * 2 =$**
(1) 3 (2) 1
(4) 0 (4) none of these
कोई संक्रिया $*$, θ पर $a*b = \frac{a+b}{3}$ से परिभाषित है तो $1 * 2 =$
(1) 3 (2) 1
(4) 0 (4) इनमें से कोई नहीं

4. Principal value of $\sin^{-1}\left(\frac{\sqrt{3}}{2}\right)$ is

- (1) $\frac{2\pi}{3}$ (2) $\frac{\pi}{4}$
 (3) $\frac{\pi}{3}$ (4) $\frac{\pi}{6}$

$\sin^{-1}\left(\frac{\sqrt{3}}{2}\right)$ का मुख्य मान है

- (1) $\frac{2\pi}{3}$ (2) $\frac{\pi}{4}$
 (3) $\frac{\pi}{3}$ (4) $\frac{\pi}{6}$

5. $\cos^{-1}\left(\frac{1-x^2}{1+x^2}\right) =$

- (1) $2\cos^{-1}x$ (2) $2\sin^{-1}x$
 (3) $2\tan^{-1}x$ (4) $\cos^{-1}(2x)$

6. If $A = \begin{bmatrix} 1 & 2 \\ 3 & 6 \end{bmatrix}$, then $3A =$

- (1) $\begin{bmatrix} 1 & 2 \\ 3 & 6 \end{bmatrix}$ (2) $\begin{bmatrix} 1 & 6 \\ 9 & 12 \end{bmatrix}$
 (3) $\begin{bmatrix} 3 & 6 \\ 9 & 18 \end{bmatrix}$ (4) none of these

यदि $A = \begin{bmatrix} 1 & 2 \\ 3 & 6 \end{bmatrix}$, तो $3A =$

- (1) $\begin{bmatrix} 1 & 2 \\ 3 & 6 \end{bmatrix}$ (2) $\begin{bmatrix} 1 & 6 \\ 9 & 12 \end{bmatrix}$
 (3) $\begin{bmatrix} 3 & 6 \\ 9 & 18 \end{bmatrix}$ (4) इनमें से कोई नहीं

7. If A and B are two square matrices, then $(A+B)^T =$

- (1) $A^T - B^T$ (2) $A^T + B^T$
 (3) $2A^T$ (4) $A^T - 4B^T$

यदि A और B दो वर्ग आव्यूह हैं, तो $(A+B)^T =$

- (1) $A^T - B^T$ (2) $A^T + B^T$
 (3) $2A^T$ (4) $A^T - 4B^T$

8. If $\begin{bmatrix} x+3 & 2x \\ 6 & y \end{bmatrix} = \begin{bmatrix} 7 & 8 \\ 6 & 3 \end{bmatrix}$, then values of x and y are

- (1) $x = 4, y = 3$ (2) $x = 3, y = 4$
 (3) $x = 3, y = 3$ (4) none of these

यदि $\begin{bmatrix} x+3 & 2x \\ 6 & y \end{bmatrix} = \begin{bmatrix} 7 & 8 \\ 6 & 3 \end{bmatrix}$, तो x तथा y के मान हैं

- (1) $x = 4, y = 3$ (2) $x = 3, y = 4$
 (3) $x = 3, y = 3$ (4) इनमें से कोई नहीं

9. $\begin{vmatrix} 1 & 1 & 1 \\ x+y & y+z & z+x \\ z & x & y \end{vmatrix} =$

- (1) 0 (2) 1
 (3) -1 (4) $x+y+z$

10. $\begin{vmatrix} \cos\theta & \sin\theta \\ -\sin\theta & \cos\theta \end{vmatrix} =$

- (1) $\cos\theta$ (2) $\sin\theta$
 (3) 1 (4) 0

11. $\frac{d}{dx}(\tan x^2) =$

- (1) $\sec^2(x^2)$ (2) $2x\sec^2(x^2)$
 (3) $2x$ (4) none of these

$\frac{d}{dx}(\tan x^2) =$

- (1) $\sec^2(x^2)$ (2) $2x\sec^2(x^2)$
 (3) $2x$ (4) इनमें से कोई नहीं

12. $\frac{d}{dx}(\sin^{-1}x) =$

- (1) $\frac{1}{\sqrt{1-x^2}}$ (2) $\frac{-1}{\sqrt{1-x^2}}$
 (3) $\frac{1}{1+x^2}$ (4) none of these

$\frac{d}{dx}(\sin^{-1}x) =$

- (1) $\frac{1}{\sqrt{1-x^2}}$ (2) $\frac{-1}{\sqrt{1-x^2}}$
 (3) $\frac{1}{1+x^2}$ (4) इनमें से कोई नहीं

13. $\frac{d}{dx}(\log \sec x) =$

- (1) $\sec x$ (2) $\tan x$
 (3) $\cot x$ (4) none of these

$\frac{d}{dx}(\log \sec x) =$

- (1) $\sec x$ (2) $\tan x$
 (3) $\cot x$ (4) इनमें से कोई नहीं

14. if $x = a\cos\theta, y = a\sin\theta$, then $\frac{dy}{dx} =$

- (1) $\tan\theta$ (2) $\cot\theta$
 (3) $-\tan\theta$ (4) none of these

यदि $x = a\cos\theta, y = a\sin\theta$, तो $\frac{dy}{dx} =$

- (1) $\tan\theta$ (2) $\cot\theta$
 (3) $-\tan\theta$ (4) इनमें से कोई नहीं

15. If $x^m y^n = (x + y)^{m+n}$, then $\frac{dy}{dx} =$
- (1) $\frac{y}{x}$ (2) $\frac{x}{y}$
 (3) $-\frac{x}{y}$ (4) none of these

यदि $x^m y^n = (x + y)^{m+n}$, तो $\frac{dy}{dx} =$

- (1) $\frac{y}{x}$ (2) $\frac{x}{y}$
 (3) $-\frac{x}{y}$ (4) इनमें से कोई नहीं

16. The slope of the curve $y^2 = x$ at the point (1, 1) is

- (1) $\frac{1}{2}$ (2) $-\frac{1}{2}$
 (3) 1 (4) None of these

वक्र $y^2 = x$ की ढाल (1, 1) बिन्दु पर है

- (1) $\frac{1}{2}$ (2) $-\frac{1}{2}$
 (3) 1 (4) इनमें से कोई नहीं

17. The slope of the normal to the curve $y = 2x^2 + 3\sin x$ at $x = 0$ is

- (1) 3 (2) $-\frac{1}{3}$
 (3) -3 (4) none of these

वक्र $y = 2x^2 + 3\sin x$ के $x = 0$ पर अभिलम्ब पर ढाल है

- (1) 3 (2) $-\frac{1}{3}$
 (3) -3 (4) इनमें से कोई नहीं

18. $\int \sec^2 x \cdot dx =$

- (1) $\tan x + c$ (2) $\tan 2x + c$
 (3) $\cot x$ (4) none of these

$\int \sec^2 x \cdot dx =$

- (1) $\tan x + c$ (2) $\tan 2x + c$
 (3) $\cot x$ (4) इनमें से कोई नहीं

19. $\int \frac{\sec^2 x}{\operatorname{cosec}^2 x} dx =$

- (1) $x - \tan x + c$ (2) $\tan x - x + c$
 (3) $-\tan x - x + c$ (4) none of these

$\int \frac{\sec^2 x}{\operatorname{cosec}^2 x} dx =$

- (1) $x - \tan x + c$ (2) $\tan x - x + c$
 (3) $-\tan x - x + c$ (4) इनमें से कोई नहीं

20. $\int \frac{dx}{9+x^2} =$

- (1) $\tan^{-1}\left(\frac{x}{3}\right) + c$ (2) $\frac{1}{3}\tan^{-1}\left(\frac{x}{3}\right) + c$
 (3) $3\tan^{-1}\left(\frac{x}{3}\right) + c$ (4) none of these

$\int \frac{dx}{9+x^2} =$

- (1) $\tan^{-1}\left(\frac{x}{3}\right) + c$ (2) $\frac{1}{3}\tan^{-1}\left(\frac{x}{3}\right) + c$
 (3) $3\tan^{-1}\left(\frac{x}{3}\right) + c$ (4) इनमें से कोई नहीं

21. $\int \frac{dx}{\sqrt{16-x^2}} =$

- (1) $\sin^{-1}\left(\frac{x}{4}\right) + c$ (2) $\log|x + \sqrt{16-x^2}|$
 (3) $\log|x + \sqrt{x^2+16}|$ (4) none of these

$\int \frac{dx}{\sqrt{16-x^2}} =$

- (1) $\sin^{-1}\left(\frac{x}{4}\right) + c$ (2) $\log|x + \sqrt{16-x^2}|$
 (3) $\log|x + \sqrt{x^2+16}|$ (4) इनमें से कोई नहीं

22. the radius of a circle is increasing at the rate of 0.3 cm/sec. The rate of increase of its perimeter is

- (1) 0.4π cm/sec (2) 0.6π cm/sec
 (3) 0.8π cm/sec (4) none of these

किसी वृत्त की त्रिज्या की वृद्धि दर 0.3cm/sec हो तो इसकी परिधि की वृद्धि दर होगी

- (1) 0.4π cm/sec (2) 0.6π cm/sec
 (3) 0.8π cm/sec (4) इनमें से कोई नहीं

23. $\int_a^b x^2 \cdot dx =$

- (1) $\frac{b^3 - a^3}{3}$ (2) $\frac{a^3 - b^3}{3}$
 (3) $\frac{a^4 - b^4}{4}$ (4) none of these

$\int_a^b x^2 \cdot dx =$

- (1) $\frac{b^3 - a^3}{3}$ (2) $\frac{a^3 - b^3}{3}$
 (3) $\frac{a^4 - b^4}{4}$ (4) इनमें से कोई नहीं

24. $\int_1^{\sqrt{3}} \frac{dx}{1+x^2} =$

- (1) $\frac{\pi}{3}$ (2) $\frac{2\pi}{3}$
 (3) $\frac{\pi}{12}$ (4) none of these

$\int_1^{\sqrt{3}} \frac{dx}{1+x^2} =$

- (1) $\frac{\pi}{3}$ (2) $\frac{2\pi}{3}$
 (3) $\frac{\pi}{12}$ (4) इनमें से कोई नहीं

25. $\int_{-\pi/2}^{\pi/2} \sin^9 x dx =$
 (1) -1 (2) 1
 (3) 0 (4) none of these

$\int_{-\pi/2}^{\pi/2} \sin^9 x dx =$
 (1) -1 (2) 1
 (3) 0 (4) इनमें से कोई नहीं

26. The order of the differential equation $\left(\frac{d^2y}{dx^2}\right)^2 + 2\left(\frac{dy}{dx}\right)^3 + 9y = 0$ is

- (1) 2 (2) 4
 (3) 1 (4) none of these

अवकल समीकरण $\left(\frac{d^2y}{dx^2}\right)^2 + 2\left(\frac{dy}{dx}\right)^3 + 9y = 0$ की कोटी है

- (1) 2 (2) 4
 (3) 1 (4) इनमें से कोई नहीं

27. The integrating factor of the differential equation $\frac{dy}{dx} + y \sec^2 x = \tan x \cdot \sec^2 x$ is

- (1) $\tan x$ (2) $e^{\tan x}$
 (3) $\log \tan x$ (4) none of these

अवकल समीकरण $\frac{dy}{dx} + y \sec^2 x = \tan x \cdot \sec^2 x$ का समाकलन गुणांक है

- (1) $\tan x$ (2) $e^{\tan x}$
 (3) $\log \tan x$ (4) इनमें से कोई नहीं

28. If $x\hat{i} + 2\hat{j} = 3\hat{i} - y\hat{j}$, then find (x, y) .

- (1) 3, -2 (2) 2, 3
 (3) -3, 2 (4) none of these

यदि $x\hat{i} + 2\hat{j} = 3\hat{i} - y\hat{j}$, तो (x, y) ज्ञात कीजिए।

- (1) 3, -2 (2) 2, 3
 (3) -3, 2 (4) इनमें से कोई नहीं

29. The position vector of the point $(1, 0, 2)$ is

- (1) $\hat{i} + 2\hat{k}$ (2) $\hat{i} + 2\hat{j}$
 (3) $\hat{i} + 3\hat{j} + 2\hat{k}$ (4) $\hat{i} + \hat{j} + 2\hat{k}$

बिन्दु $(1, 0, 2)$ का स्थिति सदिश है

- (1) $\hat{i} + 2\hat{k}$ (2) $\hat{i} + 2\hat{j}$
 (3) $\hat{i} + 3\hat{j} + 2\hat{k}$ (4) $\hat{i} + \hat{j} + 2\hat{k}$

30. The scalar dot product of vector $5\hat{i} + \hat{j} - 3\hat{k}$ and $3\hat{i} - 4\hat{j} + 7\hat{k}$ is

- (1) 10 (2) -10
 (3) 15 (4) none of these

$5\hat{i} + \hat{j} - 3\hat{k}$ और $3\hat{i} - 4\hat{j} + 7\hat{k}$ का अदिश गुणनफल है।

- (1) 10 (2) -10
 (3) 15 (4) इनमें से कोई नहीं

31. $\hat{i} \times \hat{j} =$

- (1) 0 (2) \hat{k}
 (3) $-\hat{k}$ (4) none of these

$\hat{i} \times \hat{j} =$

- (1) 0 (2) \hat{k}
 (3) $-\hat{k}$ (4) इनमें से कोई नहीं

32. $(\vec{a} - \vec{b}) \times (\vec{a} + \vec{b}) =$

- (1) $2(\vec{a} \times \vec{b})$ (2) $\vec{a} \times \vec{b}$
 (3) $|\vec{a}|^2 - |\vec{b}|^2$ (4) none of these

$(\vec{a} - \vec{b}) \times (\vec{a} + \vec{b}) =$

- (1) $2(\vec{a} \times \vec{b})$ (2) $\vec{a} \times \vec{b}$
 (3) $|\vec{a}|^2 - |\vec{b}|^2$ (4) इनमें से कोई नहीं

33. $\vec{a} \cdot \vec{a} =$

- (1) 0 (2) 1
 (3) $|\vec{a}|^2$ (4) none of these

$\vec{a} \cdot \vec{a} =$

- (1) 0 (2) 1
 (3) $|\vec{a}|^2$ (4) इनमें से कोई नहीं

34. The direction cosines of z-axis are

- (1) (0, 0, 0) (2) (1, 0, 0)
 (3) (0, 1, 0) (4) (0, 0, 1)

z-अक्ष दिक् कोज्याएँ हैं

- (1) (0, 0, 0) (2) (1, 0, 0)
 (3) (0, 1, 0) (4) (0, 0, 1)

35. Find the equation of the line joining $(-2, 4, 2)$ and $(7, -2, 5)$.

- (1) $\frac{x}{-2} = \frac{y}{4} = \frac{z}{2}$
 (2) $\frac{x}{7} = \frac{y}{-2} = \frac{z}{5}$
 (3) $\frac{x+2}{3} = \frac{y-4}{-2} = \frac{z-2}{1}$
 (4) None of these

बिन्दु $(-2, 4, 2)$ और $(7, -2, 5)$ को मिलाने वाली रेखा समीकरण होगा

(1) $\frac{x}{-2} = \frac{y}{4} = \frac{z}{2}$

(2) $\frac{x}{7} = \frac{y}{-2} = \frac{z}{5}$

(3) $\frac{x+2}{3} = \frac{y-4}{-2} = \frac{z-2}{1}$

(4) इनमें से कोई नहीं

36. Line $\frac{x-5}{3} = \frac{y+4}{7} = \frac{z-6}{2}$ passes through the point.

(1) $(5, -4, 6)$

(2) $(5, 4, -6)$

(3) $(4, 5, 6)$

(4) none of these

रेखा $\frac{x-5}{3} = \frac{y+4}{7} = \frac{z-6}{2}$ बिन्दु से गुजरती है।

(1) $(5, -4, 6)$

(2) $(5, 4, -6)$

(3) $(4, 5, 6)$

(4) इनमें से कोई नहीं

37. The direction cosines of the normal to the plane $2x - 3y - 6z - 3 = 0$

(1) $\frac{2}{7}, -\frac{3}{7}, -\frac{6}{7}$

(2) $\frac{2}{7}, \frac{3}{7}, -\frac{6}{7}$

(3) $\frac{2}{7}, -\frac{3}{7}, -\frac{6}{7}$

(4) none of these

समतल $2x - 3y - 6z - 3 = 0$ के अभिलम्ब की दिक् कोज्याएँ हैं

(1) $\frac{2}{7}, -\frac{3}{7}, -\frac{6}{7}$

(2) $\frac{2}{7}, \frac{3}{7}, -\frac{6}{7}$

(3) $\frac{2}{7}, -\frac{3}{7}, -\frac{6}{7}$

(4) इनमें से कोई नहीं

38. Find the perpendicular distance of the plane $2x + y - 2z + 1 = 0$ from the point $(0, -1, 3)$.

(1) $2\sqrt{3}$

(2) $\frac{2}{3}$

(3) 2

(4) None of these

बिन्दु $(0, -1, 3)$ से तल $2x + y - 2z + 1 = 0$ की लम्बवत दूरी ज्ञात कीजिए।

(1) $2\sqrt{3}$

(2) $\frac{2}{3}$

(3) 2

(4) इनमें से कोई नहीं

39. If $P(A) = \frac{3}{8}, P(B) = \frac{1}{2}$ and $P(A \cap B) = \frac{1}{4}$,

then $P\left(\frac{A}{B}\right) =$

(1) $\frac{1}{4}$

(2) $\frac{1}{2}$

(3) $\frac{2}{3}$

(4) none of these

यदि $P(A) = \frac{3}{8}, P(B) = \frac{1}{2}$ तथा $P(A \cap B) = \frac{1}{4}$

, तो $P\left(\frac{A}{B}\right) =$

(1) $\frac{1}{4}$

(2) $\frac{1}{2}$

(3) $\frac{2}{3}$

(4) इनमें से कोई नहीं

40. If $P(A) = \frac{3}{8}, P(B) = \frac{1}{3}$ and $P(A \cap B) = \frac{1}{4}$,

then $P(A \cup B) =$

(1) $\frac{2}{3}$

(2) $\frac{1}{3}$

(3) $\frac{1}{2}$

(4) none of these

यदि $P(A) = \frac{3}{8}, P(B) = \frac{1}{3}$ तथा $P(A \cap B) = \frac{1}{4}$, तो $P(A \cup B) =$

(1) $\frac{2}{3}$

(2) $\frac{1}{3}$

(3) $\frac{1}{2}$

(4) इनमें से कोई नहीं

Ans.

(1)- 2, (2)- 1, (3)- 2, (4)- 3, (5)- 2, (6)- 3, (7)- 2, (8)- 1, (9)- 1, (10)- 3, (11)- 2, (12)- 1, (13)- 2, (14)- 3, (15)- 1, (16)- 1, (17)- 2, (18)- 1, (19)- 2, (20)- 2, (21)- 1, (22)- 2, (23)- 1, (24)- 3, (25)- 3, (26)- 1, (27)- 2, (28)- 1, (29)- 1, (30)- 2, (31)- 2, (32)- 1, (33)- 3, (34)- 4, (35)- 3, (36)- 1, (37)- 1, 3, (38)- 3, (39)- 2, (40)- 4

झारखंड अधिविद्य परिषद्
ANNUAL INTERMEDIATE EXAMINATION 2023

गणित
हल प्रश्न-पत्र / SOLVED PAPER

विषयनिष्ठ प्रश्नोत्तर

INSTRUCTIONS / निर्देश :

1. Examinees are required to answer in their own words as far as practicable.

परीक्षार्थी यथासंभव अपने शब्दों में ही उत्तर दें।

2. This question paper has three sections : **A, B** and **C**. Total number of questions is **19**.

इस प्रश्नपत्र में तीन खण्ड – **A, B** एवं **C** हैं। कुल प्रश्नों की संख्या **19** है।

3. **Section-A** - Question Nos. **1 - 7** are very short answer type. Answer any five of these questions. Each question carries 2 marks.

खण्ड-A में प्रश्न संख्या **1 - 7** अति लघु उत्तरीय प्रकार के हैं। इनमें से किन्हीं **पाँच** प्रश्नों के उत्तर दीजिए। प्रत्येक प्रश्न का उत्तर दीजिए। प्रत्येक प्रश्न की अधिमानता 2 अंक निर्धारित है।

4. **Section-B** - Question Nos. **8 - 14** are Short answer type. Answer any five of these questions. Each question carries 3 marks.

खण्ड-B – प्रश्न संख्या **8 - 14** लघु उत्तरीय हैं। इनमें से किन्हीं **पाँच** प्रश्नों के उत्तर दीजिए। प्रत्येक प्रश्न का उत्तर दीजिए। प्रत्येक प्रश्न की अधिमानता **3** अंक निर्धारित है।

5. **Section-C** - Question Nos. **15 - 19** are Long answer type. Answer any three of these questions. Each question carries 5 marks.

खण्ड-C – प्रश्न संख्या **15 - 19** दीर्घ उत्तरीय हैं। इनमें से किन्हीं **तीन** प्रश्नों के उत्तर दीजिए। प्रत्येक प्रश्न का उत्तर दीजिए। प्रत्येक प्रश्न की अधिमानता **5** अंक निर्धारित है।

Section - A

खण्ड-A

(Very short answer type questions)

(अति लघु उत्तरीय प्रश्न)

Answer any five questions.

किन्हीं पाँच प्रश्नों के उत्तर दें।

1. If $f: R \rightarrow R$ and $g: R \rightarrow R$ are defined by $f(x) = \sqrt{x}$ and $g(x) = x^2$, then find $f \circ g(x)$.

यदि $f: R \rightarrow R$ तथा $g: R \rightarrow R$, $f(x) = \sqrt{x}$ तथा $g(x) = x^2$, से परिभाषित हैं, तो $f \circ g(x)$ ज्ञात कीजिए।

2. Prove that $\tan^{-1}\left(\frac{2}{11}\right) + \tan^{-1}\left(\frac{7}{24}\right) = \tan^{-1}\left(\frac{1}{2}\right)$.

सिद्ध करें कि $\tan^{-1}\left(\frac{2}{11}\right) + \tan^{-1}\left(\frac{7}{24}\right) = \tan^{-1}\left(\frac{1}{2}\right)$.

3. If $A = \begin{bmatrix} 2 & 3 & 5 \\ 4 & 6 & 2 \end{bmatrix}$ and $B = \begin{bmatrix} 2 & -4 \\ 1 & -3 \\ 4 & 0 \end{bmatrix}$, then find AB .

यदि $A = \begin{bmatrix} 2 & 3 & 5 \\ 4 & 6 & 2 \end{bmatrix}$ तथा $B = \begin{bmatrix} 2 & -4 \\ 1 & -3 \\ 4 & 0 \end{bmatrix}$, तो AB

ज्ञात कीजिए।

4. If $y = x^{\sin x}$, find $\frac{dy}{dx}$.

यदि $y = x^{\sin x}$, $\frac{dy}{dx}$ निकालें।

5. Find $\int \frac{\cos x}{\sqrt{1 + \sin x}} dx$.

ज्ञात करें $\int \frac{\cos x}{\sqrt{1 + \sin x}} dx$.

6. Solve the following differential equation.

$$\frac{dy}{dx} = \frac{1 + x^2}{1 + y^2}$$

निम्नलिखित अवकल समीकरण को हल करें:

$$\frac{dy}{dx} = \frac{1 + x^2}{1 + y^2}$$

7. Compute $P\left(\frac{A}{B}\right)$ if $P(B) = 0.5$ and $P(A \cap B) = 0.32$.

$P\left(\frac{A}{B}\right)$ ज्ञात कीजिए यदि $P(B) = 0.5$ तथा $P(A \cap B) = 0.32$.

Section - B
खण्ड - B
(Short answer type questions)
(लघु उत्तरीय प्रश्न)

Answer any five questions

किन्हीं पाँच प्रश्नों का उत्तर दें।

8. Prove that

$$\begin{vmatrix} x+\lambda & x & x \\ x & x+\lambda & x \\ x & x & x+\lambda \end{vmatrix} = (3x+\lambda).\lambda^2.$$

सिद्ध कीजिए कि

$$\begin{vmatrix} x+\lambda & x & x \\ x & x+\lambda & x \\ x & x & x+\lambda \end{vmatrix} = (3x+\lambda).\lambda^2.$$

9. If $f(x) = 2x + 5$, when $x \leq 2$
 $= 2x - 5$ When $x > 2$

then test the continuity of $f(x)$ at $x = 2$.

यदि $f(x) = 2x + 5$, जब $x \leq 2$
 $= 2x - 5$, जब $x > 2$

तो $x = 2$ पर $f(x)$ की संतता की जाँच करें।

10. Find the interval in which the function $f(x) = x^2 + 2x - 5$ is strictly increasing or strictly decreasing.

अंतराल ज्ञात कीजिए जिसमें फलन $f(x) = x^2 + 2x - 5$ निरंतर वर्धमान या निरंतर ह्रासमान है।

11. Evaluate $\int \frac{2x+1}{x^2+4x-3} dx$.

ज्ञात कीजिए $\int \frac{2x+1}{x^2+4x-3} dx$.

12. Evaluate $\int_0^{\pi/2} \frac{\sqrt{\tan x}}{\sqrt{\tan x} + \sqrt{\cot x}} dx$.

ज्ञात कीजिए $\int_0^{\pi/2} \frac{\sqrt{\tan x}}{\sqrt{\tan x} + \sqrt{\cot x}} dx$.

13. Find the area of a region bounded by the curve $y^2 = 4x$ and the straight line $x = 3$.

वक्र $y^2 = 4x$ तथा सरल रेखा $x = 3$ से घिरे क्षेत्र का क्षेत्रफल ज्ञात कीजिए।

14. Find the angle between the following pair of lines:

$$\vec{r} = (3\hat{i} + 2\hat{j} - 4\hat{k}) + \lambda(\hat{i} + 2\hat{j} + 2\hat{k}) \text{ and}$$

$$\vec{r} = (5\hat{i} - 2\hat{j} + \hat{k}) + t(3\hat{i} + 2\hat{j} + 6\hat{k}).$$

निम्नलिखित रेखायुग्मों के बीच का कोण ज्ञात कीजिए:

$$\vec{r} = (3\hat{i} + 2\hat{j} - 4\hat{k}) + \lambda(\hat{i} + 2\hat{j} + 2\hat{k}) \text{ तथा}$$

$$\vec{r} = (5\hat{i} - 2\hat{j} + \hat{k}) + t(3\hat{i} + 2\hat{j} + 6\hat{k}).$$

Section - C

खण्ड - C

(Long answer type questions)

(दीर्घ उत्तरीय प्रश्न)

Answer any three questions.

किन्हीं तीन प्रश्नों के उत्तर दें।

15. Solve the system of the linear equations, using matrix method:

$$3x - y + z = 5, 2x - 2y + 3z = 7, x + y - z = -1.$$

रैखिक समीकरण निकाय को आव्यूह विधि से हल करें:

$$3x - y + z = 5, 2x - 2y + 3z = 7, x + y - z = -1.$$

16. Find the maximum and minimum values of the given function:

$$f(x) = x^3 - 6x^2 + 9x + 5.$$

दिए गए फलन का महत्तम एवं न्यूनतम मान ज्ञात कीजिए:

$$f(x) = x^3 - 6x^2 + 9x + 5.$$

17. Find the shortest distance between the lines

$$\vec{r} = (\hat{i} + 2\hat{j} + 3\hat{k}) + t(2\hat{i} + 3\hat{j} + 4\hat{k}) \text{ and}$$

$$\vec{r} = (2\hat{i} + 4\hat{j} + 5\hat{k}) + \lambda(3\hat{i} + 4\hat{j} + 5\hat{k})$$

रेखाओं के बीच न्यूनतम दूरी ज्ञात कीजिए

$$\vec{r} = (\hat{i} + 2\hat{j} + 3\hat{k}) + t(2\hat{i} + 3\hat{j} + 4\hat{k}) \text{ तथा}$$

$$\vec{r} = (2\hat{i} + 4\hat{j} + 5\hat{k}) + \lambda(3\hat{i} + 4\hat{j} + 5\hat{k})$$

18. Solve the LPP graphically :

$$\text{Maximize } Z = 4x + y$$

Subject to constraints.

$$x + y \leq 5, 3x + y \leq 9, x \geq 0, y \geq 0.$$

रैखिक प्रोग्रामन समस्या को आलेखीय विधि से हल करें :

$$\text{अधिकतमीकरण कीजिए } Z = 4x + y$$

जबकि व्यवरोध

$$x + y \leq 5, 3x + y \leq 9, x \geq 0, y \geq 0.$$

19. A man is known to speak truth 3 times out of 5 times. He throws a die and reports that it is one (1) on the die. Find the the probability that it is actually one (1) on the die.

एक व्यक्ति के बारे में यह ज्ञात है कि वह 5 बार में 3 बार सत्य बोलता है। वह एक पासे को उछालता है और बताता है कि पासे पर आनेवाली संख्या एक (1) है। इसकी प्रायिकता ज्ञात कीजिए कि पासे पर आनेवाली संख्या वास्तव में एक (1) है।

Solutions (Subjective)

Section - A

खण्ड - A

1. $\text{fog}(x) = f[g(x)] = f(x^2) = \sqrt{x^2} = x.$

2.
$$\begin{aligned} \text{L.H.S} &= \tan^{-1} \frac{2}{11} + \tan^{-1} \frac{7}{24} \\ &= \tan^{-1} \frac{\frac{2}{11} + \frac{7}{24}}{1 - \frac{2}{11} \times \frac{7}{24}} = \tan^{-1} \frac{\frac{48 + 77}{264}}{\frac{264 - 14}{264}} \\ &= \tan^{-1} \frac{125}{250} = \tan^{-1} \frac{1}{2} = \text{R.H.S.} \end{aligned}$$

3.
$$\begin{aligned} AB &= \begin{bmatrix} 2 & 3 & 5 \\ 4 & 6 & 2 \end{bmatrix} \begin{bmatrix} 2 & -4 \\ 1 & -3 \\ 4 & 0 \end{bmatrix} \\ &= \begin{bmatrix} 4+3+20 & -8 & -9 & +0 \\ 8+6+8 & -16 & -18 & +0 \end{bmatrix} \\ &= \begin{bmatrix} 27 & -17 \\ 22 & -34 \end{bmatrix}. \end{aligned}$$

4. $\because y = x^{\sin x}$
taking log on both sides, we get
 $\log y = \log x^{\sin x} = \sin x \cdot \log x,$
differentiating both sides w.r.to x , we get
$$\frac{1}{y} \frac{dy}{dx} = \frac{1}{x} \cdot \sin x + \cos x \cdot \log x$$

$$\therefore \frac{dy}{dx} = y \left[\frac{\sin x}{x} + \cos x \cdot \log x \right]$$

$$= x^{\sin x} \left[\frac{\sin x}{x} + \cos x \cdot \log x \right].$$

5. Put $1 + \sin x = t$
 $\therefore \cos x dx = dt$
$$\therefore I = \int \frac{dt}{\sqrt{t}} = \int t^{-1/2} dt$$

$$= \frac{t^{-1/2+1}}{-1/2+1} + c = \frac{t^{1/2}}{1/2} + c.$$

$$= 2\sqrt{t} + c = 2\sqrt{1 + \sin x} + c.$$

6. $\because \frac{dy}{dx} = \frac{1+x^2}{1+y^2}$
 $\therefore (1+y^2)dy = (1+x^2)dx$
integrating both sides, we get

$$\int (1+y^2)dy = \int (1+x^2)dx$$

$$\Rightarrow y + \frac{y^3}{3} = x + \frac{x^3}{3} + c$$

Which is the required general solution.

7. $\therefore P(A/B) = \frac{P(A \cap B)}{P(B)} = \frac{0.32}{0.5} = \frac{32}{50} = \frac{16}{25}.$

Section - B

8.
$$\Delta = \begin{vmatrix} x+\lambda & x & x \\ x & x+\lambda & x \\ x & x & x+\lambda \end{vmatrix}$$

By $c_1 \rightarrow c_1 + c_2 + c_3$, we have

$$\Delta = \begin{vmatrix} 3x+\lambda & x & x \\ 3x+\lambda & x+\lambda & x \\ 3x+\lambda & x & x+\lambda \end{vmatrix}$$

$$= (3x+\lambda) \begin{vmatrix} 1 & x & x \\ 1 & x+\lambda & x \\ 1 & x & x+\lambda \end{vmatrix}$$

By $R_1 \rightarrow R_1 - R_2$ and $R_3 \rightarrow R_3 - R_2$, We get

$$\Delta = (3x+\lambda) \begin{vmatrix} 0 & -\lambda & 0 \\ 1 & x+\lambda & x \\ 0 & -\lambda & \lambda \end{vmatrix}$$

Resolving along R_1 , We get

$$\Delta = (3x+\lambda)\lambda \begin{vmatrix} 1 & x \\ 0 & \lambda \end{vmatrix}$$

$$= (3x+\lambda)\lambda(\lambda-0) = (3x+\lambda) \cdot \lambda^2$$

$\therefore \Delta = (3x+\lambda) \cdot \lambda^2$. Proved.

9. We have,

$$\begin{aligned} \text{L.H. limit} &= \lim_{h \rightarrow 0} f(2-h) \\ &= \lim_{h \rightarrow 0} \{2(2-h) + 5\} = 9. \end{aligned}$$

$$\begin{aligned} \text{R.H. limit} &= \lim_{h \rightarrow 0} f(2+h) \\ &= \lim_{h \rightarrow 0} \{2(2+h) - 5\} = -1. \end{aligned}$$

since L.H. limit \neq R.H. limit

$\therefore f(x)$ is not continuous at $x = 2$.

10. We have $f(x) = x^2 + 2x - 5$

$$\therefore f'(x) = 2x + 2$$

$f(x)$ is strictly increasing if $f'(x) > 0$

$$\Rightarrow 2x + 2 > 0 \Rightarrow x > -1$$

i.e $x \in (-1, \infty)$

$f(x)$ is strictly decreasing if $f'(x) < 0$

$$\Rightarrow 2x + 2 < 0 \Rightarrow x < -1$$

i.e $x \in (-\infty, -1)$

hence $f(x)$ is strictly increasing on $(-1, \infty)$

and strictly decreasing on $(-\infty, -1)$.

$$\begin{aligned} 11. \quad I &= \int \frac{2x+1}{x^2+4x-3} dx \\ &= \int \frac{2x+4-3}{x^2+4x-3} dx \\ &= \int \frac{2x+4}{x^2+4x-3} dx - \int \frac{3}{x^2+4x-3} dx \end{aligned}$$

$$= I_1 - I_2$$

$$\text{Where } I_1 = \int \frac{2x+4}{x^2+4x-3} dx$$

$$\text{and } I_2 = \int \frac{3}{x^2+4x-3} dx$$

$$\text{Now, } I_1 = \int \frac{2x+4}{x^2+4x-3} dx$$

$$\text{Put } x^2+4x-3 = t$$

$$\therefore (2x+4)dx = dt$$

$$\therefore I_1 = \int \frac{dt}{t} = \log|t| + c_1$$

$$= \log|x^2+4x-3| + c_1$$

$$\text{and } I_2 = \int \frac{3}{x^2+4x-3} dx = \int \frac{3}{x^2+4x+4-7} dx$$

$$= \int \frac{3}{(x+2)^2 - (\sqrt{7})^2} dx = \frac{3}{2\sqrt{7}} \log \left| \frac{x+2-\sqrt{7}}{x+2+\sqrt{7}} \right| + c_2$$

$$\therefore I = I_1 - I_2$$

$$= \log|x^2+4x-3| + c_1 - \frac{3}{2\sqrt{7}} \log \left| \frac{x+2-\sqrt{7}}{x+2+\sqrt{7}} \right| - c_2$$

$$= \log|x^2+4x-3| - \frac{3}{2\sqrt{7}} \log \left| \frac{x+2-\sqrt{7}}{x+2+\sqrt{7}} \right| + c$$

Where $c_1 - c_2 = c$.

$$12. \quad I = \int_0^{\pi/2} \frac{\sqrt{\tan x}}{\sqrt{\tan x} + \sqrt{\cot x}} dx \dots \dots \dots (i)$$

$$= \int_0^{\pi/2} \frac{\sqrt{\tan(\frac{\pi}{2}-x)}}{\sqrt{\tan(\frac{\pi}{2}-x)} + \sqrt{\cot(\frac{\pi}{2}-x)}} dx$$

$$I = \int_0^{\pi/2} \frac{\sqrt{\cot x}}{\sqrt{\cot x} + \sqrt{\tan x}} dx \dots \dots \dots (ii)$$

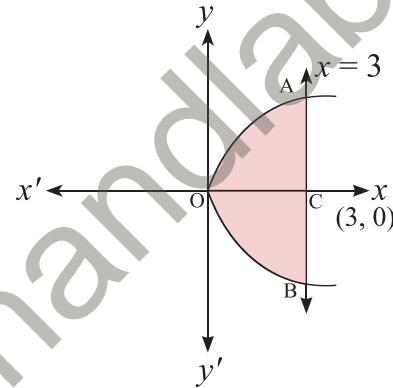
Adding (i) and (ii), we get

$$2I = \int_0^{\pi/2} \frac{\sqrt{\tan x} + \sqrt{\cot x}}{\sqrt{\tan x} + \sqrt{\cot x}} dx = \int_0^{\pi/2} 1 dx.$$

$$= [x]_0^{\pi/2} = \frac{\pi}{2} - 0 = \frac{\pi}{2}$$

$$\therefore I = \frac{\pi}{4}.$$

13.



Given curve is $y^2 = 4x$ (i)

and line is $x = 3$(ii)

Curve (i) is a parabola with vertex (0, 0), axis x-axis.

\therefore Required area = 2(area of region OACO)

$$= 2 \int_0^3 y dx = 2 \int_0^3 \sqrt{4x} dx$$

$$= 4 \int_0^3 \sqrt{x} dx = 4 \times \frac{2}{3} [x^{3/2}]_0^3$$

$$= \frac{8}{3} \times (3)^{3/2} = 8 \times 3^{3/2-1} = 8 \times 3^{1/2}$$

$$= 8\sqrt{3} \text{ sq.unit}$$

$$14. \quad \text{We have } \vec{a} = \hat{i} + 2\hat{j} + 2\hat{k} \\ \text{and } \vec{b} = 3\hat{i} + 2\hat{j} + 6\hat{k}$$

Let θ be the angle between them.

$$\begin{aligned} \therefore \cos \theta &= \left| \frac{\vec{a} \cdot \vec{b}}{|\vec{a}| |\vec{b}|} \right| \\ &= \left| \frac{3 + 4 + 12}{\sqrt{1^2 + 2^2 + 2^2} \sqrt{3^2 + 2^2 + 6^2}} \right| \\ &= \frac{19}{3 \times 7} = \frac{19}{21} \end{aligned}$$

$$\theta = \cos^{-1} \frac{19}{21}.$$

Section - C

15. Given equations are

$$3x - y + z = 5 \dots\dots\dots(i)$$

$$2x - 2y + 3z = 7 \dots\dots\dots(ii)$$

$$\text{and } x + y - z = -1 \dots\dots\dots(iii)$$

Matrix form of the system of equation is $Ax = B$, Where

$$A = \begin{bmatrix} 3 & -1 & 1 \\ 2 & -2 & 3 \\ 1 & 1 & -1 \end{bmatrix}, X = \begin{bmatrix} x \\ y \\ z \end{bmatrix} \text{ and } B = \begin{bmatrix} 5 \\ 7 \\ -1 \end{bmatrix}$$

$$\text{Now } |A| = \begin{vmatrix} 3 & -1 & 1 \\ 2 & -2 & 3 \\ 1 & 1 & -1 \end{vmatrix}$$

$$= 3(2 - 3) + 1(-2 - 3) + 1(2 + 2)$$

$$= 3(-1) + 1(-5) + 1(4) = -3 - 5 + 4 = -4 \neq 0$$

\therefore matrix A is non-singular. Here A^{-1} exists.

Now, Cofactors of elements of $|A|$ are,

$$A_{11} = \begin{vmatrix} -2 & 3 \\ 1 & -1 \end{vmatrix} = -1, A_{12} = -\begin{vmatrix} 2 & 3 \\ 1 & -1 \end{vmatrix} = 5, A_{13} = \begin{vmatrix} 2 & -2 \\ 1 & 1 \end{vmatrix} = 4$$

$$A_{21} = \begin{vmatrix} -1 & 1 \\ 1 & -1 \end{vmatrix} = 0, A_{22} = \begin{vmatrix} 3 & 1 \\ 1 & -1 \end{vmatrix} = -4, A_{23} = -\begin{vmatrix} 3 & -1 \\ 1 & 1 \end{vmatrix} = -4$$

$$A_{31} = \begin{vmatrix} -1 & 1 \\ -2 & 3 \end{vmatrix} = -1, A_{32} = -\begin{vmatrix} 3 & 1 \\ 2 & 3 \end{vmatrix} = -7, A_{33} = \begin{vmatrix} 3 & -1 \\ 2 & -2 \end{vmatrix} = -4$$

$$\therefore \text{adj} = \begin{bmatrix} A_{11} & A_{21} & A_{31} \\ A_{12} & A_{22} & A_{32} \\ A_{13} & A_{23} & A_{33} \end{bmatrix} = \begin{bmatrix} -1 & 0 & -1 \\ 5 & -4 & -7 \\ 4 & -4 & -4 \end{bmatrix}$$

$$\therefore A^{-1} = \frac{1}{|A|} \text{adj}A = \frac{-1}{4} \begin{bmatrix} -1 & 0 & -1 \\ 5 & -4 & -7 \\ 4 & -4 & -4 \end{bmatrix}$$

$$\therefore x = A^{-1}B.$$

$$\therefore \begin{bmatrix} x \\ y \\ z \end{bmatrix} = \frac{-1}{4} \begin{bmatrix} -1 & 0 & -1 \\ 5 & -4 & -7 \\ 4 & -4 & -4 \end{bmatrix} \begin{bmatrix} 5 \\ 7 \\ -1 \end{bmatrix}$$

$$= \frac{-1}{4} \begin{bmatrix} -5 + 0 + 1 \\ 25 - 28 + 7 \\ 20 - 28 + 4 \end{bmatrix} = \frac{-1}{4} \begin{bmatrix} -4 \\ 4 \\ -4 \end{bmatrix}$$

$$\therefore \begin{bmatrix} x \\ y \\ z \end{bmatrix} = \begin{bmatrix} 1 \\ -1 \\ 1 \end{bmatrix} \Rightarrow x = 1, y = -1, z = 1.$$

16. Given function is $f(x) = x^3 - 6x^2 + 9x + 5$

$$\therefore f'(x) = 3x^2 - 12x + 9 \dots\dots\dots(i)$$

\therefore For maximum or minimum value of $f(x)$, $f'(x) = 0$

$$\Rightarrow 3x^2 - 12x + 9 = 0$$

$$\text{or, } x^2 - 4x + 3 = 0$$

$$\text{or, } (x - 1)(x - 3) = 0 \Rightarrow x = 1 \text{ or } 3$$

$$\therefore \text{ from (i), } f''(x) = 6x - 12$$

$$\therefore f''(1) = 6 \times 1 - 12 = -6 < 0$$

$$\therefore f(x) \text{ is maximum at } x = 1$$

$$\therefore \text{Maximum value} = (1)^3 - 6(1)^2 + 9 \cdot 1 + 5 \\ = 1 - 6 + 9 + 5 = 9$$

$$\text{and } f''(3) = 6 \times 3 - 12 = 6 > 0$$

$$\therefore f(x) \text{ is minimum at } x = 3$$

$$\therefore \text{minimum value} = (3)^3 - 6(3)^2 + 9 \times 3 + 5 \\ = 27 - 54 + 27 + 5 = 5.$$

17. Given lines are

$$\vec{r} = (\hat{i} + 2\hat{j} + 3\hat{k}) + t(2\hat{i} + 3\hat{j} + 4\hat{k}) \dots\dots\dots(i)$$

$$\text{and } \vec{r} = (2\hat{i} + 4\hat{j} + 5\hat{k}) + \lambda(3\hat{i} + 4\hat{j} + 5\hat{k}) \dots\dots\dots(ii)$$

$$\text{Here } \vec{a}_1 = \hat{i} + 2\hat{j} + 3\hat{k}, \vec{a}_2 = 2\hat{i} + 4\hat{j} + 5\hat{k}$$

$$\vec{b}_1 = 2\hat{i} + 3\hat{j} + 4\hat{k} \text{ and } \vec{b}_2 = 3\hat{i} + 4\hat{j} + 5\hat{k}$$

$$\text{Now, } \vec{a}_2 - \vec{a}_1 = (2\hat{i} + 4\hat{j} + 5\hat{k}) - (\hat{i} + 2\hat{j} + 3\hat{k}) \\ = \hat{i} + 2\hat{j} + 2\hat{k}$$

$$\text{and } \vec{b}_1 \times \vec{b}_2 = \begin{vmatrix} \hat{i} & \hat{j} & \hat{k} \\ 2 & 3 & 4 \\ 3 & 4 & 5 \end{vmatrix}$$

$$= \hat{i}(15 - 16) - \hat{j}(10 - 12) + \hat{k}(8 - 9) \\ = -\hat{i} + 2\hat{j} - \hat{k}$$

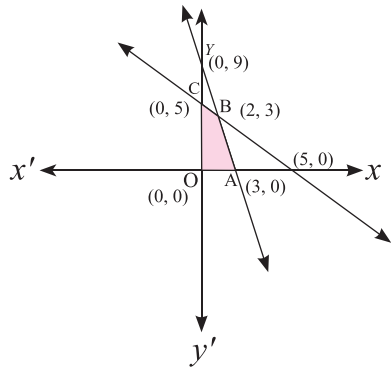
\therefore Shortest distance between (i) and (ii) is

$$d = \left| \frac{(\vec{a}_2 - \vec{a}_1) \cdot (\vec{b}_1 \times \vec{b}_2)}{|\vec{b}_1 \times \vec{b}_2|} \right| \\ = \left| \frac{(\hat{i} + 2\hat{j} + 2\hat{k}) \cdot (-\hat{i} + 2\hat{j} - \hat{k})}{\sqrt{1 + 4 + 1}} \right| \\ = \left| \frac{-1 + 4 - 2}{\sqrt{6}} \right| = \frac{1}{\sqrt{6}} \text{ units.}$$

18. First of all we draw the graph of lines.

$$x + y = 5 \dots\dots\dots(i)$$

$$3x + y = 9 \dots\dots\dots(ii)$$



Shaded region OABCD is the feasible region, Which is bounded. Its vertices are O(0, 0), A(3, 0), B(2, 3) and C(0, 5).

$$\text{Now, } z = 4x + y.$$

$$\therefore \text{ At } O(0, 0), z = 4 \times 0 + 0 = 0$$

$$\text{At } A(3, 0), z = 4 \times 3 + 0 = 12$$

$$\text{At } B(2, 3), z = 4 \times 2 + 3 = 11$$

$$\text{At } C(0, 5), z = 4 \times 0 + 5 = 5$$

\therefore Clearly, z is maximum at A(3, 0) and maximum value is 12.

19. Let A = Man reports that 1 comes on die.

Let A_1 = Event of getting 1 on the die.

and A_2 = Event of not getting 1 on the die.


$$\therefore P(A_1) = \frac{1}{6} \text{ and } P(A_2) = \frac{5}{6}$$

$$\text{Now, } P(A/A_1) = \frac{3}{5} \text{ and } P(A/A_2) = \frac{2}{5}$$

\therefore By Baye's theorem,

$$P(A_1/A) = \frac{P(A_1) \cdot P(A/A_1)}{P(A_1) \cdot P(A/A_1) + P(A_2) \cdot P(A/A_2)}$$

$$\frac{\frac{1}{6} \times \frac{3}{5}}{\frac{1}{6} \times \frac{3}{5} + \frac{5}{6} \times \frac{2}{5}} = \frac{\frac{3}{30}}{\frac{3}{30} + \frac{10}{30}} = \frac{3}{13}$$



झारखण्ड शैक्षिक अनुसंधान एवं प्रशिक्षण परिषद्, राँची
Jharkhand Council of Educational Research and Training, Ranchi